



5.  $\angle EBD$  and  $\angle DBC$  are acute

a  
n gles.

6.  $\angle ABE$  and  $\angle CBE$  are right angles.

7.  $\angle ABC$  is a straight angle.

8.  $\angle ABD$  is an obtuse angle.

2  $\angle BDE = 90^\circ - 44^\circ = 46^\circ$

3.  $\angle BDF = 180^\circ - 46^\circ = 134^\circ$

$$\angle BDE = 90^\circ - 44^\circ = 46^\circ$$

2  $\angle ABE = 90^\circ + 46^\circ = 136^\circ$

4.

25.  $\angle DEB = 44^\circ$

9. The complement of  $\angle CBD = 65^\circ$  is  $25^\circ$ .

10. The supplement of  $\angle CBD = 65^\circ$  is

$$180^\circ - 65^\circ = 115^\circ.$$

11. Sides  $BD$  and  $BC$  are adjacent to  $\angle DBC$

12. The angle adjacent to  $\angle DBC$  is  $\angle DBE$

13.  $\angle AOB = 90^\circ + 50^\circ = 140^\circ$

14.  $\angle AOC = 90^\circ - 50^\circ = 40^\circ$

26.  $\angle DBE = 46^\circ$

27.  $\angle DFE = 90^\circ - \angle FDE$   
 $= 90^\circ - 44^\circ$   
 $= 46^\circ$

28.  $\angle ADE = \angle ADB + 90^\circ$   
 $= (90^\circ - 44^\circ) + 90^\circ$   
 $= 136^\circ$

29.  $\frac{a}{4.75} = \frac{3.05}{3.20} \Rightarrow a = 4.75 \cdot \frac{3.05}{3.20} = 4.53 \text{ m}$   
0

30.  $\frac{3.20}{b} = \frac{6.25}{3.05}$

3.05  $b$

$b = 5.96 \text{ m}$

31.  $\frac{c}{4.53} = \frac{5.50}{3.05} = \frac{5.50}{3.05}$

3.05  $a$  4.53

$4.53c = 15.4025$

$c = 3.40 \text{ m}$

32.  $\frac{4.75}{5.05} = \frac{6.25}{d}$

5.05  $d$

$d = 6.64 \text{ m}$

3  $\angle BHC = \angle CGD$

3.  $= 25^\circ$

34.  $\angle AHC = \angle CGE = 45^\circ$

35.  $\angle BCH = \angle CHG = \angle HGC = \angle GCD = 65^\circ$

3  $\angle HAB = \angle JHA = \angle FGE =$

6.  $\angle DEG = 70^\circ$

3  $\angle GHA = \angle HGE = 110^\circ$

7.

38  $\angle CGF = \angle CHJ = 115^\circ$

.

3  $\angle A = (x+10)^\circ$ ,  $\angle B = (4x$

9.  $-5)^\circ$  (a)  $x+10 = 4x-5$

$x = 5^\circ$

(b)  $x+10+4x-5 =$

180

$x = 35^\circ$

43.  $\frac{2}{2.15} = \frac{3}{AB} \Rightarrow AB = 3.225$

2.15  $AB$

$AC = 2.15 + 3.23 = 5.38 \text{ cm}$

44.  $\frac{x}{860} = \frac{590}{550}$

860 550

$x = 920 \text{ m}$

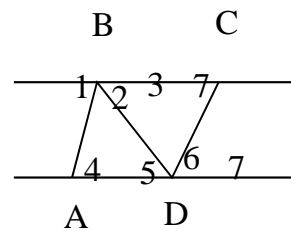
4  $\angle 1 + \angle 2 + \angle 3 = 180^\circ$ ,

5. ( $\angle 1$ ,  $\angle 2$ , and  $\angle 3$  form a straight line)

46.  $\angle 4 + \angle 2 + \angle 5 = 180^\circ$ , ( $\angle 1 = \angle 4$ ,  $\angle 3 = \angle 5$ )

47. The sum of the angles of  $ABD$  is  $180^\circ$ .

48.



$\angle 1 + \angle 2 + \angle 3 = 180^\circ$ ,  $\angle 1 = \angle 4$

$\angle 4 + \angle 2 + \angle 3 = 180^\circ$

$\angle 5 + \angle 6 + \angle 7 = 180^\circ$

$\angle 4 + (\angle 2 + \angle 3) + (\angle 5 + \angle 6) + \angle 7 = 180^\circ$

$+ 180^\circ$

$= 360^\circ$

The sum of the angles of  $ABCD = 360^\circ$

40.  $\angle A = (x + 20)^\circ$ ,  $\angle B = (3x - 2)^\circ$  (a)  $x + 20 + 3x - 2 = 90^\circ$

$$x = 18^\circ$$

(b)  $x + 20 = 3x - 2$

$$x = 11^\circ$$

41.  $\angle BCD = 180^\circ - 47^\circ = 133^\circ$

42.  $? = 90^\circ - 28^\circ$

$$= 62^\circ$$

## 2.2 Triangles

$$1. \angle 5 = 45^\circ \Rightarrow \angle 3 = 45^\circ$$

$$\angle 2 = 180^\circ - 70^\circ - 45^\circ = 65^\circ$$

$$2. A = \frac{1}{2}bh = \frac{1}{2}(61.2)(5.75)$$

$$A = 176 \text{ in.}^2$$

$$3. AC^2 = AB^2 + BC^2$$

$$= 6.25^2 + 3.2^2$$

$$AC = \sqrt{6.25^2 + 3.2^2}$$

$$AC = 7.02 \text{ m}$$

$$4. \frac{h}{3.0} = \frac{24}{4.0}$$

$$h = 18 \text{ ft}$$

$$5. \angle A = 180^\circ - 84^\circ - 40^\circ$$

$$6. \angle A = 90^\circ - 48^\circ = 42^\circ$$

$$7. \text{ This is an isosceles triangle, so the base angles are equal. } \angle A = 180^\circ - (66^\circ + 66^\circ) = 48^\circ$$

$$8. \angle A = \frac{1}{2}(180^\circ - 110^\circ) = 35^\circ$$

$$9. A = \frac{1}{2}bh = \frac{1}{2}(7.6)(2.2) = 8.4 \text{ ft}^2$$

$$10. A = \frac{1}{2}bh = \frac{1}{2}(16.0)(7.62) =$$

$$12. p = 0.862 + 0.235 + 0.684 = 1.781 \text{ in.}$$

$$s = \frac{1.781}{2} = 0.8905$$

$$A = \sqrt{s(s-a)(s-b)(s-c)}$$

$$= \frac{.8905(.8905 - .862)(.8905 - .235)(.8905 - .684)}{\sqrt{}}$$

$$A = 0.586 \text{ in.}^2$$

$$1. A = \frac{1}{2}bh = \frac{1}{2}(3.46)(2.55) = 4.41 \text{ ft}^2$$

$$1. A = \frac{1}{2}bh = \frac{1}{2}(234)(342) = 40,000 \text{ mm}^2$$

$$4. \quad 2 \quad 2$$

### 15. Area

$$= \frac{\sqrt{1.428(1.428 - 0.986)(1.428 - 0.986)(1.428 - 0.884)}}{\sqrt{}}$$

$$= 0.390 \text{ m}^2$$

$$1. s = \frac{3(320)}{2} = 480$$

$$6. A = \frac{\sqrt{s(s-a)^3}}{\sqrt{}}$$

$$= \frac{\sqrt{480(480 - 320)^3}}{\sqrt{}}$$

$$61.0 \text{ mm}^2$$



$$\begin{array}{r} = \\ 4 \\ 4 \\ , \\ 0 \\ 2 \end{array} \begin{array}{l} 0 \\ 0 \\ y \\ d \\ 2 \\ 2 \end{array}$$

**1**  $p = 205 + 322 + 415$

**7.**  $p = 942 \text{ cm}$

$$p = 23.5 + 86.2 + 68.4$$

**1**  
**8.**  $p = 178 \text{ in.}$

**19.**  $3(21.5) = 64.5 \text{ cm}$

**11.** Area  $= \sqrt{471(471-205)(471-415)(471-322)}$     **20.** Perimeter  $= 2(2.45) + 3.22 = 8.12$  in.  
 $= 32,300$   
 $\text{cm}^2$

**21.**  $c = \sqrt{13.8^2 + 22.7^2} = 26.6$  ft  
=

**22.**  $c^2 = a^2 + b^2$

$$= 2.48^2 + 1.45^2$$

m

$$c = 2.87$$

$$23. b = \sqrt{551^2 - 175^2} = 522 \text{ cm}$$

2  $c^2 = a^2 + b^2$   
 4.  $0.836^2 = a^2 + 0.474^2$   
 $a = 0.689$  in.

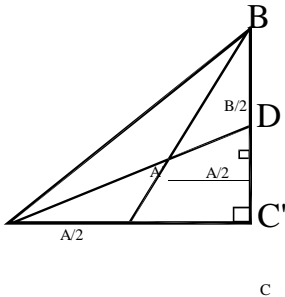
2  $\angle B = 90^\circ - 23^\circ =$   
 5.  $67^\circ$

26.  $c^2 = 90.5^2 + 38.4^2$   
 $c = 98.3$  cm

27. Perimeter =  $98.3 + 90.5 + 38.4 = 227.2$  cm

28.  $A = \frac{1}{2} (90.5)(38.4) = 1740$  cm<sup>2</sup>

29.



A

$\triangle ADC \sim \triangle A'DC' \Rightarrow \angle DA'C' = A/2$

$\angle$  between bisectors =  $\angle BA'D$

$\triangle BA'D \text{ has } \frac{B}{2} + (\frac{\angle BA'D + A}{2}) = 90^\circ$

from which  $\angle BA'D = \left( 90^\circ - \frac{A+B}{2} \right)$

$\angle BA'D = \left( \frac{90^\circ}{2} - \frac{A+B}{2} \right) = 45^\circ - \frac{A+B}{2}$

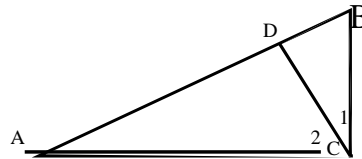
30.



31. An equilateral triangle.

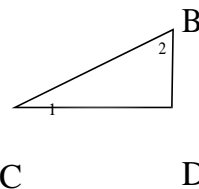
32. Yes, if one of the angles of the triangle is obtuse.

33.



$\angle A + \angle B = 90^\circ$   
 $\angle 1 + \angle B = 90^\circ$   
 $\Rightarrow \angle A = \angle 1$

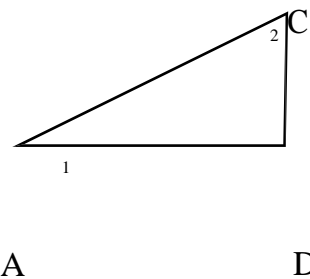
redraw  $\triangle BDC$  as



$\angle 1 + \angle 2 = 90^\circ$   
 $\angle 1 + \angle B = 90^\circ$

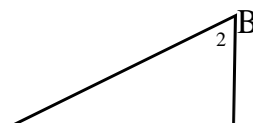
$\Rightarrow \angle 2 = \angle B$

and  $\triangle ADC$  as



$\triangle BDC$  and  $\triangle ADC$  are similar.

34. Comparing the original triangle



B

C

A E D

$\angle A = \angle D$  since  $\triangle AFD$  is isosceles.  
Since  $AF = FD$  ( $\triangle AFD$  is isosceles) and since  $B$  and  $C$  are mid-points,  $AB = CD$  which means  $\triangle BAE$  and  $\triangle CED$  are the same size and shape. Therefore,  $BE = EC$   
from which it follows that the inner  $\triangle BCE$  is isosceles.

A 1 C

to the two smaller triangles shows that all three are similar.

35.  $\angle LMK$  and  $\angle OMN$  are vertical angles and thus equal  $\Rightarrow \angle KLM = \angle MON$ . The corresponding angles are equal and the triangles are similar.

36.  $\angle ACB = \angle ADC = 90^\circ$ ;  $\angle DCA = \angle CBA$ ,  
 $\angle A = \angle A$ ;  
 therefore  $\triangle ACB \sim \triangle ADC$

37. Since  $\triangle MKL \sim \triangle MNO$ ;  $KN = KM - MN$ ;  
 $15 - 9 = 6$   
 $= KM$ ;  $\frac{KM}{LM} = \frac{LM}{LM}$ ;  $\frac{6}{LM} = \frac{LM}{LM}$ ;  $9LM = 72$ ;  
 $LM = 8$

$$\frac{MN}{MO} = \frac{9}{12}$$

44.

38.  $\frac{AB}{12} = 12$

$$\frac{12}{AB} = \frac{9}{16}$$

39.  $p = 6 + 25 + 29 = 60$

$$A = \sqrt{30(30-6)(30-25)(30-29)} = 60$$

Yes, the triangle is perfect.

=



$$\frac{80.0 \text{ street}}{\text{in.}}$$

$$\frac{\text{street}}{4.0} = \frac{20.0}{1} \Rightarrow \text{street} = 4.0(20.0)$$

$$\text{ramp} = \sqrt{(4.0(20.0))^2 + 4.0^2} = 80.09993758,$$

calculator

ramp = 80 in. (two significant digits)

$$(18.0 - y)^2 = y^2 + 8.0^2$$

$$18.0^2 - 2(18.0)y + y^2 = y^2 + 8.0^2$$

$$y = 7.2 \text{ ft (two significant digits)}$$

$$\frac{3(1600)}{2} = 2400$$

$$A = \sqrt{2400(2400 - 1600)}^3$$

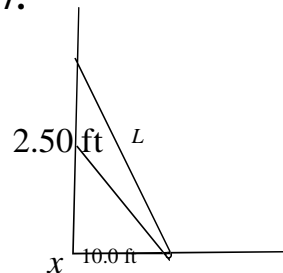
$$A = 1,100,000 \text{ km}^2$$

$$A = \frac{1}{2}bh = \frac{1}{2}(8.0)(15) = 60 \text{ ft}^2$$

45

46.  $d = \sqrt{750^2 + 550^2} = 930 \text{ m}$

47.



$$10.0^2 = x^2 + 6.00^2$$

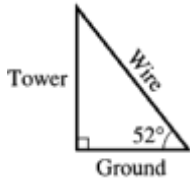
$$10.0^2 = x^2 + 6.00^2$$

$$\underline{41.} \quad \angle = \frac{180^\circ}{2} - 50^\circ = 65^\circ$$

$$x = 8.00$$
$$L = \sqrt{(8.00 + 2.50)^2 + 6.00^2}$$



42. angle between tower and wire =  $90^\circ - 52^\circ = 38^\circ$

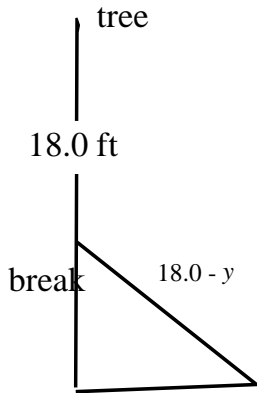


$L = 12.09338662$ , calculator

$L = 12.1$  ft (three significant digits)

48. Taking the triangles in clockwise order and using Pythagorean Theorem together with side opposite  $30^\circ$  angle is half the hypotenuse gives side opposite  $30^\circ$  angle and third side, respectively.

43.

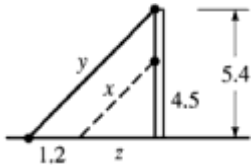


49.  $d = \sqrt{18^2 + 12^2 + 8^2} = 23$  ft

50.  $\frac{x}{45.6} = \frac{1}{1.12}$ ,  $x = 38$  m

8.0 ft

51.



$$\frac{4.5}{z} = \frac{5.4}{1.2 + z}$$

$$z = 6.0 \text{ m}$$

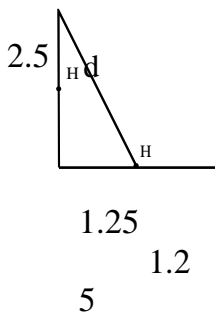
$$x^2 = z^2 + 4.5^2$$

$$x = 7.5 \text{ m}$$

$$y^2 = (1.2 + 6)^2 + 5.4^2$$

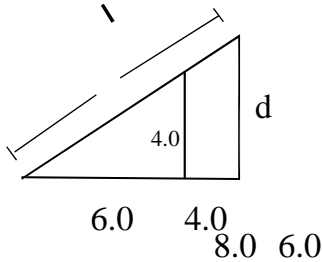
$$y = 9.0 \text{ m}$$

5  
2.



$$d^2 = 1.25^2 + 5.0^2$$

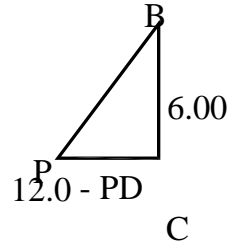
$$d = 5.6 \text{ ft}$$



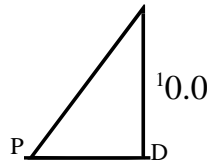
$$d = 4.0$$

$$\frac{\dots}{\dots} = \frac{\dots}{\dots} \Rightarrow d$$

55. Redraw  $\triangle BCP$  as



$\triangle APD$  is



from which  $\triangle BCP \sim \triangle ADP$ , so  $\frac{6.00}{10.0}$

$$\Rightarrow PD = 7.50 \text{ and } PC = 12.0 - PD = 4.50$$

$$l = PB + PA = \sqrt{4.50^2 + 6.00^2} + \sqrt{7.50^2 + 10.0^2}$$

$$l = 20.0 \text{ mi}$$

$$\frac{1}{2} wd + 160 = \frac{1}{2} w d + 16$$

5  
6.

$$\frac{1}{2} wd + 160 = \frac{1}{2} wd + 8w$$

$$8w = 160$$

$$w = 20 \text{ cm}$$

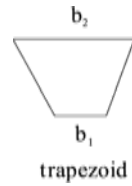
$$d = w - 12 = 8 \text{ cm}$$

---

## 2.3 Quadrilaterals

$$l^2 = 8.0^2 + d^2 = 8.0^2 + \left( \frac{4.0(8.0)}{6.0} \right)^2$$

$$l = 9.6 \text{ ft}$$



54.  $\frac{ED}{312} =$

$$\frac{80 \quad 50}{ED} = 499$$

ft

2.  $L = 4s + 2w + 2l$

$$= 4(21) + 2(21) + 2(36)$$

$$= 198 \text{ in.}$$

$$3. A = \frac{1}{2}bh = \frac{1}{2}(72)(55) = 2000 \text{ ft}^2$$

$$A_{\frac{1}{2}} = \frac{1}{2}bh = \frac{1}{2}(72)(55) = 4000 \text{ ft}^2$$

$$A_{\frac{3}{2}} = \frac{1}{2}h(b_1 + b_2) = \frac{1}{2}(55)(72 + 35) \\ = 2900 \text{ ft}^2$$

The total lawn area is about  $8900 \text{ ft}^2$ .

$$4. 2(w + 3.0) + 2w = 26.4$$

$$2w + 6.0 + 2w = 26.4$$

$$4w = 20.4$$

$$w = 5.1 \text{ mm}$$

$$w + 3.0 = 8.1 \text{ mm}$$

$$5. p = 4s = 4(65) = 260 \text{ m}$$

$$6. p = 4(2.46) = 9.84 \text{ ft}$$

$$7. p = 2(0.920) + 2(0.742) = 3.324 \text{ in.}$$

$$8. p = 2(142) + 2(126) = 536 \text{ cm}$$

$$9. p = 2l + 2w = 2(3.7) + 2(2.7) = 12.8 \text{ m}$$

$$1. p = 2(27.3) + 2(14.2) = 83.0 \text{ in.}$$

0.

$$p = 0.362 + 0.730 + 0.440 + 0.612 = 2.144 \text{ ft}$$

1.

$$p = 272 + 392 + 223 + 672 = 1559 \text{ cm}$$

2.

$$A = s^2 = 2.7^2 = 7.3 \text{ mm}^2$$

1

3.

$$20. A = \frac{1}{2}(392 + 672)(201) = 107,000 \text{ cm}^2$$

$$21. p = 2b + 4a$$

$$22. p = a + b + b + a + (b - a) + (b - a)$$

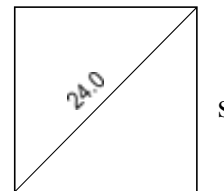
$$23. = 4b \quad A = b \times h + a^2 = bh + a^2$$

$$24. A = ab + a(b - a) = 2ab - a^2$$

25. The parallelogram is a rectangle.

26. The triangles are congruent. Corresponding sides and angles are equal.

27.



$s$

$$s^2 + s^2 = 24.0^2$$

$$2s^2 = 24.0^2$$

$$s^2 = \frac{24.0^2}{2}$$

$$A = s^2 = 288 \text{ cm}^2$$

14 ·

15.

$$A = 15.6^2 = 243 \text{ ft}^2$$

28.

$$\frac{\quad}{2}$$

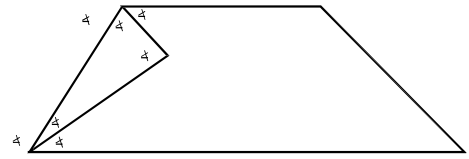
B

$$A = 0.92 \cdot 0 \cdot (0.7 + 42) = 0.68 \cdot 3 \text{ in.}^2$$

A

A

C



16.  $A = 142(126) = 17,900 \text{ cm}^2$

$$\frac{B}{2 \quad A \quad B}$$

17.  $A = bh = 3.7(2.5) = 9.3 \text{ m}^2$

At top  $2\angle B + 2\angle A = 180^\circ$

$$\angle B + \angle A = 90^\circ$$

$$A = 27.3(12.6) = 344 \text{ in.}^2$$

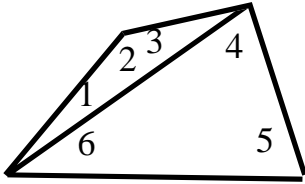
18. 19.

$A =$  In triangle  
 $(1$   
 $/ 2)$   
 $(29.8$   
 $)$   
 $(61.$   
 $2$   
 $+$   
 $73.0)$   
 $=$   
 $200$   
 $0$   
 $\text{ft}^2$

$$\begin{aligned}
 & \angle A + \angle B \\
 & + \angle C = \\
 & 180^\circ \\
 & \quad 90^\circ \\
 & \quad + \\
 & \quad \angle C \\
 & = \\
 & 180^\circ \\
 & \quad \angle \\
 & \quad C \\
 & = \\
 & 9 \\
 & 0 \\
 & \circ
 \end{aligned}$$



29



$$\begin{aligned} & \text{sum of interior angles} \\ & = \sphericalangle 1 + \sphericalangle 2 + \sphericalangle 3 + \sphericalangle 4 + \sphericalangle 5 + \sphericalangle 6 \\ & = 180^\circ + 180^\circ \\ & = 360^\circ \end{aligned}$$

3  $S = 180(n - 2)$

0. (a)  $n = \frac{S}{180} + 2$

(b)  $n = \frac{3600^\circ}{180^\circ} + 2$   
 $n = 22$

$A$  = area of left rectangle + area of right rectangle

3  $A = ab + ac$

1.  $A$  = area of entire rectangle

$A = a(b + c)$  which illustrates the distributive property.

32.  $A = (a + b)(a + b) = (a + b)^2$

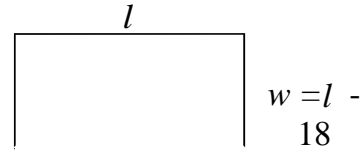
$$A = ab + ab + a^2 + b^2$$

$A = a^2 + 2ab + b^2$  which illustrates that the square

of the sum is the square of the first term plus twice the product of the two terms plus the square of the

second term.

36



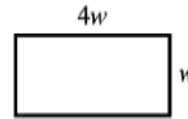
$$p = 2l + 2(l - 18) = 180 \text{ from which}$$

$$l = 54 \text{ in.}$$

$$w = l - 18 = 54 - 18$$

$$w = 36 \text{ in.}$$

3



7.

$$w + 2.5 = 4w - 4.7$$

$$w = 2.4$$

$$\text{ft } 4w =$$

$$9.6 \text{ ft}$$

38

$$\bullet A = 1.80 \times 3.50 = 6.30 \text{ ft}^2$$

39

$A = 2(\text{area of trapezoid} - \text{area of window})$

$$= 2 \left[ \frac{1}{2} (28 + 16) \cdot 8 - 12(3.5) \right]$$

$$= 268 \text{ ft}^2$$

$$1 \text{ gal} = x$$

ht of trapezoid

$$\frac{320 \text{ ft}^2 - 268 \text{ ft}^2}{2}$$

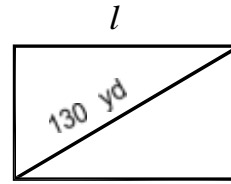
$$x = 0.84 \text{ gal}$$

$$= \sqrt{10^2 - \left( \frac{28 - 16}{2} \right)^2}$$

$$= 8.0 \text{ ft}$$

- 3 The diagonal always divides the rhombus into  
 3. two congruent triangles. All outer sides are  
 always  
 equal.

40  $w = 70$   
 yd



3  $\sqrt{16^2 + 12^2}$

4.

$$\sqrt{\quad}$$

$$= 400 = 20$$

35. (a) For the courtyard:  $s = \frac{p}{4} = \frac{320}{4} = 80$ . For the

$$l = \sqrt{130^2 - 70^2}$$

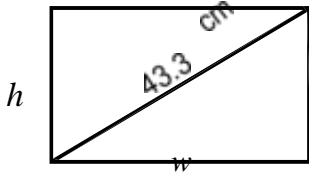
outer edge of the walkway:

$$p = 4(80 + 6) = 344 \text{ m.}$$

(b)  $A = 86^2 - 80^2 = 996$   
 $A = 1000 \text{ m}^2$  (2  
significant digits)

$$p = 2l + 2w$$
$$p = 2\sqrt{130^2 - 70^2} + 2(70)$$
$$p = 360 \text{ yd}$$

41.



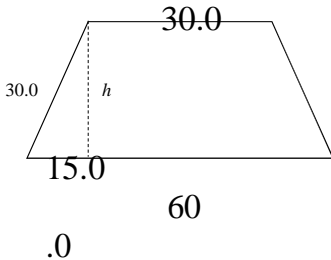
$$\frac{w}{h} = 1.60 \Rightarrow w = 1.60h$$

$$43.3^2 = h^2 + w^2 = h^2 + (1.6h)^2$$

$$h = 22.9 \text{ cm}$$

$$w = 1.60h = 36.7 \text{ cm}$$

4  
2.

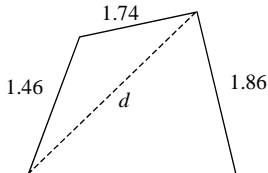


$$h = \sqrt{30.0^2 + 15.0^2}$$

$$A = 6 \cdot \frac{1}{2} (30.0 + \sqrt{30.0^2 + 15.0^2} + 60.0)$$

$$A = 9060 \text{ in.}^2$$

43

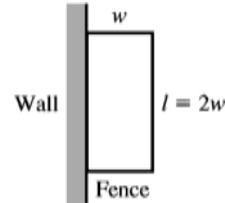


2.  
27

$$A = \frac{1}{2} (2.27)(1.86) \sqrt{(s-1.46)(s-d)(s-1.74)}$$

$$A = 3.04 \text{ km}^2$$

44.



$$50(2w) + 5(2w) + 5w + 5w = 13,200$$

$$w = 110 \text{ m}$$

$$l = 2w = 220 \text{ m}$$

360°. A diagonal divides a quadrilateral into two triangles, and the sum of the interior angles of each triangle is 180°.

4  
5.

$$46. A = \frac{1}{2} d_1 \left( \frac{d_2}{2} \right) + \frac{1}{2} d_1 \left( \frac{d_2}{2} \right)$$

$$\frac{A}{1} = \frac{d_1 d_2}{2}$$

√

2.4 C B  
 i r +  
 c l O  
 e B  
 s A

1.  $\angle$  +  
 O  
 A  $\angle$

$$d = 2.27^2 + 1.86^2$$

$$\text{For right triangle, } A = \frac{1}{2}(2.27)(1.86)$$

$$\text{For obtuse triangle, } s = \frac{1.46 + 1.74 + d}{2}$$

$$\text{and } A = \frac{\pi s^2}{4} \sqrt{s(s-1.46)(s-d)(s-1.74)}$$

A of quadrilateral = Sum of areas of two triangles,  $A = 8.30 \text{ in.}$

$$AOB = 180^\circ$$

$$\angle OAB + 90^\circ + 72^\circ = 180^\circ$$

$$\angle OAB = 18^\circ$$

---


$$2. A = \pi r^2 = \pi (2.4)^2$$

$$A = 18 \text{ km}^2$$

$$3. p = 2s + \frac{2\pi s}{4} = 2s + \frac{\pi s}{2}$$

$$p = 2(3.25) + \frac{\pi (3.25)}{2}$$

$$p = 11.6 \text{ in.} + \frac{\pi (3.25)}{2}$$

$$A = \frac{\pi (3.25)^2}{4}$$

$$\begin{aligned} 4. \quad \widehat{BC} &= 2 \cdot \\ &\angle ABC \\ &= 2(25^\circ) \\ &= 50^\circ \end{aligned}$$

5. (a) AD is a secant line.  
 (b) AF is a tangent line.

6. (a) EC and BC are chords.  
 (b)  $\angle ECO$  is an inscribed angle.

7. (a)  $AF \perp OE$ .  
 (b)  $\triangle OCE$  is isosceles.

8. (a) EC and  $\widehat{BC}$  enclose a segment.  
 (b) radii OE and OB enclose a sector with an acute central angle.

$$9. \quad c = 2\pi r = 2\pi(275) = 1730 \text{ ft}$$

$$10. \quad c = 2\pi r = 2\pi(0.563) = 3.54 \text{ m}$$

$$11. \quad d = 2r; \quad c = \pi d = \pi(23.1) = 72.6 \text{ mm}$$

$$12. \quad c = \pi d = \pi(8.2) = 26 \text{ in.}$$

$$13. \quad A = \pi r^2 = \pi(0.0952^2) = 0.0285 \text{ yd}^2$$

$$14. \quad A = \pi r^2 = \pi(45.8)^2 = 6590 \text{ cm}^2$$

$$15. \quad A = \pi(d/2)^2 = \pi(2.33/2)^2 = 4.26 \text{ m}^2$$

$$16. \quad A = \frac{1}{2}\pi d^2 = \frac{1}{2}\pi(1256)^2 = 1,239,000 \text{ ft}^2$$

$$\begin{aligned} \angle ABT &= 90^\circ \\ \angle CBT &= \angle ABT - \angle ABC = 90^\circ - 65^\circ = 25^\circ \\ &; \\ \angle CAB &= 25^\circ \end{aligned}$$

- 2  $\angle BTC = 65^\circ$ ;  $\angle CBT = 35^\circ$   
 0. since it is complementary to  $\angle ABC = 65^\circ$ .

2  $\text{ARC BC} = 2(60^\circ) = 120^\circ$   
 1.

$$\widehat{BC} = 2(60^\circ) = 120^\circ$$

22  $\widehat{AB} + 80^\circ + 120^\circ = 360^\circ$   
 .

$$\widehat{AB} = 160^\circ$$

$\angle ABC = (1/2)(80^\circ) = 40^\circ$  since the measure of an inscribed angle is one-half its intercepted arc.

2

3.  $\angle ACB = \frac{1}{2}(160^\circ) = 80^\circ$   
 $\left( \frac{\pi}{2} \right)$

2

4. 25.  $0.225 \left( \left| \frac{180^\circ}{\pi \text{ rad}} \right| \right) = 0.393 \text{ rad}$   
 $\circ \quad \circ \quad \underline{\pi \text{ rad}}$

26.  $60.0 = 60.0 \cdot \frac{180^\circ}{\pi} = 1.05 \text{ rad}$

27.  $125.2^\circ = 125.2\pi \text{ rad}/180^\circ = 2.185 \text{ rad}$

28.  $3230^\circ = 3230^\circ \cdot \frac{\pi \text{ rad}}{180} = 56.4 \text{ rad}$

29.  $\frac{1}{4}(2\pi r + 2r) = \frac{\pi r}{4} + \frac{r}{2}$

17.  $\angle CBT = 90^\circ - \angle ABC = 90^\circ - 65^\circ =$

25°

4 2

$$\text{Perimeter} = a + b + \frac{1}{4} \cdot 2\pi r + r$$

$$\mathbf{31. Area} = \frac{1}{4} \pi r^2 - \frac{1}{4} r^2$$

18.

 $\angle B$  $CT$

$= 90^\circ$ ,  
 any  
 angle **32.**  
 such as  
 $\angle BCA$   
 inscrib  
 ed in a  
 semicir  
 cle is a  
 right  
 angle  
 and  
 $\angle BCT$   
 is  
 supple  
 mentar  
 y to  
 $\angle BCA$ .

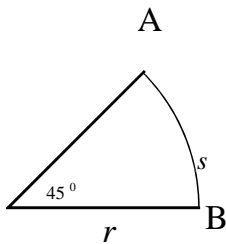
$$\begin{aligned}
 & 4 \\
 & 2 \\
 & Ar \\
 & ea \\
 & = \\
 & \underline{1} \\
 & (a \\
 & r) \\
 & \frac{1}{4}\pi \\
 & r^2 \quad 2 \\
 & \quad 4
 \end{aligned}$$

**19.** A tangent to a circle is perpendicular to the radius drawn to the point of contact. Therefore,

**33.** All are on the same diameter.



34.



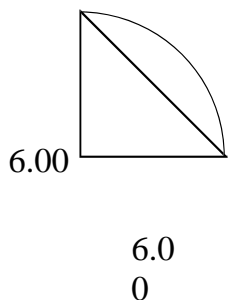
$$\angle B = 45^\circ$$

$$\frac{s}{2\pi r} = \frac{45^\circ}{360^\circ}$$

$$s = \pi \cdot r$$

$\frac{1}{4}$   
triangle

35.



A of sector = A of quarter circle - A of triangle

$$A = \frac{1}{4} \cdot \pi (6.00)^2 - \frac{1}{2} (6.00)(6.00)$$

$$A = 10.3 \text{ in.}^2$$

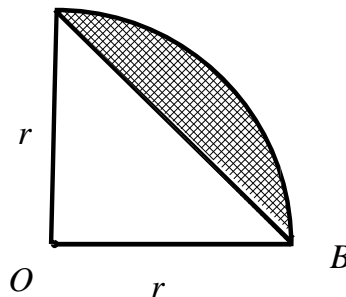
36.  $\angle ACB = \angle DCE$  (vertical angles)

$\angle BAC = \angle DEC$  and

$\angle ABC = \angle CDE$  (alternate interior angles)

Therefore, the triangles are similar since corresponding angles are equal.

39. A



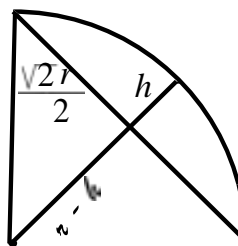
$A_{\text{segment}} = \text{area of quarter circle} - \text{area of}$

$$A_{\text{segment}} = \frac{1}{4} \pi r^2 - \frac{1}{2} r \cdot r$$

$$\text{segment} = \frac{r \cdot 4 \cdot 2}{r^2 (\pi - 2)}$$

$$A_{\text{segment}} = \frac{r^2 (\pi - 2)}{4}$$

40. A



B

$$AB = \sqrt{2} r$$

$$AC = \frac{1}{2} AB$$

$$AC = \frac{1}{2} \sqrt{2} r$$

in right triangle OAC

c

d

$2r =$

$\frac{2r}{2}$

37.  $c = 2\pi r \Rightarrow \pi =$ ;  $d = 2r \Rightarrow r =$  from which

$+(r-h)^2$  from which

$$\pi = \frac{c}{d} \quad 2r \quad 2$$

$$h = \frac{(\sqrt{d})}{2}$$

$$\pi = \frac{c}{d} \cdot \pi \text{ is the ratio of the circumference to}$$

$$\frac{2 - 2r}{2}$$

38.

the diameter

$$\frac{d}{2} \quad \frac{5}{5} \quad \frac{1}{5}$$

41.

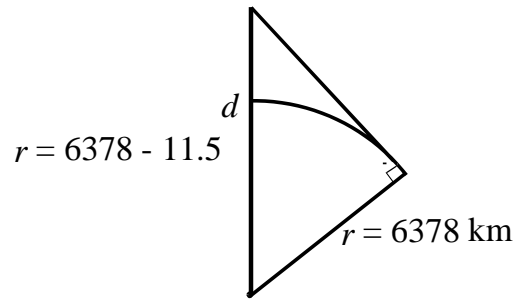
$$c = 4 + 4 + 4 + 16$$

km

$$c = \frac{16}{3.25} \Rightarrow \pi = \frac{16}{5}$$

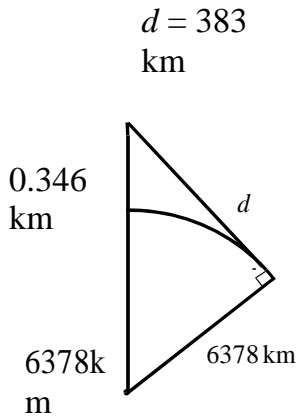
which is incorrect since  $\pi = 3.14159\dots$

$$h = 11.5 \text{ km}$$



$$(6378 + 11.5)^2 + 6378^2 = d^2$$

42.



$$d = 383 \text{ km}$$

6378 km

2

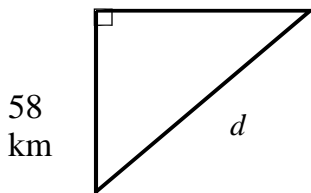
$$(6378)^2 + 6378^2$$

$$d = 66.4 \text{ km}$$

43.  $\sqrt{68^2 + 58^2}$

$$d = 89 > 85$$

68 km



58 km

Signal cannot be received.

44. Using  $A = \frac{\pi d^2}{4}$

using  $A = \frac{\pi d^2}{4}$

$$A = \frac{\pi (12.0)^2}{4(0.60)^2}$$

$$A = 23.8 \text{ m}^2$$

4  $C = 2\pi r = 2\pi(3960) =$

5.  $24,900 \text{ mi} \cdot 11(2\pi r) = 109$   
 $r = 1.58 \text{ mm}$

4  
6.

$$A = \frac{\pi (12.0)^2}{4}$$

47.  $A_{\text{hoop}} = \frac{\pi (18.0)^2}{4}$

48.  $\text{flow rate} = \frac{\text{volume}}{\text{time}} = \frac{\pi r^2 L}{t}$

$$2 \text{ flow rate} = \frac{\pi (2r)^2 L}{t} = \frac{4\pi r^2 L}{t}$$

$$r^2 = 2 \cdot r^2$$

$$r_2 = \sqrt{2} r_1$$

49.  $c = 112; c = \pi d; d = c / \pi = 112 / \pi = 35.7 \text{ in.}$

50.  $A = \frac{\pi}{4} (90^2 - 45^2)$

$$\frac{\pi(12.0 + 2(0.60))}{2}$$

$$2$$

A

=

$$\pi(12.0)$$

9

5

0

0

c

m

2

2

**51.**

Let  $D$

=

diameter

of

large

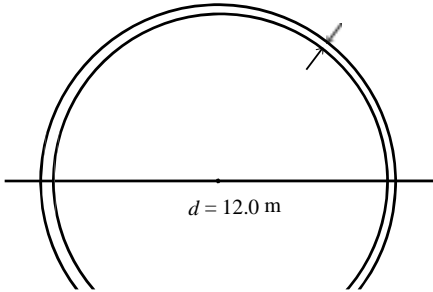
conduit,

then

$$A = \frac{\pi}{4} (12.0)^2 - \frac{\pi}{4} (0.60)^2$$

$$A = 23.8 \text{ m}^2$$

0.60 m



$= 3d$  where  $d$  = diameter of smaller conduit

$$F = \frac{\pi}{4} D^2 = 7 \cdot \frac{\pi}{4} \cdot d^2$$

$$F = \frac{7d^2}{4} = \frac{7d^2}{4} = \frac{7d^2}{4}$$

$$\frac{D}{2} = (3d)^2 = 9d^2$$

$$F = \frac{7}{9}$$

The smaller conduits occupy  $\frac{7}{9}$  of the larger

9

conduits.



52.  $A$  of room =  $A$  of rectangle +  $\frac{3}{4} A$  of circle

$$A = 24(35) + \frac{3}{4}\pi(9.0)^2 = 1030.85174$$

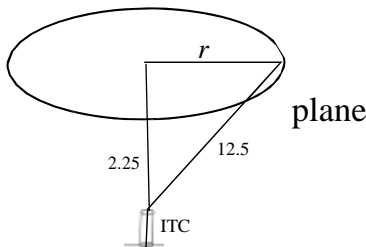
$A = 1000 \text{ ft}^2$ , two significant digits

5  
3. Length =  $(2)^{\frac{3}{4}}(2\pi)(5.5) + (4)(5.5) = 73.8 \text{ in.}$

$$\frac{4}{\sqrt{12.5^2 - 2.25^2}}$$

54.  $d = 4 \cdot 2\pi$

$d = 309 \text{ km}$



AP

5 Horizontally and opposite to original  
5. direction

5 Let  $A$  be the left end point at which  
6. the dashed lines intersect and  $C$  be the center of the gear. Draw a line from  $C$  bisecting the  $20^\circ$  angle. Call

the intersection of this line and the extension of the  
 $+4y + \dots + 2y$

## 2.5 Measurement of Irregular Areas

1. The use of smaller intervals improves the approximation since the total omitted area or the total extra area is smaller.
2. Using data from the south end gives five intervals. Therefore, the trapezoidal rule must be used since Simpson's rule cannot be used for an odd number

of intervals.

3. Simpson's rule should be more accurate in that it accounts better for the arcs between points on the upper curve.
4. The calculated area would be too high since each trapezoid would include more area than that under the curve.

$$5. A = \frac{2.0}{2} \left[ 0.0 + 2(6.4) + 2(7.4) + 2(7.0) + 2(6.1) \right]$$

$$\left[ +2(5.2) + 2(5.0) + 2(5.1) + 0.0 \right]$$

$A_{\text{trap}} = 84.4 = 84 \text{ m}^2$  to two significant digits

6.  $A_{\text{Si mp}}$

$$= \frac{h}{2} (y + 4y + 2y + y)$$

upper dashed line  $B$ , then

$$\frac{360}{24} = 15 \Rightarrow \angle ACB = 7.5^\circ$$

24 teeth tooth

$$\angle ABC = 180^\circ - \frac{20}{2} = 170^\circ$$

$$\angle \frac{1}{2}x + \angle ABC + \angle ACB = 180^\circ$$

$$\angle \frac{1}{2}x + 170^\circ + 7.5^\circ = 180^\circ$$

$$\frac{1}{2}x = 2.5^\circ$$

$$x = 5^\circ$$

$$A = \frac{1}{3} (0 + 4 + 6.4 + 2 + 7.4 + 4 + 7.0 + 2 + 6.1 + 4 + 5.2)$$

$$= \frac{20}{3} (0 + 4 + 6.4 + 2 + 7.4 + 4 + 7.0 + 2 + 6.1 + 4 + 5.2)$$

$$= \frac{20}{3} (0 + 4 + 6.4 + 2 + 7.4 + 4 + 7.0 + 2 + 6.1 + 4 + 5.2)$$

$$= \frac{20}{3} (50.0 + 45.1 + 0) = 288 \text{ m}$$

$$A = \frac{1.00}{3} (0 + 4 + 0.52 + 2 + 0.75 + 4 + 1.05)$$

$$= \frac{1.00}{3} (0 + 4 + 0.52 + 2 + 0.75 + 4 + 1.05)$$

$$= \frac{1.00}{3} (12.82) = 4.27 \text{ ft}^2$$

$$\angle \frac{1}{2}x =$$

$$2$$

$$x = 5^\circ$$

$$8. \text{Atrap} = \frac{1}{2} (0 + 2(0.52) + 2(0.75) + 2(1.05) + 2(1.15) + 2(1.00) + 0.62) = 4.8 \text{ ft}^2$$

$$9. \text{Atrap} = \frac{0.5}{2} [0.6 + 2(2.2) + 2(4.7) + 2(3.1) + 2(3.6) + 2(1.6) + 2(2.2) + 2(1.5) + 0.8]$$

$$\text{Atrap} = 9.8 \text{ m}^2$$

$$10. A_{\text{simp}} = \frac{0.5}{3} (0.6 + 4(2.2) + 2(4.7) + 4(3.1) + 2(3.6) + 4(1.6) + 2(2.2) + 4(1.5) + 0.8) = 9.3 \text{ mi}^2$$

$$11. A = \frac{10}{2} (38 + 2(24) + 2(25) + 2(17) + 2(34)$$

$$+ 2(29) + 2(36) + 2(34) + 30)$$

$$A = \left( \begin{array}{c} 23 \text{ km} \\ 2330 \text{ mm} \end{array} \right) \left( \begin{array}{c} 10^2 \text{ mm}^2 \\ 10^2 \text{ mm}^2 \end{array} \right)$$

$$A = 12,000 \text{ km}^2$$

$$12. A = 2 \cdot \frac{4.0}{(54.0)} [2(55.0) + 2(2(54.8)) + 2(2$$

$$+ 2(2(53.6)) + 2(2(51.2)) + 2(2(49.0)) + 2(2(45.8)) + 2(2(42.0)) + 2(2(37.2))$$

$$A = 7500 \text{ m}^2$$

$$13. [170 + 2(360) + 2(420) + 2(410) +$$

$$A_{\text{trap}} = \frac{2}{2} (390 + 2(350) + 2(330) + 2(290) + 230)$$

$$A = 120,000 \text{ ft}^2$$

1

$$17. A_{\text{trap}}$$

$$= \frac{0.50}{2} [0.0 + 2(1.732) + 2(2.000) + 2(1.732) + 0.0] = 2.73 \text{ in.}^2$$

This value is less than  $3.14 \text{ in.}^2$  because all of the trapezoids are inscribed.

$$18. A_{\text{trap}} = \frac{0.250}{2} (0.000 + 2(1.323) + 2(1.732)$$

$$+ 2(1.936) + 2(2.000) + 2(1.936) + 2(1.732) + 2(1.323) + 0.000) = 3.00 \text{ in.}^2$$

The trapezoids are small so they can get closer

to the boundary.

$$19. A_{\text{simp}} = \frac{0.500}{3} (0.000 + 4(1.732) + 2(2.000)$$

$$+ 4(1.732) + 0.000)$$

$$= 2.98 \text{ in.}^2$$

The ends of the areas are curved so they can get

closer to the boundary.

$$20. A_{\text{tr}} = \frac{0.250}{4} (0.000 + 4(1.323) + 2(1.732)$$

simp

$$\begin{aligned} &45 \\ &(230 \\ &+ \\ &4(29 \\ &0)+ \\ &2(33 \\ &0)+ \\ &4(3 \\ &40) \end{aligned}$$

$$\begin{aligned}
 & \left( \frac{4(1.936) + 2(2.000) + 4(1.936)}{3} + \frac{2(1.732) + 4(1.323) + 0.000}{3} \right) \\
 & \left( \frac{2(390) + 4(410) + 2(420) + 4(360) + 170}{50} \right) \\
 & = 120,000 \text{ ft}^2
 \end{aligned}$$

$$= 3.08 \text{ in.}^2$$

The areas are smaller so they can get closer to the boundary.

50

15.  $A_{\text{simp}} = \frac{1}{3} (5 + 4(12) + 2(17) + 4(21) + 2(22) + 4(25) + 2(26) + 4(16) + 2(10) + 4(8) + 0)$

$$= 8100 \text{ ft}^2$$

16.  $A_t = \frac{2.0}{2} (3.5 + 2(6.0) + 2(7.6) + 2(10.8) + 2(16.2) + 2(18.2) + 2(19.0) + 2(17.8) + 2(12.5) + 8.2)$

ra  
p

$$= 229 \text{ in.}^2$$

$$A_{\text{circle}} = \pi r^2 = \pi (d / 2)^2 = \pi (2.5 / 2)^2 = 4.9 \text{ in.}^2$$

$$A_{\text{total}} = 229 - 2(4.9) = 219 \text{ in.}^2$$

**2.6 Solid Geometric Figures**

1.  $V_1 = lwh_1, V_2 = (2l)(w)(2h) = 4lwh = 4V_1$

The volume is four times as much.

2.  $s^2 = r^2 + h^2$

$$17.5^2 = 11.9^2 + h^2$$

$h = 12.8 \text{ cm}$

3.  $V = \frac{1}{3} \pi r^2 h = \frac{1}{3} \pi \left( \frac{11.9}{2} \right)^2 (2(10.4))$

4.  $V = \pi \left( \frac{40.0}{2} \right)^2 \left( \frac{122}{3} \right) + 2\pi (40.0)^3$

$V = 441,000 \text{ ft}^3$

5.  $V = e^3 = 7.15^3 = 366 \text{ ft}^3$

6.  $V = \pi r^2 h = \pi (23.5)^2 (48.4) = 84,000 \text{ cm}^3$

7.  $A = 2\pi r^2 + 2\pi rh = 2\pi (689)^2 + 2\pi (689)(233) = 3,990,000 \text{ mm}^2$

15.  $S = \frac{1}{2} ps = \frac{1}{2} (3 \times 1.092)(1.025) = 3.358 \text{ m}^2$

16.  $S = 2\pi rh = 2\pi (d/2)h = 2\pi (250/2)(347) = 273,000 \text{ ft}^2$

$$\frac{1}{2} \left( \frac{4}{3} \right) \frac{2}{3} \left( \frac{0.83}{3} \right)^3$$

17.  $V = \frac{1}{3} \pi r^2 h = \frac{1}{3} \pi (0.15 \text{ yd})^2 (22.4)$

18.  $b = \frac{22.4}{2} = 11.2; h = \sqrt{s^2 - b^2} = \sqrt{14.2^2 - 11.2^2} = 8.73 \text{ m}$

$V = \frac{1}{3} Bh = \frac{1}{3} (22.4)^2 (8.73) = 1460 \text{ m}^3$

19.  $s = \sqrt{h^2 + r^2} = \sqrt{0.274^2 + 3.39^2} = 3.40 \text{ cm}$

$A = \pi r^2 + \pi rs = \pi (3.39)^2 + \pi (3.39)(3.40) = 72.3 \text{ cm}^2$

20. There are four triangles in this shape.

$s = \sqrt{3.67^2 - \left( \frac{3.67}{2} \right)^2} = 3.18, A = \frac{1}{2} ps = \frac{1}{2} (4 \times 3.67)(3.18) = 23.3 \text{ in.}$



$$8. A = 4\pi r^2 = 4\pi (0.067)^2 = 0.056 \text{ in.}^2$$

$$9. V = \frac{4}{3}\pi r^3 = \frac{4}{3}\pi (0.877)^3 =$$

$$21. V = \frac{4}{3}\pi r^3 = \frac{4}{3}\pi d^3 = 4\pi \frac{d^3}{3}$$

$$2.83 \text{ yd}^3$$

$$V = \frac{1}{6} \pi d^3$$

$$\left( \frac{2}{3} \right) 8$$

10.  $V = \frac{1}{3} \pi r^2 h = \frac{1}{3} \pi (25.1)^2 (5.66) = 3730 \text{ m}^3$

11.  $S = \pi r s = \pi (78.0)(83.8) = 20,500 \text{ cm}^2$

12.  $S = \frac{1}{2} p s = \frac{1}{2} (345)(272) = 46,900 \text{ ft}^2$

22.  $A = A + A$   
 flat curved  
 $= \pi r^2 + \frac{1}{2} \cdot 4\pi r^2$   
 $= 3\pi r^2$

23. cylinder =  $\frac{(\quad) 2}{\quad} =$

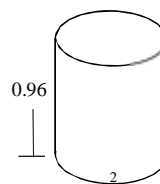
$$V = \frac{1}{3} Bh = \frac{1}{3} (0.76^2) (1.30) = 0.25 \text{ in.}^3$$

$$14. V = Bh = (29.0)^2 (11.2) = 9420 \text{ cm}^3$$

$$V = \frac{1}{3} \pi r^2 h$$



29.  $V = \pi r^2 h = \pi (d / 2)^2 h = \pi (4.0 / 2)^2 (3,960,000)$



$$= 5.0 \times 10^7 \text{ ft}^3 \text{ or } 0.00034 \text{ mi}^3$$

30.  $V = \frac{1}{3}h(a^2 + ab + b^2)$

$$= \frac{1}{3}(0.750)(2.50^2 + 2.50(3.25) + 3.25^2)$$

$$= 6.23 \text{ m}^3$$

31.  $\sqrt{\quad} (\quad)$

$$V = 1.80 \sqrt{3.93^2 - 1.80^2} \cdot 1.50 = 9.43 \text{ ft}^3$$

32. There are three rectangles and two triangles in this shape.

$$N \cdot \pi \left( \frac{0.061}{2} \right)^2 (0.96) = 76$$

$N = 280$   
revolutions

29.8

39.  $c = 2\pi r = 29.8$  \_\_\_\_\_

$$\Rightarrow r = \frac{29.8}{2\pi}$$

$$V = \frac{4}{3}\pi r^3 = \frac{4}{3}\pi \left( \frac{29.8}{2\pi} \right)^3$$

$$V = 447 \text{ in.}^3$$

$$A = 2 \left( \frac{1}{2} (3.00)(4.00) + 3.00(8.50) + 4.00 \right) \sqrt{3.00^2 + 4.00^2} = 114 \text{ cm}^2 + 8.50$$

40. ( ) ( )

$$\text{Area} = \pi \cdot 3 + 0.25 \cdot 4.25 = 41 \text{ in.}^2$$

33.  $V = \frac{1}{3} BH = \frac{1}{3} (250^2) (160) = 3,300,000 \text{ yd}^3$

41.  $V = \text{cylinder} + \text{cone (top of rivet)}$

$$= \pi r^2 h + \frac{1}{3} \pi r^2 h$$

$$= \pi (0.625 / 2)^2 (2.75) + \frac{1}{3} \pi (1.25 / 2)^2 (0.625)$$

3

$$= 1.10 \text{ in.}^3$$

42.  $p = 18 = 2r +$

$$\pi r r = \frac{18}{\pi + 2}$$

$$V = \frac{1}{3} \pi \left( \frac{18}{\pi + 2} \right)^2 (0.075)$$

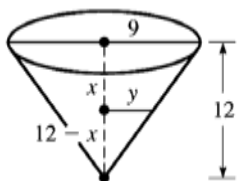
$$V = 1.4 \text{ m}^2$$

43.  $V = \frac{4}{3} \pi r^3 = 0.92V = 0.92 \left( \frac{4}{3} \pi r^3 \right)$

$$r^2 = 0.97r$$


radius decreased by 3%

44. =



Chapter 2 Review Exercises

1.  $\angle CGE = 180^\circ - 148^\circ = 32^\circ$



2.  $\angle EGF = 180 - 148 - 90 = 58$

3.  $\angle DGH = 180^\circ - 148^\circ = 32^\circ$



4.  $\angle EGI = 180 - 148 + 90 = 122$

5.  $c = 9^2 + 40^2 = 41$

6.  $c^2 = a^2 + b^2 = 14^2 + 48^2 \Rightarrow c = 50$

7.  $c^2 = a^2 + b^2 = 400^2 + 580^2 \Rightarrow c = 700$

$$2^2 + 2^2 + 2^2 = 2^2 + 2^2 + 2^2$$

$$\sqrt{\quad}$$

8.  $c = a + b \Rightarrow 6500 = a + 5600 \Rightarrow a = 3300$

9.  $a = 0.736^2 - 0.380^2 = 0.630$

$$\sqrt{128^2 - 25.1^2} = 126$$

10.  $a =$

11.  $c^2 = a^2 + b^2 \Rightarrow 36.1^2 = a^2 + 29.3^2 \Rightarrow a = 21.1$



2

$$y = \frac{3}{2}$$

$$(12 - x)$$

4

$$\frac{1}{2} \cdot \pi \cdot 9^2 \cdot 12 = 1$$

$$\frac{3}{-x} = \pi \cdot (12 - x) \cdot (12 - x)$$

$$2 \quad 3 \quad 4$$

$$x = 12\sqrt{3}$$

$$864$$

$$x = 2.50$$

$$\text{cm}$$

$$12. \quad c^2 = a^2 + b^2 \Rightarrow 0.885^2 = 0.782^2 + b^2 \Rightarrow b =$$

$$0.414$$

$$13. \quad P = 3s = 3(8.5) = 25.5 \text{ mm}$$

$$14. \quad p = 4s = 4(15.2) = 60.8 \text{ in.}$$

$$15. \quad \frac{1}{2} = \frac{bh}{2} = \frac{1}{2} (0.125)(0.188) = 0.0118 \text{ ft}^2$$

$$2 \quad 2$$

$$16. \quad s = \frac{1}{2}(a + b + c) = \frac{1}{2}(175 + 138 + 119) = 216$$

$$\begin{aligned} A &= \sqrt{s(s-a)(s-b)(s-c)} \\ &= \sqrt{216(216-175)(216-138)(216-119)} \\ A &= 8190 \text{ ft}^2 \end{aligned}$$

$$17. C = \pi d = \pi (98.4) = 309 \text{ mm}$$

$$18. p = 2l + 2w = 2(2980) + 2(1860) = 9680 \text{ yd}$$

$$19. A = \frac{1}{2}h(b+b) = \frac{1}{2}(34.2)(67.2+126.7) = 3320 \text{ in.}^2 \quad \sqrt{6^2 + (4+4)^2} = 10$$

34. AD

=

$$20. A = \pi r^2 = \pi \left(\frac{32.8}{2}\right)^2 = 845 \text{ m}^2$$

$$2. V = Bh = (26.0)(34.0)(14.0) =$$

$$1. 6190 \text{ cm}^3$$

$$2. V = \pi r^2 h = \pi (36.0)^2 (2.40) =$$

$$2. 9770 \text{ in.}^3$$

$$2. V = \frac{1}{3}Bh = \frac{1}{3}(3850)(125) = 160,$$

$$3. 000 \text{ ft}^3$$

$$24. V = \frac{4}{3}\pi r^3 = \frac{4}{3}\pi \left(\frac{2.21}{2}\right)^3 = 5.65 \text{ mm}^3$$

$$25. A = 6e^2 = 6(0.520)^2 = 1.62 \text{ m}^2$$

$$2. A = 2\pi r^2 + 2\pi rh = 2\pi \left(\left(\frac{12.0}{2}\right)^2 + \left(\frac{12.0}{2}\right)(58.0)\right)$$

$$6. = 2\pi$$

$$A = 2410 \text{ ft}^2$$

$$35. \frac{BE}{4} = \frac{10}{10} \Rightarrow BE = 2.4$$

$$36. \frac{AE}{4} = \frac{8}{10} \Rightarrow AE = 3.2$$

$$37. P = b + \sqrt{b^2 + (2a)^2} + \frac{1}{2}\pi(2a) = b + \sqrt{b^2 + 4a^2} + \pi a$$

$$38. p = \frac{1}{2}(2\pi s) + 4s = \pi s + 4s$$

$$39. A = \frac{1}{2}b(2a) + \frac{1}{2}\pi(a)^2 = ab + \frac{1}{2}\pi a^2$$

$$40. A = \frac{1}{2}(\pi s^2) + s^2$$

41. A square is a rectangle with four equal

rectangle is a parallelogram with perpendicular intersecting sides so a square is a parallelogram.

A  
r  
h  
o  
m  
b  
u  
s  
i  
s  
a  
p  
a  
r  
a  
l  
l  
e  
l  
o  
g  
r  
a  
m  
w  
i  
t  
h  
f  
o  
u  
r  
e  
q  
u  
a  
l  
s  
i  
d  
e  
s

$$27. s^2 = r^2 + h^2 = 1.82^2 + 11.5^2 \Rightarrow s = \sqrt{1.82^2 + 11.5^2}$$

$$S = \pi r s = \pi (1.82) \sqrt{1.82^2 + 11.5^2}$$

$$S = 66.6 \text{ in.}^2$$

$$28. A = 4\pi r^2 = 4\pi \left( \frac{12,760}{2} \right)^2 = 5.115 \times 10^8 \text{ km}^2$$

o

$$29. \angle BTA = \frac{50}{25} = 25^\circ$$

2

$$30. \angle TBA = 90^\circ, \angle BTA = 25^\circ \Rightarrow \angle TAB = 90^\circ - 25^\circ = 65^\circ$$

and since a square is a parallelogram,

a square is a rhombus.

4

2. If two angles are equal then so is the third and the triangles are similar.

$$43. A = \pi r^2, r \Rightarrow nr \Rightarrow A = \pi (nr)^2 = n^2 (\pi r^2)$$

The area is multiplied by  $n^2$ .

$$44. V = e^3; e \Rightarrow ne \Rightarrow V = (ne)^3 = n^3 e^3$$

3

The volume is multiplied by  $n$ .

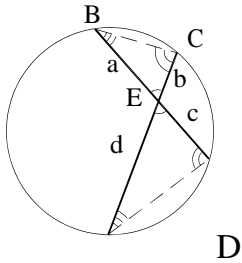
**31.**  $\angle BTC = 90^\circ - \angle BTA = 90^\circ - 25^\circ = 65^\circ$

**32.**  $\angle ABT = 90^\circ$

(any angle inscribed in a semi-circle is  $90^\circ$  )

**33.**  $\angle ABE = 90^\circ - 37^\circ = 53^\circ$

45.

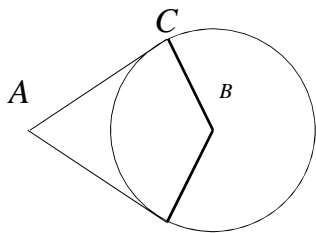


A

$\angle BEC = \angle AED$ , vertical  $\angle$ 's.  
 $\angle BCA = \angle ADB$ , both are inscribed in  $\overline{AB}$   
 $\angle CBE = \angle CAD$ , both are inscribed in  $\overline{CD}$  which shows  $\triangle AED \sim \triangle BEC \Rightarrow \frac{a}{b} = \frac{c}{d}$

46.  $\angle B + 2(90^\circ) + 36^\circ = 180^\circ$

$\angle B = 144^\circ$



47.  $2(\text{base angle}) + 38^\circ = 180^\circ$   
 base angle =  $71^\circ$

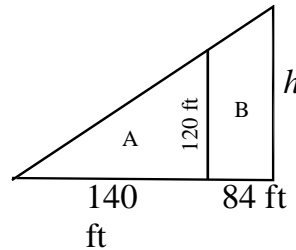
48. The two volumes are equal.

$\frac{1}{3} \pi r^2 h = \frac{1}{3} \pi R^2 H$

52.  $A = \left(\frac{18.0}{4}\right)^2 + 2\pi \left(\frac{18.0}{8}\right)^2 = 52.1 \text{ cm}^2$

5.  $\frac{AB}{13} = \frac{14}{18}$   
 3.  $AB = 10 \text{ m}$

5  
4.



$\frac{h}{140 + 84} = \frac{120}{140} \Rightarrow h = 192$

area of A =  $\frac{1}{2} (140)(120) = 8400 \text{ ft}^2$

area of B =  $\frac{1}{2} (120 + 192)(84) = 13,000 \text{ ft}^2$

55.  $\frac{FB}{4.5} = \frac{1.60}{1.20} \Rightarrow FB = 6.0 \text{ m}$

56.  $\frac{DE}{16} = \frac{33}{24} \Rightarrow DE = 22 \text{ in.}$

57. The longest distance in inches between points on the photograph is,

$\sqrt{8.00^2 + 10.0^2} = 12.8 \text{ in.}$  from which

$\frac{x}{12.8} = \frac{18,450}{1}$

$x = 12.8 \cdot 18,450 \text{ in.} \left(\frac{1 \text{ ft}}{12 \text{ in.}}\right) \left(\frac{\text{mi}}{5280 \text{ ft}}\right)$



$$\frac{4}{3}\pi\left(\frac{1.50}{2}\right)^3 = \pi\left(\frac{14.0}{2}\right)^3 \cdot t$$

$$t = 0.0115 \text{ in.}$$

49.  $\sqrt{0.48^2 + 7.8^2}$  7.8

50.  $c = \sqrt{2100^2 + 9500^2} = 9700$   
ft

51.

$$\left(\frac{\quad}{\quad}\right)\left(\frac{\quad}{\quad}\right) \left(\frac{\quad}{12 \text{ in.}}\right)\left(\frac{\quad}{5280 \text{ ft}}\right)$$

$$x = 3.73 \text{ mi}$$

58.  $MA = \frac{\pi\left(\frac{3.10}{2}\right)^2}{\frac{\quad}{2}} = 1.90$

$$\frac{\pi\left(\frac{2.25}{2}\right)^2}{\quad}$$

$$p = \frac{24}{6} = 10 \text{ cm}$$

$$(\sqrt{2})$$

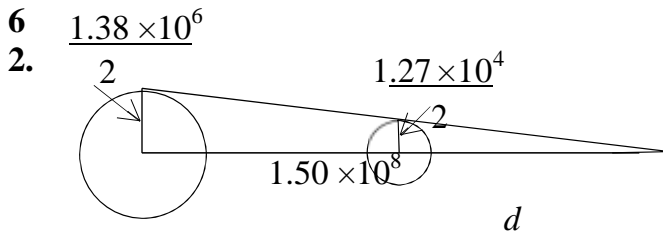
}

$$59. c = \pi D = \pi(7920 + 2(210)) = 26,200 \text{ mi}$$

60.  $c = 2\pi r = 651 \Rightarrow r = \frac{651}{2\pi}$

$A = \pi r^2 = \pi \left(\frac{651}{2\pi}\right)^2 = 33,700 \text{ m}^2$

61.  $A = (4.0)(8.0) - \frac{2\pi}{4} \cdot \frac{1.0}{4} = 30 \text{ ft}^2$



$\frac{1.27 \times 10^4}{2} = \frac{d + 1.50 \times 10^8}{2}$   
 $d = 1.39 \times 10^6$

63.  $A = \frac{250}{3} [220 + 4(530) + 2(480)]$

$[+4(320 + 190 + 260) + 2(510) + 4(350)]$

$[+2(730) + 4(560) + 240]$

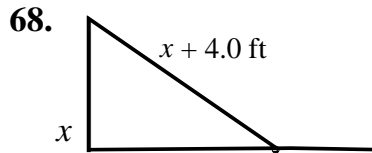
$A = 1,000,000 \text{ m}^2$

64.  $V = \frac{250}{2} [560 + 2(1780) + 2(4650) + 2(6730)]$

$+2(5600) + 2(6280) + 2(2260) +$

67.  $= 10 \text{ ft}$

$\cdot \sqrt{(500.10)^2 - 500^2}$



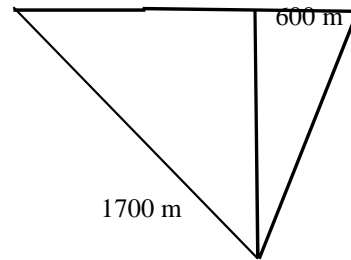
15.6 ft

$(x + 4.0)^2 = x^2 + 15.6^2$

$x = 28.4$

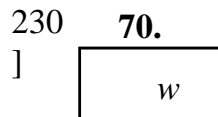
$x + 4 = 32.4 \text{ ft}$ , length of guy wire

69. 1500 m



$d = 1700^2 - 1500^2 + 600^2$

$d = 1000 \text{ m}$



$w + 44 \text{ ft}$

$$V = 6,920,000 \text{ ft}^3$$

6  $V = \pi r^2 h$  (13) = 190  
 5.  $\pi$  4.3  $\text{m}^3$

$$\left. \begin{array}{l} | \\ | \\ | \\ | \\ | \\ | \end{array} \right\}^2$$

- 6 Area of cross section = area of six  
 6. equilateral triangles with sides of  
 2.50 each triangle has 2.50 (3)

$$\text{semi-perimeter} = \frac{\quad}{2} = 3.75$$

$$p = 2l + 2w$$

$$(\quad)$$

$$288 = 2w + 44 + 2w$$

$$w = 50 \text{ ft}$$

$$l = w + 44 = 94 \text{ ft}$$

7  $V = \pi r^2 h + \frac{1}{3} \cdot 4 \pi r^3$   
 1.

$$= \left[ \pi \left( \frac{2.50}{2} \right)^2 \cdot 4.75 + \frac{1}{3} \cdot \pi \left( \frac{2.50}{4} \right)^3 \right]$$

$$V = \text{area of cross section} \times 6.75$$

$$= \frac{6\sqrt{3.75(3.75-2.50)^3}}{6.75} \times$$

$$= 110 \text{ m}^3$$

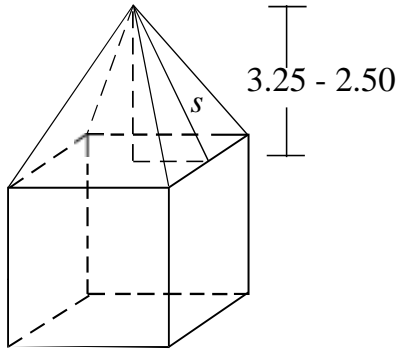
$$\left( \frac{2}{2} \right) \left( \frac{1}{2} \right) \left( \frac{2}{2} \right) \left( \frac{3}{2} \right) \left( \frac{1}{2} \right) \left( \frac{1}{2} \right)$$

$$\left( \frac{7.48 \text{ gal}}{1} \right)$$

$$\left( \frac{1}{1} \right) \left( \frac{1}{1} \right) \left( \frac{1}{1} \right) \left( \frac{1}{1} \right) \left( \frac{1}{1} \right) \left( \frac{1}{1} \right)$$

$$= 159 \text{ gal}$$

72.



tent surface area

= surface area of pyramid + surface area of cube

$$= \frac{1}{2} ps + 4e^2$$

$$= \frac{1}{2} (4)(2.50) \sqrt{(3.25 - 2.50)^2 + \left(\frac{2.50}{2}\right)^2} + 4(2.50)^2$$

$$= 32.3 \text{ m}^2$$

$$w = \frac{16}{9} \Rightarrow w =$$

73.

$$\frac{16h}{9} = 9$$

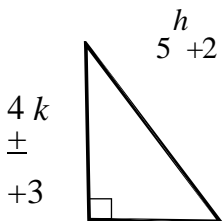
ABCDE. The  $152^2 = w^2 + h^2 =$

$$\frac{16h^2}{9} = 81$$

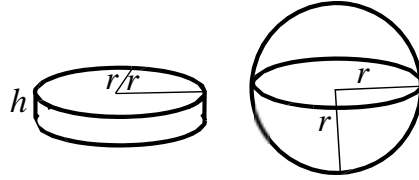
triangles, one

$$w = \frac{16h}{9} = 132 \text{ cm}$$

74.



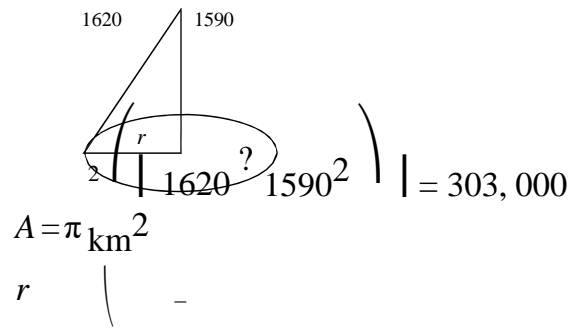
75.



$$V_{\text{cylinder}} = \pi r^2 h = V_{\text{hemisphere}} = \frac{1}{2} \cdot \frac{4}{3} \pi r^3$$

76.

$$r = \frac{3h}{2}$$



77. Label the vertices of the pentagon +  $h^2 \Rightarrow h = 74.5 \text{ cm}$

area is the sum of the areas of three

with sides 921, 1490, and 1490 and two with sides 921, 921, and 1490.

The semi-perimeters are given by  $\frac{921 + 921 + 1490}{2}$

$$s_1 = \frac{921 + 921 + 1490}{2} = 1666 \text{ and}$$

$$s_2 = \frac{921 + 1490}{2} = 1950.5.$$

$$\frac{1490}{2}$$

$$\begin{aligned} &3k - 1 \\ &-1490) \end{aligned}$$

$$\begin{aligned} A = & \sqrt[2]{1666(1666 - 921)(1666 - 921)(1666} \\ & -1490)} \\ & + \sqrt{1950.5(1950.5 - 1490)(1950.5} \end{aligned}$$



$$(5k + 2)^2 = (4k + 3)^2 + (3k - 1)^2$$

$$k = 3$$

$$4k + 3 = 15, 3k - 1 = 8$$

$$A = \frac{1}{2}(8)(15) = 60 \text{ ft}^2$$

$$+ (1950.5 - 921)$$

$$\text{Note: } 1) 3k - 1 > 0 \Rightarrow k > \frac{1}{3}$$

2) There is a solution for  $\frac{1}{3} < k < 1$ .

3) For  $k = 1$  the triangle solution is an isosceles, but not right triangle.

