

**Test Bank for Biology The Core 1st Edition by Simon ISBN
0321735862 9780321735867**

Full link download:

<https://testbankpack.com/p/test-bank-for-biology-the-core-1st-edition-by-simon-isbn-0321735862-9780321735867/>

Biology: The Core (Simon)
Chapter 2 The Chemistry of Life

Multiple-Choice Questions

1) The chemical name for table salt is sodium chloride, or simply NaCl. What type of chemical is NaCl?

- A) Compound
- B) Element
- C) Molecule
- D) Ion

Answer: A

Topic: 2.1

Skill: Knowledge/Comprehension

Learning Outcome: 2.1

2) Identify the reactants in the following chemical reaction: $C_{10}H_8 + 12 O_2 \rightarrow 10 CO_2 + 4 H_2O$

- A) $C_{10}H_8$ and $10 CO_2$
- B) $12 O_2$ and $4 H_2O$
- C) $C_{10}H_8$ and $12 O_2$
- D) $10 CO_2$ and $4 H_2O$

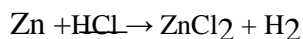
Answer: C

Topic: 2.1

Skill: Knowledge/Comprehension

Learning Outcome: 2.1

3) How many HCl molecules are required to balance the following reaction?



- A) 1
- B) 2
- C) 3
- D) 4

Answer:

B Topic:

2.1

Skill: Synthesis/Evaluation

Learning Outcome: 2.1

4) What is a trace element?

A) An element that is very rare

B) An element that is evenly distributed on the planet

C) An element that is required in miniscule amounts for life

D) An element that is used to identify the location of other elements
Answer: C

Topic: 2.2

Skill: Knowledge/Comprehension

Learning Outcome: 2.1

5) What is the most common element in your body? A) Oxygen

B) Water

C) Carbon

D) Sugar

Answer: A

Topic: 2.2

Skill: Knowledge/Comprehension

Learning Outcome: 2.1

6) Which is *not* one of the four atoms that make up the bulk of living organisms? A) Oxygen

B) Nitrogen

C) Calcium

D) Carbon

Answer: C

Topic: 2.2

Skill: Knowledge/Comprehension

Learning Outcome: 2.1

7) The majority of the elements essential to life are found in what part of the periodic table?

A) The top third

B) The middle third

C) The bottom third

D) Evenly distributed throughout the periodic table

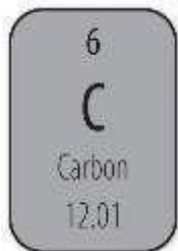
Answer: A

Topic: 2.2

Skill: Application/Analysis

Learning Outcome: 2.1

8) The typical carbon atom is described in the periodic table by the accompanying box. How many protons are in a typical carbon atom?



- A) 6
- B) 12
- C) 18
- D) Not enough information

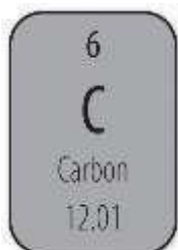
given Answer: A

Topic: 2.2

Skill: Knowledge/Comprehension

Learning Outcome: 2.1

9) How many neutrons are in a typical carbon atom?



- A) 6
- B) 12
- C) 18
- D) Not enough information

given Answer: A

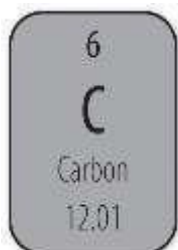
Topic: 2.2

Skill: Knowledge/Comprehension

Learning Outcome: 2.1

Global Learning: G4

10) Which number represents the atomic weight of carbon?



- A) 6
- B) 12
- C) 18
- D) Not enough information

given Answer: B

Topic: 2.2

Skill: Knowledge/Comprehension

Learning Outcome: 2.1

11) How many neutrons in a carbon-14 atom?

- A) 6
- B) 7 C) 8
- D) 14

Answer: C

Topic: 2.3

Skill: Application/Analysis

Learning Outcome: 2.1

Global Learning: G4

12) If the number of protons in an atom does not match the number of electrons, the atom is specifically called an _____.

- A) element
- B) isotope
- C) isomer
- D) ion

Answer: D

Topic: 2.3

Skill: Application/Analysis

Learning Outcome: 2.1

13) The $2+$ in Cu^{2+} tells us that this atom_____.

- A) has two more neutrons than protons
- B) has two more protons than electrons
- C) has two more electrons than neutrons
- D) has two more electrons than

protons Answer: B

Topic: 2.3

Skill: Application/Analysis

Learning Outcome: 2.1

14) Identify the part of the atom that most determines the chemical reactivity of the atom.

- A) The number of shells
- B) The number of protons
- C) The number of neutrons

D) The number of electrons
Answer: D
Topic: 2.3
Skill: Knowledge/Comprehension
Learning Outcome: 2.2

15) In chemical bonding, when the bonded atoms share electrons, it is specifically called _____.

- A) an ionic bond
- B) a covalent bond
- C) a hydrogen bond
- D) a polar bond

Answer: B
Topic: 2.4
Skill: Knowledge/Comprehension
Learning Outcome: 2.2

16) What is the maximum number of electrons that can fit into the innermost shell of an atom? A) 1

- B) 2
- C) 8
- D) 16

Answer: B
Topic: 2.4

Skill: Knowledge/Comprehension
Learning Outcome: 2.2

17) While the maximum number of electrons required to fill the outermost shell of an atom varies depending on the size of the atom, almost all of the smaller atoms (atomic numbers 2-20) are considered stable (nonreactive) when they contain _____ electron(s) in the outermost shell.

- A) 1
- B) 2
- C) 8
- D) 16

Answer: C
Topic: 2.4
Skill: Synthesis/Evaluation
Learning Outcome: 2.2

18) What is the maximum number of single covalent bonds a carbon atom can form with other elements?

- A) 1
- B) 2
- C) 3
- D) 4

Answer: D
Topic: 2.4

Skill: Application/Analysis

Learning Outcome: 2.2

Global Learning: G4

19) Individual water molecules are held to one another by relatively weak _____ bonds.

- A) covalent
- B) hydrogen
- C) ionic
- D) nonpolar

Answer: B

Topic: 2.4

Skill: Knowledge/Comprehension

Learning Outcome: 2.2

20) The electronegativity of an atom is determined by how strongly outermost electrons are pulled toward the nucleus. Somewhat like gravity, the electronegativity will be stronger in atoms with larger nuclei and closer outermost electrons. Which element has the strongest electronegativity?

5 B Boron 10.81	6 C Carbon 12.01	7 N Nitrogen 14.01	8 O Oxygen 16.00
--------------------------	---------------------------	-----------------------------	---------------------------

- A) Boron
- B) Carbon
- C) Nitrogen
- D) Oxygen

Answer: D

Topic: 2.4

Skill: Synthesis/Evaluation

Learning Outcome: 2.2

21) Why is one side of a water molecule partially negative while the other side is partially positive?

- A) Uneven sharing of electron pairs occurs due to the strong pull of hydrogen.
- B) Uneven sharing of electron pairs occurs due to the strong pull of oxygen.
- C) Oxygen donates its electrons to hydrogen.
- D) Hydrogen donates its electrons to oxygen.

Answer: B

Topic: 2.4

Skill: Application/Analysis

Learning Outcome: 2.2

22) Water is the lightest (least dense) when it _____.

- A) freezes

- B) is just above freezing
- C) is at room temperature
- D) is just below

boiling Answer: A

Topic: 2.5

Skill: Knowledge/Comprehension

Learning Outcome: 2.3

23) A needle can be made to "float" on the surface tension of water. What causes this surface tension to form?

- A) The adhesion of water molecules to the needle
- B) The cohesion of water molecules to each other
- C) The solubility of water
- D) The heat capacity of water

Answer: B

Topic: 2.5

Skill: Application/Analysis

Learning Outcome: 2.3

Global Learning: G5

24) Water "beads up" on synthetic fabric like polyester but binds to cotton. What is the most likely explanation for this?

- A) Polyester is not a naturally occurring substance, whereas cotton is a naturally occurring substance.
- B) Polyester is more flexible than cotton.
- C) Polyester fibers are thinner than cotton fibers.
- D) Polyester is nonpolar, whereas cotton is polar.

Answer: D

Topic: 2.5

Skill: Application/Analysis

Learning Outcome: 2.3

Global Learning: G5

25) Select the most complete explanation of what the pH scale actually measures.

- A) The acidity of a solvent
- B) The alkalinity of a solvent
- C) The concentration of hydrogen ions in a solution
- D) The concentration of hydroxide ions in a solute

Answer: C

Topic: 2.6

Skill: Knowledge/Comprehension

Learning Outcome: 2.3

26) The difference in pH units between two acidic solutions is three. How much more acidic is the stronger acid than the weaker acid?

- A) 3 times more acidic B)
- 30 times more acidic C)

100 times more acidic D)

1,000 times more acidic

Answer: D

Topic: 2.6

Skill: Application/Analysis

Learning Outcome: 2.3

Global Learning: G4

27) Something with a pH of 5 would be _____.

A) acidic

B) basic C)

neutral D)

alkaline

Answer: A

Topic: 2.6

Skill: Knowledge/Comprehension

Learning Outcome: 2.3

28) How do buffers minimize change in the pH of biological systems?

A) By absorbing H^+ ions when there is an excess

B) By donating H^+ ions when there is a shortage

C) Both of these

D) Neither of these

Answer: C

Topic: 2.6

Skill: Knowledge/Comprehension

Learning Outcome: 2.3

29) The functional group $-NH_2$ is called the _____ group.

A) methyl

B) alcohol

C) amino

D) carboxyl

Answer: C

Topic: 2.7

Skill: Knowledge/Comprehension

Learning Outcome: 2.4

30) If you remove all of the functional groups from an organic molecule such that it contains only carbon and hydrogen atoms, the molecule is called _____.

A) a carbohydrate

B) an inorganic molecule

C) a hydrocarbon

D) polar

Answer: C

Topic: 2.7

Skill: Application/Analysis

Learning Outcome: 2.4

31) Which of the following large organic molecules includes table sugar? A) Carbohydrates

B) Lipids

C) Proteins

D) Nucleic acids

Answer: A

Topic: 2.7, 2.9

Skill: Knowledge/Comprehension

Learning Outcome: 2.4

32) The breaking of a large organic molecule into smaller individual subunits involves multiple

_____.

A) hydrolysis reactions

B) osmotic reactions

C) dehydration synthesis reactions

D) hydrosynthetic

reactions Answer: A

Topic: 2.8

Skill: Knowledge/Comprehension

Learning Outcome: 2.5

33) What are the monomers of proteins?

A) Hydrochloric acids

B) Nucleic acids C)

Carboxylic acids

D) Amino acids

Answer: D Topic:

2.8, 2.12

Skill: Knowledge/Comprehension

Learning Outcome: 2.6

34) What is the sum total of all the chemical reactions that take place in your body called? A) Catabolism

B) Anabolism

C) Embolism

D) Metabolism

Answer: D

Topic: 2.8

Skill: Knowledge/Comprehension

Learning Outcome: 2.5

35) What is another name for the polymers of carbohydrates?

- A) Triglycerides
- B) Polysaccharides
- C) Polypeptides
- D) Nucleotides

Answer: B Topic:

2.9

Skill: Knowledge/Comprehension

Learning Outcome: 2.6

36) Which of the following is *not* made from long chains of glucose?

- A) Starch
- B) Glycerol
- C) Glycogen
- D) Cellulose

Answer: B

Topic: 2.9

Skill: Knowledge/Comprehension

Learning Outcome: 2.6

37) Based on the suffix, a molecule of "maltose" is most likely what type of macromolecule? A) Carbohydrate

- B) Lipid
- C) Protein
- D) Nucleic acid

Answer: A

Topic: 2.9

Skill: Application/Analysis

Learning Outcome: 2.6

Global Learning: G2

38) Which polysaccharide consists of many long straight chains of glucose with bonds joining the chains?

- A) Starch
- B) Cellulose
- C) Glycogen

D) This does not describe a polysaccharide. Answer: B

Topic: 2.9

Skill: Knowledge/Comprehension

Learning Outcome: 2.6

39) Which polysaccharide consists of individual long, twisted, unbranched chains of glucose?

- A) Starch
- B) Cellulose
- C) Glycogen
- D) This does not describe a polysaccharide.

Answer: A

Topic: 2.9

Skill: Knowledge/Comprehension

Learning Outcome: 2.6

40) Lipids are all _____.

- A) hydrophonic
- B) hydrophilic
- C) hydrophobic
- D) hydrolytic

Answer: C

Topic: 2.10

Skill: Knowledge/Comprehension

Learning Outcome: 2.6

41) Which combination describes the plasma membrane? A)

Hydrophilic interior, hydrophobic exterior

- B) Hydrophilic interior and exterior
- C) Hydrophobic interior, hydrophilic exterior
- D) Hydrophobic interior and exterior

Answer: C

Topic: 2.10

Skill: Knowledge/Comprehension

Learning Outcome: 2.6

42) What is the basic structure of most lipids?

- A) A glycerol head and up to three fatty acid tails
- B) A linear chain of individual monomers
- C) A branched chain of individual monomers
- D) A ring with carbon, hydrogen, and oxygen in a 1:2:1 ratio

Answer: A

Topic: 2.10

Skill: Knowledge/Comprehension

Learning Outcome: 2.6

43) Which of the following dietary fats is considered to be the most healthy?

- A) Saturated fat
- B) Unsaturated fat
- C) Trans fat
- D) Cholesterol

Answer: B

Topic: 2.11

Skill: Knowledge/Comprehension

Learning Outcome: 2.6

Global Learning: G5

44) Oil hydrogenation can produce a product, such as vegetable shortening or margarine, that is spreadable at room temperature. What is the name of this category of lipid?

A) Saturated fat B)

Unsaturated fat C)

Trans fat

D) Cholesterol

Answer: C

Topic: 2.11

Skill: Knowledge/Comprehension

Learning Outcome: 2.6

Global Learning: G5

45) Which would have the highest concentration of C-H bonds?

A) Saturated fat

B) Unsaturated fat

C) Trans fat

D) Cholesterol

Answer: A

Topic: 2.11

Skill: Application/Analysis

Learning Outcome: 2.6

46) What gives an amino acid its unique chemical properties?

A) The different amino groups

B) The sequence of amino acids in a chain C)

The bond that forms between amino acids D)

The side group

Answer: D

Topic: 2.12

Skill: Knowledge/Comprehension

Learning Outcome: 2.6

47) To a large extent, a protein's function is dependent upon its shape. What determines a protein's shape?

A) The location of the active site

B) The sequence of amino acids

C) The concentration of carbon-to-hydrogen single bonds

D) The number of carbon-to-carbon double bonds

Answer: B

Topic: 2.12

Skill: Application/Analysis

Learning Outcome: 2.6

48) Proteins are diverse molecules that perform a wide variety of functions. Which of the following is *not* a typical function of proteins?

- A) Defense
- B) Catalyze reactions
- C) Movement
- D) Energy storage

Answer: D Topic:

2.12

Skill: Knowledge/Comprehension

Learning Outcome: 2.6

49) What might lead to a protein that does not function properly?

- A) Incorrect folding of the amino acid chain
- B) The active site becoming blocked
- C) The active site becoming distorted
- D) All of these

Answer: D

Topic: 2.12, 2.13

Skill: Application/Analysis

Learning Outcome: 2.6

50) Organic molecules that end in the suffix "-ase" often function as _____ molecules.

- A) structural
- B) enzymatic
- C) transport
- D) storage

Answer: B

Topic: 2.13

Skill: Application/Analysis

Learning Outcome: 2.6

51) Identify the substrate in the following reaction: Sucrose \rightarrow Fructose + Glucose

- A) Sucrose
- B) Fructose
- C) Glucose
- D) Fructose and glucose

Answer: A

Topic: 2.13

Skill: Application/Analysis

Learning Outcome: 2.1

52) What will be accomplished by lowering the activation energy of a reaction?

- A) The reaction will proceed more slowly.
- B) The reaction will proceed more quickly.
- C) The reaction will stop completely.
- D) The reaction will reverse.

Answer: B

Topic: 2.13

Skill: Application/Analysis
Learning Outcome: 2.6
Global Learning: G2

Short-Answer Questions

53) An old home remedy for anemia was to drink from a jug of water into which was added a handful of iron nails. Why might this have been effective at treating certain forms of anemia?
Answer: Possible Answer: Iron is an essential nutrient and the water would have contained iron. If the anemia was the result of an iron deficiency, drinking from the nail water could have added the essential element to the diet.

Topic: 2.2

Skill: Synthesis/Evaluation

Learning Outcome: 2.1

Global Learning: G2, G5

54) Which of the three gasses is the easiest to break apart, nitrogen gas (N_2), oxygen gas (O_2), or hydrogen gas (H_2)? Which is the most difficult to break apart? What accounts for the differences?

Answer: Possible Answer: Hydrogen gas, with a single covalent bond, is the easiest to break apart. Nitrogen gas, with a triple covalent bond, is the most difficult. Oxygen gas has a double covalent bond which is intermediate in strength to the weaker single and stronger triple.

Topic: 2.4

Skill: Application/Analysis

Learning Outcome: 2.2

Global Learning: G2

55) Why does sweating cool your skin on a hot, dry day but makes you feel warmer on a hot, humid day?

Answer: Possible Answer: The evaporative cooling of sweat cools the skin as the water and the heat it has absorbed move from the skin to the drier air. Sweat does not evaporate as well on a humid day, tending instead to build up on the skin, insulating the body rather than cooling it.

Topic: 2.5

Skill: Synthesis/Evaluation

Learning Outcome: 2.3

Global Learning: G2

56) Individual amino acids have unique chemical qualities but these do not directly determine the function of an enzyme. What then is the role of the individual amino acid's unique chemical qualities and what then directly determines the function of an enzyme?

Answer: Possible Answer: The side groups of an amino acid are what give the amino acid its unique chemical qualities. These allow specific amino acids in the polypeptide chain to bind to other specific amino acids, which fold and twist the polypeptide into a specific three-dimensional shape. The shape may include an indentation called the active site that directly functions as the binding site for the substrate. Active sites often include cofactors and coenzymes that improve its functionality. They will not function without these factors even if the amino acid sequence and folding pattern are correct.

Topic: 2.12, 2.13

Skill: Synthesis/Evaluation

Learning Outcome: 2.6

Global Learning: G2

57) Penicillin is a competitive inhibitor produced by a fungus in order to kill invading bacteria. It does this by mimicking the substrate required by the bacterium to build and repair its cell wall. Describe how mimicking the substrate would result in the death of the bacterium.

Answer: Possible Answer: As a competitive inhibitor, it must bind to the active site of the bacterial enzyme where the correct substrate typically binds. Binding to the active site blocks the correct substrate from binding and prevents the correct products from being formed. Without these products, the bacterium cannot repair its cell wall and will die.

Topic: 2.13

Skill: Synthesis/Evaluation

Learning Outcome: 2.6

Global Learning: G5