

Solution Manual for Engineering Mechanics Dynamics SI 4th Edition by Pytel Kiusalaas ISBN 1305579216 9781305579217

Full link download at:

<https://testbankpack.com/p/solution-manual-for-engineering-mechanics-dynamics-si-4th-edition-by-pytel-kiusalaas-isbn-1305579216-9781305579217/>

Chapter 12

12.1

$$\begin{aligned}y &= -0.16t^4 + 4.9t^3 + 0.14t^2 \text{ m} \\v &= \dot{y} = -0.64t^3 + 14.7t^2 + 0.28t \text{ m/s} \\a &= \dot{v} = -1.92t^2 + 29.4t + 0.28 \text{ m/s}^2\end{aligned}$$

At maximum velocity ($a = 0$):

$$-1.92t^2 + 29.4t + 0.28 = 0 \quad t = 15.322 \text{ s}$$

$$\begin{aligned}v_{\max} &= -0.64(15.322^3) + 14.7(15.322^2) + 0.28(15.322) \\&= 1153 \text{ m/s} \\y &= -0.16(15.322^4) + 4.9(15.322^3) + 0.14(15.322^2) \\&= 8840 \text{ m}\end{aligned}$$

12.2

$$(a) \quad x = -\frac{1}{2}gt^2 + v_0t \quad \therefore v = \dot{x} = -gt + v_0 \quad \therefore a = \ddot{x} = -g$$

When $t = 0$, then $x = 0$ and $v = v_0$. Hence v_0 is the initial velocity.

Since gravity is the only source of acceleration in this problem, g must be the gravitation acceleration.

$$(b) \text{ When } x = x_{\max} \text{ then } v = 0. \quad \therefore -gt + v_0 = 0 \quad \therefore t = \frac{v_0}{g}$$

$$\therefore x_{\max} = -\frac{1}{2}g \left(\frac{v_0}{g}\right)^2 + v_0 \left(\frac{v_0}{g}\right) = \frac{v_0^2}{2g}$$

$$\text{At the end of flight } x = 0. \quad \therefore -\frac{1}{2}gt^2 + v_0t = 0 \quad \therefore t = \frac{2v_0}{g}$$

$$(c) \therefore x_{\max} = \frac{(26.8)^2}{2(9.81)} = 36.6 \text{ m} \quad \therefore t = \frac{2(26.8)}{9.81} = 5.46 \text{ s}$$

12.3

$$x = 6(1 - e^{-t/2}) \text{ m}$$

$$v = \dot{x} = 6 \left(\frac{1}{2}\right)e^{-t/2} = 3e^{-t/2} \text{ m/s}$$

$$a = \dot{v} = -3 \left(\frac{1}{2}\right)e^{-t/2} = -1.5e^{-t/2} \text{ m/s}^2$$

(a) $x_{\max} = 6 \text{ m}$ at $t = \infty$
 $v_{\max} = 3 \text{ m/s}$ and $|a|_{\max} = 1.5 \text{ m/s}^2$ both occurring at $t = 0$

(b) When $x = 3 \text{ m}$: $3 = 6(1 - e^{-t/2})$ $e^{-t/2} = 0.5$
 $t = -2 \ln(0.5) = 1.3863 \text{ s}$
 $v = 3(0.5) = 1.5 \text{ m/s}$ $a = -1.5(0.5) = -0.75 \text{ m/s}^2$

12.4

$$x = t^3 - 6t^2 - 32t \text{ m}$$

$$v = \dot{x} = 3t^2 - 12t - 32 \text{ m/s}$$

$$a = \dot{v} = 6t - 12 \text{ m/s}^2$$

At $t = 10 \text{ s}$:

$$x = 10^3 - 6(10^2) - 32(10) = 80 \text{ m}$$

$$v = 3(10^2) - 12(10) - 32 = 148 \text{ m/s}$$

$$a = 6(10) - 12 = 48 \text{ m/s}^2$$

Reversal of velocity occurs when $v = 0$ ($t = 0$):

$$v = 3t^2 - 12t - 32 = 0 \quad t = 5.830 \text{ s}$$

$$x = 5.830^3 - 6(5.830^2) - 32(5.830) = -192.3 \text{ m}$$

At $t = 10 \text{ s}$ the distance travelled is

$$s = 192.3 + (192.3 + 80) = 466 \text{ m}$$



12.5 (a) $x = t^2 - \frac{t^3}{90} \text{ m}$ $v = \dot{x} = 2t - \frac{t^2}{30} \text{ m/s}$ $v = 0$ when $t = 60 \text{ s}$

$$x_{\max} = 60^2 - \frac{60^3}{90} = 1200 \text{ m}$$

(b) $a = \dot{v} = 2 - \frac{t}{15} \text{ m/s}^2$ $a = 0$ when $t = 30 \text{ s}$

$$v_{\max} = 2(30) - \frac{30^2}{30} = 30 \text{ m/s}$$

12.6

$$(a) x = v_0(t - t_0 + t_0 e^{-t/t_0}) \quad \therefore v = \dot{x} = v_0(1 - e^{-t/t_0}) \quad \blacklozenge$$

Since $v \rightarrow v_0$ as $t \rightarrow \infty$, v_0 is the limiting or terminal velocity.

$$(b) a = \dot{v} = \frac{v_0}{t_0} e^{-t/t_0} \quad \blacklozenge \quad \text{But from part (a): } v_0 - v = v_0 e^{-t/t_0} \quad \therefore a = \frac{v_0 - v}{t_0} \quad \blacklozenge$$

12.7

$$x = 3t^2 - 12t \text{ m} \quad v = \dot{x} = 6t - 12 \text{ m/s}$$

(a) The bead leaves the wire when $x = 40$ m

$$3t^2 - 12t = 40 \quad t = 6.16 \text{ s}$$

(b) Reversal of velocity occurs when $v = 0$ ($t = 0$):

$$v = 6t - 12 \quad t = 2.0 \text{ s}$$

$$x = 3(2.0^2) - 12(2.0) = -12.0 \text{ m}$$

The distance travelled is

$$s = 2(12) + 40 = 64.0 \text{ m}$$

12.8

$$x = 4t^2 - 2 \text{ mm}$$

$$y = \frac{x^2}{12} = \frac{16t^4 - 16t^2 + 4}{12} = \frac{4t^4 - 4t^2 + 1}{3} \text{ mm}$$

When $t = 2$ s:

$$v_x = \dot{x} = 8t = 8(2) = 16 \text{ mm/s}$$

$$v_y = \dot{y} = \frac{16t^3 - 8t}{3} = \frac{16(2)^3 - 8(2)}{3} = 37.33 \text{ mm/s}$$

$$v = \sqrt{v_x^2 + v_y^2} = \sqrt{16^2 + 37.33^2} = 40.6 \text{ mm/s}$$

$$a_x = \dot{v}_x = 8 \text{ mm/s}^2$$

$$a_y = \dot{v}_y = \frac{48t^2 - 8}{3} = \frac{48(2)^2 - 8}{3} = 61.33 \text{ mm/s}^2$$

$$a = \sqrt{a_x^2 + a_y^2} = \sqrt{8^2 + 61.33^2} = 61.9 \text{ mm/s}^2$$

12.9

$$(a) \ x = R \left(1 + \frac{1}{2} \cos \omega t \right) \quad \therefore \ v = \dot{x} = -\frac{1}{2} R \omega \sin \omega t \quad \therefore \ a = \dot{v} = -\frac{1}{2} R \omega^2 \cos \omega t$$

$$(b) \ |v|_{\max} = \frac{1}{2} R \omega \quad |a|_{\max} = \frac{1}{2} R \omega^2$$

\therefore Doubling ω would double $|v|_{\max}$ and quadruple $|a|_{\max}$.

12.10

$$y = 50 - 2t \text{ s} \quad v_y = \dot{y} = -2 \text{ m/s} \quad a_y = \dot{v}_y = 0$$

$$x = \frac{6}{y} = \frac{6}{50 - 2t} \text{ m} \quad v_x = \dot{x} = \frac{3}{(25 - t)^2} \text{ m/s} \quad a_x = \dot{v}_x = \frac{6}{(25 - t)^3}$$

At $t = 20$ s:

$$v_x = \frac{3}{(25 - 20)^2} = 0.12 \text{ m/s} \quad v_y = -2 \text{ m/s} \quad \mathbf{v} = 0.12\mathbf{i} - 2\mathbf{j} \text{ m/s}$$

$$a_x = \frac{6}{(25 - 20)^3} = 0.048 \text{ m/s}^2 \quad a_y = 0 \quad \mathbf{a} = 0.048\mathbf{i} \text{ m/s}^2$$

12.11

$$(a) \ v^2 = 2gr_0(r_0/r - 1) + v_0^2$$

Differentiate with respect to time: $2v\dot{v} = 2gr_0(-r_0/r^2)\dot{r}$ or $2va = -2g(r_0/r)^2v$

$$\therefore \ a = -g(r_0/r)^2$$

(b) v_0 is the escape velocity if $v \rightarrow 0$ when $r \rightarrow \infty$.

$$\therefore \ 0 = \lim_{r \rightarrow \infty} [2gr_0(r_0/r - 1) + v^2] \quad \therefore \ 0 = \underbrace{2gr_0}_{0} \underbrace{(0 - 1)}_{0} + \underbrace{v^2}_{0} \quad \therefore \ v_0 = \sqrt{\frac{2gr_0}{0}}$$

$$(c) \ \text{For earth: } v_0 = \sqrt{2(9.81)(6340 \times 1000)} = 11153 \text{ m/s}$$

12.12

$$x = 15 - 2t^2 \text{ m} \quad v_x = \dot{x} = -4t \text{ m/s} \quad a_x = \dot{v}_x = -4 \text{ m/s}^2$$

$$y = 15 - 10t + t^2 \text{ m} \quad v_y = \dot{y} = -10 + 2t \text{ m/s} \quad a_y = \dot{v}_y = 2 \text{ m/s}^2$$

$$(a) \ \text{At } t = 0: \quad \mathbf{v} = -10\mathbf{j} \text{ m/s} \quad \mathbf{a} = -4\mathbf{i} + 2\mathbf{j} \text{ m/s}^2$$

$$(b) \ \text{At } t = 5 \text{ s:} \quad \mathbf{v} = -20\mathbf{i} \text{ m/s} \quad \mathbf{a} = -4\mathbf{i} + 2\mathbf{j} \text{ m/s}^2$$

12.13

$$x = 58t \text{ m} \quad v_x = \dot{x} = 58 \text{ m/s} \quad a_x = \dot{v}_x = 0$$

$$y = 78t - 4.91t^2 \text{ m} \quad v_y = \dot{y} = 78 - 9.82t \text{ m/s} \quad a_y = \dot{v}_y = -9.82 \text{ m/s}^2$$

(a) $\mathbf{a} = -9.82\mathbf{j} \text{ m/s}^2$

(b) $\mathbf{v}|_{t=0} = 58\mathbf{i} + 78\mathbf{j} \text{ m/s}$

(c) $y = h$ when $v_y = 0$:

$$v_y = 78 - 9.82t = 0 \quad t = 7.943 \text{ s}$$

$$h = 78(7.943) - 4.91(7.943^2) = 310 \text{ m}$$

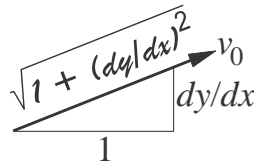
(d) $x = L$ when $y = -140 \text{ m}$:

$$y = 78t - 4.91t^2 = -140 \quad t = 17.514 \text{ s}$$

$$L = 58(17.514) = 1016 \text{ m}$$

12.14

$$y = \frac{x^2}{1000} \quad \frac{dy}{dx} = \frac{x}{500}$$



$$v_x = v_0 \frac{1}{\sqrt{1 + (dy/dx)^2}} = \frac{v_0}{\sqrt{1 + (x/500)^2}} = \frac{500v_0}{\sqrt{500^2 + x^2}}$$

$$v_y = v_0 \frac{dy/dx}{\sqrt{1 + (dy/dx)^2}} = \frac{v_0(x/500)}{\sqrt{1 + (x/500)^2}} = \frac{xv_0}{\sqrt{500^2 + x^2}}$$

When $x = 100 \text{ m}$:

$$v_x = \frac{500(6)}{\sqrt{500^2 + 100^2}} = 5.883 \text{ m/s}$$

$$v_y = \frac{100(6)}{\sqrt{500^2 + 100^2}} = 1.1767 \text{ m/s}$$

$$\mathbf{v} = 5.88\mathbf{i} + 1.177\mathbf{j} \text{ m/s}$$

$$a_x = \dot{v}_x = \frac{dv_x}{dx} \frac{dx}{dt} = \frac{dv_x}{dx} v_x = -\frac{500xv_0}{(500^2 + x^2)^{3/2}} v_x$$

$$a_y = \dot{v}_y = \frac{dv_y}{dx} \frac{dx}{dt} = \frac{dv_y}{dx} v_x = \frac{500^2 v_0}{(500^2 + x^2)^{3/2}} v_x$$

When $x = 100$ m:

$$a_x = -\frac{500(100)(6)}{(500^2 + 100^2)^{3/2}} (5.883) = -0.01331 \text{ m/s}^2$$

$$a_y = \frac{500^2(6)}{(500^2 + 100^2)^{3/2}} (5.883) = 0.0666 \text{ m/s}^2$$

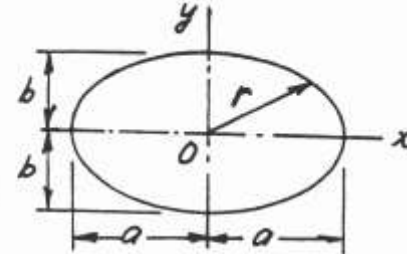
$$\mathbf{a} = -0.01331\mathbf{i} + 0.0666\mathbf{j} \text{ m/s}^2$$

12.15

(a) $x = a \cos \omega t$ $y = b \sin \omega t$

$$\therefore \frac{x^2}{a^2} + \frac{y^2}{b^2} = \cos^2 \omega t + \sin^2 \omega t = 1$$

which is the equation of ellipse \therefore Q.E.D.



(b) $v_x = \dot{x} = -a\omega \sin \omega t$ $a_x = \ddot{x} = -a\omega^2 \cos \omega t = -\omega^2 x$

$v_y = \dot{y} = b\omega \cos \omega t$ $a_y = \ddot{y} = -b\omega^2 \sin \omega t = -\omega^2 y$

$$\therefore \mathbf{a} = a_x \mathbf{i} + a_y \mathbf{j} = -\omega^2(x\mathbf{i} + y\mathbf{j}) = -\omega^2 \mathbf{r}$$

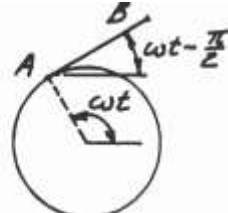
$\therefore \mathbf{a}$ and \mathbf{r} are collinear \therefore Q.E.D.

12.16

$x = R \cos \omega t + R\omega t \sin \omega t$ $y = R \sin \omega t - R\omega t \cos \omega t$

$$\therefore v_x = \dot{x} = -R\omega \sin \omega t + R\omega \sin \omega t + R\omega^2 t \cos \omega t = R\omega^2 t \cos \omega t$$

$$\therefore v_y = \dot{y} = R\omega \cos \omega t - R\omega \cos \omega t + R\omega^2 t \sin \omega t = R\omega^2 t \sin \omega t$$

$$\therefore \mathbf{v} = v_x \mathbf{i} + v_y \mathbf{j} = R\omega^2 t(\mathbf{i} \cos \omega t + \mathbf{j} \sin \omega t) \quad \therefore \mathbf{v} = R\omega^2 t \boldsymbol{\phi}$$


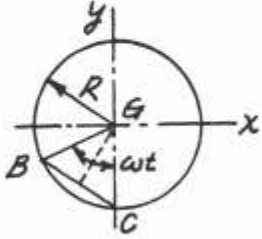
$$\overrightarrow{AB} = \overline{AB} [\mathbf{i} \cos(\omega t - \pi/2) + \mathbf{j} \sin(\omega t - \pi/2)]$$

$$= \overline{AB} (\mathbf{i} \sin \omega t - \mathbf{j} \cos \omega t)$$

By inspection: $\mathbf{v} \cdot \overrightarrow{AB} = 0 \quad \therefore \mathbf{v}$ is perpendicular to $\overrightarrow{AB} \quad \therefore$ Q.E.D.

12.17

(a) $x = R(\omega t - \sin \omega t) \quad \therefore \dot{x} = \dot{x} = R\omega(1 - \cos \omega t)$
 $y = R(1 - \cos \omega t) \quad \therefore \dot{y} = \dot{y} = R\omega \sin \omega t$
 $\therefore v^2 = \dot{x}^2 + \dot{y}^2 = R^2\omega^2[(1 - \cos \omega t)^2 + \sin^2 \omega t] = 2R^2\omega^2(1 - \cos \omega t) = 4R^2\omega^2 \sin^2 \frac{\omega t}{2}$
 $\therefore v = 2R\omega \sin \frac{\omega t}{2}$
 But $\overline{BC} = 2R \sin \frac{\omega t}{2} \quad \therefore v = \omega \overline{BC} \quad \therefore \text{Q.E.D.}$



(b) $a_x = \ddot{x} = R\omega^2 \sin \omega t \quad a_y = \ddot{y} = R\omega^2 \cos \omega t$
 $\therefore \mathbf{a} = a_x \mathbf{i} + a_y \mathbf{j} = (R\omega^2 \sin \omega t)\mathbf{i} + (R\omega^2 \cos \omega t)\mathbf{j}$
 $\overrightarrow{BG} = (R \sin \omega t)\mathbf{i} + (R \cos \omega t)\mathbf{j} = \frac{1}{\omega^2} \mathbf{a} \quad \therefore \overrightarrow{BG} \text{ and } \mathbf{a} \text{ are parallel} \quad \therefore \text{Q.E.D.}$

12.18

$x = R \cos \omega t \quad y = R \sin \omega t \quad z = -\frac{h}{2\pi} \omega t$
 $\therefore \dot{x} = \dot{x} = -R\omega \sin \omega t \quad \dot{y} = \dot{y} = R\omega \cos \omega t \quad \dot{z} = \dot{z} = -\frac{h\omega}{2\pi}$
 $v^2 = \dot{x}^2 + \dot{y}^2 + \dot{z}^2 = R^2\omega^2 \sin^2 \omega t + R^2\omega^2 \cos^2 \omega t + \left(\frac{h\omega}{2\pi}\right)^2 = (R\omega)^2 + \left(\frac{h\omega}{2\pi}\right)^2$
 $\therefore v = R\omega \sqrt{1 + \left[\frac{h}{2\pi R}\right]^2} = \text{constant} \quad \therefore \text{Q.E.D.}$
 $a_x = \ddot{x} = -R\omega^2 \cos \omega t \quad a_y = \ddot{y} = -R\omega^2 \sin \omega t \quad a_z = \ddot{z} = 0$
 $a^2 = a_x^2 + a_y^2 + a_z^2 = R^2\omega^4 (\cos^2 \omega t + \sin^2 \omega t) = R^2\omega^4 \quad \therefore a = R\omega^2 = \text{constant} \quad \therefore \text{Q.E.D.}$

Using the given data:

$v = (1.2)(4\pi) \sqrt{1 + \left[\frac{0.75}{2\pi(1.2)}\right]^2} = 15.15 \text{ m/s} \quad \blacklozenge \quad a = (1.2)(4\pi)^2 = 189.5 \text{ m/s}^2 \quad \blacklozenge$

12.19

$$\begin{aligned}
 x &= 0.8v_0t & y &= 0.6v_0t & z &= -0.04v_0^2t^2 \\
 \therefore v_x = \dot{x} &= 0.8v_0 & v_y = \dot{y} &= 0.6v_0 & v_z = \dot{z} &= -0.08v_0^2t \\
 \therefore a_x = \dot{v}_x &= 0 & a_y = \dot{v}_y &= 0 & a_z = \dot{v}_z &= -0.08v_0^2
 \end{aligned}$$

(a) At point B: $x = 4 \text{ in}$ $\therefore 4 = 0.8v_0t$ $\therefore t = 5/v_0$ $\therefore v_z = -0.4v_0$

$$\begin{aligned}
 \therefore v &= \sqrt{v_x^2 + v_y^2 + v_z^2} = v_0\sqrt{0.8^2 + 0.6^2 + 0.4^2} = 1.0770v_0 \quad \diamond \\
 a &= |a_z| = 0.08v_0^2 \quad \diamond
 \end{aligned}$$

(b) Let θ be the angle between the path and the z-axis at point B.

$$\therefore \cos\theta = \frac{\mathbf{v} \cdot \mathbf{k}}{|\mathbf{v}|} = \frac{-0.4v_0}{1.0770v_0} = -0.3714 \quad \therefore \theta = 111.8^\circ$$

\therefore The angle between the path and the x-y plane is: $\theta - 90^\circ = 21.8^\circ \quad \diamond$

12.20

(a) $\mathbf{r} = (3t^2 + 4t)\mathbf{i} + (-4t^2 + 3t)\mathbf{j} + (-6t + 9)\mathbf{k} \text{ m}$
 $\therefore \mathbf{v} = \dot{\mathbf{r}} = (6t + 4)\mathbf{i} + (-8t + 3)\mathbf{j} - 6\mathbf{k} \text{ m/s}$
 $\therefore \mathbf{a} = \dot{\mathbf{v}} = 6\mathbf{i} - 8\mathbf{j} \text{ m/s}^2$

(b) The vector normal to the plane formed by \mathbf{v} and \mathbf{a} (the instantaneous plane of motion) is

$$\mathbf{v} \times \mathbf{a} = \begin{vmatrix} \mathbf{i} & \mathbf{j} & \mathbf{k} \\ 6t + 4 & -8t + 3 & -6 \\ 6 & -8 & 0 \end{vmatrix} = -48\mathbf{i} - 36\mathbf{j} - 50\mathbf{k}$$

and the corresponding unit vector is

$$\mathbf{n} = \frac{-48\mathbf{i} - 36\mathbf{j} - 50\mathbf{k}}{\sqrt{48^2 + 36^2 + 50^2}} = \pm(0.615\mathbf{i} + 0.461\mathbf{j} + 0.640\mathbf{k})$$

Since this vector is independent of t , the orientation of the plane does not vary with the location of the particle. Thus the particle is in plane motion on an inclined plane. Q.E.D.

12.21

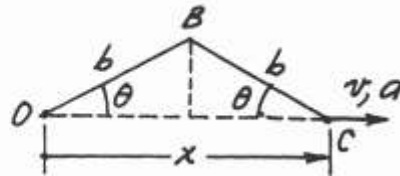
$$\begin{aligned}
 x &= R \cos \omega t & y &= R \sin \omega t & z &= \frac{R}{2} \sin 2\omega t \\
 \therefore v_x = \dot{x} &= -R\omega \sin \omega t & v_y = \dot{y} &= R\omega \cos \omega t & v_z = \dot{z} &= R\omega \cos 2\omega t \\
 \therefore v &= \sqrt{v_x^2 + v_y^2 + v_z^2} = R\omega \sqrt{\cos^2 \omega t + \sin^2 \omega t + \cos^2 2\omega t} = R\omega \sqrt{1 + \cos^2 2\omega t} \\
 \therefore v_{\max} &= \sqrt{2} R\omega \quad \diamond \\
 a_x = \ddot{x} &= -R\omega^2 \cos \omega t & a_y = \ddot{y} &= -R\omega^2 \sin \omega t & a_z = \ddot{z} &= -2R\omega^2 \sin 2\omega t \\
 \therefore a &= \sqrt{a_x^2 + a_y^2 + a_z^2} = R\omega^2 \sqrt{\cos^2 \omega t + \sin^2 \omega t + 4 \sin^2 2\omega t} = R\omega^2 \sqrt{1 + 4 \sin^2 2\omega t} \\
 \therefore a_{\max} &= \sqrt{5} R\omega^2 \quad \diamond
 \end{aligned}$$

12.22

(a) From geometry: $x = 2b \cos \theta$

$$\therefore v = \dot{x} = -2b\dot{\theta} \sin \theta \rightarrow \diamond$$

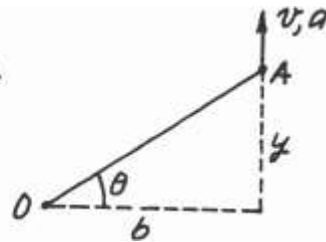
(b) $\therefore a = \dot{v} = -2b(\ddot{\theta} \sin \theta + \dot{\theta}^2 \cos \theta) \rightarrow \diamond$



12.23

(a) Geometry: $y = b \tan \theta \quad \therefore v = \dot{y} = b\dot{\theta} \sec^2 \theta \uparrow \diamond$

(b) $\therefore a = \dot{v} = b[\ddot{\theta} \sec^2 \theta + 2\dot{\theta} \sec \theta (\sec \theta \tan \theta \dot{\theta})]$
 $= b \sec^2 \theta (\ddot{\theta} + 2\dot{\theta}^2 \tan \theta) \uparrow \diamond$



12.24

$$\begin{aligned}
 x &= R \cos \theta & v_x = \dot{x} &= (-R \sin \theta) \dot{\theta} \\
 y &= R \sin \theta & v_y = \dot{y} &= (R \cos \theta) \dot{\theta} \\
 v_y = v_0 & \text{ yields } \dot{\theta} &= \frac{v_0}{R \cos \theta} \\
 \therefore v_x &= (-R \sin \theta) \frac{v_0}{R \cos \theta} = -v_0 \tan \theta \\
 a_x = \dot{v}_x &= -v_0 \sec^2 \theta \dot{\theta} = -v_0 \sec^2 \theta \frac{v_0}{R \cos \theta} = -\frac{v_0^2}{R} \sec^3 \theta
 \end{aligned}$$

With $R = 6 \text{ m}$, $v_0 = 2.5 \text{ m/s}$ and $\theta = 60^\circ$ we get

$$\begin{aligned}
 v_y &= 2.5 \text{ m/s} & v_x &= -2.5 \tan 60^\circ = -4.330 \text{ m/s} \\
 v &= -4.33i + 2.5j \text{ m/s} \\
 a_y &= 0 & a_x &= -\frac{2.5^2}{6} \sec^3 60^\circ = -8.333 \text{ m/s}^2 \\
 a &= -8.33i \text{ m/s}^2
 \end{aligned}$$

12.25

$$\dot{\theta} = \frac{1200 \text{ rev}}{1.0 \text{ min}} \times \frac{2\pi \text{ rad}}{1.0 \text{ rev}} \times \frac{1.0 \text{ min}}{60 \text{ s}} = 125.66 \text{ rad/s}$$

$$r = 55 + 10 \cos \theta + 5 \cos 2\theta \text{ mm}$$

$$v = \dot{r} = \frac{dr}{d\theta} \dot{\theta} = (-10 \sin \theta - 10 \sin 2\theta)(125.66) \text{ mm/s}$$

$$a = \dot{v} = \frac{dv}{d\theta} \dot{\theta} = (-10 \cos \theta - 20 \cos 2\theta)(125.66)^2 \text{ mm/s}^2$$

$$|a|_{\max} = 30(125.66)^2 = 474\,000 \text{ mm/s}^2 = 474 \text{ m/s}^2 \text{ (at } \theta = 0\text{)}$$

*12.26

(a) Geometry: $x = y \tan \theta_A = y \tan \theta_B + b \dots\dots\dots$ (a)

$$\therefore y = \frac{b}{\tan \theta_A - \tan \theta_B} = \frac{1000}{\tan 30^\circ - \tan 22^\circ} = 5770 \text{ m} \spadesuit$$

(b) Differentiate Eq. (a):

$$\dot{x} = y \dot{\theta}_A \sec^2 \theta_A + \dot{y} \tan \theta_A = y \dot{\theta}_B \sec^2 \theta_B + \dot{y} \tan \theta_B \text{ (b)}$$

$$\therefore \dot{y} = -y \frac{\dot{\theta}_A \sec^2 \theta_A - \dot{\theta}_B \sec^2 \theta_B}{\tan \theta_A - \tan \theta_B}$$

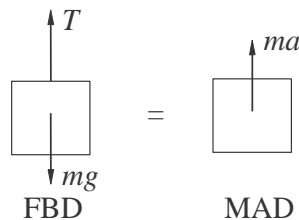
$$= -(5770) \frac{(0.026) \sec^2 30^\circ - (0.032) \sec^2 22^\circ}{\tan 30^\circ - \tan 22^\circ} = 85.11 \text{ m/s}$$

From Eq. (b): $\dot{x} = (5770)(0.026) \sec^2 30^\circ + (85.11) \tan 30^\circ = 249.2 \text{ m/s}$

$$\therefore v = \sqrt{\dot{x}^2 + \dot{y}^2} = \sqrt{249.2^2 + 85.11^2} = 263 \text{ m/s} \spadesuit$$

(c) $\therefore \alpha = \tan^{-1}(\dot{y}/\dot{x}) = \tan^{-1} \frac{85.11}{249.2} = 18.86^\circ \spadesuit$

12.27

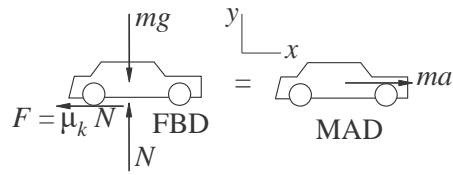


$$v = 4t \text{ m/s} \quad a = \dot{v} = 4 \text{ m/s}^2$$

$$\Sigma F = ma \quad + \uparrow \quad T - mg = ma$$

$$T = m(g + a) = 50(9.81 + 4) = 691 \text{ N}$$

12.28



$$v_0 = 100 \text{ km/h} = 100 \text{ km/h} \frac{1000 \text{ m/km}}{3600 \text{ s/h}} = 27.78 \text{ m/s}$$

$$\Sigma F_y = 0 \quad + \uparrow \quad N - mg = 0 \quad \therefore N = mg$$

$$\Sigma F_x = ma \quad \rightarrow \quad -\mu_k N = ma \quad \therefore a = -\frac{\mu_k N}{m} = -\mu_k g$$

$$v = \int a \, dt = -\mu_k g t + C_1$$

$$x = \int v \, dt = -\frac{1}{2} \mu_k g t^2 + C_1 t + C_2$$

When $t = 0$ (initial conditions):

$$x = 0 \quad \therefore C_2 = 0 \quad v = v_0 \quad \therefore C_1 = v_0$$

$$\therefore x = -\frac{1}{2} \mu_k g t^2 + v_0 t \quad v = -\mu_k g t + v_0$$

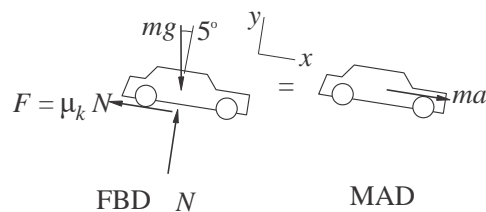
When $v = 0$:

$$-\mu_k g t + v_0 = 0 \quad \therefore t = \frac{v_0}{\mu_k g}$$

$$x = -\frac{1}{2} \mu_k g \left(\frac{v_0}{\mu_k g} \right)^2 + v_0 \left(\frac{v_0}{\mu_k g} \right) = \frac{v_0^2}{2 \mu_k g}$$

$$= \frac{27.78^2}{2(0.65)(9.81)} = 60.5 \text{ m}$$

12.29



12.28

$$v_0 = 100 \text{ km/h} = 27.78 \text{ m/s}$$

$$\begin{aligned}\Sigma F_y = 0 \quad + \uparrow \quad N - mg \cos 5^\circ = 0 \quad \therefore N = mg \cos 5^\circ \\ \Sigma F_x = ma \quad \rightarrow \quad -\mu_k N + mg \sin 5^\circ = ma\end{aligned}$$

$$\begin{aligned}\therefore a = -\frac{\mu_k N}{m} + g \sin 5^\circ = (\sin 5^\circ - \mu_k \cos 5^\circ)g \\ = (\sin 5^\circ - 0.65 \cos 5^\circ)9.81 = -5.497 \text{ m/s}^2\end{aligned}$$

$$v = \int a \, dt = -5.497t + C_1$$

$$x = \int v \, dt = -2.749t^2 + C_1t + C_2$$

When $t = 0$ (initial conditions):

$$x = 0 \quad \therefore C_2 = 0 \quad v = v_0 \quad \therefore C_1 = v_0 = 27.78 \text{ m/s}$$

$$x = -2.749t^2 + 27.78t \text{ m}$$

$$v = -5.497t + 27.78 \text{ m/s}$$

When $v = 0$:

$$-5.497t + 27.78 = 0 \quad \therefore t = 5.054 \text{ s}$$

$$x = -2.749(5.054)^2 + 27.78(5.054) = 70.2 \text{ m}$$

12.30

$$a = \frac{F}{m} = \frac{1.2t}{0.1} = -12t \text{ m/s}^2$$

$$v = \int a_x \, dt = -6t^2 + C_1 \text{ m/s}$$

$$x = \int v_x \, dt = -2t^3 + C_1t + C_2 \text{ m}$$

When $t = 0$ (initial conditions):

$$x = 0 \quad \therefore C_2 = 0 \quad v = 64 \text{ m/s} \quad \therefore C_1 = 64 \text{ m/s}$$

$$\therefore x = -2t^3 + 64t \text{ m} \quad v = -6t^2 + 64 \text{ m/s}$$

When $t = 4$ s:

$$x = -2(4)^3 + 64(4) = 128 \text{ m}$$

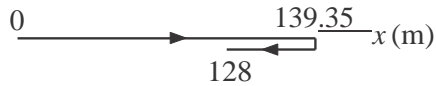
When $v = 0$:

$$-6t^2 + 64 = 0 \quad t = 3.266 \text{ s}$$

$$x = -2(3.266)^3 + 64(3.266) = 139.35 \text{ m}$$

Distance traveled:

$$d = 2(139.35) - 128 = 150.7 \text{ m}$$



12.31

$$a = \frac{F}{m} = \frac{0.06\sqrt{v}}{0.012} = 5\sqrt{v} \text{ m/s}^2$$

$$dt = \frac{dv}{a} = \frac{dv}{5\sqrt{v}} \quad t = \int \frac{dv}{5\sqrt{v}} = \frac{2}{5}\sqrt{v} + C_1$$

Given $v = 0.25 \text{ m/s}$ when $t = 0.8 \text{ s}$:

$$0.8 = \frac{2}{5}\sqrt{0.25} + C_1 \quad C_1 = 0.6 \text{ s}$$

$$t = \frac{2}{5}\sqrt{v} + 0.6 \text{ s}$$

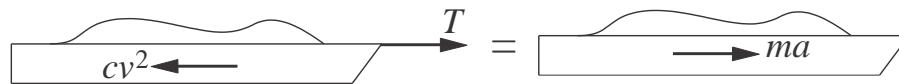
$$v = (2.5t - 1.5)^2 = 6.25t^2 - 7.5t + 2.25 \text{ m/s}$$

$$x = \int v dt = \frac{6.25}{3}t^3 - \frac{7.5}{2}t^2 + 2.25t + C_2$$

Initial condition: $x = 0$ when $t = 0 \quad \therefore C_2 = 0$

$$x|_{t=1.2\text{s}} = \frac{6.25}{3}(1.2)^3 - \frac{7.5}{2}(1.2)^2 + 2.25(1.2) = 0.90 \text{ m}$$

12.32



FBD

$$ma = T - F_D = T - cv^2$$

MAD

$$a = \frac{T - cv^2}{m}$$

$$x = \int \frac{v}{a} dv = m \int \frac{v}{T - cv^2} dv + C = -\frac{m}{2c} \ln |T - cv^2| + C$$

Initial condition: $v = 0$ at $x = 0$:

$$0 = -\frac{m}{2c} \ln(T) + C \quad C = \frac{m}{2c} \ln(T)$$
$$\therefore x = -\frac{m}{2c} \ln(T - cv^2) + \frac{m}{2c} \ln(T) = \frac{m}{2c} \ln \frac{T}{(T - cv^2)}$$

Solve for v :

$$\frac{T}{(T - cv^2)} = \exp \frac{2c}{m}x \quad T - cv^2 = T \exp \frac{-2c}{m}x$$

$$v^2 = \frac{T}{c} \left(1 - \exp \frac{-2c}{m}x \right) \quad v = \sqrt{\frac{T}{c} \left(1 - \exp \frac{-2c}{m}x \right)}$$

Terminal velocity:

$$v_\infty = \lim_{x \rightarrow \infty} v(x) = \sqrt{\frac{T}{c}}$$

12.33

$$a = \frac{F}{m} = \frac{4t - 4}{4} = t - 1 \text{ m/s}^2$$

$$v = \int a \, dt = \frac{1}{2}t^2 - t + C_1$$

$$y = \int v \, dt = \frac{1}{6}t^3 - \frac{1}{2}t^2 + C_1t + C_2$$

When $t = 0$ (initial condition):

$$y = 0 \quad \therefore C_2 = 0 \quad v = -8 \text{ m/s} \quad \therefore C_1 = -8 \text{ m/s}$$

$$\therefore y = \frac{1}{6}t^3 - \frac{1}{2}t^2 - 8t \text{ m} \quad v = \frac{1}{2}t^2 - t - 8 \text{ m/s}$$

When $t = 8$ s:

$$y = \frac{1}{6}(8)^3 - \frac{1}{2}(8)^2 - 8(8) = -10.67 \text{ m}$$

When $v = 0$:

$$\frac{1}{2}t^2 - t - 8 = 0 \quad t = 5.123 \text{ s}$$

$$y = \frac{1}{6}(5.123)^3 - \frac{1}{2}(5.123)^2 - 8(5.123) = -31.70 \text{ m}$$

Distance traveled:

$$d = 2(31.70) - 10.67 = 52.7 \text{ m}$$

-10.67



12.34

$$\Sigma F_y = ma_y: +\uparrow T \cos\theta - mg = 0$$

$$\Sigma F_x = ma_x: \rightarrow T \sin\theta = ma$$

The solution is: $\theta = \tan^{-1} \frac{a}{g}$ ♦

12.35

Assume impending climbing ($N_B = 0$).

$$\Sigma F_y = ma_y: +\uparrow N_A \cos\theta - mg = 0$$

$$\Sigma F_x = ma_x: \rightarrow N_A \sin\theta = ma$$

The solution is: $a = g \tan\theta$ ♦

12.36

Assume impending sliding ($F_A = 0.4N_A$)

$$\Sigma F_y = 0 + \uparrow N_A \cos 20^\circ - 0.4N_A \sin 20^\circ - mg = 0$$

$$N_A = 1.2455 mg$$

$$\Sigma F_x = ma_x \rightarrow N_A \sin 20^\circ + 0.4N_A \cos 20^\circ = ma$$

$$1.2455 mg(\sin 20^\circ + 0.4 \cos 20^\circ) = ma \quad a = 0.894g$$

12.37 Let y be measured up from the base of the cliff.

$$\Sigma F_y = ma + \uparrow -mg = ma \quad \therefore a = -g$$

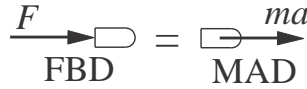
$$a = \frac{dv}{dy}v \quad \therefore v dv = -g dy \quad \frac{1}{2}v^2 = -gy + C$$

Initial condition: $v = v_0$ when $y = h$. $\therefore C = \frac{1}{2}v_0^2 + gh$

$$\therefore \frac{1}{2} v^2 - v_0^2 = g(h - y)$$

At impact $y = 0 \quad \therefore \frac{1}{2}(v^2 - v_0^2) = gh \quad \therefore v = \sqrt{v_0^2 + 2gh}$

12.38



$$F = ma \quad a = \frac{F}{m} = \frac{F_0}{m} e^{-x/b} \quad v \, dv = \frac{F_0}{m} e^{-x/b} dx$$

$$\frac{1}{2} v^2 = \frac{0}{m} \int e^{-x/b} dx = -\frac{0b}{m} e^{-x/b} + C$$

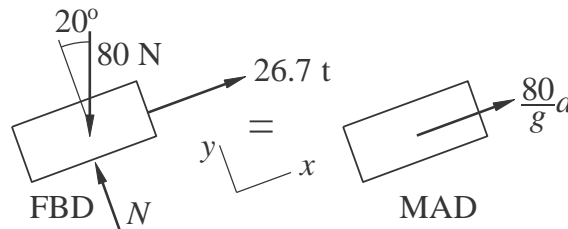
Initial condition : $v = 0$ at $x = 0 \quad \therefore C = \frac{F_0 b}{m}$

$$\frac{1}{2} v^2 = \frac{F_0 b}{m} (1 - e^{-x/b})$$

$$v = \sqrt{\frac{2F_0 b}{m} (1 - e^{-x/b})}$$

$$v|_{x=0.55 \text{ m}} = \sqrt{\frac{2(7010 \text{ N})(2)}{0.0275/9.81} (1 - e^{-0.55/0.61})} = 1346 \text{ m/s}$$

12.39



$$\Sigma F_x = ma \quad 26.7t - 80 \sin 20^\circ = \frac{80}{9.81} a$$

$$a = \frac{9.81}{80} (26.7t - 80 \sin 20^\circ) = 3.274t - 3.355 \text{ m/s}^2$$

$$v = \int a \, dt = 1.637t^2 - 3.355t + C_1 \text{ m/s}$$

$$x = \int v \, dt = 0.5457t^3 - 1.678t^2 + C_1t + C_2 \text{ m}$$

Initial conditions: $x = v = 0$ at $t = 0 \quad \therefore C_1 = C_2 = 0$

(a) When $v = 0$:

$$v = 1.637t^2 - 3.355t = 0 \quad t = 2.049 \text{ s}$$

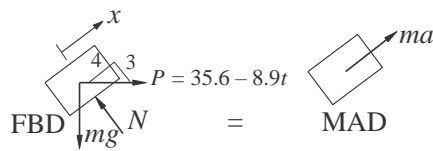
$$x = 0.5457(2.049)^3 - 1.678(2.049)^2 = -2.35 \text{ m}$$

(b) When $x = 0$:

$$x = 0.5457t^3 - 1.678t^2 = 0 \quad t = 3.075 \text{ s}$$

$$v = 1.637(3.075)^2 - 3.355(3.075) = 5.16 \text{ m/s}$$

12.40



$$\Sigma F_x = ma + \frac{4}{5}P - \frac{3}{5}mg = ma$$

$$a = \frac{4P}{5m} - \frac{3}{5}g = \frac{4(35.6 - 8.9t)}{5(22.2)} - \frac{3}{5}(9.81) = 6.70 - 3.146t \text{ m/s}^2$$

$$v = \int a dt = 6.70t - 1.573t^2 + C_1$$

$$x = \int v dt = 3.35t^2 - 0.7865t^3 + C_1t + C_2$$

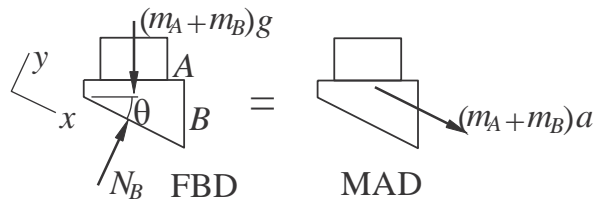
Initial conditions: $v = -3.05 \text{ m/s}, x = 0$ at $t = 0. \quad \therefore C_1 = -3.05 \text{ m/s} \quad C_2 = 0$

When $x = 0$:

$$3.35t^2 - 0.7865t^3 - 3.05t = 0 \quad t = 1.3187 \text{ s}$$

$$v = 6.7(1.3187) - 1.573(1.3187)^2 - 3.05 = 3.05 \text{ m/s}$$

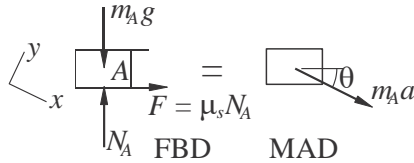
12.41



$$\Sigma F_x = ma + (m_A + m_B)g \sin \theta = (m_A + m_B)a$$

$$a = g \sin \theta$$

Assume impending slipping between A and B.

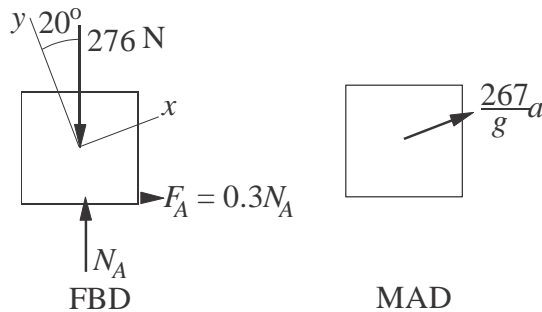


$$\Sigma F_x = ma + (m_A g + N_A) \sin \theta + \mu_s N_A \cos \theta = m_A g \sin \theta$$

$$\mu_s = \tan \theta$$

12.42

(a) Assume impending sliding of crate to the left.



$$\Sigma F_y = 0 \quad N_A \cos 20^\circ - 0.3N_A \sin 20^\circ - 267 \cos 20^\circ = 0$$

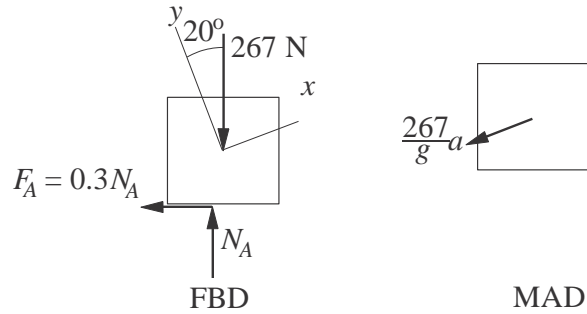
$$N_A = 299.73 \text{ N}$$

$$\Sigma F_x = ma_x \quad N_A \sin 20^\circ + 0.3N_A \cos 20^\circ - 267 \sin 20^\circ = \frac{267}{9.81}a$$

$$299.73(\sin 20^\circ + 0.3 \cos 20^\circ) - 267 \sin 20^\circ = \frac{267}{9.81}a$$

$$a = 3.52 \text{ m/s}^2$$

(b) Assume impending sliding of crate to the right.



$$\Sigma F_y = 0 \quad N_A \cos 20^\circ + 0.3N_A \sin 20^\circ - 267 \cos 20^\circ = 0$$

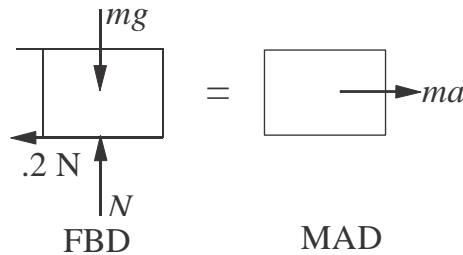
$$N_A = 240.72 \text{ N}$$

$$\Sigma F_x = ma_x \quad N_A \sin 20^\circ - 0.3N_A \cos 20^\circ - 267 \sin 20^\circ = -\frac{267}{9.81}a$$

$$240.72 (\sin 20^\circ - 0.3 \cos 20^\circ) - 267 \sin 20^\circ = -\frac{267}{9.81}a$$

$$a = 2.82 \text{ m/s}^2$$

12.43



$$\Sigma F_y = 0 \quad N - mg = 0 \quad N = mg$$

$$\Sigma F_x = 0 \quad -0.2N = ma \quad -0.2mg = ma$$

$$a = -0.2g = -1.962 \text{ m/s}^2$$

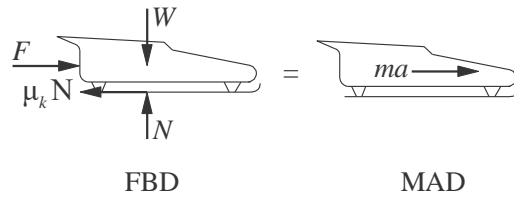
$$v \, dv = a \, dx \quad \frac{1}{2}v^2 = -1.962x + C \quad dx = -1.962x + C$$

Initial condition: $v|_{x=0} = 6 \text{ m/s} \quad \frac{1}{2}(6^2) = C \quad C = 18 \text{ m}^2/\text{s}^2$

$$\therefore \frac{1}{2}v^2 = -1.962x + 18$$

$$v = 0 \text{ when } -1.962x + 18 = 0 \quad x = 9.17 \text{ m}$$

12.44



$$\Sigma F_y = 0 \quad + \uparrow N - W = 0 \quad N = W = 13.35 \text{ kN}$$

$$\Sigma F_x = 0 \quad + \rightarrow F - \mu_k N = ma$$

$$a = \frac{-\mu_k N}{m} = \frac{4.45e^{-0.2t} - 0.05(13.35)}{13.35/9.81}$$

$$= 3.27e^{-0.2t} - 0.4905 \text{ m/s}^2$$

$$v = \int a \, dt = (3.27e^{-0.2t} - 0.4905)dt$$

$$= -16.35e^{-0.2t} - 0.4905t + C \text{ m/s}$$

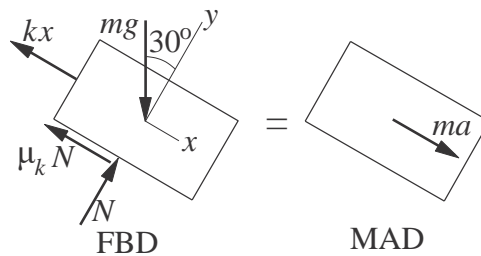
Initial condition: $v = 0$ when $t = 0$. $\therefore C = 16.35 \text{ m/s}$

$$v = 16.35(1 - e^{-0.2t}) - 0.4905t \text{ m/s}$$

Maximum velocity occurs at $t = 4 \text{ s}$ (end of powered travel)

$$v_{\max} = 16.35(1 - e^{-0.2(4)}) - 0.4905(4) = 7.04 \text{ m/s}$$

12.45



$$\Sigma F_y = 0 \quad mg \cos 30^\circ - N = 0 \quad N = mg \cos 30^\circ$$

$$\Sigma F_x = ma \quad mg \sin 30^\circ - \mu_k N - kx = ma$$

$$a = g(\sin 30^\circ - \mu_k \cos 30^\circ) - \frac{k}{m}x$$

$$a = 9.81(\sin 30^\circ - 0.3 \cos 30^\circ) - \frac{25}{2.5}x = 2.356 - 10x \text{ m/s}^2$$

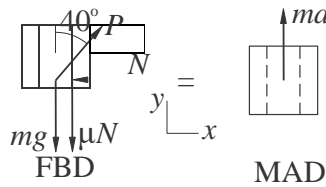
$$v \, dv = a \, dx \quad \frac{1}{2}v^2 = (2.356 - 10x)dx$$

$\frac{1}{2}$

$$v^2 = 2.356x - 5x^2 + C$$

Initial condition: $v|_{x=0} = 0 \quad \therefore C = 0$
 $v = 0$ when $2.356x - 5x^2 = 0 \quad \therefore x = 0.471 \text{ m}$

12.46



$$\Sigma F_x = 0 \quad \rightarrow \quad P \sin 40^\circ - N = 0 \quad \therefore N = P \sin 40^\circ$$

$$\Sigma F_y = ma_y \quad + \uparrow \quad P \cos 40^\circ - mg - \mu(P \sin 40^\circ) = ma$$

$$a = \frac{P}{m}(\cos 40^\circ - \mu \sin 40^\circ) - g$$

When motion impends: $a = 0$ and $\mu = \mu_s = 0.5$

$$0 = \frac{P}{5}(\cos 40^\circ - 0.5 \sin 40^\circ) - 9.81 \quad P = 110.31 \text{ N}$$

When collar begins to slide: $P = 110.31 \text{ N}$ and $\mu = \mu_k = 0.4$

$$a = \frac{110.31}{5}(\cos 40^\circ - 0.4 \sin 40^\circ) - 9.81 = 1.418 \text{ m/s}^2$$

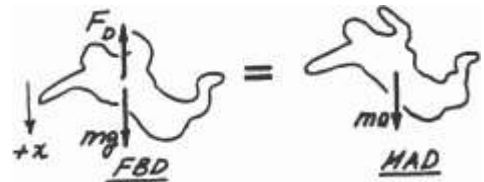
12.47

$$\Sigma F_x = ma_x : + \downarrow \quad mg - F_D = ma$$

$$\therefore a = g - F_D/m = g - (c/m)v^2$$

where $c = 0.209$

When $a = 0$: $v = v_\infty$
 $\frac{mg}{c} = \frac{600}{0.209} = 53.58 \text{ m/s}$



12.48

$$\Sigma F_x = ma_x: +\downarrow mg - kx = ma$$

$$\therefore a = g - \frac{k}{m}x$$

But $a = \frac{dv}{dt} = \frac{dv}{dx} \frac{dx}{dt} = \frac{dv}{dx}v$

$$\therefore v dv = a dx = \left(g - \frac{k}{m}x\right) dx \quad \therefore \frac{1}{2}v^2 = gx - \frac{k}{2m}x^2 + C$$

Initial condition: $v = 0$ when $x = 0 \quad \therefore C = 0 \quad \therefore v^2 = 2gx - \frac{k}{m}x^2$

When $x = 0.3$ m: $v^2 = 2(9.81)(0.3) - \frac{80}{1.8}(0.3)^2 = 1.8860 \text{ (m/s)}^2 \quad \therefore v = 1.373 \text{ m/s} \blacklozenge$

12.49

$$\Sigma F_x = ma_x: +\downarrow mg - kx = ma$$

$$\therefore a = g - \frac{k}{m}x$$

But $a = \frac{dv}{dt} = \frac{dv}{dx} \frac{dx}{dt} = \frac{dv}{dx}v$

$$\therefore v dv = a dx = \left(g - \frac{k}{m}x\right) dx$$

$$\therefore \frac{1}{2}v^2 = gx - \frac{k}{2m}x^2 + C = 9.81x - \frac{80}{2(1.8)}x^2 + C = 9.81x - 22.22x^2 + C$$

initial condition: $v = 0$ when $x = 0.3$ m $\therefore 0 = 9.81(0.3) - 22.22(0.3)^2 + C$

$$\therefore C = -0.9432 \text{ (m/s)}^2 \quad \therefore \frac{1}{2}v^2 = 9.81x - 22.22x^2 - 0.9432$$

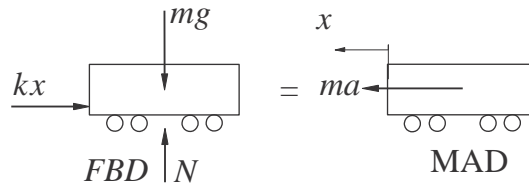
When $v = 0$: $22.22x^2 - 9.81x + 0.9432 = 0$

$$\therefore x = \frac{9.81 \pm \sqrt{(9.81)^2 - 4(22.22)(0.9432)}}{2(22.22)} = \frac{9.81 \pm 3.522}{44.44}$$

The smaller root is $x = 0.14149$ m $\therefore h = 0.3 - x = 0.3 - 0.14149 = 0.1585$ m \blacklozenge

12.50

$$v_0 = 10 \text{ km/h} = 10 \frac{1000}{3600} = 2.778 \text{ m/s}$$



$$\Sigma F_x = ma_x \quad -kx = ma \quad a = -\frac{k}{m}x$$

$$a = \frac{dv}{dx}v \quad v \, dv = a \, dx \quad v \, dv = -\frac{k}{m}x \, dx$$

$$\frac{1}{2}v^2 = -\frac{k}{2m}x^2 + C$$

Initial condition: $v = v_0$ when $x = 0$. $\therefore C_1 = \frac{1}{2}v_0^2$

$$\therefore v^2 = v_0^2 - \frac{k}{m}x^2$$

Stopping condition: $v = 0$ when $x = 0.5 \text{ m}$:

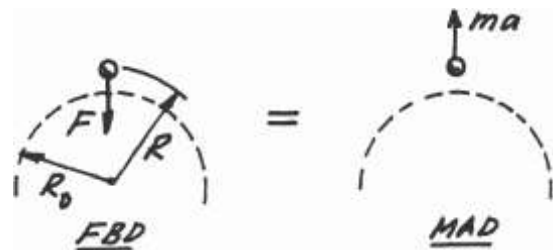
$$2.778^2 - \frac{k}{18 \times 10^3}(0.5)^2 = 0 \quad k = 5.56 \times 10^5 \text{ N/m}$$

12.51

$$\Sigma F = ma : + \uparrow -F = ma$$

$$\therefore a = -F/m = -g(R_0/R)^2$$

$$\text{But } a = \frac{dv}{dt} = \frac{dv}{dR} \frac{dR}{dt} = \frac{dv}{dR}v$$



$$\therefore v \, dv = a \, dR = -g(R_0/R)^2 \, dR \quad \therefore \frac{1}{2}v^2 = gR_0^2/R + C$$

Initial condition: $v = v_0$ when $R = R_0 \quad \therefore C = \frac{1}{2}v_0^2 - gR_0 \quad \therefore v^2 = v_0^2 - 2gR_0(1 - R_0/R)$

When $v = 0$ ($R = R_{\max}$): $v^2 - 2gR(1 - R_0/R_{\max}) = 0$

$$\therefore R_{\max} = \frac{R_0}{1 - \frac{0}{2gR_0}} = \frac{6340}{1 - \frac{1524}{2(9.81)(6340 \times 1000)}} = 6460.3 \text{ km}$$

$$\therefore h_{\max} = R_{\max} - R_0 = 6460.3 - 6340 = 120.3 \text{ km}$$

12.52

$\Sigma F = ma: \quad +\uparrow F = ma$

$$\therefore a = \frac{F}{m} = \frac{Vq}{mR} [1 - y(R^2 + y^2)^{-1/2}]$$

But $a = \frac{dv}{dt} = \frac{dv}{dy} \frac{dy}{dt} = \frac{dv}{dy} v$

$$\therefore v dv = a dy = \frac{Vq}{mR} [1 - y(R^2 + y^2)^{-1/2}] dy \quad \therefore \frac{1}{2}v^2 = \frac{Vq}{mR} [y - (R^2 + y^2)^{1/2}] + C$$

Initial condition: $v = 0$ when $y = 0 \quad \therefore C = \frac{Vq}{m} \quad \therefore v^2 = \frac{2Vq}{mR} [y + R - (R^2 + y^2)^{1/2}]$

When $y = R$: $v^2 = \frac{2Vq}{mR} (2 - \sqrt{2})R = 1.1716 \frac{Vq}{m} \quad \therefore v = 1.082 \sqrt{\frac{Vq}{m}} \blacklozenge$

*12.53

$$\Sigma F = ma \quad -T - c_D v^2 = ma$$

$$a = v \frac{dv}{dx} = -\frac{1}{m}(T + c_D v^2) \quad -\frac{mv}{T + c_D v^2} dv = dx$$

$$x = -\frac{mv}{T + c_D v^2} dv = -\frac{m}{2c} \ln \frac{+c_D v^2}{c} + C$$

Initial condition: $v = v_0$ when $x = 0. \quad \therefore C = \frac{m}{2c_D} \ln \frac{+c_D v_0^2}{c_D}$

$$\therefore x = \frac{m}{2c_D} \ln \frac{+c_D v^2}{T + c_D v^2}$$

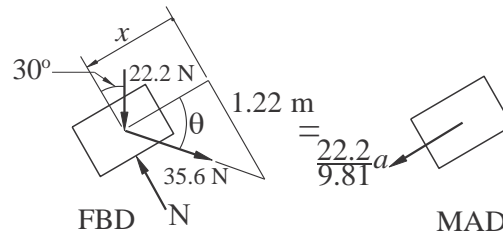
11120

$$m = 9.81 = 1133.54 \text{ kg} \quad v_0 = 40.2 \text{ m/s}$$

When $v = 0$:

$$x = \frac{m}{2c_D} \ln \frac{T + c_D v^2}{T} = \frac{1133.54}{2(0.287)} \ln \frac{2002 + 0.287(40.2)^2}{2002} = 411.5 \text{ m}$$

*12.54



$$\Sigma F_x = ma + 22.2 \sin 30^\circ - 35.6 \cos \theta = \frac{22.2}{9.81}a$$

$$\therefore a = \frac{9.81}{22.2}(22.2 \sin 30^\circ - 35.6 \cos \theta) = 4.905 - 15.73 \cos \theta \text{ m/s}^2$$

$$\cos \theta = \frac{x}{\sqrt{x^2 + 1.22^2}} = \frac{x}{\sqrt{x^2 + 1.488}}$$

$$a = v \frac{dv}{dx} = 4.905 - \frac{15.73x}{\sqrt{x^2 + 1.488}} \quad v dx = \left(4.905 - \frac{15.73x}{\sqrt{x^2 + 1.488}} \right) dx$$

$$\frac{1}{2}v^2 = 4.905x - 15.73 \sqrt{x^2 + 1.488} + C$$

Initial condition $v = 0$ when $x = 0$. $\therefore C = 15.73(1.22) = 19.19 \text{ (m/s)}^2$ When $a = 0$ ($v = v_{\max}$):

$$4.905 - \frac{15.73x}{\sqrt{x^2 + 1.488}} = 0 \quad \therefore x = 0.401 \text{ m}$$

$$\frac{1}{2}v_{\max}^2 = 4.905(0.401) - 15.73 \sqrt{(0.401)^2 + 1.488} + 19.19$$

$$= 0.959 \text{ (m/s)}^2$$

$$v_{\max} = \sqrt{2(0.959)} = 1.39 \text{ m/s}$$

*12.55

$$\Sigma F = ma + \downarrow \quad mg - c_D v = ma$$

$$a = \frac{dv}{dt} = g - \frac{c_D}{m}v \quad dt = \frac{dv}{g - (c_D/m)v}$$

$$t = -\frac{1}{c_D/m} \ln \left| \frac{g - (c_D/m)v}{g} \right| + C = -\frac{m}{c_D} \ln \left| \frac{mg - c_D v}{mg} \right| + v + C$$

Initial condition: $v = 0$ when $t = 0$. $\therefore C = \frac{m}{c_D} \ln \frac{mg}{mg}$

$$\frac{m}{c_D} \ln \frac{mg - c_D v}{mg}$$

$$\therefore t = \frac{1}{c_D} \ln \frac{mg}{c_D - v}$$

When $v = v_\infty$ (terminal velocity), $a = 0$. $v_\infty = \frac{mg}{cd}$

When $v = 0.9v_\infty = 0.9\frac{mg}{cd}$:

$$t = \frac{m}{c_d} \ln \frac{1}{1-0.9} = \frac{m}{c_d} \ln 10 = 2.30 \frac{m}{c_d}$$

12.56

$$a = -\frac{7}{4} + \frac{v}{16} \text{ m/s}^2$$

Letting $x_1 = x$, $x_2 = v$, the equivalent first-order equations and initial conditions are

$$\dot{x}_1 = x_2 \quad \dot{x}_2 = -\frac{7}{4} + \frac{x_2}{16}$$

$$x_1(0) = 0 \quad x_2(0) = 20 \text{ m/s}$$

The MATLAB program that integrates the equations is

```
function problem12_56
[t, x] =ode45(@f, [0:0.5:25], [0 20]);
printSol(t, x)
    function dxdt = f(t, x)
        dxdt = [x(2)
                -7/4 + x(2)/16];
    end
end
```

The 2 lines of output that span the instant where $v = 0$ are

t	x1	x2
2.0000e+001	2.4124e+002	7.7255e-002
2.0500e+001	2.4105e+002	-8.0911e-001

By inspection of output, the stopping distance is $x = 241$ m

12.57

$$a = -\frac{v^2}{10}$$

Letting $x_1 = x$, $x_2 = v$, the equivalent first-order equations and initial conditions are

$$\dot{x}_1 = x_2 \quad \dot{x}_2 = -\frac{x_2^2}{10}$$

$$x_1(0) = 0 \quad x_2(0) = 20^{10} \text{ mm}$$

The MATLAB program that integrates the equations is

```
function problem 12_57
[t, x] =ode45(@f, (0:0.01:0.51), [0 20]);
printSol(t, x)
    function dxdt = f(t, x)
        dxdt = [x(2)
                -x(2)^2/10];
    end
end
```

The 3 lines of output that span the instant where $v = 10$ mm/s are

t	x1	x2
4.9000e-001	6.8310e+000	1.0101e+001
5.0000e-001	6.9315e+000	1.0000e+001
5.1000e-001	7.0310e+000	9.9010e+000

By inspection, when $v = 10$ mm/s, $t = 0.500$ s

12.58

Letting $x_1 = x$, $x_2 = v$, the equivalent first-order equations and initial conditions are

$$\dot{x}_1 = x_2 \quad \dot{x}_2 = (9.81 - 3.41 \times 10^{-3} x_2^2)$$

$$x_1(0) = 0 \quad x_2(0) = 0$$

The MATLAB program that integrates the equations is

```
function problem12_58
[t, x] =ode45(@f, (0:0.1:7), [0 0]);
printSol(t, x)
    function dxdt = f(t, x)
        dxdt = [x(2)
                (9.81-3.41e-3*x(2)^2)];
    end
end
```

The 2 lines of output that span the instant where $v = 44.71$ m/s are

t	x1	x2
6.5000e+000	1.7138e+002	4.4530e+001
6.6000e+000	1.7585e+002	4.4830e+001

Linear interpolation:

$$\frac{6.6 - 6.5}{44.83 - 44.53} = \frac{t - 6.5}{44.705 - 44.53} \quad t = 6.56 \text{ s}$$

12.59

$$a = -147.22 + \frac{18.6969}{\sqrt{x^2 + 0.005806}} x \text{ m/s}^2$$

Letting $x_1 = x$, $x_2 = v$, the equivalent first-order equations and initial conditions are

$$\dot{x}_1 = x_2 \quad \dot{x}_2 = -147.22 + \frac{18.6969}{x_1^2 + 0.005806} x_1$$

$$x_1(0) = 0.203 \text{ m} \quad x_2(0) = 0$$

The MATLAB program that integrates the equations is

```
function problem12_59
[t,x] =ode45(@f, (0:0.001:0.042), [0.203 0]);
printSol(t,x)
function dxdt = f(t,x)
dxdt = [x(2)
(-147.22 + 18.6969/sqrt(x(1)^2 + 0.005806))*x(1)];
end
end
```

The 2 lines of output that span the instant where $x = 0$ are

t	x1	x2
7.3000e-001	-7.5348e-003	-9.0085e-001
7.4000e-001	-1.4497e-003	-8.9783e-001

By inspection, when $x = 0$, $v = 0.898$ m/s

12.60

$$a = 9.81 - 1 - 0.58 \times 10^{-4} v^2 \exp(-0.978) \times 10^{-5} x \quad \text{m/s}^2$$

(a) Letting $x_1 = x$, $x_2 = v$, the equivalent first-order equations and initial conditions are

$$\dot{x}_1 = x_2 \quad \dot{x}_2 = -9.81 - 1 - 0.58 \times 10^{-4} x_2^2 e^{-0.978 \times 10^{-5} x_1}$$

$$x_1(0) = 9145 \text{ m} \quad x_2(0) = 0$$

The MATLAB program that integrates the equations is

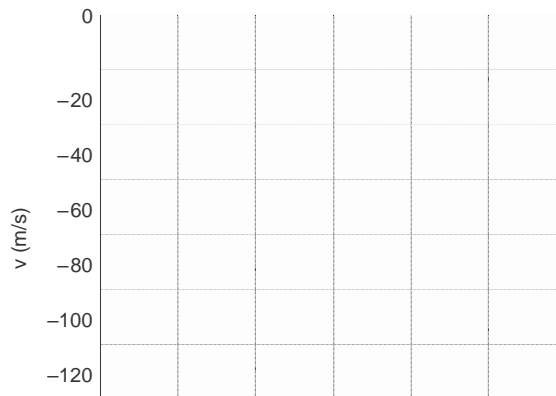
```
function problem12_60
[t,x] = ode45(@f, (0:1:60), [9145 0]);
printSol(t,x) axes(' fontsize' ,14)
plot(x(:,1),x(:,2),' linewidth' ,1.5)
grid on
xlabel(' x (m)' ); ylabel(' v (m/s)' )
function dxdt = f(t,x)
dxdt = [x(2)
-9.81*(1-0.58e-4*x(2)^2*exp(-0.978e-5*x(1)))] ;
end
end
```

The 3 lines of output that span the instant where $v = v_{\max}$ are

t	x1	x2
4.2000e+001	4.7359e+003	-1.3435e+001
4.3000e+001	4.6015e+003	-1.3435e+001
4.4000e+001	4.4672e+003	-1.3433e+001

By inspection, $v_{\max} = 134.4 \text{ m/s}$ at $x = 4602 \text{ m}$

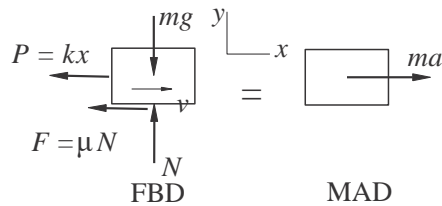
(b)



-140
0.896 0.899 0.902 0.905 0.908 0.911 0.914
x (m) x 10⁴

12.61

(a)



The FBD shown is valid only if $v > 0$ (block is moving to the right.) If $v < 0$ (block is moving to the left), the direction of the friction force F must be reversed.

$$\Sigma F_y = 0 + \uparrow N - mg = 0 \quad \therefore N = mg$$

$$\Sigma F_x = ma \xrightarrow{+} -kx - \mu N \text{ sign}(v) = ma$$

$$\therefore a = -\frac{k}{m}x - \mu \frac{N}{m} \text{ sign}(v) = -\frac{k}{m}x - \mu g \text{ sign}(v)$$

$$= -\frac{30}{1.6}x - 0.2(9.81) \text{ sign}(v) = -18.75x - 1.962 \text{ sign}(v) \text{ m/s}^2$$

(b) With the notation $x_1 = x$ and $x_2 = v$, the equivalent first-order equations are

$$\dot{x}_1 = x_2 \quad \dot{x}_2 = -18.75x_1 - 1.962 \text{ sign}(x_2)$$

subject to the initial conditions $x_1 = 0$, $x_2 = 6 \text{ m/s}$ at $t = 0$.

The corresponding MATLAB program is:

```
function problem12_61
[t,x] =ode45(@f,[0:0.02:1.2],[0 6]);
printSol(t,x) axes('fontsize',14)
plot(x(:,1),x(:,2),'linewidth',1.5)
grid on
xlabel(' x (m) '); ylabel(' v (m/s) ')
function dxdt = f(t,x)
dxdt = [x(2)
-18.75*x(1)-1.962*sign(x(2))];
end
end
```

The block stops twice during the period $0 < t < 1.2 \text{ s}$. Only the lines of output that span the instant where $v = 0$ are shown below.

t	x1	x2
3.4000e-001	1.2844e+000	1.3160e-001
3.6000e-001	1.2822e+000	-3.5272e-001

Linear interpolation:

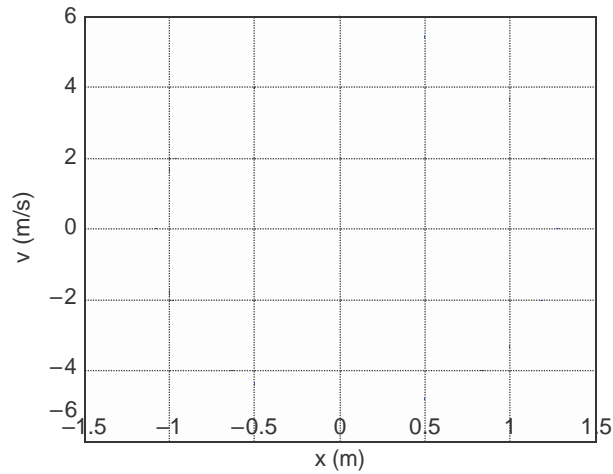
$$\frac{3.6 - 3.4}{-0.35272 - 0.13160} = \frac{t_1 - 3.4}{0 - 0.13160} \quad t_1 = 3.45 \text{ s}$$

1.0600e+000 -1.0745e+000 -2.1421e-001
 1.0800e+000 -1.0745e+000 2.0038e-001

Linear interpolation:

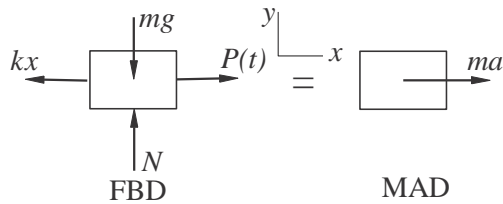
$$\frac{1.08 - 1.06}{0.20038 - (-0.21421)} = \frac{t_2 - 1.06}{0 - (0.21421)} \quad t_2 = 1.070 \text{ s}$$

(c)



12.62

(a)



$$\Sigma F_x = ma \quad +$$

$$P(t) = \frac{P(t)}{a} = \frac{k}{a} P(t) - kx = ma$$

$25t$ N when $t \leq 1$ s
 25 N when $t \geq 1$ s

$$m \ddot{x}$$

$$= (12.5t + 12.5) + (12.5t - 12.5) \operatorname{sgn}(1 - t)$$

$$\begin{aligned} \therefore a &= \frac{(12.5t+12.5) + (12.5t - 12.5) \operatorname{sgn}(1-t)}{2} - \frac{25}{2x} \\ &= 6.25[(t+1) + (t-1) \operatorname{sgn}(1-t)] - 12.5x \text{ m/s}^2 \end{aligned}$$

- (b) With the notation $x_1 = x$ and $x_2 = v$, the equivalent first-order equations are
- $$\dot{x}_1 = x_2 \quad \dot{x}_2 = 6.25[(t+1) + (t-1) \operatorname{sgn}(1-t)] - 12.5x_1$$

subject to the initial conditions $x_1 = x_2 = 0$ at $t = 0$.

The corresponding MATLAB program is:

```
function problem12_62
[t,x] = ode45(@f, (0:0.05:3), [0 0]);
printSol(t,x) axes('fontsize',14)
plot(x(:,1),x(:,2),'linewidth',1.5)
grid on
xlabel(' x (m) '); ylabel(' v (m/s) ')
function dxdt = f(t,x)
dxdt = [x(2)
        6.25*(t+1 + (t-1)*sign(1-t)) - 12.5*x(1)];
end
end
```

Below are partial printouts that span v_{\max} and x_{\max} .

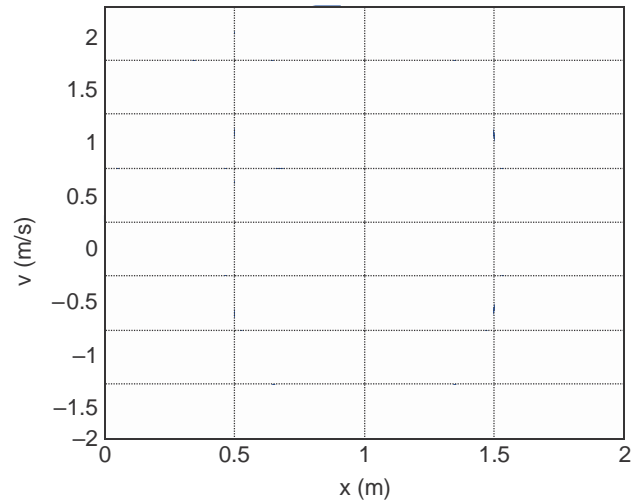
t	x1	x2
8.0000e-001	7.1290e-001	1.9518e+000
9.0000e-001	9.1150e-001	2.0003e+000
1.0000e+000	1.1087e+000	1.9205e+000

By inspection, $v_{\max} = 2.00\text{m/s}$

1.3000e+000	1.5271e+000	6.0188e-001
1.4000e+000	1.5535e+000	-8.0559e-002
1.5000e+000	1.5113e+000	-7.5304e-001

By inspection, $x_{\max} = 1.554 \text{ m}$

(c)



12.63

$$a = 24.4 - 2.69v^{1.5} \text{ m/s}^2$$

With the notation $x_1 = x$ and $x_2 = v$, the equivalent first-order equations are

$$\dot{x}_1 = x_2 \quad \dot{x}_2 = 24.4 - 2.69x_1$$

subject to the initial conditions $x_1 = x_2 = 0$ at $t = 0$.

The corresponding MATLAB program is:

```
function problem12_63
[t, x] =ode45(@f, [0:0.005:0.15], [0 0]);
printSol(t, x)
function dxdt = f(t, x)
dxdt = [x(2)
        24.4 - 2.69*x(2)^1.5];
end
end
```

Only the 2 lines of output that span $x = 0.0762$ m are shown below.

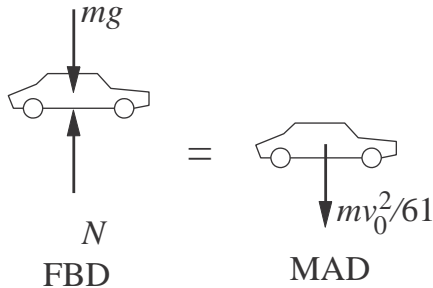
t	x1	x2
8.0000e-002	7.3106e-002	1.7412e-000
8.5000e-002	8.2038e-002	1.8311e-000

Use linear interpolation to find v at $x = 0.0762$ m:

$$\frac{1.8311 - 1.7412}{0.082038 - 0.073106} = \frac{v - 1.7412}{0.0762 - 0.073106} \quad v = 1.77 \text{ m/s}$$

12.64

$$y = -\frac{x^2}{122} \quad \dot{y} = -\frac{x}{61}\dot{x} = -\frac{x}{61}v_0 \quad \ddot{y} = -\frac{1}{61}v_0\dot{x} = -\frac{0}{61}v^2$$



$$\Sigma F_y = ma_y \quad N - mg = -m\frac{v_0^2}{61}$$

Contact is lost when $N = 0$: $g = \frac{v_0^2}{61}$

$$v_0 = \sqrt{61g} = \sqrt{61(9.81)} = 24.5 \text{ m/s}$$

12.65

$$x = 6.1 \cos \frac{\pi}{2}t \text{ m} \quad y = 19.62(4 - t^2) \text{ m}$$

$$\dot{x} = -3.05\pi \sin \frac{\pi}{2}t \text{ m/s} \quad \dot{y} = -39.24t \text{ m/s}$$

$$\ddot{x} = -1.525\pi^2 \cos \frac{\pi}{2}t \text{ m/s}^2 \quad \ddot{y} = -39.24 \text{ m/s}^2$$

$$F_x = m\ddot{x} = \frac{17.8}{9.81} (-1.525\pi^2 \cos \frac{\pi}{2}t) = -27.31 \cos \frac{\pi}{2}t \text{ N}$$

$$F_y = m\ddot{y} = \frac{17.8}{9.81} (-39.24) = -71.2 \text{ N}$$

$t(s)$	F_x (N)	F_y (N)
0	-1.34	-71.2
1	0	-71.2
2	1.34	-71.2

12.66

$$(a) \quad x = v_0t - r \sin \frac{v_0t}{R} \quad \therefore v_x = \dot{x} = v_0 - \frac{v_0r}{R} \cos \frac{v_0t}{R} \quad \therefore a_x = \ddot{x} = \frac{v_0^2r}{R^2} \sin \frac{v_0t}{R}$$

$$y = R - r \cos \frac{v_0t}{R} \quad \therefore v_y = \dot{y} = \frac{v_0r}{R} \sin \frac{v_0t}{R} \quad \therefore a_y = \ddot{y} = \frac{v_0^2r}{R^2} \cos \frac{v_0t}{R}$$

$$12.64 \quad a = \sqrt{a_x^2 + a_y^2} = \frac{v_0^2 r}{R^2} = \text{constant Q.E.D.}$$

$$(b) F = ma = \frac{mv_0^2 r}{R^2} = \frac{0.556}{9.81} \frac{(26.8)^2}{0.38^2} = 68.79 \text{ N}$$

12.67

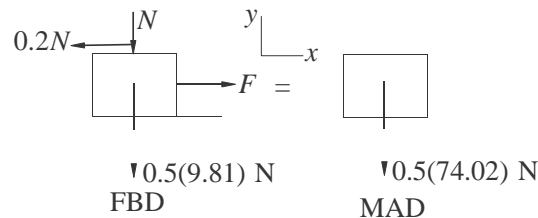
$$x = b \sin \frac{2\pi t}{t_0} \quad y = \frac{b}{4} \left(1 + \cos \frac{4\pi t}{t_0} \right)$$

$$v_x = \frac{2\pi b}{t_0} \cos \frac{2\pi t}{t_0} \quad v_y = -\frac{\pi b}{t_0} \sin \frac{4\pi t}{t_0}$$

$$a_x = -\frac{4\pi^2 b}{t_0^2} \sin \frac{2\pi t}{t_0} \quad a_y = -\frac{4\pi^2 b}{t_0^2} \cos \frac{4\pi t}{t_0}$$

At point $B : x = 0 \therefore t = 0$

$$\therefore a_x = 0 \quad \therefore a_y = -\frac{4\pi^2 b}{t_0^2} = -\frac{4\pi^2(1.2)}{0.8^2} = -74.02 \text{ m/s}^2$$



$$\Sigma F_y = ma_y + \uparrow \quad -N - 0.5(9.81) = -0.5(74.02)$$

$$N = 32.11 \text{ N}$$

$$\Sigma F_x = 0 \xrightarrow{+} \quad F - 0.2N = 0$$

$$F = 0.2N = 0.2(32.11) = 6.42 \text{ N}$$

12.68

$$x = \frac{b}{2} \left(\sin \frac{\pi t}{4t_0} + \sin \frac{3\pi t}{4t_0} \right) \quad \therefore v_x = \dot{x} = \frac{b}{2} \left(\frac{\pi}{4t_0} \cos \frac{\pi t}{4t_0} + \frac{3\pi}{4t_0} \cos \frac{3\pi t}{4t_0} \right)$$

$$\therefore a_x = \ddot{x} = -\frac{b}{2} \left(\frac{\pi^2}{16t_0^2} \sin \frac{\pi t}{4t_0} + \frac{9\pi^2}{16t_0^2} \sin \frac{3\pi t}{4t_0} \right) = -\frac{\pi^2 b}{32t_0^2} \left(\sin \frac{\pi t}{4t_0} + 9 \sin \frac{3\pi t}{4t_0} \right)$$

$$y = \frac{b}{2} \left(\cos \frac{\pi t}{4t_0} - \cos \frac{3\pi t}{4t_0} \right) \quad \therefore v_y = \dot{y} = \frac{b}{2} \left(-\frac{\pi}{4t_0} \sin \frac{\pi t}{4t_0} + \frac{3\pi}{4t_0} \sin \frac{3\pi t}{4t_0} \right)$$

$$\therefore a_y = \ddot{y} = \frac{b}{2} \left(-\frac{\pi^2}{16t_0^2} \cos \frac{\pi t}{4t_0} + \frac{9\pi^2}{16t_0^2} \cos \frac{3\pi t}{4t_0} \right) = \frac{\pi^2 b}{32t_0^2} \left(-\cos \frac{\pi t}{4t_0} + 9 \cos \frac{3\pi t}{4t_0} \right)$$

At point A: $t = t_0$

$$\therefore a_x = -\frac{\pi^2 b}{32t_0^2} \left(\sin \frac{\pi}{4} + 9 \sin \frac{3\pi}{4} \right) = -\frac{\pi^2 (240)}{32(12)^2} (7.071) = -3.635 \text{ m/s}^2$$

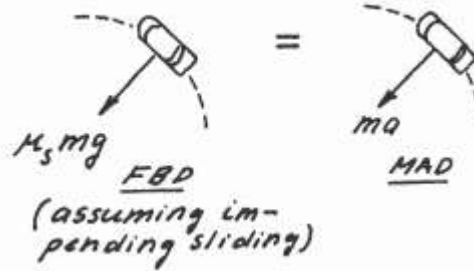
$$\therefore a_y = \frac{\pi^2 b}{32t_0^2} \left(-\cos \frac{\pi}{4} + 9 \cos \frac{3\pi}{4} \right) = -\frac{\pi^2 (240)}{32(12)^2} (7.071) = -3.635 \text{ m/s}^2$$

$$a = \sqrt{a_x^2 + a_y^2} = 5.141 \text{ m/s}^2$$

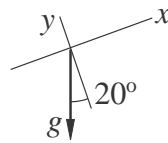
The FBD and MAD show only forces acting in the plane of the motion.

$$\Sigma F = ma: \mu_s mg = ma$$

$$\therefore \mu_s = \frac{a}{g} = \frac{5.141}{9.81} = 0.524 \quad \blacklozenge$$



12.69



From the acceleration diagram of a water droplet:

$$a_x = -g \sin 20^\circ = -9.81 \sin 20^\circ = -3.355 \text{ m/s}^2$$

$$a_y = -g \cos 20^\circ = -9.81 \cos 20^\circ = -9.22 \text{ m/s}^2$$

Initial conditions at $t = 0$:

$$x = y = 0$$

$$v_x = 6.71 \cos 30^\circ = 5.811 \text{ m/s} \quad v_y = 6.71 \sin 30^\circ = 3.355 \text{ m/s}$$

Integrating and using initial conditions:

$$v_x = -3.355t + 5.811 \text{ m/s} \quad v_y = -9.22t + 3.355 \text{ m/s}$$

$$x = -1.678t^2 + 5.811t \text{ m} \quad y = -4.61t^2 + 3.355t \text{ m}$$

Droplet lands when $y = 0$:

$$y = -4.61t^2 + 3.355t = 0 \quad t = 0.7270 \text{ s}$$

$$R = x|_{t=0.7270\text{s}} = -1.678(0.7270^2) + 5.811(0.7270) = 3.33 \text{ m}$$

12.70

From Eqs. (e) of Sample Problem 2.11:

$$\begin{aligned}x &= (v_0 \cos \theta)t = (19.8 \cos 55^\circ)t = 11.36t \text{ m} \\y &= -\frac{1}{2}gt^2 + (v_0 \sin \theta)t = -\frac{9.81}{2}t^2 + (19.8 \sin 55^\circ)t \\&= -4.905t^2 + 16.218t \text{ m}\end{aligned}$$

At point *B*:

$$\begin{aligned}x &= 18.29 \text{ m} & 18.29 &= 11.36t & t &= 1.61 \text{ s} \\h &= y|_{t=1.61 \text{ s}} = -4.905(1.61^2) + 16.218(1.61) = 13.4 \text{ m}\end{aligned}$$

*12.71

From Sample Problem 12.12:

$$\begin{aligned}x &= C_1 e^{-ct/m} + C_2 & y &= C_3 e^{-ct/m} - \frac{mgt}{c} + C_4 \\v_x &= -C_1 \frac{c}{m} e^{-ct/m} & v_y &= -C_3 \frac{c}{m} e^{-ct/m} - \frac{mg}{c} \\ \frac{c}{m} &= \frac{0.0365}{5.34/9.81} = 0.06705 \text{ s}^{-1} & \frac{mg}{c} &= \frac{5.34}{0.0365} = 146.3 \text{ m/s} \\x &= C_1 e^{-0.06705t} + C_2 & y &= C_3 e^{-0.06705t} - 146.3t + C_4 \\v_x &= -C_1 (0.06705) e^{-0.06705t} \\v_y &= -C_3 (0.06705) e^{-0.06705t} - 146.3\end{aligned}$$

$$v_0 \sin \theta = 21.34 \sin 65^\circ = 19.34 \text{ m/s}$$

$$v_0 \cos \theta = 21.34 \cos 65^\circ = 9.02 \text{ m/s}$$

Initial conditions at $t = 0$:

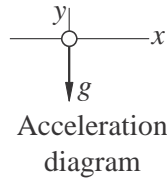
$$\begin{aligned}x &= 0 & \therefore C_2 &= -C_1 \\y &= 0 & \therefore C_4 &= -C_3 \\v_x &= v_0 \cos \theta & \therefore -C_1(0.06705) &= 9.02 & C_1 &= -134.5 \text{ m} \\v_y &= v_0 \sin \theta & \therefore -C_3(0.06705) - 146.3 &= 19.34 & C_3 &= -2470 \text{ m}\end{aligned}$$

When $x = 18.29 \text{ m}$:

$$18.29 = -134.5e^{-0.06705t} + 134.5 \quad t = 2.180 \text{ s}$$

$$12.70 \quad h = y|_{t=2.180} = -2470e^{-(0.06705)(2.180)} - 146.3(2.180) + (2470) = 16.96 \text{ m}$$

12.72



At $t = 0$ (initial conditions):

$$\begin{aligned} x &= 0 & v_x &= 200 \sin 30^\circ = 100 \text{ m/s} \\ y &= 1200 \text{ m} & v_y &= -200 \cos 30^\circ = -173.21 \text{ m/s} \end{aligned}$$

Integrating acceleration and applying initial conditions:

$$\begin{aligned} a_x &= 0 & a_y &= -9.81 \text{ m/s}^2 \\ v_x &= 100 \text{ m/s} & v_y &= -9.81t - 173.21 \text{ m/s} \\ x &= 100t \text{ m} & y &= -4.905t^2 - 173.21t + 1200 \text{ m} \end{aligned}$$

When $y = 0$:

$$\begin{aligned} -4.905t^2 - 173.21t + 1200 &= 0 & t &= 5.932 \text{ s} \\ x &= 100(5.932) = 593.2 \text{ m} \\ d &= 1200 \tan 30^\circ - 593.2 = 99.6 \text{ m} \end{aligned}$$

12.73

Eqs. (d) and (e) of Sample Problem 12.11:

$$\begin{aligned} x &= v_0 t \cos \theta = 762t \cos \theta \text{ ft} \\ y &= v_0 t \sin \theta - \frac{1}{2}gt^2 = 762t \sin \theta - 4.905t^2 \text{ m} \end{aligned}$$

Setting $x = R = 5280$ ft and solving for t :

$$1600 = 762t \cos \theta \quad t = \frac{1600}{762 \cos \theta} = \frac{2.1}{\cos \theta} \text{ s}$$

Setting $y = 0$, we get after dividing by t :

$$\begin{aligned} 762 \sin \theta - 4.905t &= 0 & 762 \sin \theta - 4.905 \frac{2.1}{\cos \theta} &= 0 \\ \sin \theta \cos \theta &= 4.905 \frac{2.1}{762} & &= 0.013518 \\ \frac{1}{2} \sin 2\theta &= 0.013518 & \sin 2\theta &= 2(0.013518) = 0.027036 \end{aligned}$$

12.72

$$\theta = \frac{1}{2} \sin^{-1}(0.027036) = 0.775^\circ$$

12.74

From Eqs. (e) of Sample Problem 12.11:

$$x = (v_0 \cos \theta)t \quad y = -\frac{1}{2}gt^2 + (v_0 \sin \theta)t$$

(a)

$$x = (12.8 \cos 28^\circ)t = 11.3 \text{ m} \quad \therefore t = \frac{x}{11.3} \text{ s}$$

$$y = -\frac{1}{2}(9.81)t^2 + (12.8 \sin 28^\circ)t = -4.905t^2 + 6.009t$$

Substituting for t :

$$y = -4.905 \left(\frac{x}{11.3}\right)^2 + 6.009 \frac{x}{11.3}$$

$$= -0.03841x^2 + 0.5318x \text{ m}$$

(b) Check if ball hits the ceiling.

$$\frac{dy}{dx} = -0.07682x + 0.5318 = 0 \quad x = 6.92 \text{ m}$$

$$y_{\max} = -0.03841(6.92)^2 + 0.5318(6.92) = 1.84 \text{ m}$$

Since $y_{\max} < 7.62 \text{ m}$ the ball will not hit the ceiling.

Check if ball clears the net. When $x = 6.71 \text{ m}$:

$$y = -0.03841(6.71)^2 + 0.5318(6.71) = 1.84 \text{ m}$$

Since $y > 1.52 \text{ m}$ the ball clears the net.

When $x = 12.8 \text{ m}$

$$y = -0.03841(12.8)^2 + 0.5318(12.8) = 0.512 \text{ m}$$

Since $y > 0$, the ball lands behind the baseline.

12.75

From Eqs. (e) of Sample Problem 12.11:

$$x = (v_0 \cos \theta)t \quad y = -\frac{1}{2}gt^2 + (v_0 \sin \theta)t$$

$$y = -\frac{1}{2}(9.81)t^2 + (v_0 \sin 70^\circ)t = -4.905t^2 + 0.9397v_0t \text{ m}$$

$$v_y = \dot{y} = -9.81t + 0.9397v_0 \text{ m/s}$$

12.74

When $y = y_{\max}$

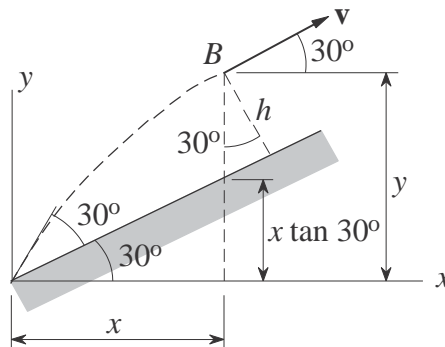
$$\begin{aligned} v_y = 0 & \quad -9.81t + 0.9397v_0 = 0 & \quad t = 0.09579v_0 \text{ s} \\ y_{\max} = 8.23 \text{ m} & \quad -4.905(0.09579v_0)^2 + 0.9397v_0(0.09579v_0) = 8.23 \\ & \quad 0.045035v_0^2 = 8.23 & \quad v_0 = 13.52 \text{ m/s} \end{aligned}$$

12.76

Equations (e) of Sample Problem 12.10:

$$\begin{aligned} x &= (v_0 \cos \theta)t = (9.14 \cos 60^\circ)t = 4.57t \text{ m} \\ y &= -\frac{1}{2}gt^2 + (v_0 \sin \theta)t = -\frac{1}{2}(9.81)t^2 + (9.14 \sin 60^\circ)t \\ &= -4.905t^2 + 7.92t \text{ m} \end{aligned}$$

$$v_x = \dot{x} = 4.57 \text{ m/s} \quad v_y = \dot{y} = -9.81t + 7.92 \text{ m/s}$$



At point B :

$$v \text{ is parallel to the inclined surface} \quad \therefore \frac{v_y}{v_x} = \tan 30^\circ$$

$$\frac{-9.81t + 7.92}{4.57} = \tan 30^\circ \quad t = 0.5379 \text{ s}$$

$$\begin{aligned} x &= 4.57(0.5379) = 2.458 \text{ m} \\ y &= -4.905(0.5379)^2 + 7.92(0.5379) = 2.841 \text{ m} \\ h &= (y - x \tan 30^\circ) \cos 30^\circ = (2.841 - 2.458 \tan 30^\circ) \cos 30^\circ \\ &= 1.23 \text{ m} \end{aligned}$$

12.77

$\Sigma F_x = ma_x: \quad \rightarrow \quad 0 = ma_x \quad \therefore a_x = 0$
 $\Sigma F_y = ma_y: \quad +\uparrow \quad -F = ma_y$
 $\therefore a_y = -\frac{F}{m} = -\frac{q \Delta V}{2md}$

Horizontal motion
 $v_x = \int a_x dt + C_1 = 0 + C_1 \quad x = \int v_x dt + C_2 = C_1 t + C_2$
 Initial conditions: $x = 0, v_x = v_0$ when $t = 0. \therefore C_1 = v_0 \quad \therefore C_2 = 0 \quad \therefore x = v_0 t$

Vertical motion
 $v_y = \int a_y dt + C_3 = -\frac{q \Delta V}{2md} t + C_3 \quad y = \int v_y dt + C_4 = -\frac{q \Delta V}{4md} t^2 + C_3 t + C_4$
 Initial conditions: $y = 0, v_y = 0$ when $t = 0. \therefore C_3 = C_4 = 0 \quad \therefore y = -\frac{q \Delta V}{4md} t^2$

When particle is at A:
 $x = L \quad \therefore v_0 t = L \quad \therefore t = L/v_0$
 $y = -d \quad \therefore -\frac{q \Delta V}{4md} (L/v_0)^2 = -d \quad \therefore \Delta V = \frac{4m}{q} \left(v_0 \frac{d}{L} \right)^2 \quad \blacklozenge$

*12.78

$\Sigma F_x = ma_x: \quad \rightarrow \quad -cv_x = ma_x \quad \therefore a_x = -\frac{c}{m} v_x$
 $\Sigma F_y = ma_y: \quad +\uparrow \quad -mg - cv_y = ma_y \quad \therefore a_y = -g - \frac{c}{m} v_y$

(a) Vertical motion
 $\frac{dv_y}{dt} = a_y = -g - \frac{c}{m} v_y \quad \therefore -dt = \frac{dv_y}{g + (c/m)v_y} \quad \therefore -t = \frac{m}{c} \ln \left(g + \frac{c}{m} v_y \right) + C_1$

$$\text{Initial condition: } v_y = v_0 \sin\alpha \text{ when } t = 0. \therefore C_1 = -\frac{m}{c} \ln\left(g + \frac{c}{m} v_0 \sin\alpha\right)$$

$$\therefore t = \frac{m}{c} \ln \frac{g + (c/m)v_0 \sin\alpha}{g + (c/m)v_y}$$

$$\text{At point A: } v_y = 0 \therefore t = \frac{m}{c} \ln\left(1 + \frac{c}{mg} v_0 \sin\alpha\right) \diamond$$

(b) Horizontal motion

$$\frac{dv_x}{dt} = a_x = -\frac{c}{m} v_x \therefore \frac{1}{v_x} dv_x = -\frac{c}{m} dt \therefore -\frac{c}{m} t = \ln v_x + C_2$$

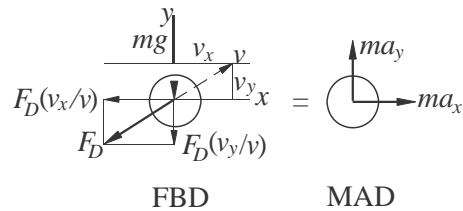
$$\text{Initial condition: } v_x = v_0 \cos\alpha \text{ when } t = 0. \therefore C_2 = -\ln(v_0 \cos\alpha)$$

$$\therefore -\frac{c}{m} t = \ln \frac{v_x}{v_0 \cos\alpha} \therefore v_x = (v_0 \cos\alpha) e^{-(c/m)t}$$

$$\text{At point A: } v = v_x = (v_0 \cos\alpha) \left(1 + \frac{c}{mg} v_0 \sin\alpha\right)^{-1} = \frac{v_0 \cos\alpha}{1 + \frac{c}{mg} v_0 \sin\alpha} \diamond$$

12.79

(a)



$$\Sigma F_x = ma_x \quad \rightarrow \quad -F_D \frac{v_x}{v} = ma_x$$

$$a_x = -\frac{D}{m} \frac{v_x}{v} = -\frac{0.0005v^2 v_x}{0.1 v} = -0.005v v_x$$

$$= -0.005v_x \frac{v^2 + v^2}{x \quad y} \text{ m/s}^2$$

$$\Sigma F_y = ma_y \quad + \uparrow \quad -F_D \frac{v_y}{v} - mg = ma_y$$

$$a_y = -\frac{F_D}{m} \frac{v_y}{v} - g = -\frac{0.0005v^2 v_y}{0.1 v} - 9.81$$

$$\begin{aligned} v_x - 9.81 &= -0.005v_x v_y - 9.81 \\ &= -0.005v_y \sqrt{v_x^2 + v_y^2} - 9.81 \text{ m/s}^2 \end{aligned}$$

(b) Letting $x_1 = x$, $x_2 = y$, $x_3 = v_x$ and $x_4 = v_y$, the equivalent first-order equations are

$$\begin{aligned} \dot{x}_1 &= x_3 & \dot{x}_2 &= x_4 \\ \dot{x}_3 &= -0.005x_3 \frac{1}{\sqrt{x_3^2 + x_4^2}} & \dot{x}_4 &= -0.005x_4 \frac{1}{\sqrt{x_3^2 + x_4^2}} - 9.81 \end{aligned}$$

The initial conditions are

$$\begin{aligned} x_1(0) &= 0 & x_2(0) &= 2 \text{ m/s} \\ x_3(0) &= 30 \cos 50^\circ = 19.284 \text{ m/s} & x_4(0) &= 30 \sin 50^\circ = 22.981 \text{ m/s} \end{aligned}$$

The following MATLAB program was used to integrate the equations:

```
function problem12_79
[t, x] = ode45(@f, (0:0.05:2), [0 2 19.284 22.981]);
printSol(t, x)
function dxdt = f(t, x)
v = sqrt(x(3)^2 + x(4)^2);
dxdt = [x(3)
        x(4)
        -0.005*x(3)*v
        -0.005*x(4)*v-9.81];
end
end
```

The two lines of output that span $x = 30$ m are

t	x1	x2	x3	x4
1.7000e+000	2.9607e+001	2.3944e+001	1.5990e+001	3.6997e+000
1.7500e+000	3.0405e+001	2.4117e+001	1.5925e+001	3.1952e+000

Linear interpolation for h :

$$\frac{30.405 - 29.607}{607} = \frac{30 - 29}{h} \quad h = 24.0 \text{ m}$$

$$24.117 - 23.944 \quad h - 23.944$$

Linear interpolation for v_x and v_y :

$$\frac{30.405 - 29.607}{607} = \frac{30 - 29}{v_x} \quad v_x = 15.958 \text{ m/s}$$

$$15.925 - 15.990 \quad v_x - 15.990$$

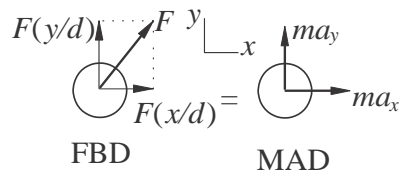
$$\frac{30.405 - 29.607}{607} = \frac{30 - 29.607}{607} \quad v_y = 3.451 \text{ m/s}$$

$$3.1952 - 3.6997 \quad v_y = 3.6997$$

$$\therefore v = \sqrt{15.958^2 + 3.451^2} = 16.33 \text{ m/s}$$

12.80

(a)



$$\Sigma F_x = ma_x \quad \rightarrow \quad F \frac{x}{d} = ma_x$$

$$a_x = \frac{1}{m} F \frac{x}{d} = \frac{1}{0.01} \frac{0.005}{d^2} x = 0.5 \frac{x}{d^3} = \frac{0.5x}{(x^2 + y^2)^{3/2}} \text{ m/s}^2$$

$$\Sigma F_y = ma_y \quad + \uparrow \quad F \frac{y}{d} = ma_y$$

$$a_y = \frac{1}{m} F \frac{y}{d} = \frac{1}{0.01} \frac{0.005}{d^2} y = 0.5 \frac{y}{d^3} = \frac{0.5y}{(x^2 + y^2)^{3/2}} \text{ m/s}^2$$

The initial conditions are:

$$x = 0.3 \text{ m} \quad y = 0.4 \text{ m} \quad v_x = 0 \quad v_y = -2 \text{ m/s at } t = 0$$

(b) Letting $x_1 = x$, $x_2 = y$, $x_3 = v_x$ and $x_4 = v_y$, the equivalent first-order equations are

$$\dot{x}_1 = x_3 \quad \dot{x}_2 = x_4 \quad \dot{x}_3 = \frac{0.5x_1}{(x_1^2 + x_2^2)^{3/2}} \quad \dot{x}_4 = \frac{0.5x_2}{(x_1^2 + x_2^2)^{3/2}}$$

The MATLAB program for solving the equations is

```
function problem12_80
[t, x] = ode45(@f, (0:0.005:0.25), [0.3 0.4 0 -2]);
printSol(t, x)
function dxdt = f(t, x)
d3 = (sqrt(x(1)^2 + x(2)^2))^3;
dxdt = [x(3)
        x(4)
        0.5*x(1)/d3
        0.5*x(2)/d3];
```

end
end

The two output lines spanning $y = 0$ are shown below.

t	x1	x2	x3	x4
2.2000e-001	3.5879e-001	3.0450e-003	6.5959e-001	-1.6667e+000
2.2500e-001	3.6213e-001	-5.2884e-003	6.7883e-001	-1.6668e+000

Linear interpolation for x at $y = 0$:

$$\frac{0.36213 - 0.35879}{35879} = \frac{x - 0.}{-0.0052884 - 0.0030450} \quad x = 0.360 \text{ m}$$

Linear interpolation for v_x :

$$v_x : \frac{0.67883 - 0.65959}{-0.0052884 - 0.0030450} = \frac{v_x - 0.65959}{0 - 0.0030450} \quad v_x = 0.6666 \text{ m/s}$$

By inspection $v_y = -1.6667 \text{ m/s}$.

$$\therefore v = \sqrt{0.6666^2 + 1.6667^2} = 1.795 \text{ m/s}$$

12.81

(a) The signs of a_x and a_y in the solution of Prob. 12.80 must be reversed.

$$a_x = -\frac{0.5x}{(x^2 + y^2)^{3/2}} \text{ m/s}^2 \quad a_y = -\frac{0.5y}{(x^2 + y^2)^{3/2}} \text{ m/s}^2$$

The initial conditions are the same as in Problem 12.80:

$$x = 0.3 \text{ m} \quad y = 0.4 \text{ m} \quad v_x = 0 \quad v_y = -2 \text{ m/s at } t = 0.$$

(b) MATLAB program:

```
function problem12_81
[t,x] = ode45(@f, (0:0.005:0.2), [0.3 0.4 0 -2]);
printSol(t,x)
function dxdt = f(t,x)
d3 = (sqrt(x(1)^2 + x(2)^2))^3;
dxdt = [x(3)
x(4)
-0.5*x(1)/d3
-0.5*x(2)/d3];
end
end
```

The two lines of output spanning $y = 0$ are:

t	x1	x2	x3	x4
1.8000e-001	2.5952e-001	8.5117e-003	-6.3935e-001	-2.3329e+000
1.8500e-001	2.5623e-001	-3.1544e-003	-6.7692e-001	-2.3333e+000

Linear interpolation for x at $y = 0$:

$$\frac{0.25623 - 0.25952}{25952} = \frac{x - 0.}{25952} \quad x = 0.257 \text{ m}$$

$$-0.0031544 - 0.0085117 \quad 0 - 0.0085117$$

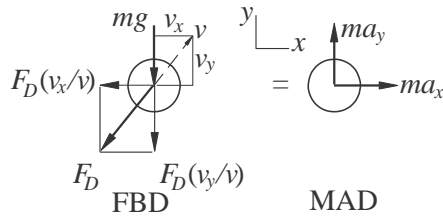
Linear interpolation for v_x :

$$\frac{-0.67692 - (-0.63935)}{-0.0031544 - 0.0085117} = \frac{x - (-0.63935)}{0 - 0.0085117} \quad v_x = -0.6668 \text{ m/s}$$

By inspection, $v_y = -2.3332 \text{ m/s}$.

$$v = \sqrt{0.6668^2 + 2.3332^2} = 2.43 \text{ m/s}$$

12.82



$$\Sigma F_x = ma_x \rightarrow -F_D \frac{v_x}{v} = ma_x \quad -c_D v \frac{1.5 v_x}{v} = ma_x$$

$$\therefore a_x = -\frac{D}{m} v_x \sqrt{v}$$

$$\frac{c_D}{m} = \frac{0.0317}{(28.35/1000)(9.81)} = 0.11398(\text{m} \cdot \text{s})^{-0.5}$$

$$\therefore a_x = -0.11398 v_x (v_x^2 + v_y^2)^{0.25} \text{ m/s}^2$$

$$\Sigma F_y = ma_y \quad + \uparrow -F_D \frac{v_y}{v} - mg = ma_y \quad -c_D v \frac{1.5 v_y}{v} - mg = ma_y$$

$$\therefore a_y = \frac{D}{m} v_y \sqrt{v} - g = -0.11398 v_y (v_x^2 + v_y^2)^{0.25} - 9.81 \text{ m/s}^2$$

The initial conditions are:

$$x = 0 \quad y = 1.83 \text{ m} \quad v_x = 36.6 \text{ m/s} \quad v_y = 0 \quad \text{at } t = 0$$

(b) Letting $x_1 = x$, $x_2 = y$, $x_3 = v_x$ and $x_4 = v_y$, the equivalent first-order equations are

$$\begin{aligned}\dot{x}_1 &= x_3 & \dot{x}_2 &= x_4 \\ \dot{x}_3 &= -0.11398x_3 \sqrt{x_3^2 + x_4^2} \\ \dot{x}_4 &= -0.11398x_4 \sqrt{x_3^2 + x_4^2} - 9.81\end{aligned}$$

The MATLAB program is

```
function problem12_82
[t,x] = ode45(@f, (0:0.02:0.7), [0 1.83 36.6 0]);
printSol(t,x)
    function dxdt = f(t,x)
        v25 = sqrt((sqrt(x(3)^2 + x(4)^2)));
        dxdt = [x(3)
                x(4)
                -0.11398*x(3)*v25
                -0.11398*x(4)*v25-9.81];
    end
end
```

The two lines of output that span $y = 0$ are:

t	x1	x2	x3	x4
6.4000e-001	1.9185e+001	6.3629e-002	2.4534e+001	-5.2073e+000
6.6000e-001	1.9673e+001	-4.1879e-002	2.4256e+001	-5.3434e+000

Linear interpolation for x at $y = 0$:

$$\frac{19.673 - 19.185}{185} = \frac{R - 19.185}{185} \quad R = 19.48 \text{ m}$$

$$\frac{-0.041879 - 0.063629}{0 - 0.063629}$$

Linear interpolation for t at $y = 0$:

$$\frac{0.66 - 0.64}{-0.041879 - 0.063629} = \frac{t - 0.64}{0 - 0.063629} \quad t = 0.652 \text{ s}$$

12.83

2

$$a_x = -10 - 0.5v_x \text{ m/s}^2 \quad a_y = -9.81 - 0.5v_y \text{ m/s}$$

(a) Letting $x_1 = x$, $x_2 = y$, $x_3 = v_x$ and $x_4 = v_y$, the equivalent first-order equations are

$$\dot{x}_1 = x_3 \quad \dot{x}_2 = x_4 \quad \dot{x}_3 = -10 - 0.5x_3 \quad \dot{x}_4 = -9.81 - 0.5x_4$$

At $t = 0$ (initial conditions):

$$x_1 = x_2 = 0 \quad x_3 = 30 \cos 40^\circ = 22.98 \text{ m/s} \quad x_4 = 30 \sin 40^\circ = 19.284 \text{ m/s}$$

MATLAB program:

```

function problem12_83
[t,x] = ode45(@f, (0:0.05:3.5), [0 0 22.98 19.284]);
printSol(t,x) axes(' fontsize' ,14)
plot(x(:,1),x(:,2),' linewidth' ,1.5)
grid on
xlabel(' x (ft)' ); ylabel(' y (ft)' )
    function dxdt = f(t,x)
        dxdt = [x(3)
                x(4)
                -10-0.5*x(3)
                -9.81-0.5*x(4) ];
    end
end

```

Two lines of output that span $y = 0$:

t	x1	x2	x3	x4
3.1000e+000	5.7152e+000	4.7141e-001	-1.0878e+001	-1.1363e+001
3.1500e+000	5.1656e+000	-1.0184e-001	-1.1103e+001	-1.1567e+001

Linear interpolation for x at $y = 0$:


$$\frac{5.1656 - 5.7152}{7152} = \frac{b - 5.}{7152} \quad b = 5.26 \text{ m}$$

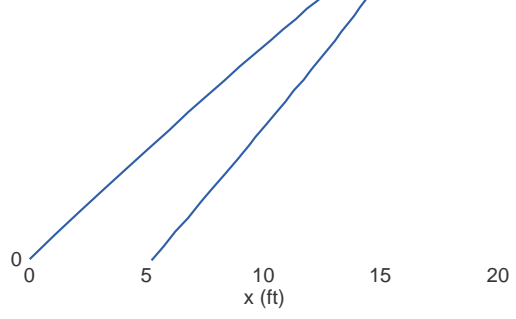
$$-0.10184 - 0.47141 \quad 0 - 0.47141$$

Linear interpolation for t at $y = 0$

$$\frac{3.15 - 3.10}{-0.10184 - 0.47141} = \frac{t - 3.10}{0 - 0.47141} \quad t = 3.14 \text{ s}$$

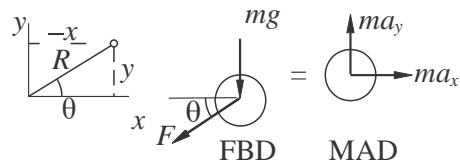
(b)





12.84

(a)



Spring force is $F = k(R - L_0)$, where $R = \sqrt{x^2 + y^2}$.

$$\Sigma F_x = ma_x \quad \rightarrow \quad -F \cos \theta = ma_x$$

$$a_x = -\frac{F}{m} \cos \theta = -\frac{(R - L_0)x}{mR} = -\frac{k}{m} \left(1 - \frac{L_0}{R}\right) x$$

$$= -\frac{10}{0.25} \left(1 - \frac{0.5}{R}\right) x = -40 \left(1 - \frac{0.5}{R}\right) x \text{ m/s}^2$$

$$\Sigma F_y = ma_y \quad + \uparrow \quad -F \sin \theta - mg = ma_y$$

$$a_y = -\frac{F}{m} \sin \theta - g = -\frac{(R - L_0)y}{mR} - g = -\frac{k}{m} \left(1 - \frac{L_0}{R}\right) y - g$$

$$= -40 \left(1 - \frac{0.5}{R}\right) y - 9.81 \text{ m/s}^2$$

The initial conditions are:

$$x = 0.5 \text{ m} \quad y = -0.5 \text{ m} \quad v_x = v_y = 0 \quad \text{at } t = 0$$

(b) Letting $x_1 = x$, $x_2 = y$, $x_3 = v_x$ and $x_4 = v_y$, the equivalent first-order equations are

$$\begin{aligned} \dot{x}_1 &= x_3 & \dot{x}_2 &= x_4 \\ \dot{x}_3 &= -40 \left(1 - \frac{0.5}{R}\right) x_1 & \dot{x}_4 &= -40 \left(1 - \frac{0.5}{R}\right) x_2 - 9.81 \end{aligned}$$

where $R = \sqrt{x_1^2 + x_2^2}$.

The MATLAB program is:

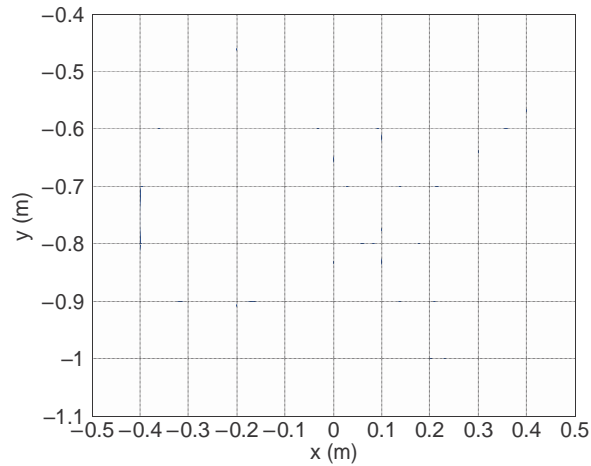
```
function probleml2_84
```

```
[t,x] = ode45(@f, (0:0.02:2), [0.5 -0.5 0 0]);  
axes(' fontsize' ,14)  
plot(x(:,1),x(:,2), ' linewidth' ,1.5)  
grid on  
xlabel(' x (m)' ); ylabel(' y (m)' )
```

```

function dxdt = f(t,x)
rr = 1-0.5/sqrt(x(1)^2 + x(2)^2);
dxdt = [x(3)
        x(4)
        -40*rr*x(1)
        -40*rr*x(2)-9.81];
end
end
end

```



12.85

- (a) The expressions for the accelerations in Prob. 12.84 are now valid only when the spring is in tension. If the spring is not in tension, the spring force is zero. Therefore, we have

$$a_x = \begin{cases} -40 \left(1 - \frac{0.5}{R}\right) x \text{ m/s}^2 & \text{if } R > 0.5 \text{ m} \\ 0 & \text{if } R \leq 0.5 \text{ m} \end{cases}$$

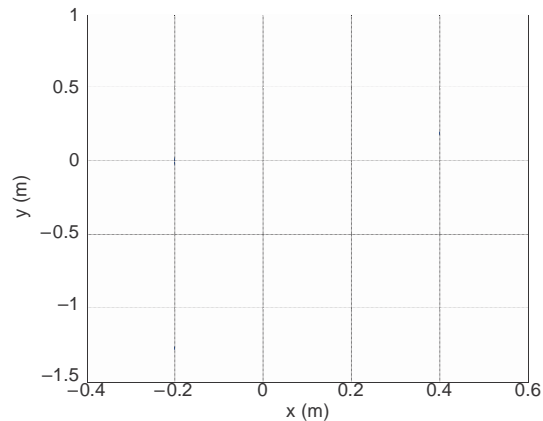
$$a_y = \begin{cases} -40 \left(1 - \frac{0.5}{R}\right) y - 9.81 \text{ m/s}^2 & \text{if } R > 0.5 \text{ m} \\ -9.81 \text{ m/s}^2 & \text{if } R \leq 0.5 \text{ m} \end{cases}$$

The initial conditions are:

$$x = y = 0.5\text{m} \quad v_x = v_y = 0 \quad \text{at } t = 0$$

(b) MATLAB program:

```
function problem12_85
[t,x] = ode45(@f, (0:0.02:2), [0.5 0.5 0 0]);
axes(' fontsize,14)
plot(x(:,1),x(:,2), ' linewidth' ,1.5)
grid on
xlabel(' x (m)' ); ylabel(' y (m)' )
function dxdt = f(t,x)
rr = 1-0.5/sqrt(x(1)^2 + x(2)^2);
if rr < 0; rr = 0; end
dxdt = [x(3)
        x(4)
        -40*rr*x(1)
        -40*rr*x(2)-9.81];
end
end
```



12.86

(a)

$$a_x = -a_D \cos \theta + a_L \sin \theta \quad a_y = -a_D \sin \theta - a_L \cos \theta - g$$

Substitute

$$\sin \theta = \frac{v_y}{v} \quad \cos \theta = \frac{v_x}{v} \quad a_D = 0.05v^2$$

$$a_L = 0.16\omega v = 0.16(10)v = 1.6v$$

where $v = v_x^2 + v_y^2$.

$$a_x = -0.05v^2 \frac{v_x}{v} + 1.6v \frac{v_y}{v} = -0.05vv_x + 1.6v_y \text{ ft/s}^2$$

$$a_y = -0.05v^2 \frac{v_y}{v} - 1.6v \frac{v_x}{v} - 32.2 = -0.05vv_y - 1.6v_x - 32.2 \text{ ft/s}^2$$

The initial conditions at $t = 0$ are:

$$x = y = 0 \quad v_x = 60 \cos 60^\circ = 30 \text{ ft/s} \quad v_y = 60 \sin 60^\circ = 51.96 \text{ ft/s}$$

(b) Letting $x_1 = x$, $x_2 = y$, $x_3 = v_x$ and $x_4 = v_y$, the equivalent first-order equations are

$$\dot{x}_1 = x_3 \quad \dot{x}_2 = x_4$$

$$\dot{x}_3 = -0.05vx_3 + 1.6x_4 \quad \dot{x}_4 = -0.05vx_4 - 1.6x_3 - 32.2$$

MATLAB program:

```
function problem12_86
[t,x] = ode45(@f, (0:0.02:1.2), [0 0 30 51.96]);
printSol(t,x) axes(' fontsize' ,14)
plot(x(:,1),x(:,2),' linewidth' ,1.5)
grid on
xlabel(' x (ft)' ); ylabel(' y (ft)' )
function dxdt = f(t,x)
v = sqrt(x(3)^2 + x(4)^2);
dxdt = [x(3)
        x(4)
        -0.05*v*x(3)+1.6*x(4)
        -0.05*v*x(4)-1.6*x(3)-32.2];
end
end
```

The two lines of output that span $y = 0$ are

t	x1	x2	x3	x4
1.0400e+000	1.9377e+001	2.5868e-001	9.6888e-001	-2.2523e+001
1.0600e+000	1.9388e+001	-1.9335e-001	2.3210e-001	-2.2675e+001

Linear interpolation for t at $y = 0$:

1.

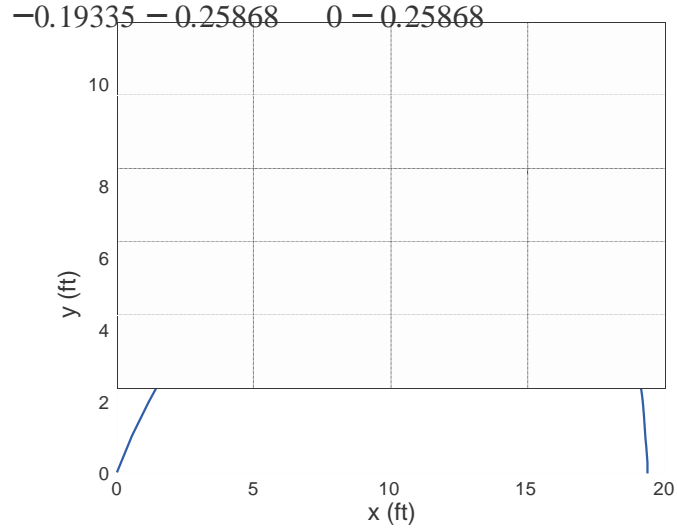
$$\frac{06 - 1.04}{-0.19335 - 0.25868} = \frac{t - 1.04}{0 - 0.25868}$$

$$t = 1.051 \text{ s}$$

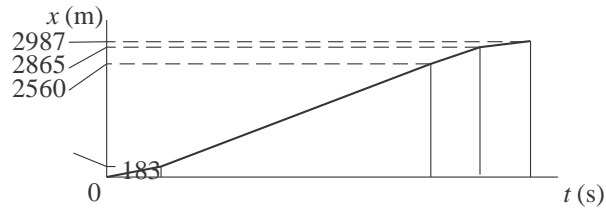
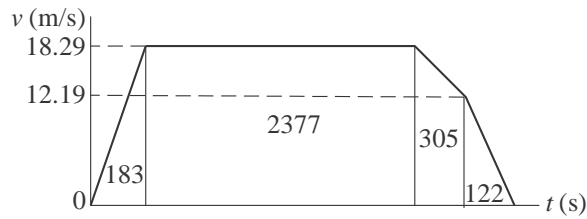
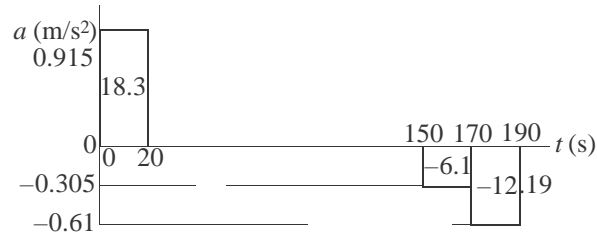
Linear interpolation for x at $y = 0$:

$$\frac{19.388 - 19.377}{377} = \frac{x - 19}{377} \quad x = 19.38 \text{ ft}$$

(c)

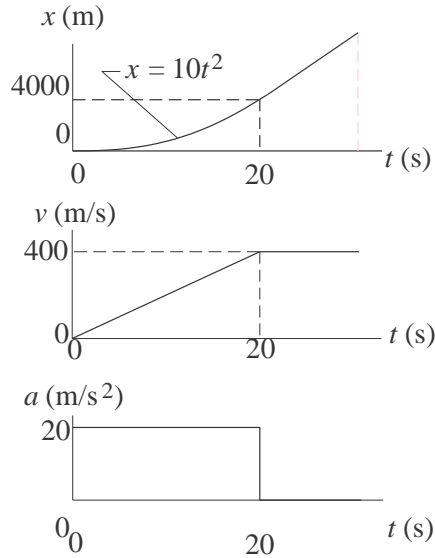


12.87



$$d = 2987 \text{ m}$$

12.88



$$v = \text{slope of } x \text{ diagram} \quad v|_{20\text{s}} = \frac{dx}{dt}|_{20\text{s}} = 400 \text{ m/s}$$

$$a = \text{slope of } v \text{ diagram} \quad a = \frac{400}{20} = 20 \text{ m/s}^2$$

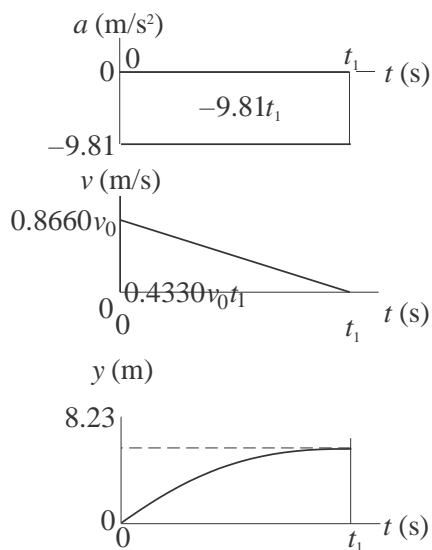
12.89

It is sufficient to consider vertical motion only:

$$a = -g = -9.81 \text{ m/s}^2$$

Initial conditions:

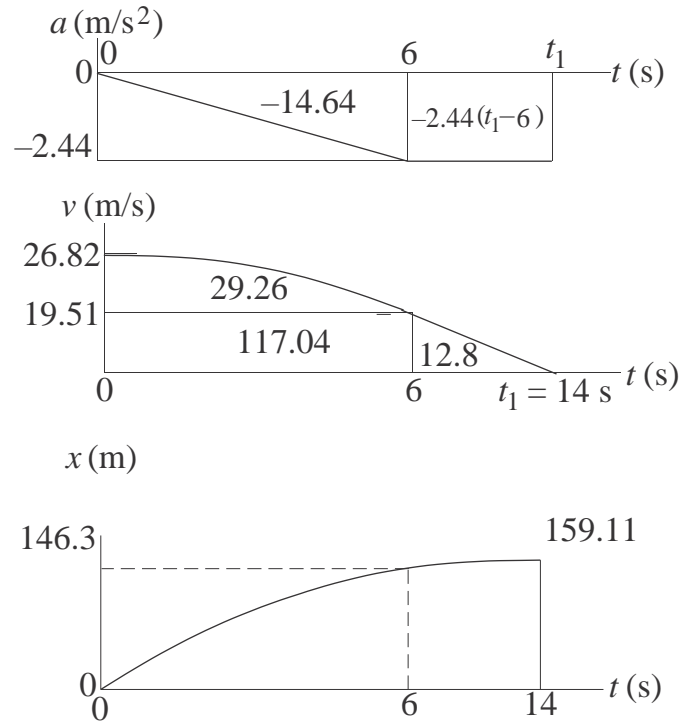
$$v|_{t=0} = v_0 \sin 60^\circ = 0.8660v_0 \text{ m/s} \quad y|_{t=0} = 0$$



End conditions (t_1 is the time when the ball is at its maximum height):

$$\begin{aligned}v|_{t=t_1} &= 0 & 0.8660v_0 - 9.81t &= 0 & t_1 &= 0.08828v_0 \\y|_{t=t_1} &= 8023 \text{ m} & 0.4330(0.08828)v_0^2 &= 8.23 & v_0 &= 14.7 \text{ m/s}\end{aligned}$$

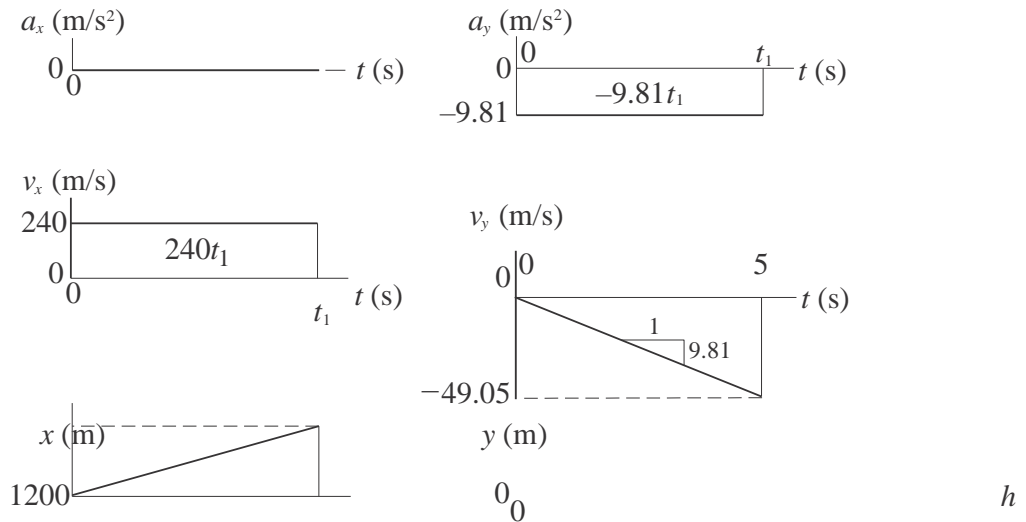
12.90



From a and v diagrams $-2.44(t_1 - 6) = -19.51 \quad t_1 = 14.0 \text{ s}$
 From x diagram $x|_{t_1} = 159.11 \text{ m}$

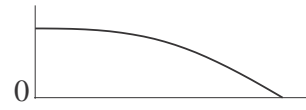
12.91

Horizontal motion ($a_x = 0$) Vertical motion ($a_y = -9.81 \text{ m/s}^2$)



t_1 t (s) 0

5 t (s)

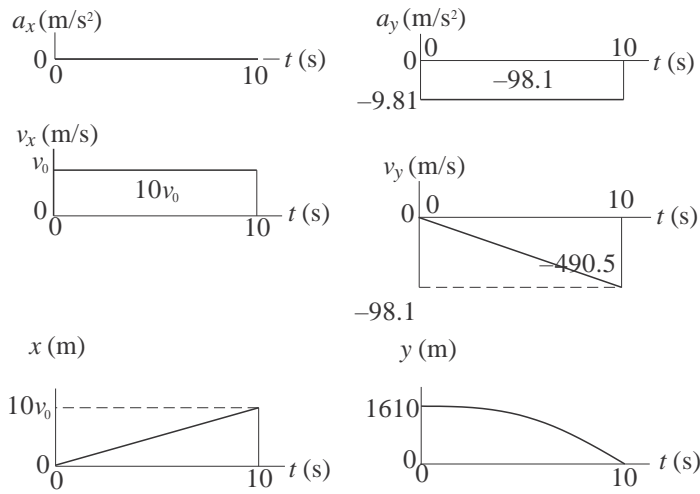


End condition:

$$x|_{t=t_1} = 1200 \text{ m} \quad 240t_1 = 1200 \quad t_1 = 5.0 \text{ s}$$

$$h = -[\text{area under } v_y \text{ diagram}] = \frac{1}{2}(49.05)(5) = 122.6 \text{ m}$$

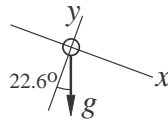
12.92 Horizontal motion: $a_x = 0$ Vertical motion: $a_y = -9.81 \text{ m/s}^2$



$$\frac{v_y}{v_x} \Big|_{t=10} = \tan 20^\circ \quad \frac{98.1}{10v_0} = \tan 20^\circ \quad v_0 = 269.5 \text{ m/s}$$

$$R = x|_{t=10} = 10v_0 = 2695 \text{ m} \quad h = y|_{t=0} = 490.5 \text{ m}$$

12.93



Acceleration diagram

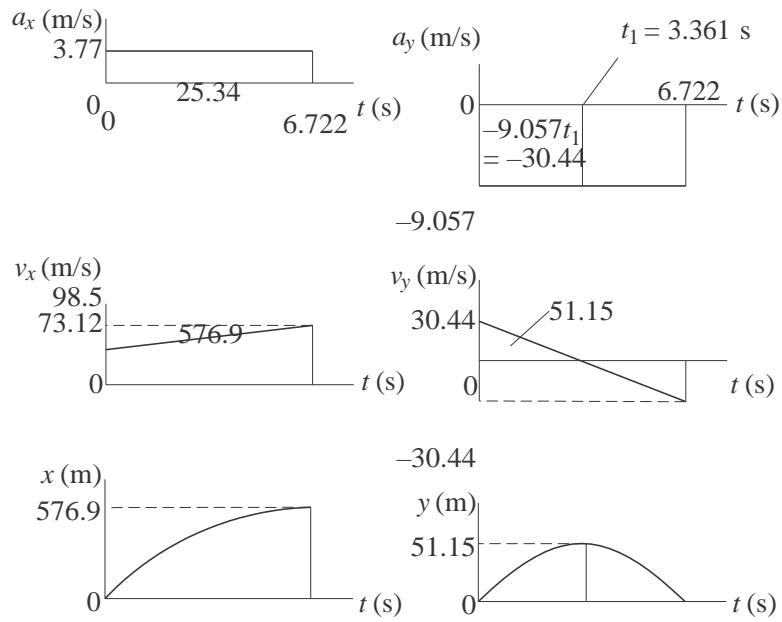
$$a_x = g \sin 22.6^\circ = 9.81 \sin 22.6^\circ = 3.77 \text{ m/s}^2$$

$$a_y = -g \cos 22.6^\circ = -9.81 \cos 22.6^\circ = -9.057 \text{ m/s}^2$$

At $t = 0$ (initial conditions):

$$x = 0 \quad v_x = 79.2 \cos 22.6^\circ = 73.12 \text{ m/s}$$

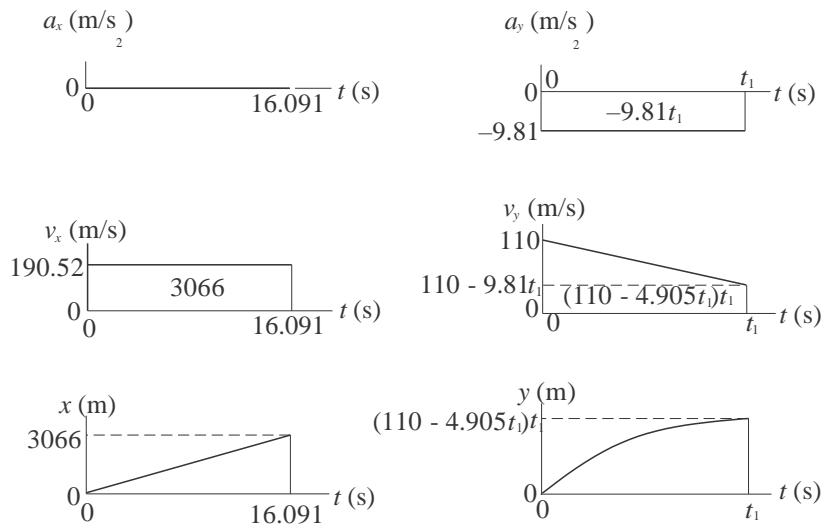
$$y = 0 \quad v_y = 79.2 \sin 22.6^\circ = 30.44 \text{ m/s}$$



$$v_y = 0 \text{ at } t = t_1 \quad \therefore 30.44 - 9.057t_1 = 0 \quad \therefore t_1 = 3.361 \text{ s}$$

$$h = 51.2 \text{ m} \quad R = 577 \text{ m} \quad \text{time of flight } 6.72 \text{ s}$$

12.94



$$\text{End condition: } y|_{t=t_1} = 500 \text{ m.} \quad \therefore (110 - 4.905t_1)t_1 = 500$$

The larger root is $t_1 = 16.091 \text{ s}$

$$R = x|_{t=16.091} = 3066 \text{ m}$$

12.95

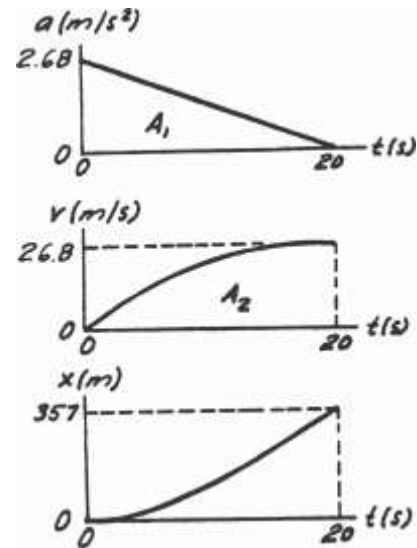
Maximum speed is reached when the acceleration becomes zero, i.e. at $t = 20$ s.

$$(a) \quad A_1 = \frac{1}{2}(2.68)(20) = 26.8 \text{ m/s}$$

$$v|_{20s} = v|_0 + A_1 = 0 + 26.8 = 26.8 \text{ m/s}$$

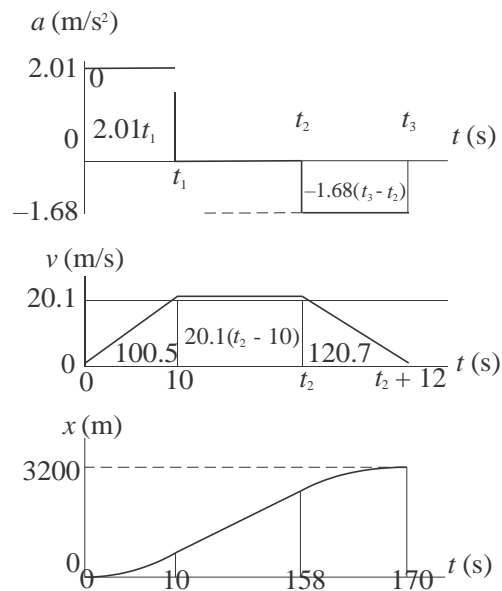
$$(b) \quad A_2 = \frac{2}{3}(26.8)(20) = 357.3 \text{ m}$$

$$x|_{20s} = x|_0 + A_2 = 0 + 357.3 = 357.3 \text{ m}$$



12.96

Accelerate at the maximum rate (2.01 m/s^2) until maximum allowable speed (20.1 m/s) is reached at time t_1 . Then maintain this speed until time t_2 . Finally, decelerate at the maximum rate (1.68 m/s^2) until the train stops at time t_3 . The distance traveled during this time must be 3200 m.



From a and v diagrams:

$$2.01t_1 = 20.1 \text{ m/s} \quad \therefore t_1 = 10 \text{ s}$$

$$1.68(t_3 - t_2) = 20.1 \text{ m/s} \quad \therefore t_3 - t_2 = 12 \text{ s}$$

From v and x diagrams:

$$100.5 + 20.1(t_2 - 10) + 120.7 = 3200 \quad \therefore t_2 = 158.2 \text{ s}$$

$$t_3 = t_2 + 12 = 158.2 + 12 = 170.2 \text{ s}$$

12.97

In order to compute the area A_3 under the v -diagram, we must analyze the fictitious motion between 16 s and t_1 (time when the slope of v -diagram becomes zero).

From similar triangles: $\frac{t_1 - 16}{0.75} = \frac{16}{1.75 - 0.75}$

$$\therefore t_1 = 28 \text{ s}$$

$$A_1 = -\frac{1}{2}(1.75 + 0.75)(16) = -20 \text{ m/s}$$

$$A_2 = -\frac{1}{2}(0.75)(28 - 16) = -4.5 \text{ m/s}$$

$$v|_{16\text{s}} = v|_0 + A_1 = v_0 - 20 \text{ m/s}$$

But $v|_{16\text{s}} = 0 \quad \therefore v_0 = 20 \text{ m/s} \spadesuit$

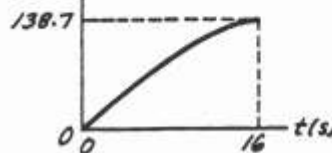
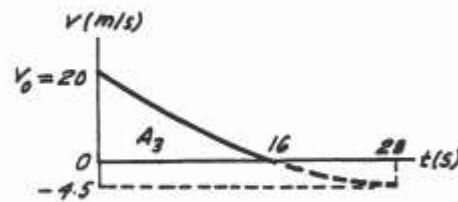
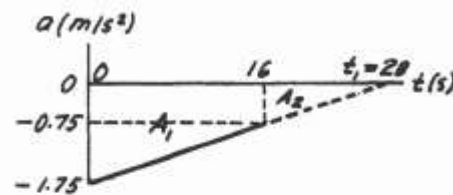
$$v|_{28\text{s}} = v|_{16\text{s}} + A_2 = 0 - 4.5 = -4.5 \text{ m/s}$$

$$A_3 = \frac{1}{3}(24.5)(28) - (4.5)(28) + \frac{2}{3}(12)(4.5)$$

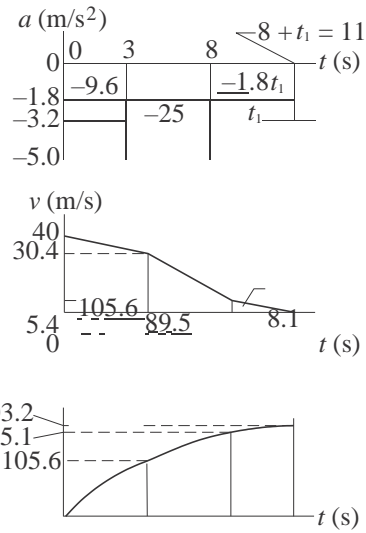
$$= 138.7 \text{ m (see diagram below)}$$

$$x|_{16\text{s}} = x|_0 + A_3 = 0 + 138.7 = 138.7 \text{ m} \spadesuit$$

$$A_3 = \frac{24.5}{28} \triangle - 4.5 \square + \frac{12}{3} \triangle$$



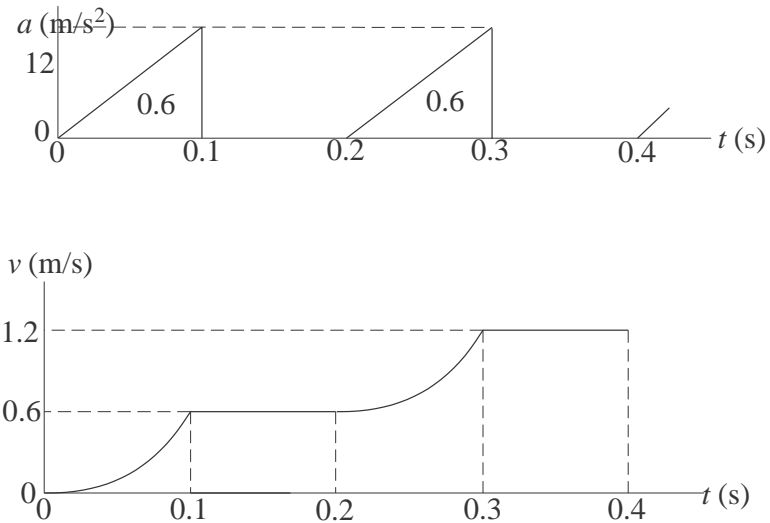
12.98



$$v = 0 \text{ when } 40 - 9.6 - 25 - 1.8t_1 = 0 \quad \therefore t_1 = 3.0\text{s}$$

After touchdown, the plane travels 203 m

12.99



From the v diagram:

$$v|_{0.4\text{s}} = 1.2 \text{ m/s}$$

$$x|_{0.4\text{s}} = \text{area under } v \text{ diagram}$$

$$= 2 \frac{1}{3}(0.6)(0.1) + 4(0.6)(0.1) = 0.28 \text{ m}$$

12.100

$$\Sigma F_x = ma_x \quad \rightarrow P(t) - 7.12 = \frac{35.6}{9.81}a$$

$$\therefore a = 0.276 P(t) - 1.962 \text{ m/s}^2$$

Consider only one cycle of acceleration.

$$A_1 = (0.276P_0 - 1.962)(0.2)$$

$$= 0.0552P_0 - 0.3924 \text{ m/s}$$

$$A_2 = -(1.962)(0.3) = -0.589 \text{ m/s}$$

For the average speed to be constant, the change of speed over the cycle must be zero.

$$\therefore \Delta v = A_1 + A_2 = 0$$

$$\therefore 0.0552P_0 - 0.3924 - 0.589 = 0$$

$$\therefore P_0 = 17.8 \text{ N}$$

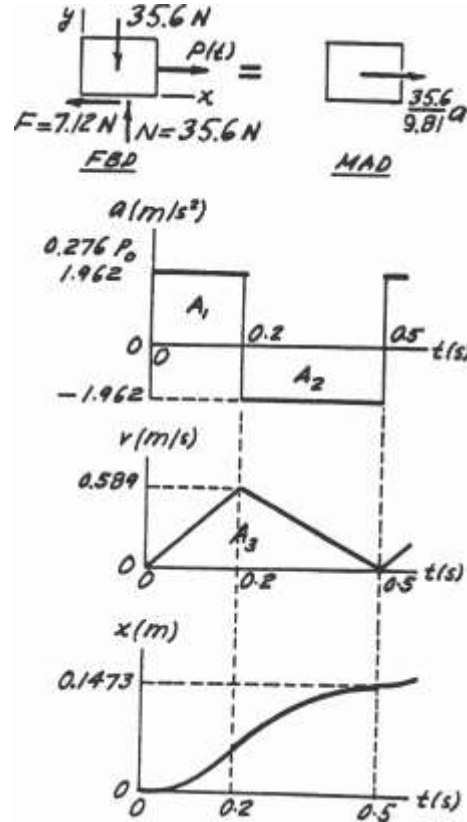
$$v|_{0.2s} = v|_0 + A_1 = 0 + 0.589 = 0.589 \text{ m/s}$$

$$A_3 = \frac{1}{2}(0.589)(0.5) = 0.1473 \text{ m}$$

$$x|_{0.5s} = x|_0 + A_3 = 0 + 0.1473 = 0.1473 \text{ m}$$

This is also the distance traveled during the 0.5 second cycle.

$$\therefore v_{\text{aver}} = \frac{\Delta x}{\Delta t} = \frac{0.1473}{0.5} = 0.295 \text{ m/s}$$



12.101

$$\begin{aligned} \Sigma F_x = ma_x : \quad \overset{+}{\rightarrow} P(t) - 7.12 &= \frac{35.6}{9.81}a \\ \therefore a &= 0.276 P(t) - 1.962 \text{ m/s}^2 \\ &= \frac{0.276(26.7) - 1.962}{-1.962} = \frac{5.407}{-1.962} \text{ m/s}^2 \end{aligned}$$

$$A_1 = A_3 = (5.407)(0.2) = 1.081 \text{ m/s}$$

$$A_2 = -1.962(0.3) = -0.6589 \text{ m/s}$$

$$v_{0.2s} = v_0 + A_1 = 0.61 + 1.081 = 1.691 \text{ m/s}$$

$$v_{0.5s} = v_{0.2s} + A_2 = 1.691 - 0.589 = 1.102 \text{ m/s}$$

$$v_{0.7s} = v_{0.5s} + A_3 = 1.102 + 1.081 = 2.183 \text{ m/s}$$

$$A_4 = \frac{1}{2}(0.61 + 1.691)(0.2) = 0.23 \text{ m}$$

$$A_5 = \frac{1}{2}(1.691 + 1.102)(0.3) = 0.419 \text{ m}$$

$$A_6 = \frac{1}{2}(1.102 + 2.183)(0.2) = 0.329 \text{ m}$$

$$x_{0.2s} = x_0 + A_4 = 0 + 0.23 = 0.23 \text{ m}$$

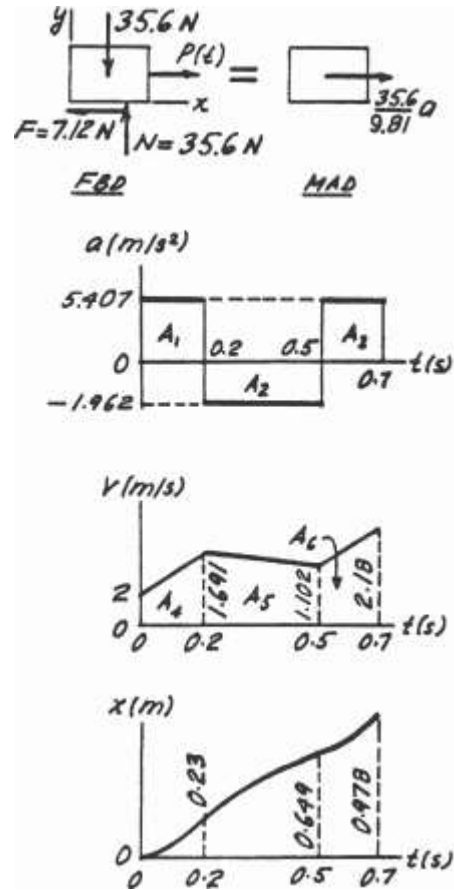
$$x_{0.5s} = x_{0.2s} + A_5 = 0.23 + 0.419 = 0.649 \text{ m}$$

$$x_{0.7s} = x_{0.5s} + A_6 = 0.649 + 0.329 = 0.978 \text{ m}$$

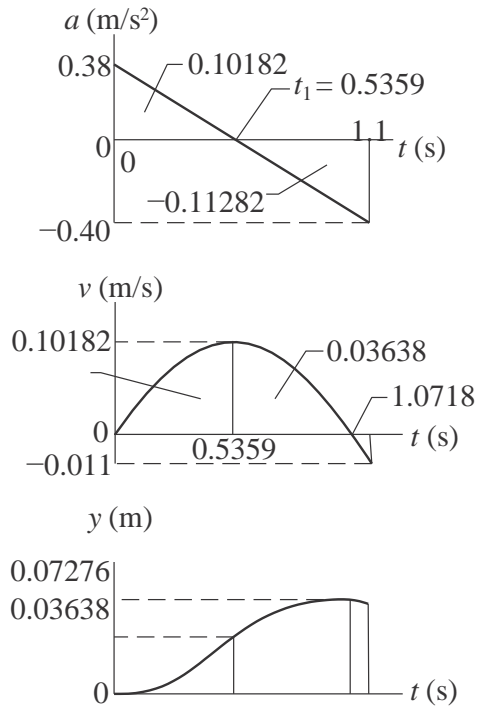
At t = 0.7s:

$$(a)v = 2.18 \text{ m/s}$$

$$(a)x = 0.98 \text{ m}$$



12.102

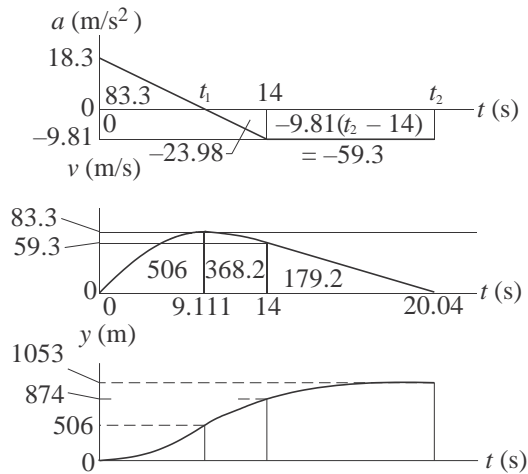


From similar triangles on the a -diagram:

$$\frac{t_1}{0.38} = \frac{1.1}{0.78} \quad t = 0.5359 \text{ s}$$

$$v_{\max} = 0.1018 \text{ m/s} \quad y_{\max} = 0.0728 \text{ m}$$

12.103



From similar triangles on a -diagram:

$$\frac{t_1}{18.3} = \frac{14}{67}$$

18.3

$$\frac{18.3 + 9.81}{12.102} \quad \therefore t_1 = 9.114 \text{ s}$$

Let t_2 be the time when $v = 0$. Therefore,

$$59.3 - 9.81(t_2 - 14) = 0 \quad \therefore t_2 = 20.04 \text{ s}$$

$$v_{\max} = 83.3 \text{ m/s} \quad y_{\max} = 1053 \text{ m} \quad \text{occurring at } t = 20.0 \text{ s}$$

12.104

$$v = 2x^3 - 8x^2 + 12x \text{ mm/s}$$

$$a = v \frac{dv}{dx} = (2x^3 - 8x^2 + 12x)(6x^2 - 16x + 12)$$

$$a|_{x=2} = (2(8) - 8(4) + 12(2))(6(4) - 16(2) + 12) = 32.0 \text{ mm/s}^2$$

12.105

$$a = At + B$$

When $t = 0$: $a = 0 \therefore B = 0$

When $t = 6 \text{ s}$: $a = 2.44 \text{ m/s}^2 \therefore 2.44 = A(6) \therefore A = 0.407 \text{ m/s}^3$

$$\therefore a = 0.407t \text{ m/s}^2 \quad v = \int a dt + C = 0.203t^2 + C$$

When $t = 0$: $v = v_0 \therefore C = v_0$

When $t = 6 \text{ s}$: $v = 4.88 \text{ m/s}$

$$\therefore 0.203(36) + v_0 = 4.88 \quad \therefore v_0 = -2.43 \text{ m/s}$$

12.106

<u>Car A</u>	<u>Car B</u>
$a = 1.22 \text{ m/s}^2$	$a = -0.61 \text{ m/s}^2$
$v = 1.22t + C_1 \text{ m/s}$	$v = 0.61t + C_3 \text{ m/s}$
$v _{t=0} = 9.15 \text{ m/s} \therefore C_1 = 9.15 \text{ m/s}$	$v _{t=0} = 18.3 \text{ m/s} \therefore C_3 = 18.3 \text{ m/s}$
$v = 1.22t + 9.15 \text{ m/s}$	$v = -0.61t + 18.3 \text{ m/s}$
$x = 0.61t^2 + 9.15t + C_2 \text{ m}$	$x = -0.305t^2 + 18.3t + C_4 \text{ m}$
$x _{t=0} = -122 \text{ m} \therefore C_2 = -122 \text{ m}$	$x _{t=0} = 0 \therefore C_4 = 0$
$x = 0.61t^2 + 9.15t - 122 \text{ m}$	$x = -0.305t^2 + 18.3t \text{ m}$

Car A overtakes car B when $x_A = x_B$:

$$0.61t^2 + 9.15t - 122 = -0.305t^2 + 18.3t$$

$$0.915t^2 - 9.15t - 122 = 0 \quad t = 17.58 \text{ s}$$

12.107

(a)

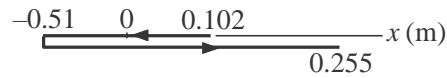
$$x = 0.0762t^3 - 0.229t + 0.102 \text{ m}$$

$$\Delta x = x|_{t=2} - x|_{t=0} = [0.0762(8) - 0.229(2) + 0.102] - 0.102 = 0.152 \text{ m}$$

(b)

$$v = \dot{x} = 0.229t^2 - 0.229 \text{ m/s} \quad \therefore v = 0 \text{ when } t = 1.0 \text{ s}$$

$$x|_{t=0} = 0.102 \text{ m} \quad x|_{t=1} = -0.51 \text{ m} \quad x|_{t=2} = 0.255 \text{ m}$$



$$d = 0.152 + 0.304 = 0.456 \text{ m}$$

12.108 Fall of the stone:

$$a = 9.81 \text{ m/s}^2 \quad \therefore v = 9.81t + C_1 \text{ m/s}$$

$$\therefore y = 4.905t^2 + C_1t + C_2 \text{ m}$$

When $t = 0$: $v = x = 0 \quad \therefore C_1 = C_2 = 0$

Let t_1 be the time of fall and h the depth of the well. $\therefore h = 4.905t_1^2 \text{ m}$

Travel of the sound:

Let t_2 be the time for sound to travel the distance h . $\therefore h = 341.5t_2 \text{ m}$

$$t_1 + t_2 = 3 \quad \therefore t_2 = 3 - t_1$$

$$4.905t_1^2 = 341.5t_2 \quad 4.905t_1^2 = 341.5(3 - t_1) \quad t_1 = 2.881 \text{ s}$$

$$h = y|_{t=2.881\text{s}} = 4.905(2.881)^2 = 40.7 \text{ m}$$

12.109

$$a = 3.66t - 1.83t^2 \text{ m/s}^2$$

$$v = \int a \, dt = 1.83t^2 - 0.61t^3 + C_1 \text{ m/s}$$

$$x = \int v \, dt = 0.61t^3 - 0.153t^4 + C_1t + C_2 \text{ m}$$

When $t = 0$: $x = v = 0. \quad \therefore C_1 = C_2 = 0$

$$\therefore x = 0.61t^3 - 0.153t^4 \text{ m} \quad \therefore v = 1.83t^2 - 0.61t^3 \text{ m/s}$$

(a)

$$\Delta x = x|_{t=5} - x|_{t=0} = [0.61(5)^3 - 0.153(5)^4] - 0 = -19.38 \text{ m}$$

(b) When $v = 0$

$$1.83t^2 - 0.61t^3 = 0 \quad t = 3.0 \text{ s}$$
$$x|_{t=0} = 0 \quad x|_{t=3} = 0.61(3)^3 - 0.153(3)^4 = 4.08 \text{ m} \quad x|_{t=5} = -19.38 \text{ m}$$

$$\begin{array}{c} -19.38 \qquad \qquad \qquad 0 \qquad \qquad \qquad 4.08 \\ \longleftarrow \qquad \qquad \qquad \longrightarrow \end{array} x \text{ (m)}$$

$$d = 2(4.08) + 19.38 = 27.5 \text{ m}$$

12.110

$$\frac{dv}{dt} = -cv^2 \quad \frac{1}{v^2} dv = -c dt \quad \frac{1}{v^2} dv = -ct + C_1 \quad -\frac{1}{v} = -ct + C_1$$

$$\text{Initial condition : } v|_{t=0} = 244 \text{ m/s} \quad \therefore \frac{1}{244} = -C_1 \quad \therefore -\frac{1}{v} = -2.62t - \frac{1}{244}$$

$$\text{When } v = 122 \text{ m/s : } \frac{1}{244} - \frac{1}{122} = -2.62t \quad t = 1.5643 \times 10^{-3} \text{ s}$$

$$\frac{1}{v} = 2.62t + \frac{1}{244} \quad v = \frac{1}{2.62t + 1/244}$$

$$x = \frac{dt}{2.62t + 1/244} + C_2 = \frac{1}{2.62} \ln \left(2.62t + \frac{1}{244} \right) + C_2$$

$$\text{Initial condition : } x|_{t=0} = 0 \quad \therefore 0 = \frac{1}{2.62} \ln \left(\frac{1}{244} \right) + C_2$$

$$C_2 = -\frac{1}{2.62} \ln \left(\frac{1}{244} \right) = 2.098 \text{ m}^{-1}$$

$$x = \frac{1}{2.62} \ln \left(2.62t + \frac{1}{244} \right) + 2.098$$

$$\text{When } v = 122 \text{ m/s } \quad t = 1.5643 \times 10^{-3} \text{ s} :$$

$$x = \frac{1}{2.62} \ln \left(2.62(1.5643 \times 10^{-3}) + \frac{1}{244} \right) + 2.098$$

1
244

$$+ 2.098 = 0.264 \text{ m} \quad \text{—}$$

12.111

$$v = 22.86e^{-0.05t} \text{ m/s}$$

$$x = \int 22.86e^{-0.05t} dt = -457.2e^{-0.05t} + C \text{ m}$$

Initial condition : $x|_{t=0} = 0 \quad \therefore C = 457.2 \text{ ft}$

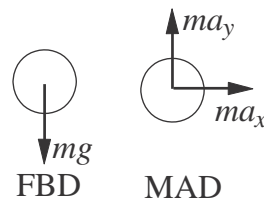
$$x = 457.2(1 - e^{-0.05t}) \text{ m}$$

Setting $v = 1.52 \text{ m/s}$ and solving for t :

$$1.52 = 22.86e^{-0.05t} \quad t = 54.21 \text{ s}$$

$$x|_{v=1.52 \text{ m/s}} = 457.2(1 - e^{-0.05(54.21)}) = 427 \text{ m}$$

12.112



$$\Sigma F_x = ma_x \quad a_x = 0$$

$$\Sigma F_y = ma_y \quad a_y = -g = -9.81 \text{ m/s}^2$$

$$v_x = \int a_x dt = C_1$$

Initial condition: $v_x|_{t=0} = v_0 \cos 50^\circ$

$$\therefore C_1 = v_0 \cos 50^\circ = 0.6428v_0 \quad v_x = 0.6428v_0$$

$$x = \int v_x dt = 0.6428v_0 t + C_2$$

Initial condition: $x|_{t=0} = 0$

$$\therefore C_2 = 0 \quad x = 0.6428v_0 t$$

$$v_y = \int a_y dt = -9.81t + C_3$$

Initial condition: $v_y|_{t=0} = v_0 \sin 50^\circ$

$$\therefore C_3 = v_0 \sin 50^\circ = 0.7660v_0 \quad v_y = -9.81t + 0.7660v_0$$

$$y = \int v_y dt = -4.905t^2 + 0.7660v_0 t + C_4$$

Initial condition: $y|_{t=0} = 0$

$$\therefore C_4 = 0 \quad y = -4.905t^2 + 0.7660v_0t$$

At point B:

$$x = 18 \text{ m} \quad \therefore 0.6428v_0t = 18 \quad v_0t = 28.0 \text{ m}$$

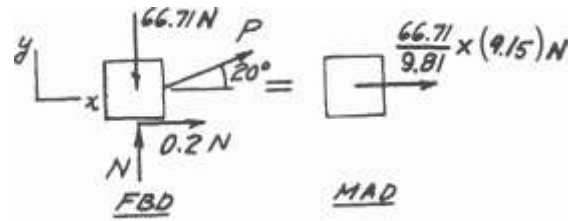
$$y = 18 \text{ m} \quad \therefore -4.905t^2 + 0.7660(28.0) = 18 \quad t = 0.8384 \text{ s}$$

$$v_0 = \frac{28.0}{0.8384} = 33.4 \text{ m/s}$$

12.113

$$\Sigma F_y = 0 \quad + \uparrow N + P \sin 20^\circ - 66.71 = 0$$

$$\Sigma F_x = ma \quad \rightarrow P \cos 20^\circ + 0.2N \frac{66.71}{9.81}(9.15)$$



The solution is: $N = 47.52 \text{ N}$ $P = 56.10 \text{ N}$

12.114

$$F = (50 - t) \times 10^3 \text{ N}$$

$$+ \uparrow a = \frac{F}{m} - g = \frac{(50 - t) \times 10^3}{1400} - 9.81 = 25.90 - 0.7143t \text{ m/s}^2$$

$$v = \int a \, dt = 25.90t - 0.3571t^2 + C_1$$

$$y = \int v \, dt = 12.95t^2 - 0.11903t^3 + C_1t + C_2$$

Initial conditions: $y = v = 0$ when $t = 0$. $\therefore C_1 = C_2 = 0$.

$$y|_{t=20} = 12.95(20)^2 - 0.11903(20)^3 = 4230 \text{ m}$$

12.115

$$\Sigma F_x = ma_x \quad -1.6e^{4x} = 0.2a \quad \therefore a = -\frac{1.6e^{4x}}{0.2} = -8e^{4x}$$

$$a = v \frac{dv}{dx} \quad \therefore v \, dv = a \, dx \quad \therefore \int v \, dv = \int -8e^{4x} \, dx \quad \therefore \frac{1}{2}v^2 = -2e^{4x} + C$$

$$\text{Initial condition: } v = 6 \text{ m/s when } x = 0 \quad \therefore \frac{1}{2}(6)^2 = -2 + C \quad \therefore C = 20 \text{ (m/s)}^2$$

$$\therefore \frac{1}{2}v^2 = -2e^{4x} + 20$$

$$\text{When } v = 0: 0 = -2e^{4x} + 20 \quad \therefore e^{4x} = 10 \quad \therefore x = \frac{\ln 10}{4} = 0.576 \text{ m} \blacklozenge$$

12.116

(a) $\Sigma F = ma: +\downarrow mg - kv = ma \quad \therefore a = g - \frac{k}{m}v$

$v = v_\infty$ when $a = 0. \quad \therefore g - \frac{k}{m}v_\infty = 0$

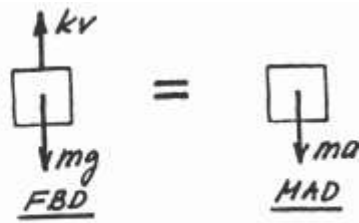
$\therefore k = \frac{mg}{v_\infty} = \frac{(10)(9.81)}{60} = 1.635 \text{ N}\cdot\text{s/m} \quad \blacklozenge$

(b) $a = \frac{dv}{dt} = g - \frac{k}{m}v \quad \therefore \frac{dv}{g - (k/m)v} = dt \quad \therefore -\frac{m}{k} \ln\left(g - \frac{k}{m}v\right) = t + C$

Initial condition: $v = 0$ when $t = 0. \quad \therefore C = -\frac{m}{k} \ln g$

$\therefore t = \frac{m}{k} \ln \frac{g}{g - (k/m)v} = \frac{m}{k} \ln \frac{1}{1 - [k/(mg)]v} = \frac{m}{k} \ln \frac{1}{1 - v/v_\infty}$

When $v = 59 \text{ m/s}: t = \frac{10}{1.635} \ln \frac{1}{1 - (59/60)} = 25.0 \text{ s} \quad \blacklozenge$



12.117

From Eqs. (d) and (e) of Sample Problem 12.11:

$$x = v_0 t \cos \theta = 8t \cos 30^\circ = 6.928t$$

$$y = -\frac{1}{2}gt^2 + v_0 t \sin \theta = -\frac{1}{2}(9.81)t^2 + 8t \sin 30^\circ = -4.905t^2 + 4t$$

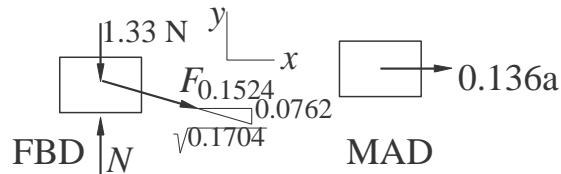
At the landing point

$$y = -x \tan 20^\circ \quad -4.905t^2 + 4t = -6.928t \tan 20^\circ$$

$$4.905t = 6.522 \quad t = 1.330 \text{ s}$$

$$x = 6.928(1.330) = 9.214 \text{ m} \quad d = \frac{9.214}{\cos 20^\circ} = 9.81 \text{ m}$$

12.118



When $x = 0.1524 \text{ m}$ the elongation of the spring and the spring force are

$$\delta = \sqrt{0.0762^2 + 0.1524^2} - 0.0762 = 0.0942 \text{ m} \quad F = k\delta = 875(0.0942) = 82.425 \text{ N}$$

$$\Sigma F_x = ma \quad \frac{0.1524}{0.1704}F = 0.136a \quad \frac{0.1524}{0.1704}(82.425) = 0.136a$$

12.116

$$a = 542 \text{ m/s}^2$$

12.119

$$\begin{aligned}
 x &= b \sin \omega t & \therefore \dot{x} &= b\omega \cos \omega t & \therefore \ddot{x} &= -b\omega^2 \sin \omega t \\
 y &= b \exp(-\omega t/2) & \therefore \dot{y} &= -\frac{1}{2} b\omega \exp(-\omega t/2) & \therefore \ddot{y} &= \frac{1}{4} b\omega^2 \exp(-\omega t/2)
 \end{aligned}$$

(a) At point A $x = 0 \quad \therefore \omega t = 0$

$$\therefore \ddot{x} = 0 \quad \therefore \ddot{y} = \frac{1}{4} b\omega^2 \quad \therefore a = \frac{1}{4} b\omega^2 \uparrow \diamond$$

(b) At point B $x = b \quad \therefore \omega t = \frac{\pi}{2}$

$$\therefore \ddot{x} = -b\omega^2 \quad \therefore \ddot{y} = \frac{1}{4} b\omega^2 \exp(-\pi/4) = 0.11398b\omega^2$$

$$\therefore a = b\omega^2 \sqrt{1^2 + 0.11398^2} = 1.006 b\omega^2 \quad \theta = 6.50^\circ \diamond$$

$$\therefore \theta = \tan^{-1} 0.11398 = 6.50^\circ$$

12.120

When $x = 1.52$ m

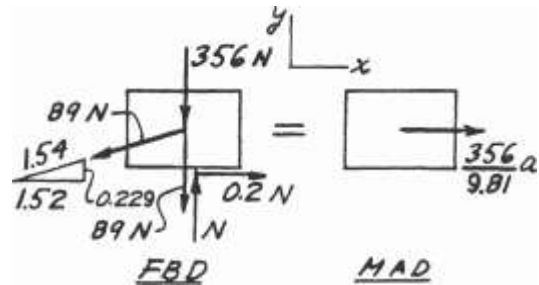
$$\Sigma F_y = 0$$

$$+ \uparrow N - 356 - 89 - \frac{0.229}{1.54}(89) = 0$$

$$N = 458.23 \text{ N}$$

$$\Sigma F_x = ma$$

$$\begin{aligned}
 + \quad 1.52 & \qquad \qquad \qquad 356 \\
 \rightarrow -\frac{0.229}{1.54}(89) + 0.2(458.23) &= \frac{356}{9.81}a \\
 \therefore a &= 0.105 \text{ m/s}^2 \rightarrow
 \end{aligned}$$



12.121

From Eqs. (d) and (e) of Sample Problem 12.11:

$$x = v_0 t \cos \theta_0 \quad y = -\frac{1}{2} g t^2 + v_0 t \sin \theta_0$$

(a) Let $t = t_1$ when the ball hits the fairway at $y = -8$ m, $x = R$.

$$\therefore -8 = -\frac{1}{2}(9.81)t_1^2 + 45t_1 \sin 40^\circ \quad t_1 = 6.162 \text{ s}$$

$$\therefore R = 45(6.162) \cos 40^\circ = 212 \text{ m}$$

(b) At $t = 6.162$ s:

$$v_x = \dot{x} = v_0 \cos \theta_0 = 45 \cos 40^\circ = 34.47 \text{ m/s}$$

$$v_y = \dot{y} = -gt + v_0 \sin \theta_0 = -9.81(6.162) + 45 \sin 40^\circ = -31.52 \text{ m/s}$$

$$v = \sqrt{34.47^2 + 31.52^2} = 46.7 \text{ m/s}$$

12.122

(a) $\Sigma F = ma: +\downarrow mg - kx = ma \quad \therefore a = g - \frac{k}{m}x$

$a = \frac{dv}{dx}v \quad \therefore \int v dv = \int a dx$

$\therefore \frac{1}{2}v^2 = gx - \frac{k}{2m}x^2 + C$

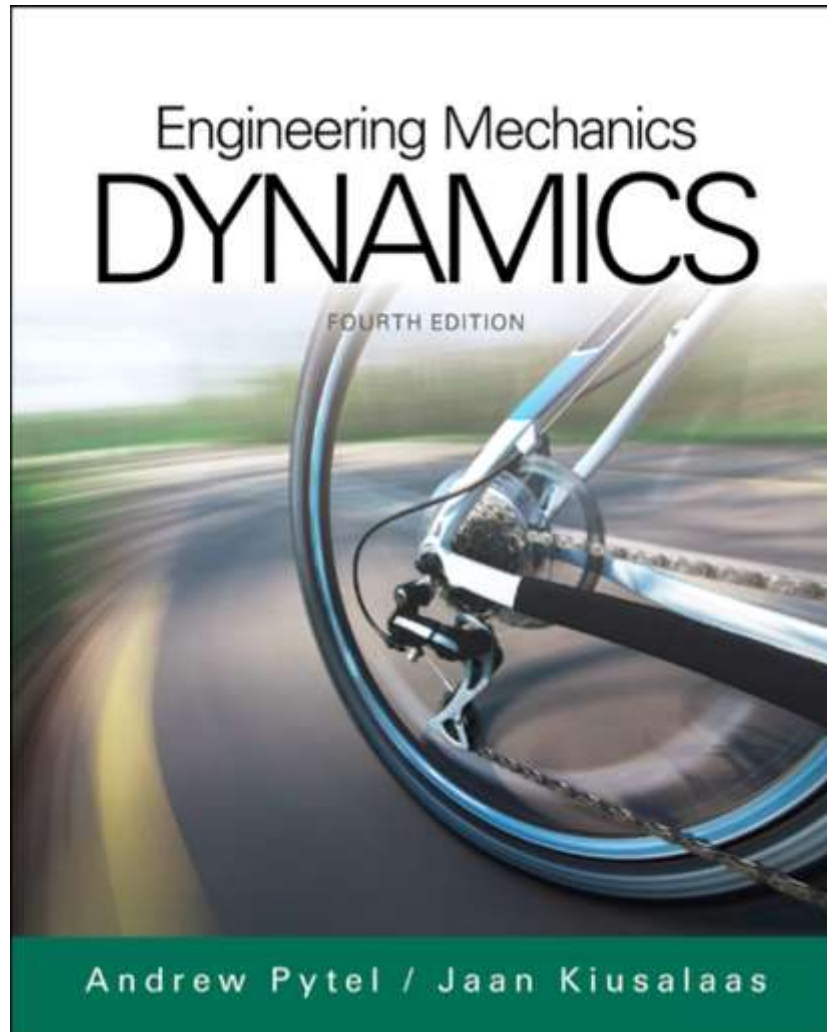
Initial condition: $v = 0$ when $x = 0$. $\therefore C = 0$

Spring force is maximized when x is maximized, i.e. when $v = 0$.

$\therefore gx_{\max} - \frac{k}{2m}x_{\max}^2 = 0 \quad \therefore x_{\max} = \frac{2mg}{k} \quad \therefore F_{\max} = kx_{\max} = 2mg \quad \blacklozenge$

(b) v is maximized when $a = 0$. $\therefore g - \frac{k}{m}x = 0 \quad \therefore x = \frac{mg}{k}$

$\therefore \frac{1}{2}v_{\max}^2 = g\left(\frac{mg}{k}\right) - \frac{k}{2m}\left(\frac{mg}{k}\right)^2 = g^2 \frac{m}{2k} \quad \therefore v_{\max} = g\sqrt{m/k} \quad \blacklozenge$



Chapter 13

Dynamics of a Particle: Curvilinear Coordinates

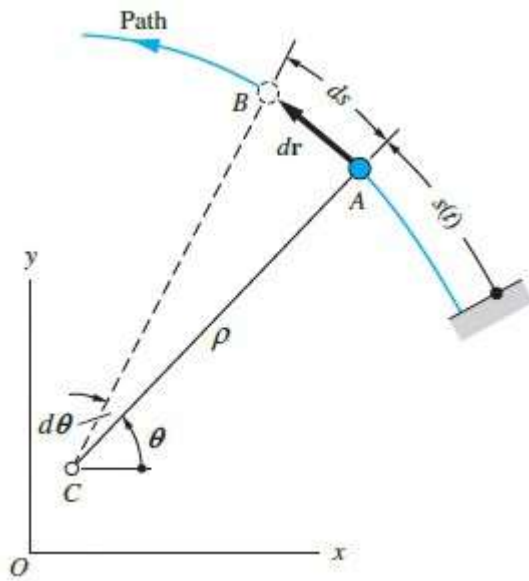
Introduction

- In many cases, non-rectilinear motion is better described by non-Cartesian coordinates.
- Common non-Cartesian coordinates are path (normal-tangential) coordinates and polar (R - θ) coordinates.
- The kinematics of each of these are significantly different from the rectilinear kinematics.
- The kinetics of these coordinate systems are not significantly different v. rectilinear kinetics.

Kinematics of Path (normal-tangential) Coordinates

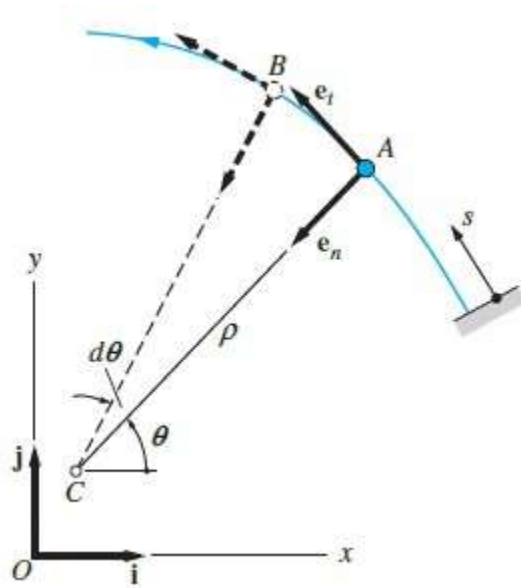
- In many cases, non-rectilinear motion is better described by non-Cartesian coordinates.
- Common ones are path coordinates and polar coordinates.
- The kinematics of each of these are significantly different from the rectilinear kinematics.
- The kinetics of these coordinate systems are not significantly different.

Normal-Tangential Geometry



- The particle orbits a center of curvature, C.
- The distance from C to the particle is the radius of curvature, ρ .
 - ρ^{-1} is the *path* curvature.
- A distance of ds is traced out by movement of ρ by $d\theta$ during dt .
 - $\dot{s} = \rho\dot{\theta}$

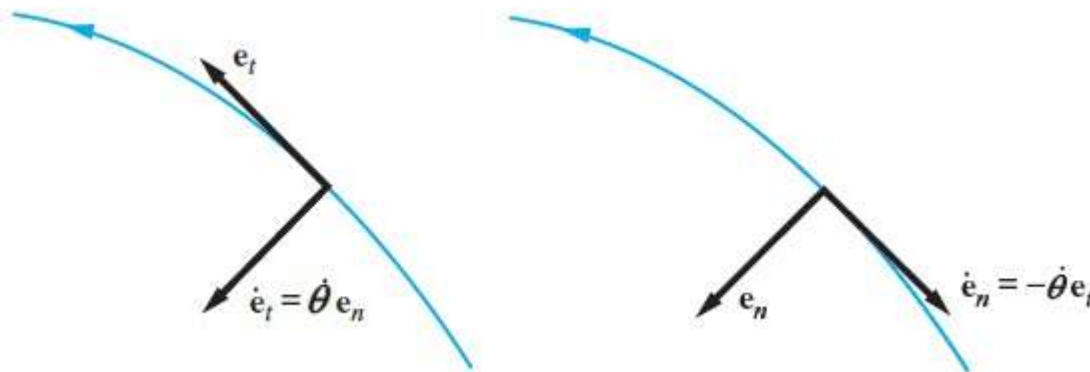
n-t Geometry (Cont.)



- Base vectors \mathbf{e}_t and \mathbf{e}_n – the unit tangent and unit normal
 - \mathbf{e}_t is tangent to the path
 - \mathbf{e}_n is normal to the path and points toward C.
- \mathbf{e}_t and \mathbf{e}_n change instantaneously with the movement of the particle.
- $\mathbf{e}_t = \frac{d\mathbf{r}}{ds}$

Derivatives of Base Vectors

- \mathbf{e}_t and \mathbf{e}_n change with time, so their derivatives are nonzero.
 - $\dot{\mathbf{e}}_t = \dot{\theta} \mathbf{e}_n$
 - $\dot{\mathbf{e}}_n = -\dot{\theta} \mathbf{e}_t$



Velocity (n-t)

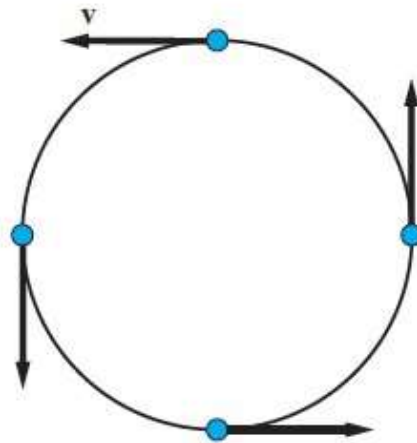
- Velocity is always tangent to the path.
 - $\mathbf{v} = v\mathbf{e}$
 - Velocity is equal to a magnitude (v) and a direction (the unit tangent).
- The magnitude of \mathbf{v} is the speed (\dot{s}).

Acceleration (n-t)

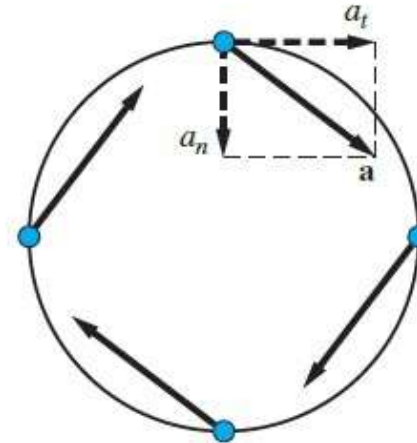
- Acceleration is composed of both a normal and tangential component:
 - $\mathbf{a} = a_t \mathbf{e}_t + a_n \mathbf{e}_n$
- Tangential acceleration (a_t) is caused by a change in speed.
- Normal acceleration (a_n) is caused by a change in direction of the particle velocity.
 - This is also called centripetal acceleration.

Circular Path Motion (n-t)

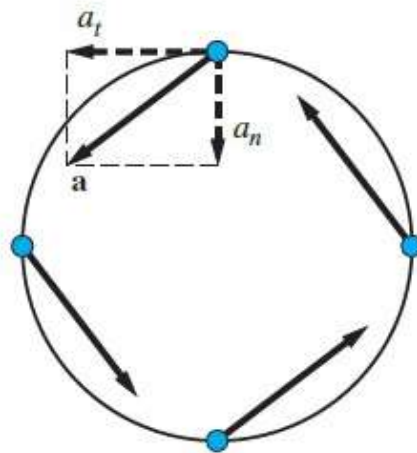
- If the path is a circle of radius R , equations simplify:
 - $v = R\dot{\theta}$
 - $a_n = -\frac{v^2}{R} = R\dot{\theta}^2$
 - $a_t = \dot{v} = R\ddot{\theta}$
- $\dot{\theta}$ is called the *angular velocity*
- $\ddot{\theta}$ is called the *angular rotation*



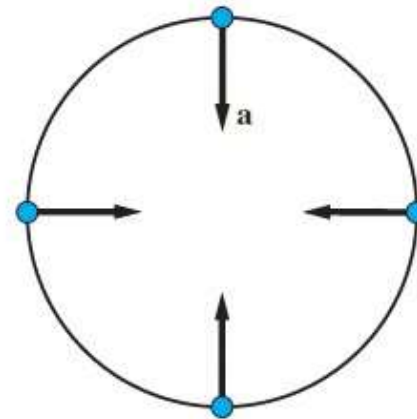
(a) Velocity



(c) Acceleration for decreasing speed



(b) Acceleration for increasing speed

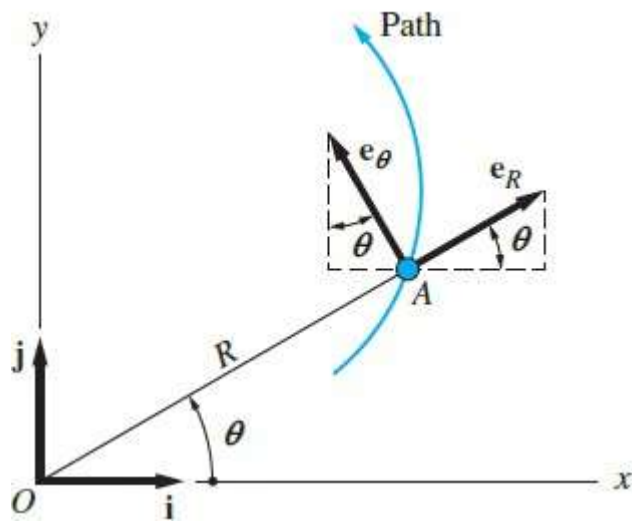


(d) Acceleration for constant speed

Space Motion (n-t)

- An osculating plane is formed by the unit tangent and unit, or principal, normal vectors.
- A third vector, the binormal, is perpendicular to these two.
- Path (normal-tangential) coordinates are complex and not common for 3D motion.

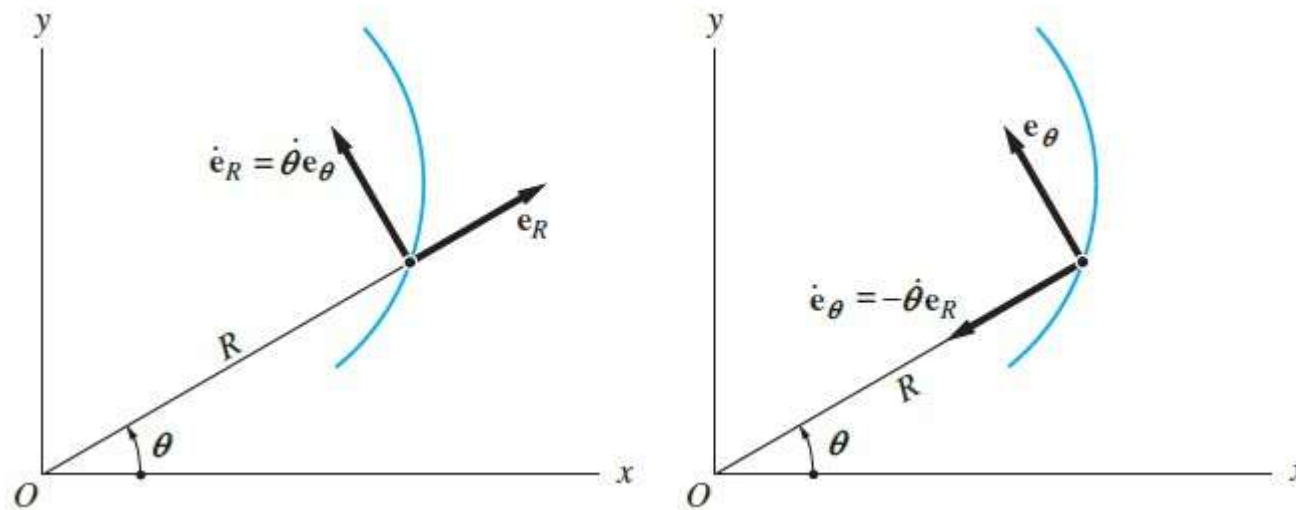
Polar Geometry



- A particle position is specified by (R, θ) .
 - Distance from the origin and angle from x-axis
- Base vectors are \mathbf{e}_R and \mathbf{e}_θ .
 - Also change with time, like \mathbf{e}_t and \mathbf{e}_n

Derivatives of Base Vectors

- \mathbf{e}_R and \mathbf{e}_θ change with time, so their derivatives are nonzero.
 - $\dot{\mathbf{e}}_R = \dot{\theta}\mathbf{e}_\theta$
 - $\dot{\mathbf{e}}_\theta = -\dot{\theta}\mathbf{e}_R$



Polar Velocity

- Velocity vector \mathbf{v} is composed of radial and transverse components.
- $\mathbf{v} = v_R \mathbf{e}_R + v_\theta \mathbf{e}_\theta$
 - $v = \dot{R}$
 - $v = R\dot{\theta}$

Polar Acceleration

- Acceleration vector \mathbf{a} is composed of radial and transverse components:
- $\mathbf{a} = a_R \mathbf{e}_R + a_\theta \mathbf{e}_\theta$
 - $a_R = \ddot{R} - R\dot{\theta}^2$
 - $a_\theta = R\ddot{\theta} + 2\dot{R}\dot{\theta}$
- $\ddot{\theta}$ is the *angular acceleration*.
- If R is constant, $\mathbf{a} = -R\dot{\theta}^2 \mathbf{e}_R + R\ddot{\theta} \mathbf{e}_\theta$

Space Motion

- In three-dimensions, polar coordinates become cylindrical coordinates.
- A third base vector is \mathbf{e}_z , the axial coordinate.
 - $\mathbf{e}_z = \mathbf{k}$
- 3D equations for position, velocity and acceleration are their 2D equations with the $z\mathbf{e}_z$, $\dot{z}\mathbf{e}_z$, $\ddot{z}\mathbf{e}_z$ terms added.

Force-Mass-Acceleration Method

- Step 1: Draw the FBD.
- Step 2: Determine the acceleration of the particle.
- Step 3: Draw the MAD (acceleration found in step 2).
- Step 4: Set the sum of the forces from the FBD equal to the mass-acceleration from the MAD. Solve for the unknown.

Kinematics of FMA Method

- For path (n-t) coordinates, $\sum F_t = ma_t$ and $\sum F_n = ma_n$.
- For cylindrical coordinates, $\sum F_R = ma_R$, $\sum F_\theta = ma_\theta$ and $\sum F_z = ma_z$.
- Steps 3 and 4 of the FMA method are the same as for before.