

Test Bank for Essentials of Biology 4th Edition by Mader Windelspecht ISBN 0078024226 9780078024221

Full link download

Test Bank:

<https://testbankpack.com/p/test-bank-for-essentials-of-biology-4th-edition-by-mader-windelspecht-isbn-0078024226-9780078024221/>

Solution Manual:

<https://testbankpack.com/p/solution-manual-for-essentials-of-biology-4th-edition-by-mader-windelspecht-isbn-0078024226-9780078024221/>

Chapter 02 - The Chemical Basis of Life

Chapter 02 The Chemical Basis of Life

Multiple Choice Questions

1. Which of the following is not one of the most common elements in living things?
- A. carbon
 - B. oxygen
 - C. hydrogen
 - D. iron
 - E. nitrogen

Six elements of matter make up the majority of body weight of most organisms. Their presence and properties are essential to the uniqueness of living things.

Blooms Level: 1. Remember

Gradable: automatic

Learning Outcome: 02.01.01 Distinguish among the types, location, and charge of subatomic particles.

Section: 02.01

Topic: Chemistry

2. Which one of the following is the smallest unit of matter that has all the properties of an element?
- A. molecule
 - B. element
 - C. atom
 - D. compound
 - E. electron

Blooms Level: 1. Remember

Gradable: automatic

Learning Outcome: 02.01.01 Distinguish among the types, location, and charge of subatomic particles.

Section: 02.01

Topic: Chemistry

3. Elements differ from each other in their

- A. physical properties only.
- B. atomic number only.
- C. type of subatomic particles.
- D. physical properties and atomic number.
- E. type of electrons.

Blooms Level: 2. Understand

Gradable: automatic

Learning Outcome: 02.01.01 Distinguish among the types, location, and charge of subatomic particles.

Section: 02.01

Topic: Chemistry

4. Regarding atoms, identify which statement below is correct.

- A. An element may be composed of several types of atoms.
- B. The nucleus of an atom contains protons and electrons.
- C. The number and arrangement of electrons in an atom governs its chemical activity.
- D. The positive charges of an element are carried by the electrons.
- E. The neutral charges of an element are carried by the protons.

Blooms Level: 3. Apply

Gradable: automatic

Learning Outcome: 02.01.01 Distinguish among the types, location, and charge of subatomic particles.

Section: 02.01

Topic: Chemistry

5. Isotopes of an element differ in their

- A. proton number.
- B. electron number.
- C. neutron number.
- D. type of bonds.
- E. atomic number.

Blooms Level: 1. Remember

Gradable: automatic

Learning Outcome: 02.01.01 Distinguish among the types, location, and charge of subatomic particles.

Section: 02.01

Topic: Chemistry

6. An atom's outermost electron shell
- A. is filled when it has three electrons.
 - B. determines its chemical reactivity.
 - C. determines its atomic mass.
 - D. is filled with positively charged particles.
 - E. is filled identically for every element.

Blooms Level: 2. Understand

Gradable: automatic

Learning Outcome: 02.01.02 Relate how the arrangement of electrons determines an element's reactivity.

Section: 02.01

Topic: Chemistry

7. An atom that has an electrical charge is called a(n)
- A. ion.
 - B. molecule.
 - C. isotope.
 - D. element.
 - E. proton.

Blooms Level: 1. Remember

Gradable: automatic

Learning Outcome: 02.01.01 Distinguish among the types, location, and charge of subatomic particles.

Section: 02.01

Topic: Chemistry

8. A covalent bond occurs when
- A. protons are transferred from one atom to another.
 - B. neutrons are shared between two atoms to form an isotope.
 - C. electrons are shared between two atoms to complete their octets.
 - D. the hydrogen of one water molecule is attracted to the oxygen of another water molecule.
 - E. electrons are transferred from one atom to another.

Blooms Level: 2. Understand

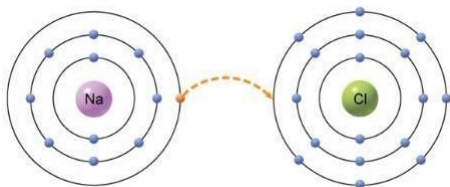
Gradable: automatic

Learning Outcome: 02.01.04 Contrast ionic and covalent bonds.

Section: 02.01

Topic: Chemistry

9. The type of bond that would form from the transfer of an electron from one atom to another, as depicted in the figure, is a



- A.** covalent.
- B.** ionic.
- C.** hydrogen.
- D.** atomic.
- E.** isotope.

Blooms Level: 2. Understand

Figure: 02.07a

Gradable: automatic

Learning Outcome: 02.01.04 Contrast ionic and covalent bonds.

Section: 02.01

Topic: Chemistry

10. Which of these does not occur when a sodium atom transfers an electron to a chlorine atom?

- A.** The sodium atom becomes a positively charged ion.
- B.** The positive and negative ions will attract each other, forming a crystal if no water is present.
- C.** The ions will separate in the presence of water.
- D.** There is a sharing of the electrons between the sodium and chlorine atoms.
- E.** The chlorine atom becomes a negatively charged ion.

Blooms Level: 3. Apply

Gradable: automatic

Learning Outcome: 02.01.04 Contrast ionic and covalent bonds.

Section: 02.01

Topic: Chemistry

Chapter 02 - The Chemical Basis of Life

11. Which of the following is NOT a compound?

- A. H₂O
- B. O₂
- C. NaCl
- D. CO₂
- E. MgCl₂

Blooms Level: 3. Apply

Gradable: automatic

Learning Outcome: 02.01.05 Identify the reactants and products in a chemical equation.

Section: 02.01

Topic: Chemistry

12. Glucose, C₆H₁₂O₆, is best described as a(n)

- A. element.
- B. isotope.
- C. compound.
- D. ion.
- E. charged atom.

Blooms Level: 2. Understand

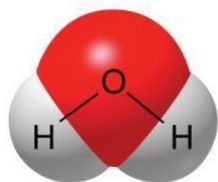
Gradable: automatic

Learning Outcome: 02.01.05 Identify the reactants and products in a chemical equation.

Section: 02.01

Topic: Chemistry

13. A water molecule, as shown here, is polar because of



- A.** transfer of electrons.
- B.** unequal sharing of electrons.
- C.** its ability to freeze.
- D.** its hydrogen bonds.
- E.** its change in density when frozen.

Blooms Level: 2. Understand

Figure: 02.09a

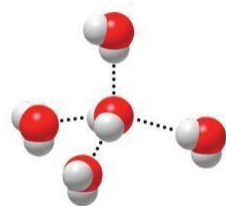
Gradable: automatic

Learning Outcome: 02.02.01 Describe the general structure of a water molecule.

Section: 02.02

Topic: Chemistry

14. The figure below is depicting the interaction of water molecules with one another, which involves the use of



- A.** covalent bonds.
- B.** hydrogen bonds.
- C.** ionic bonds.
- D.** valence shells.
- E.** solvents.

Blooms Level: 2. Understand

Figure: 02.09b

Gradable: automatic

Learning Outcome: 02.02.01 Describe the general structure of a water molecule.

Section: 02.02

Topic: Chemistry

15. Which of the following is NOT a property of water?

- A. It is a good solvent.
- B. It is denser when frozen than when liquid.
- C. It is cohesive.
- D. It resists temperature changes.
- E. It can be found as a solid, liquid, or gas.

Blooms Level: 1. Remember

Gradable: automatic

Learning Outcome: 02.02.02 List the properties of water that are important to life.

Section: 02.02

Topic: Chemistry

16. Bases can

- A. release only hydrogen ions.
- B. take up only hydrogen ions.
- C. release only hydroxide ions.
- D. both take up hydrogen ions and release hydroxide ions.
- E. release hydrogen and release hydroxide.

Blooms Level: 2. Understand

Gradable: automatic

Learning Outcome: 02.03.01 Distinguish between an acid and a base.

Section: 02.03

Topic: Chemistry

17. The pH scale is a mathematical indicator of

- A. the concentration of H^+ present in a solution.
- B. the concentration of OH^- present in a solution.
- C. the total amount of all ions in a solution.
- D. the ability of a solution to buffer.
- E. the ability to dissolve in water.

Blooms Level: 2. Understand

Gradable: automatic

Learning Outcome: 02.03.02 Interpret the pH scale.

Section: 02.03

Topic: Chemistry

18. After drinking a great deal of coffee (pH 5), a human's blood buffering system would need to _____ as the coffee was digested to lower the level of acid present in the blood stream.

- A. release OH^-
- B. take up H^+
- C. release H^+
- D. take up OH^-
- E. release OH^- and take up H^+

Blooms Level: 3. Apply

Gradable: automatic

Learning Outcome: 02.03.03 Explain the purpose of a buffer.

Section: 02.03

Topic: Chemistry

19. The term to describe any substance, which can prevent the pH of a solution from changing by either releasing or absorbing H^+ in a solution is

- A. equalizer.
- B. solute. **C.**
- buffer. D.
- acid.
- E. base.

Blooms Level: 1. Remember

Gradable: automatic

Learning Outcome: 02.03.03 Explain the purpose of a buffer.

Section: 02.03

Topic: Chemistry

20. Which of the following would be an example of the value of water's heat capacity? A. Water is able to travel up a 100 foot tree.
B. Water expands as it freezes causing ice to float on the surface of a lake.
C. Living organisms are better able to maintain their internal body temperature because the temperature of their environment changes very slowly.
D. Small insects can walk on water.
E. Ice cubes float.

Blooms Level: 4. Analyze

Gradable: automatic

Learning Outcome: 02.02.02 List the properties of water that are important to life.

Section: 02.02

Topic: Chemistry

21. What property of water causes sugar to dissolve in coffee?
A. Water has high heat capacity.
B. Water is less dense as ice.
C. Water is a good solvent.
D. Water is cohesive.
E. Water is able to change states.

Blooms Level: 3. Apply

Gradable: automatic

Learning Outcome: 02.02.02 List the properties of water that are important to life.

Section: 02.02

Topic: Chemistry

22. Which of the following explains the events occurring when water boils?
A. Hydrogen bonds are broken between neighbor water molecules.
B. Covalent bonds are broken between oxygen and hydrogen atoms.
C. Ionic bonds are broken when the minerals in water are heated.
D. The bond between one water molecule and another is strengthened.
E. The hydrogen atoms break away from the oxygen and escape as vapor.

Blooms Level: 5. Evaluate

Gradable: automatic

Learning Outcome: 02.02.03 Understand the importance of hydrogen bonds to the properties of water.

Section: 02.02

Topic: Chemistry

23. What is the steam being given off when water boils?

- A.** oxygen molecules
- B.** hydrogen molecules
- C.** water molecules
- D.** hydroxide (OH⁻) ions
- E.** hydrogen (H⁺) ion

Blooms Level: 5. Evaluate

Gradable: automatic

Learning Outcome: 02.02.01 Describe the general structure of a water molecule.

Section: 02.02

Topic: Chemistry

24. Which property of water would help to account for how an individual who is exercising and producing excessive heat can maintain a constant body temperature?

- A.** Water has high heat capacity.
- B.** Water is less dense as ice.
- C.** Water is a good solvent.
- D.** Water is cohesive.
- E.** Water molecules form by covalent bonding.

Blooms Level: 5. Evaluate

Gradable: automatic

Learning Outcome: 02.02.02 List the properties of water that are important to life.

Section: 02.02

Topic: Chemistry

25. If average temperatures from South Dakota were compared to temperatures from Oregon it would show that Oregon has warmer winters and cooler summers than South Dakota does. What accounts for why this is when they are at similar latitudes?

- A.** South Dakota has fewer trees.
- B.** The Pacific ocean makes Oregon temperatures more moderate.
- C.** Oregon receives more rainfall.
- D.** South Dakota has fewer lakes and rivers.
- E.** South Dakota has more prevailing winds from the west.

Blooms Level: 4. Analyze

Gradable: automatic

Learning Outcome: 02.02.02 List the properties of water that are important to life.

Section: 02.02

Topic: Chemistry

26. How do a strong acid and a weak acid differ?

- A. A strong acid has less H^+ in solution.
- B. A weak acid dissociates only partially in water.
- C. A strong acid is less likely to remain dissociated.
- D. A weak acid dissociates nearly completely in water.
- E. A strong acid dissociates only partly in water.

Blooms Level: 2. Understand

Gradable: automatic

Learning Outcome: 02.03.01 Distinguish between an acid and a base.

Section: 02.03

Topic: Chemistry

27. Baking soda is sometimes used as an antacid. The chemical name for baking soda is Sodium Bicarbonate. What is the bicarbonate doing to help with stomach upset?

- A. It is serving as a buffer to take up excess H^+ ion from stomach acid.
- B. It is able to coat the stomach lining.
- C. The bicarbonate helps to create more acid in the stomach.
- D. The bicarbonate acts as a strong acid quickly dissociating into H^+ ion.
- E. It relaxes the stomach muscles.

Blooms Level: 5. Evaluate

Gradable: automatic

Learning Outcome: 02.03.03 Explain the purpose of a buffer.

Section: 02.03

Topic: Chemistry

28. Which of the following is not a contributing event in the formation of acid rain?

- A. Fossil fuels consume oxygen removing it from the atmosphere.
- B. Coal & oil emit sulfur dioxide and nitrogen oxide when they are burned.
- C. Fossil fuel emission gases combine with water in the atmosphere.
- D. A solution of sulfuric acid and nitric acid forms.
- E. Precipitation containing sulfuric acid and nitric acid fall to the Earth.

Blooms Level: 2. Understand

Gradable: automatic

Learning Outcome: 02.03.01 Distinguish between an acid and a base.

Section: 02.03

Topic: Chemistry

29. What do lemons, tomatoes, and coffee all have in common chemically? **A.** They are all foods that people consume.

B. They all produce (H^+) in solution, making them acids. **C.** They all are fruits.

D. They all taste bitter.

E. They are all slippery to the touch.

Blooms Level: 3. Apply

Gradable: automatic

Learning Outcome: 02.03.01 Distinguish between an acid and a base.

Section: 02.03

Topic: Chemistry

30. Of the following examples which best demonstrates the property of water cohesion? **A.** Water can move up a 100 foot pine tree from the roots to the leaves.

B. A rock skipping across the surface of a lake.

C. Water requires a great deal of heat to reach the point of vaporizing.

D. A soda can bursts when it is placed in the freezer.

E. A large body of fresh water takes a long time to warm up after the winter season.

Blooms Level: 4. Analyze

Gradable: automatic

Learning Outcome: 02.02.02 List the properties of water that are important to life.

Section: 02.02

Topic: Chemistry

31. When hot chocolate mix is added to water the hot chocolate is the _____ and the water is the _____.

A. solvent; solute

B. molecule; compound

C. solute; solvent

D. compound; molecule

E. element; compound

Blooms Level: 2. Understand

Gradable: automatic

Learning Outcome: 02.02.02 List the properties of water that are important to life.

Section: 02.02

Topic: Chemistry

32. A coke has a pH of 3.5. This means that it has an excess of _____ ions and would be called a(n) _____.

- A. H^+ ; acid
- B. OH^- ; acid
- C. H^+ ; base
- D. OH^- ; base
- E. H^+ ; neutral solution

Blooms Level: 2. Understand

Gradable: automatic

Learning Outcome: 02.03.02 Interpret the pH scale.

Section: 02.03

Topic: Chemistry

33. Isotopes of an atom differ in their

- A. atomic number.
- B. atomic mass.
- C. number of electrons.
- D. atomic radius.
- E. number of protons.

Blooms Level: 2. Understand

Gradable: automatic

Learning Outcome: 02.01.03 Explain how isotopes are useful in the study of biology.

Section: 02.01

Topic: Chemistry

34. Which of the following is a property of acids?

- A. release hydrogen ions when dissolved in a liquid
- B. feel slippery when touched
- C. taste bitter
- D. release hydroxide ions when dissolved in a liquid
- E. have a pH reading above 7.0

Blooms Level: 2. Understand

Gradable: automatic

Learning Outcome: 02.03.01 Distinguish between an acid and a base.

Section: 02.03

Topic: Chemistry

Matching Questions

35. Use the following terms to match the statements provided.

- | | |
|---|-------------------------------------|
| 1. Their number in an atom is the atomic number of the element | Ion <u>2</u> |
| 2. Created when an atom either loses or gains electrons in a reaction, resulting in an overall net charge | Atom <u>4</u> |
| 3. Their number and arrangement determine which chemical reactions an element can take part in | Electron <u>3</u> |
| 4. The smallest particle of an element that retains the properties of that element | Proton <u>1</u>
Neutron <u>5</u> |
| 5. Their numbers will vary in isotopes of the same element | <u>5</u> |

Blooms Level: 2. Understand

Gradable: automatic

Learning Outcome: 02.01.01 Distinguish among the types, location, and charge of subatomic particles.

Section: 02.01

Topic: Chemistry

Multiple Choice Questions

36. An element has an atomic number of 78. The number of protons and electrons in a neutral atom of the element are

- A. 156 protons and 78 electrons.
- B. 39 protons and 39 electrons.
- C. 78 protons and 0 electrons. **D.**
- E. 78 protons and 78 electrons.
- F. 78 protons and 39 electrons.

Blooms Level: 2. Understand

Gradable: automatic

Learning Outcome: 02.01.01 Distinguish among the types, location, and charge of subatomic particles.

Section: 02.01

Topic: Chemistry

37. All atoms of the same element have the same

- A. number of neutrons.
- B. atomic number.
- C. number of electrons.
- D. atomic mass.
- E. number of ions.

Blooms Level: 1. Remember

Gradable: automatic

Learning Outcome: 02.01.01 Distinguish among the types, location, and charge of subatomic particles.

Section: 02.01

Topic: Chemistry

38. In what ways are radioactive isotopes potentially harmful?

- A. Unmonitored release into the environment can make changes in a cell's DNA.
- B. They are used to trace molecular changes.
- C. They are used to destroy abnormal cells.
- D. They are used to determine the age of biological specimens.
- E. They are used to trace the path of materials throughout the body.

Blooms Level: 2. Understand

Gradable: automatic

Learning Outcome: 02.01.03 Explain how isotopes are useful in the study of biology.

Section: 02.01

Topic: Chemistry

39. The number of neutrons in the nucleus of an average atom of an element is best estimated by

- A. adding the number of electrons and protons together.
- B. subtracting the number of electrons from the number of protons.
- C. adding the mass number to the number of electrons.
- D. subtracting the number of protons from the mass number.
- E. adding the atomic number and atomic mass together.

Blooms Level: 1. Remember

Gradable: automatic

Learning Outcome: 02.01.01 Distinguish among the types, location, and charge of subatomic particles.

Section: 02.01

Topic: Chemistry

40. Students were studying properties of water. One student placed a cup containing 80 mL of water in a freezer. Another student placed an identical cup containing 40 mL of water in the same freezer. Which of the following will be the same for both cups of water?

- A. the temperature at which the water freezes
- B. the mass of the frozen water
- C. the time it takes the water to freeze
- D. the volume of the frozen water
- E. the space it occupies in the cups

Blooms Level: 5. Evaluate

Gradable: automatic

Learning Outcome: 02.02.02 List the properties of water that are important to life.

Section: 02.02

Topic: Chemistry

41. Engineers design city sidewalks using blocks of concrete separated by a small gap to prevent them from cracking. What property of water is being taken into account for this design? Water

- A. is a good solvent.
- B. is less dense when it is frozen.
- C. is cohesive.
- D. is resistant to temperature changes.
- E. has a high heat capacity.

Blooms Level: 3. Apply

Gradable: automatic

Learning Outcome: 02.02.02 List the properties of water that are important to life.

Section: 02.02

Topic: Chemistry

42. An atom with a neutral charge has
- A. equal numbers of neutrons and electrons.
 - B. more neutrons making it more neutral.
 - C. the same number of protons and neutrons.
 - D. equal numbers of protons and electrons.
 - E. more protons than it does electrons.

Blooms Level: 1. Remember

Gradable: automatic

Learning Outcome: 02.01.01 Distinguish among the types, location, and charge of subatomic particles.

Section: 02.01

Topic: Chemistry

43. The atomic structure of water satisfies the octet rule by
- A. having electrons shared between the two oxygen atoms.
 - B. having electrons from hydrogen transferred to the oxygen atom.
 - C. having electrons from oxygen transferred to the hydrogen atoms.
 - D. having oxygen share electrons with two hydrogen atoms.
 - E. having electrons shared between the two hydrogen atoms.

Blooms Level: 3. Apply

Gradable: automatic

Learning Outcome: 02.01.02 Relate how the arrangement of electrons determines an element's reactivity.

Section: 02.01

Topic: Chemistry

44. Which of the following would not be a valuable use for radioactive isotopes?
- A. carbon-14 dating
 - B. destroying abnormal cells as a type of cancer treatment
 - C. tracing the path of various chemicals in the body for imaging
 - D. determining the age of biological specimens
 - E. damaging DNA of healthy cells.

Blooms Level: 2. Understand

Gradable: automatic

Learning Outcome: 02.01.03 Explain how isotopes are useful in the study of biology.

Section: 02.01

Topic: Chemistry

45. In the reaction $6\text{CO}_2 + 6\text{H}_2\text{O} \rightarrow \text{C}_6\text{H}_{12}\text{O}_6 + 6\text{O}_2$ carbon dioxide is one of the **A.** reactants.
- B. products.
 - C. enzymes.
 - D. elements.
 - E. catalysts.

Blooms Level: 2. Understand

Gradable: automatic

Learning Outcome: 02.01.05 Identify the reactants and products in a chemical equation.

Section: 02.01

Topic: Chemistry

46. Why do cells need buffering agents?
- A.** to minimize the changes in pH of their internal environment
 - B.** to operate at a constant pH of 2.0
 - C.** to carry out life functions in extremely acidic conditions
 - D.** to help transfer electrons from one atom to another
 - E.** to increase the amount of OH^- in their surroundings

Blooms Level: 2. Understand

Gradable: automatic

Learning Outcome: 02.03.03 Explain the purpose of a buffer.

Section: 02.03

Topic: Chemistry

47. Which of the following is not a way in which chemical bonds can be formed?
- A.** sharing electrons
 - B.** losing electrons
 - C.** splitting electrons
 - D.** gaining electrons
 - E.** attractions of opposite charge

Blooms Level: 4. Analyze

Gradable: automatic

Learning Outcome: 02.01.04 Contrast ionic and covalent bonds.

Section: 02.01

Topic: Chemistry

48. Sulfur has an atomic number of 16. What would be the valence number of this element?**1_01_2012**

- A. One
- B. Two
- C. Three
- D. Four
- E. Six

Blooms Level: 4. Analyze

Gradable: automatic

Learning Outcome: 02.01.02 Relate how the arrangement of electrons determines an element's reactivity.

Section: 02.01

Topic: Chemistry

49. Some insects can stride on the surface of water because water

- A. has a high specific heat.
- B. has lower density when frozen.
- C. is a good solvent.
- D. has surface tension.
- E. resists temperature changes.

Blooms Level: 2. Understand

Gradable: automatic

Learning Outcome: 02.02.02 List the properties of water that are important to life.

Section: 02.02

Topic: Chemistry

50. The pH of pure water is _____ because _____.

- A.** 7.0; water dissociates an equal number of H^+ ions and OH^-
- B.** 14.0; water dissociates and more OH^- is formed because there are more hydrogen atoms in water
- C.** 1.0; water dissociates and more H^+ is formed since hydrogen is smaller and can separate from the oxygen easily
- D.** 7.0; there are no ions formed in pure water
- E.** acidic; there are more H^+ ions than OH^- ions present

Blooms Level: 2. Understand

Gradable: automatic

Learning Outcome: 02.03.02 Interpret the pH scale.

Section: 02.03

Topic: Chemistry

51. Which of the following best describes the structure of how water molecules form and interact?

- A. Hydrogen atoms bond with each other to create stable outer shell of electrons. Then they form a hydrogen bond to an oxygen atom to create the water molecule.
- B. Oxygen atoms transfer one electron to each of the hydrogen atoms forming an ionic bond that attracts other water molecules to it.
- C. The oxygen atom and hydrogen atoms form a covalent bond with one another to create stable outer shells of electrons. The electrons are shared unequally resulting in a polar molecule whose slight charges form weak hydrogen bond attractions with other water molecules.
- D. Hydrogen bonds are formed between the two hydrogen atoms and the oxygen atom. This water molecule then forms a covalent bond with adjacent water molecules.
- E. The oxygen atom is more electronegative than the two hydrogen atoms. Due to this, it removes the electron from each hydrogen atom. This satisfies the outer shell of oxygen. Then hydrogen bonds form between the two remaining hydrogen atoms to hold them near to the oxygen atom.

Blooms Level: 5. Evaluate

Gradable: automatic

Learning Outcome: 02.02.01 Describe the general structure of a water molecule.

Section: 02.02

Topic: Chemistry

52. The particles that are found in the nucleus of an atom are the **A.** protons and electrons.

B. neutrons and protons.

C. electrons only.

D. protons only.

E. electrons and neutrons.

Blooms Level: 1. Remember

Gradable: automatic

Learning Outcome: 02.01.01 Distinguish among the types, location, and charge of subatomic particles.

Section: 02.01

Topic: Chemistry

53. Which of these is a property of isotopes that make it useful in cell biology?

- A. they never breakdown
- B. they behave the same chemically
- C. they behave differently chemically
- D. the molecules they are part of break down more easily
- E. the molecules they are part of are more stable

Blooms Level: 4. Analyze

Gradable: automatic

Learning Outcome: 02.01.03 Explain how isotopes are useful in the study of biology.

Section: 02.01

Topic: Chemistry

54. Radioactive isotopes are useful in biological studies because

- A. an organism will take in a molecule with the isotope and use it normally but the radioactive decay can be detected.
- B. an organism will take in a molecule with the isotope but will only use it in a few specific reactions not the normal ones.
- C. an organism will take in the molecule with the isotope and then remove the isotope and send it through the excretory system while replacing the isotope with a normal atom.
- D. they are easily visible and normal atoms are not.
- E. they are easy and inexpensive to use in studies.

Blooms Level: 4. Analyze

Gradable: automatic

Learning Outcome: 02.01.03 Explain how isotopes are useful in the study of biology.

Section: 02.01

Topic: Chemistry

55. The reactivity of an atom depends on

- A. the number of protons.
- B. the number of neutrons.
- C. the number of electrons.
- D. the number of valence electrons.
- E. the number of protons and neutrons in the nucleus.

Blooms Level: 2. Understand

Gradable: automatic

Learning Outcome: 02.01.02 Relate how the arrangement of electrons determines an element's reactivity.

Section: 02.01

Topic: Chemistry

56. Chemical bonds involve

- A. the giving and taking of electrons.
- B. the giving and taking of protons.
- C. the giving, taking or sharing of electrons.
- D. the giving, taking or sharing of protons.
- E. the sharing of electrons.

Blooms Level: 2. Understand

Gradable: automatic

Learning Outcome: 02.01.02 Relate how the arrangement of electrons determines an element's reactivity.

Section: 02.01

Topic: Chemistry

57. The electron arrangement for argon, which has 18 electrons, is

- A. 2 in the inner energy shell, 8 in the second energy shell and 8 in the outer energy shell
- B. 8 in the inner energy shell, 8 in the second energy shell and 2 in the outer energy shell
- C. 6 in the inner energy shell, 6 in the second energy shell and 6 in the outer energy shell
- D. 5 in the inner energy shell, 6 in the second energy shell and 7 in the outer energy shell
- E. 7 in the inner energy shell, 6 in the second energy shell and 5 in the outer energy shell

Blooms Level: 3. Apply

Gradable: automatic

Learning Outcome: 02.01.02 Relate how the arrangement of electrons determines an element's reactivity.

Section: 02.01

Topic: Chemistry

58. Inside a living cell, which type of bond would be the most stable?

- A. hydrogen
- B. ionic
- C. covalent
- D. polar
- E. all bonds are equally stable in a living system

Blooms Level: 5. Evaluate

Gradable: automatic

Learning Outcome: 02.01.04 Contrast ionic and covalent bonds.

Section: 02.01

Topic: Chemistry

59. An ionic bond forms when

- A. an atom gives away or takes in an electron.
- B. an atom gives away or takes in a proton.
- C. a negatively charged ion is attracted to one with a positive charge.
- D. two atoms come close enough to share one or more electrons.
- E. two atoms come close enough to share one or more protons.

Blooms Level: 3. Apply

Gradable: automatic

Learning Outcome: 02.01.04 Contrast ionic and covalent bonds.

Section: 02.01

Topic: Chemistry

60. A covalent bond involves the sharing of

- A. electrons.
- B. protons.
- C. pairs of protons. D.
- at least 3 electrons. E.
- pairs of electrons.

Blooms Level: 3. Apply

Gradable: automatic

Learning Outcome: 02.01.04 Contrast ionic and covalent bonds.

Section: 02.01

Topic: Chemistry

61. Which of the following describe how an acid disrupts the chemical bonds of molecules in a cell?

A. the H^+ ions can disrupt hydrogen bonds as the slightly negative portion of the molecule is more attracted to it than to the hydrogen that was part of the bond.

B. the H^+ ions can disrupt hydrogen bonds as the slightly positive portion of the molecule is more attracted to it than to the hydrogen that was part of the bond.

C. the OH^- ions can disrupt hydrogen bonds as the slightly positive portion of the molecule is more attracted to it than to the hydrogen that was part of the bond.

D. the OH^- ions can disrupt hydrogen bonds as the slightly negative portion of the molecule is more attracted to it than to the hydrogen that was part of the bond.

E. The H^+ ions disrupt the covalent bonds that hold the molecule together.

Blooms Level: 5. Evaluate

Gradable: automatic

Learning Outcome: 02.03.01 Distinguish between an acid and a base.

Section: 02.03

Topic: Chemistry

62. You are caring for the freshwater aquarium of a friend while they are on vacation. You are told to check the pH of the tank and make sure that it stays between 6.5 and 7.0. When you check the water the pH is 8.0. The water in the tank is

A. 1 to 1.5 times more basic than it should be. **B.**

1 to 1.5 times more acidic than it should be. **C.**

10 to 15 times more basic than it should be. **D.**

10 to 15 times more acidic than it should be.

E. 100 to 150 times more basic than it should be.

Blooms Level: 5. Evaluate

Gradable: automatic

Learning Outcome: 02.03.02 Interpret the pH scale.

Section: 02.03

Topic: Chemistry

63. You are caring for the freshwater aquarium of a friend while they are on vacation. You are told to check the pH of the tank and make sure that it stays between 6.5 and 7.0. In order to ensure that you do not have to worry about the pH you

- A. treat the fish and the tank with aspirin.
- B. add NaOH so that changes in the tank are calculated.
- C. add HCl so that you can track the changes in the tank's pH.
- D. do nothing since the pH will not change unless you do something wrong and you plan to follow the directions exactly.
- E. add a buffer so changes in pH are minimized.

Blooms Level: 5. Evaluate

Gradable: automatic

Learning Outcome: 02.03.03 Explain the purpose of a buffer.

Section: 02.03

Topic: Chemistry

64. Which of the following is not a property of water that results from hydrogen bonding?

- A. Ice melts at -100 C.
- B. The temperature of water changes very slowly.
- C. Many polar substances dissolve in water.
- D. Water molecules have cohesiveness.
- E. Water has a high surface tension.

Blooms Level: 1. Remember

Gradable: automatic

Learning Outcome: 02.02.03 Understand the importance of hydrogen bonds to the properties of water.

Section: 02.02

Topic: Chemistry