

Chapter 02 Test Bank KEY

Test Bank for Introductory Chemistry An Atoms First Approach 1st Edition Burdge Driessen 0073402702 9780073402703

Full link download

Test Bank:

<https://testbankpack.com/p/test-bank-for-introductory-chemistry-an-atoms-first-approach-1st-edition-burdge-driessen-0073402702-9780073402703/>

Solution Manual:

<https://testbankpack.com/p/solution-manual-for-introductory-chemistry-an-atoms-first-approach-1st-edition-burdge-driessen-0073402702-9780073402703/>

- 1.
2. Visible light, radio waves, microwave radiation, infrared, ultraviolet radiation, X-rays, and gamma rays all constitute the electromagnetic spectrum. Which of the following characteristics do all of these kinds of radiation share?
 - A. They all have the ability to generate heat in objects.
 - B. They all have the same frequencies.
 - C. They are all the transmission of energy in the form of waves.
 - D. They have equal energies.
 - E. They have the same electron spin state.

Accessibility: Keyboard Navigation
Bloom's Level: 3. Apply
Difficulty: Medium
Gradable: automatic
Subtopic: Electromagnetic Radiation (Wave Properties)
Topic: Quantum Theory and Atomic Structure

3. Select the arrangement of electromagnetic radiation which starts with the shortest wavelength and increases to longest wavelength.
 - A. radio, infrared, ultraviolet, gamma rays
 - B. radio, ultraviolet, infrared, gamma rays
 - C. gamma rays, radio, ultraviolet, infrared
 - D. gamma rays, infrared, radio, ultraviolet
 - E. gamma rays, ultraviolet, infrared, radio

Accessibility: Keyboard Navigation
Bloom's Level: 5. Evaluate
Difficulty: Hard
Gradable: automatic
Subtopic: Electromagnetic Radiation (Wave Properties)
Subtopic: Measurement (SI Units)
Subtopic: Scientific Notation and Significant Figures
Topic: Quantum Theory and Atomic Structure

4. Select the arrangement of electromagnetic radiation which starts with the lowest energy and increases to the greatest energy.
 - A. radio, infrared, ultraviolet, gamma rays
 - B. radio, ultraviolet, infrared, gamma rays
 - C. gamma rays, infrared, radio, ultraviolet
 - D. gamma rays, ultraviolet, infrared, radio
 - E. infrared, ultraviolet, radio, gamma rays

Accessibility: Keyboard Navigation
Bloom's Level: 5. Evaluate

5. What is the emission of light at only specific wavelengths?

- A. Emission spectra
- B. Hydrogen spectrum
- C. Wave spectra
- D. Limited spectra
- E. Line spectra

Accessibility: Keyboard Navigation
Bloom's Level: 2. Understand
Difficulty: Easy
Gradable: automatic
Subtopic: Atomic Spectra (Bohr Model of the Atom)
Subtopic: Electromagnetic Radiation (Wave Properties)
Subtopic: Measurement (SI Units)
Subtopic: Scientific Notation and Significant Figures
Topic: Quantum Theory and Atomic Structure

6. List the following types of radiation from lowest frequency to highest frequency: microwave, X ray, ultraviolet, visible, and infrared

- A. microwave < infrared < visible < ultraviolet < X ray
- B. X ray < ultraviolet < visible < infrared < microwave
- C. visible < ultraviolet < microwave < X ray < infrared
- D. infrared < X ray < microwave < ultraviolet < visible
- E. infrared < visible < microwave < ultraviolet < X ray

Accessibility: Keyboard Navigation
Bloom's Level: 5. Evaluate
Difficulty: Easy
Gradable: automatic
Subtopic: Electromagnetic Radiation (Wave Properties)
Topic: Quantum Theory and Atomic Structure

7. Which of the following electron transitions would be expected to emit any light in the Bohr model of the atom?

- A. $n = 1$ to $n = 3$
- B. $n = 5$ to $n = 6$
- C. $n = 2$ to $n = 5$
- D. $n = 4$ to $n = 3$

Accessibility: Keyboard Navigation
Bloom's Level: 2. Understand
Difficulty: Easy
Gradable: automatic
Subtopic: Atomic Spectra (Bohr Model of the Atom)
Topic: Quantum Theory and Atomic Structure

8. Which of the following electron transitions would be expected to emit any light in the Bohr model of the atom?

- A. $n = 1$ to $n = 4$
- B. $n = 3$ to $n = 1$
- C. $n = 2$ to $n = 3$
- D. $n = 5$ to $n = 7$

Accessibility: Keyboard Navigation
Bloom's Level: 2. Understand
Difficulty: Easy
Gradable: automatic
Subtopic: Atomic Spectra (Bohr Model of the Atom)
Topic: Quantum Theory and Atomic Structure

9. Which of the following electron transitions would be expected to absorb any light in the Bohr model of the atom?

- A. $n = 1$ to $n = 3$
- B. $n = 3$ to $n = 2$
- C. $n = 4$ to $n = 2$
- D. $n = 6$ to $n = 5$

Accessibility: Keyboard Navigation
Bloom's Level: 2. Understand
Difficulty: Easy
Gradable: automatic
Subtopic: Atomic Spectra (Bohr Model of the Atom)
Topic: Quantum Theory and Atomic Structure

10. Which of the following electron transitions would be expected to absorb any light in the Bohr model of the atom?

- A. $n = 7$ to $n = 2$
- B. $n = 5$ to $n = 6$
- C. $n = 1$ to $n = 3$
- D. $n = 3$ to $n = 5$

Accessibility: Keyboard Navigation
Bloom's Level: 2. Understand
Difficulty: Easy
Gradable: automatic
Subtopic: Atomic Spectra (Bohr Model of the Atom)
Topic: Quantum Theory and Atomic Structure

11. The size of an atomic orbital is associated with

- A. the principal quantum number (n).
- B. the angular momentum quantum number (l).
- C. the magnetic quantum number (m_l).
- D. the spin quantum number (m_s).
- E. the angular momentum and magnetic quantum numbers, together.

Accessibility: Keyboard Navigation
Bloom's Level: 2. Understand
Difficulty: Easy
Gradable: automatic
Subtopic: Atomic Theories
Subtopic: Quantum Numbers
Topic: Components of Matter
Topic: Quantum Theory and Atomic Structure

12. Atomic orbitals developed using quantum mechanics

- A. describe regions of space in which one is most likely to find an electron.
- B. describe exact paths for electron motion.
- C. give a description of the atomic structure which is essentially the same as the Bohr model.
- E. allow scientists to calculate an exact volume for the hydrogen atom.
- F. are in conflict with the Heisenberg uncertainty principle.

Accessibility: Keyboard Navigation
Bloom's Level: 3. Apply
Difficulty: Medium
Gradable: automatic
Subtopic: Atomic Theories
Subtopic: Quantum Numbers
Topic: Components of Matter
Topic: Quantum Theory and Atomic Structure

13. The number of orbitals in a d subshell is

- A. 1.
- B. 2.
- C. 3.
- D. 5.
- E. 7.

Accessibility: Keyboard Navigation
Bloom's Level: 4. Analyze
Difficulty: Easy
Gradable: automatic
Subtopic: Assigning Electrons to Atomic Orbitals (Aufbau Principle)
Subtopic: Quantum Numbers
Topic: Electron Configuration
Topic: Quantum Theory and Atomic Structure

14. How many orbitals can have the $3p$ description in a given atom?

- A. 1
- B. 2
- C. 3
- D. 5

Accessibility: Keyboard Navigation
Bloom's Level: 2. Understand
Difficulty: Easy
Gradable: automatic
Subtopic: Quantum Numbers
Topic: Quantum Theory and Atomic Structure

15. How many orbitals can have the $3d$ description in a given atom?

- A. 1
- B. 2
- C. 3
- D. 5

Accessibility: Keyboard Navigation
Bloom's Level: 2. Understand
Difficulty: Easy
Gradable: automatic
Subtopic: Quantum Numbers
Topic: Quantum Theory and Atomic Structure

16. How many orbitals can have the $4s$ description in a given atom?

- A. 1
- B. 2
- C. 3
- D. 5

Accessibility: Keyboard Navigation
Bloom's Level: 2. Understand
Difficulty: Easy
Gradable: automatic
Subtopic: Quantum Numbers
Topic: Quantum Theory and Atomic Structure

17. How many orbitals can have the $4p$ description in a given atom?

- A. 1
- B. 2
- C. 3
- D. 4

Accessibility: Keyboard Navigation
Bloom's Level: 2. Understand
Difficulty: Easy
Gradable: automatic
Subtopic: Quantum Numbers
Topic: Quantum Theory and Atomic Structure

18. Determine which sublevel designation is legitimate.

- A. $1f$
- B. $2d$
- C. $3c$
- D. $4s$

Accessibility: Keyboard Navigation
Bloom's Level: 2. Understand
Difficulty: Easy
Gradable: automatic
Subtopic: Quantum Numbers
Topic: Quantum Theory and Atomic Structure

19. Determine which sublevel designation is legitimate.

- A. $1p$
- B. $2p$
- C. $3f$
- D. $4z$

Accessibility: Keyboard Navigation
Bloom's Level: 2. Understand
Difficulty: Easy
Gradable: automatic
Subtopic: Quantum Numbers
Topic: Quantum Theory and Atomic Structure

20. Determine which sublevel designation is not legitimate.

- A. $1p$
- B. $2s$
- C. $3d$
- D. $4p$

Accessibility: Keyboard Navigation

Bloom's Level: 2. Understand

Difficulty: Easy

Gradable: automatic

Subtopic: Quantum Numbers

Topic: Quantum Theory and Atomic Structure

21. Determine which sublevel designation is not legitimate.

- A. $4s$
- B. $2d$
- C. $3s$
- D. $5p$

Accessibility: Keyboard Navigation

Bloom's Level: 2. Understand

Difficulty: Easy

Gradable: automatic

Subtopic: Quantum Numbers

Topic: Quantum Theory and Atomic Structure

22. How many orbitals are there in the $n = 4$ level of the H-atom?

- A. 4
- B. 6
- C. 8
- D. 16
- E. 18

Accessibility: Keyboard Navigation

Bloom's Level: 3. Apply

Difficulty: Hard

Gradable: automatic

Subtopic: Assigning Electrons to Atomic Orbitals (Aufbau Principle)

Subtopic: Quantum Numbers

Topic: Electron Configuration

Topic: Quantum Theory and Atomic Structure

23. Each shell (principal energy level) of quantum number n contains n subshells.

TRUE

Accessibility: Keyboard Navigation

Bloom's Level: 2. Understand

Difficulty: Medium

Gradable: automatic

Subtopic: Quantum Numbers

Topic: Quantum Theory and Atomic Structure

24. For all atoms of the same element, the $2s$ orbital is larger than the $1s$ orbital.

TRUE

Accessibility: Keyboard Navigation

Bloom's Level: 3. Apply

Difficulty: Easy

Gradable: automatic

Subtopic: Quantum Numbers

Topic: Quantum Theory and Atomic Structure

25. The orbital diagram for a ground-state nitrogen atom is

	1s	2s	2p		
A	<u>↑↓</u>	<u>↑↓</u>	<u>↑</u>	<u>↑</u>	<u>↑</u>
B	<u>↑↓</u>	<u>↑</u>	<u>↑↓</u>	<u>↑</u>	—
C	<u>↑↓</u>	<u>↑↓</u>	<u>↑↓</u>	<u>↑</u>	—
D	<u>↑↓</u>	<u>↑↓</u>	<u>↑↓</u>	<u>↑</u>	<u>↑</u>
E	<u>↑↓</u>	<u>↑↓</u>	<u>↑↓</u>	<u>↑↓</u>	<u>↑</u>

- A. A
- B. B
- C. C
- D. D
- E. E

Bloom's Level: 4. Analyze
Difficulty: Easy
Gradable: automatic
Subtopic: Assigning Electrons to Atomic Orbitals (Aufbau Principle)
Subtopic: Quantum Numbers
Topic: Electron Configuration
Topic: Quantum Theory and Atomic Structure

26. The orbital diagram for a ground-state oxygen atom is

	1s	2s	2p		
A	<u>↑↓</u>	<u>↑↓</u>	<u>↑</u>	<u>↑</u>	<u>↑</u>
B	<u>↑↓</u>	<u>↑↓</u>	<u>↑↓</u>	<u>↑↓</u>	—
C	<u>↑↓</u>	<u>↑↓</u>	<u>↑↓</u>	<u>↑</u>	—
D	<u>↑↓</u>	<u>↑↓</u>	<u>↑↓</u>	<u>↑</u>	<u>↑</u>
E	<u>↑↓</u>	<u>↑↓</u>	<u>↑↓</u>	<u>↑↓</u>	<u>↑</u>

- A. A
- B. B
- C. C
- D. D
- E. E

Bloom's Level: 4. Analyze
Difficulty: Easy
Gradable: automatic
Subtopic: Assigning Electrons to Atomic Orbitals (Aufbau Principle)
Subtopic: Quantum Numbers
Topic: Electron Configuration
Topic: Quantum Theory and Atomic Structure

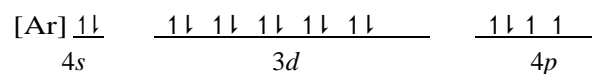
27. The orbital diagram for a ground-state carbon atom is

	$1s$	$2s$	$2p$		
A	$\underline{\uparrow\downarrow}$	$\underline{\uparrow\downarrow}$	$\underline{\uparrow\downarrow}$	$\underline{\quad}$	$\underline{\quad}$
B	$\underline{\uparrow\downarrow}$	$\underline{\uparrow}$	$\underline{\uparrow}$	$\underline{\uparrow}$	$\underline{\uparrow}$
C	$\underline{\uparrow\downarrow}$	$\underline{\uparrow\downarrow}$	$\underline{\uparrow}$	$\underline{\uparrow}$	$\underline{\uparrow}$
D	$\underline{\uparrow\downarrow}$	$\underline{\uparrow\downarrow}$	$\underline{\uparrow}$	$\underline{\uparrow}$	$\underline{\quad}$
E	$\underline{\uparrow\downarrow}$	$\underline{\uparrow\downarrow}$	$\underline{\uparrow\downarrow}$	$\underline{\uparrow\downarrow}$	$\underline{\uparrow}$

- A. A
- B. B
- C. C
- D. D
- E. E

Bloom's Level: 4. Analyze
Difficulty: Easy
Gradable: automatic
Subtopic: Assigning Electrons to Atomic Orbitals (Aufbau Principle)
Subtopic: Quantum Numbers
Topic: Electron Configuration
Topic: Quantum Theory and Atomic Structure

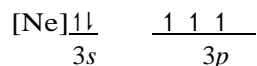
28. Which ground-state atom has an electron configuration described by the following *orbital diagram*?



- A. phosphorus
- B. germanium
- C. selenium
- D. tellurium
- E. potassium

Bloom's Level: 4. Analyze
Difficulty: Easy
Gradable: automatic
Subtopic: Assigning Electrons to Atomic Orbitals (Aufbau Principle)
Subtopic: Quantum Numbers
Topic: Electron Configuration
Topic: Quantum Theory and Atomic Structure

29. Which ground-state atom has an electron configuration described by the following *orbital diagram*?



- A. phosphorus
- B. nitrogen
- C. arsenic
- D. vanadium
- E. sulfur

Bloom's Level: 4. Analyze
Difficulty: Easy
Gradable: automatic
Subtopic: Assigning Electrons to Atomic Orbitals (Aufbau Principle)
Subtopic: Quantum Numbers
Topic: Electron Configuration
Topic: Quantum Theory and Atomic Structure

30. How many unpaired electrons does a ground-state atom of sulfur have?

- A. 0
- B. 1
- C. 2
- D. 3
- E. 4

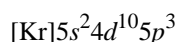
Accessibility: Keyboard Navigation
Bloom's Level: 4. Analyze
Difficulty: Medium
Gradable: automatic
Subtopic: Assigning Electrons to Atomic Orbitals (Aufbau Principle)
Subtopic: Pauli Exclusion Principle
Subtopic: Quantum Numbers
Topic: Electron Configuration
Topic: Quantum Theory and Atomic Structure

31. Which element has the following ground-state electron configuration? $1s^2 2s^2 2p^6 3s^2$

- Na
- Mg
- Al
- Si
- Ne

Accessibility: Keyboard Navigation
Bloom's Level: 4. Analyze
Difficulty: Easy
Gradable: automatic
Subtopic: Assigning Electrons to Atomic Orbitals (Aufbau Principle)
Subtopic: Energy-Level Splitting (Zeff and Shielding)
Subtopic: Hund's Rule
Subtopic: Quantum Numbers
Topic: Electron Configuration
Topic: Quantum Theory and Atomic Structure

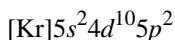
32. Which element has the following ground-state electron configuration?



- A. Sn
- B. Sb
- C. Pb
- D. Bi
- E. Te

Accessibility: Keyboard Navigation
Bloom's Level: 4. Analyze
Difficulty: Easy
Gradable: automatic
Subtopic: Assigning Electrons to Atomic Orbitals (Aufbau Principle)
Subtopic: Energy-Level Splitting (Zeff and Shielding)
Subtopic: Quantum Numbers
Topic: Electron Configuration
Topic: Quantum Theory and Atomic Structure

33. Which element has the following ground-state electron configuration?



- A. Sn
- B. Sb
- C. Pb
- D. Ge
- E. Te

Accessibility: Keyboard Navigation

Bloom's Level: 4. Analyze

Difficulty: Easy

Gradable: automatic

Subtopic: Assigning Electrons to Atomic Orbitals (Aufbau Principle)

Subtopic: Energy-Level Splitting (Zeff and Shielding)

Subtopic: Quantum Numbers

Topic: Electron Configuration

Topic: Quantum Theory and Atomic Structure

34. The electron configuration of a ground-state Co atom is

- A. $[\text{Ar}]4s^23d^7$
- B. $1s^22s^22p^63s^23d^9$
- C. $[\text{Ne}]3s^23d^7$
- D. $[\text{Ar}]4s^13d^5$
- E. $[\text{Ar}]4s^24d^7$

Accessibility: Keyboard Navigation

Bloom's Level: 4. Analyze

Difficulty: Medium

Gradable: automatic

Subtopic: Assigning Electrons to Atomic Orbitals (Aufbau Principle)

Subtopic: Energy-Level Splitting (Zeff and Shielding)

Subtopic: Quantum Numbers

Topic: Electron Configuration

Topic: Quantum Theory and Atomic Structure

35. The electron configuration of a ground-state vanadium atom is

- A. $[\text{Ar}]4s^24d^3$
- B. $[\text{Ar}]4s^24p^3$
- C. $[\text{Ar}]4s^23d^3$
- D. $[\text{Ar}]3d^5$
- E. $[\text{Ar}]4s^23d^7$

Accessibility: Keyboard Navigation

Bloom's Level: 4. Analyze

Difficulty: Medium

Gradable: automatic

Subtopic: Assigning Electrons to Atomic Orbitals (Aufbau Principle)

Subtopic: Energy-Level Splitting (Zeff and Shielding)

Subtopic: Quantum Numbers

Topic: Electron Configuration

Topic: Quantum Theory and Atomic Structure

36. The ground-state electron configuration for an atom of indium is

- A. $[\text{Kr}]5s^24p^64d^5$
- B. $[\text{Ar}]4s^23d^{10}4p^1$
- C. $[\text{Ar}]4s^24p^63d^5$
- D. $[\text{Kr}]5s^25p^64d^5$
- E. $[\text{Kr}]5s^24d^{10}5p^1$

Accessibility: Keyboard Navigation

Bloom's Level: 4. Analyze

Difficulty: Medium

Gradable: automatic

Subtopic: Assigning Electrons to Atomic Orbitals (Aufbau Principle)

Subtopic: Energy-Level Splitting (Zeff and Shielding)

Subtopic: Quantum Numbers

Topic: Electron Configuration

Topic: Quantum Theory and Atomic Structure

37. The ground-state electron configuration of a calcium atom is

- A. $[\text{Ne}]3s^2$
- B. $[\text{Ne}]3s^23p^6$
- C. $[\text{Ar}]4s^13d^1$
- D. $[\text{Ar}]4s^2$
- E. $[\text{Ar}]3d^2$

Accessibility: Keyboard Navigation

Bloom's Level: 4. Analyze

Difficulty: Easy

Gradable: automatic

Subtopic: Assigning Electrons to Atomic Orbitals (Aufbau Principle)

Subtopic: Energy-Level Splitting (Zeff and Shielding)

Subtopic: Quantum Numbers

Topic: Electron Configuration

Topic: Quantum Theory and Atomic Structure

38. Select the correct electron configuration for sulfur ($Z = 16$).

- A. $1s^21p^62s^22p^6$
- B. $1s^22s^22p^83s^23p^4$
- C. $1s^22s^22p^83s^23p^2$
- D. $1s^22s^22p^63s^23p^4$
- E. $1s^22s^22p^63s^23d^4$

Accessibility: Keyboard Navigation

Bloom's Level: 4. Analyze

Difficulty: Easy

Gradable: automatic

Subtopic: Assigning Electrons to Atomic Orbitals (Aufbau Principle)

Subtopic: Quantum Numbers

Topic: Electron Configuration

Topic: Quantum Theory and Atomic Structure

39. Select the correct electron configuration for Te ($Z = 52$).

- A. $[\text{Kr}]5s^25p^64d^8$
- B. $[\text{Kr}]5s^25d^{10}5p^4$
- C. $[\text{Kr}]5s^24d^{10}5p^6$
- D. $[\text{Kr}]5s^24f^{14}$
- E. $[\text{Kr}]5s^24d^{10}5p^4$

Accessibility: Keyboard Navigation

Bloom's Level: 4. Analyze

Difficulty: Medium

Gradable: automatic

Subtopic: Assigning Electrons to Atomic Orbitals (Aufbau Principle)

Subtopic: Energy-Level Splitting (Zeff and Shielding)

Subtopic: Quantum Numbers

Topic: Electron Configuration

Topic: Quantum Theory and Atomic Structure

40. What is the correct electron configuration for a germanium (Ge) atom?

- A. $1s^2 2s^2 2p^6 3s^2 3p^6 4s^2 4p^2$
- B. $1s^2 2s^2 2p^6 3s^2 3p^6 4s^2 3d^{10} 4p^2$**
- C. $1s^2 2s^2 2p^6 3s^2 3p^2$
- D. $1s^2 2s^2 3s^2 3p^5$
- E. None of the answers is correct.

Accessibility: Keyboard Navigation

Bloom's Level: 4. Analyze

Difficulty: Medium

Gradable: automatic

Subtopic: Assigning Electrons to Atomic Orbitals (Aufbau Principle)

Subtopic: Energy-Level Splitting (Zeff and Shielding)

Subtopic: Quantum Numbers

Topic: Electron Configuration

Topic: Quantum Theory and Atomic Structure

41. The electronic structure $1s^2 2s^2 2p^6 3s^2 3p^6 4s^2 3d^8$ refers to the ground state of

- A. Kr.
- B. Ni.
- C. Fe.
- D. Pd.
- E. None of these choices is correct.

Accessibility: Keyboard Navigation

Bloom's Level: 4. Analyze

Difficulty: Medium

Gradable: automatic

Subtopic: Assigning Electrons to Atomic Orbitals (Aufbau Principle)

Subtopic: Energy-Level Splitting (Zeff and Shielding)

Subtopic: Quantum Numbers

Topic: Electron Configuration

Topic: Quantum Theory and Atomic Structure

42. How many electrons are in the 4p orbitals of selenium?

- A. 0
- B. 2
- C. 4
- D. 5
- E. 6

Accessibility: Keyboard Navigation

Bloom's Level: 4. Analyze

Difficulty: Medium

Gradable: automatic

Subtopic: Assigning Electrons to Atomic Orbitals (Aufbau Principle)

Subtopic: Quantum Numbers

Topic: Electron Configuration

Topic: Quantum Theory and Atomic Structure

43. How many electrons are in the 4p orbitals of vanadium?

- A. 0
- B. 2
- C. 4
- D. 5
- E. 6

Accessibility: Keyboard Navigation

Bloom's Level: 4. Analyze

Difficulty: Medium

Gradable: automatic

Subtopic: Assigning Electrons to Atomic Orbitals (Aufbau Principle)

Subtopic: Quantum Numbers

Topic: Electron Configuration

Topic: Quantum Theory and Atomic Structure

44. How many electrons are in the $4d$ orbitals of Tc?

- A. 1
- B. 2
- C. 3
- D. 4
- E. 5

Accessibility: Keyboard Navigation
Bloom's Level: 4. Analyze
Difficulty: Medium
Gradable: automatic
Subtopic: Assigning Electrons to Atomic Orbitals (Aufbau Principle)
Subtopic: Quantum Numbers
Topic: Electron Configuration
Topic: Quantum Theory and Atomic Structure

45. How many electrons are there in the 2^{nd} principal energy level ($n = 2$) of a phosphorus atom?

- A. 3
- B. 5
- C. 6
- D. 8
- E. 10

Accessibility: Keyboard Navigation
Bloom's Level: 4. Analyze
Difficulty: Medium
Gradable: automatic
Subtopic: Assigning Electrons to Atomic Orbitals (Aufbau Principle)
Subtopic: Quantum Numbers
Topic: Electron Configuration
Topic: Quantum Theory and Atomic Structure

46. How many electrons are there in the 3^{rd} principal energy level ($n = 3$) of a phosphorus atom?

- A. 3
- B. 5
- C. 6
- D. 8
- E. 10

Accessibility: Keyboard Navigation
Bloom's Level: 4. Analyze
Difficulty: Medium
Gradable: automatic
Subtopic: Assigning Electrons to Atomic Orbitals (Aufbau Principle)
Subtopic: Quantum Numbers
Topic: Electron Configuration
Topic: Quantum Theory and Atomic Structure

47. What element is represented by the electron configuration $1s^2 2s^2 2p^6 3s^2 3p^6 4s^1 3d^5$?

- Mn
- Ca
- K
- Cr
- V

Accessibility: Keyboard Navigation
Bloom's Level: 4. Analyze
Difficulty: Medium
Gradable: automatic
Subtopic: Assigning Electrons to Atomic Orbitals (Aufbau Principle)
Subtopic: Energy-Level Splitting (Zeff and Shielding)
Subtopic: Quantum Numbers
Topic: Electron Configuration
Topic: Quantum Theory and Atomic Structure

48. What element is represented by the electron configuration $1s^2 2s^2 2p^6 3s^2 3p^6 4s^2 3d^{10} 4p^6 5s^1 4d^{10}$?

- A. Ag
- B. Rb
- C. Cd
- D. Sr
- E. Cu

Accessibility: Keyboard Navigation
Bloom's Level: 4. Analyze
Difficulty: Medium
Gradable: automatic
Subtopic: Assigning Electrons to Atomic Orbitals (Aufbau Principle)
Subtopic: Energy-Level Splitting (Zeff and Shielding)
Subtopic: Quantum Numbers
Topic: Electron Configuration
Topic: Quantum Theory and Atomic Structure

49. What is the electron configuration for tungsten?

- A. $1s^2 2s^2 2p^6 3s^2 3p^6 4s^2 3d^{10} 4p^6 5s^2 4d^{10} 5p^6 6s^2 4f^{14} 5d^6$
- B. $1s^2 2s^2 2p^6 3s^2 3p^6 4s^2 3d^{10} 4p^6 5s^2 4d^{10} 5p^6 6s^1 4f^{14} 5d^5$
- C. $1s^2 2s^2 2p^6 3s^2 3p^6 4s^2 3d^{10} 4p^6 5s^2 4d^{10} 5p^6 6s^2 4f^{14} 5d^4$
- D. $1s^2 2s^2 2p^6 3s^2 3p^6 4s^2 3d^{10} 4p^6 5s^2 4d^{10} 5p^6 6s^2 4f^{14} 5d^7$
- E. $1s^2 2s^2 2p^6 3s^2 3p^5 4s^2 3d^{10} 4p^6 5s^2 4d^{10} 5p^6 6s^2 4f^{14} 5d^7$

Accessibility: Keyboard Navigation
Bloom's Level: 4. Analyze
Difficulty: Medium
Gradable: automatic
Subtopic: Assigning Electrons to Atomic Orbitals (Aufbau Principle)
Subtopic: Quantum Numbers
Topic: Electron Configuration
Topic: Quantum Theory and Atomic Structure

50. What is the electron configuration for silicon?

- A. $1s^2 2s^2 2p^6 3s^1 3p^3$
- B.** $1s^2 2s^2 2p^6 3s^2 3p^2$
- C. $1s^2 2s^2 2p^6 3s^4$
- D. $1s^2 2s^2 2p^6 3p^4$
- E. $1s^2 2s^2 2p^6 3s^2 3p^3$

Accessibility: Keyboard Navigation
Bloom's Level: 4. Analyze
Difficulty: Easy
Gradable: automatic
Subtopic: Assigning Electrons to Atomic Orbitals (Aufbau Principle)
Subtopic: Quantum Numbers
Topic: Electron Configuration
Topic: Quantum Theory and Atomic Structure

51. What is the electron configuration for

bromine? A. $1s^2 2s^2 2p^6 3s^2 3p^6 4s^1 4d^{10} 4p^6$

B. $1s^2 2s^2 2p^6 3s^2 3p^6 4s^2 4d^{10} 4p^5$

C. $1s^2 2s^2 2p^6 3s^2 3p^6 4s^1 3d^{10} 4p^6$

D. $1s^2 2s^2 2p^6 3s^2 3p^6 4s^2 3d^{10} 4p^4$

E. $1s^2 2s^2 2p^6 3s^2 3p^6 4s^2 3d^{10} 4p^5$

Accessibility: Keyboard Navigation

Bloom's Level: 4. Analyze

Difficulty: Medium

Gradable: automatic

Subtopic: Assigning Electrons to Atomic Orbitals (Aufbau Principle)

Subtopic: Energy-Level Splitting (Zeff and Shielding)

Subtopic: Quantum Numbers

Topic: Electron Configuration

Topic: Quantum Theory and Atomic Structure

52. Which of the following elements has the largest number of unpaired electrons in the ground state?

A. K

B. V

C. S

D. Si

E. Cl

Accessibility: Keyboard Navigation

Bloom's Level: 4. Analyze

Difficulty: Hard

Gradable: automatic

Subtopic: Assigning Electrons to Atomic Orbitals (Aufbau Principle)

Subtopic: Diamagnetism and Paramagnetism

Subtopic: Energy-Level Splitting (Zeff and Shielding)

Subtopic: Hund's Rule

Subtopic: Quantum Numbers

Topic: Electron Configuration

Topic: Quantum Theory and Atomic Structure

53. The general electron configuration for atoms of all elements in Group 5A is

A. $ns^2 np^6$.

B. $ns^2 np^5$.

C. $ns^2 np^4$.

D. $ns^2 np^3$.

E. $ns^2 np^1$.

Accessibility: Keyboard Navigation

Bloom's Level: 3. Apply

Difficulty: Easy

Gradable: automatic

Subtopic: Elements and the Periodic Table

Subtopic: Periodic Classification of the Elements

Topic: Chemical Periodicity

Topic: Components of Matter

54. Which of these choices is the general electron configuration for the outermost electrons of elements in the alkaline earth group?

- A. ns^1
- B. ns^2
- C. ns^2np^4
- D. ns^2np
- E. $ns^2np^6 (n - 1)d^6$

Accessibility: Keyboard Navigation

Bloom's Level: 3. Apply

Difficulty: Medium

Gradable: automatic

Subtopic: Assigning Electrons to Atomic Orbitals (Aufbau Principle)

Subtopic: Periodic Classification of the Elements

Topic: Chemical Periodicity

Topic: Electron Configuration

55. The general electron configuration for atoms of the halogen group is

- A. ns^2np^6 .
- B. ns^2np^5 .
- C. $ns^2np^6 (n - 1)d^7$.
- D. ns^1 .
- E. ns^2np^7 .

Accessibility: Keyboard Navigation

Bloom's Level: 3. Apply

Difficulty: Easy

Gradable: automatic

Subtopic: Assigning Electrons to Atomic Orbitals (Aufbau Principle)

Subtopic: Periodic Classification of the Elements

Topic: Chemical Periodicity

Topic: Electron Configuration

56. The general electron configuration for noble gas atoms is

- A. ns^2np^6 .
- B. ns^2np^5 .
- C. ns^2np^4 .
- D. ns^2np^3 .
- E. ns^2 .

Accessibility: Keyboard Navigation

Bloom's Level: 3. Apply

Difficulty: Easy

Gradable: automatic

Subtopic: Assigning Electrons to Atomic Orbitals (Aufbau Principle)

Subtopic: Periodic Classification of the Elements

Topic: Chemical Periodicity

Topic: Electron Configuration

57. Each of the noble gases has a completely filled p subshell except for which one?

- A. Xenon
- B. Neon
- C. Radon
- D. Argon
- E. Helium

Accessibility: Keyboard Navigation

Bloom's Level: 5. Evaluate

Difficulty: Medium

Gradable: automatic

Subtopic: Assigning Electrons to Atomic Orbitals (Aufbau Principle)

Subtopic: Periodic Classification of the Elements

Topic: Chemical Periodicity

Topic: Electron Configuration

58. An element with the general electron configuration for its outermost electrons of ns^2np^1 would be in which element group?

- A. 2A
- B. 3A
- C. 4A
- D. 5A
- E. 8A

Accessibility: Keyboard Navigation

Bloom's Level: 4. Analyze

Difficulty: Easy

Gradable: automatic

Subtopic: Assigning Electrons to Atomic Orbitals (Aufbau Principle)

Subtopic: Periodic Classification of the Elements

Topic: Chemical Periodicity

Topic: Electron Configuration

59. In what group of the periodic table is the element with the electron configuration $[\text{Ar}]4s^23d^{10}4p^3$?

- A. 1A
- B. 2A
- C. 3A
- D. 4A
- E. 5A

Accessibility: Keyboard Navigation

Bloom's Level: 4. Analyze

Difficulty: Medium

Gradable: automatic

Subtopic: Assigning Electrons to Atomic Orbitals (Aufbau Principle)

Subtopic: Periodic Classification of the Elements

Topic: Chemical Periodicity

Topic: Electron Configuration

60. Consider the element with the electron configuration $[\text{Kr}]5s^24d^7$. This element is

- A. a halogen.
- B. a transition metal.
- C. a nonmetal.
- D. an actinide element.
- E. a noble gas.

Accessibility: Keyboard Navigation

Bloom's Level: 4. Analyze

Difficulty: Medium

Gradable: automatic

Subtopic: Assigning Electrons to Atomic Orbitals (Aufbau Principle)

Subtopic: Periodic Classification of the Elements

Subtopic: Properties of Transition Metals

Topic: Chemical Periodicity

Topic: Electron Configuration

Topic: Transition Metals and Coordination Compounds

61. Consider the element with the electron configuration $[\text{Kr}]5s^24d^{10}5p^5$. This element is

- A. a halogen.
- B. a transition metal.
- C. an alkali metal.
- D. an actinide element.
- E. a noble gas.

Accessibility: Keyboard Navigation

Bloom's Level: 4. Analyze

Difficulty: Medium

Gradable: automatic

Subtopic: Assigning Electrons to Atomic Orbitals (Aufbau Principle)

Subtopic: Periodic Classification of the Elements

Topic: Chemical Periodicity

Topic: Electron Configuration

62. Consider the element with the electron configuration $[\text{Xe}]6s^24f^7$. This element is

- A. a halogen.
- B. a lanthanide element.
- C. a nonmetal.
- D. an actinide element.
- E. a noble gas.

Accessibility: Keyboard Navigation

Bloom's Level: 4. Analyze

Difficulty: Medium

Gradable: automatic

Subtopic: Assigning Electrons to Atomic Orbitals (Aufbau Principle)

Subtopic: Periodic Classification of the Elements

Topic: Chemical Periodicity

Topic: Electron Configuration

63. How many *valence electrons* does a carbon atom have?

- A. 1
- B. 2
- C. 3
- D. 4
- E. 6

Accessibility: Keyboard Navigation

Bloom's Level: 4. Analyze

Difficulty: Easy

Gradable: automatic

Subtopic: Assigning Electrons to Atomic Orbitals (Aufbau Principle)

Subtopic: Periodic Classification of the Elements

Topic: Chemical Periodicity

Topic: Electron Configuration

64. How many *valence electrons* does a tin (Sn) atom have?

- A. 2
- B. 4
- C. 14
- D. 36
- E. 50

Accessibility: Keyboard Navigation

Bloom's Level: 4. Analyze

Difficulty: Medium

Gradable: automatic

Subtopic: Assigning Electrons to Atomic Orbitals (Aufbau Principle)

Subtopic: Periodic Classification of the Elements

Topic: Chemical Periodicity

Topic: Electron Configuration

65. An element with the electron configuration [noble gas] $ns^2(n-1)d^8$ has _____ valence electrons.

- A. 2
- B. 6
- C. 8
- D. 10
- E. None of these choices is correct.

Accessibility: Keyboard Navigation

Bloom's Level: 4. Analyze

Difficulty: Medium

Gradable: automatic

Subtopic: Assigning Electrons to Atomic Orbitals (Aufbau Principle)

Subtopic: Periodic Classification of the Elements

Topic: Chemical Periodicity

Topic: Electron Configuration

66. An element with the electron configuration [noble gas] $ns^2(n-1)d^{10}np^3$ has _____ valence electrons.

- A. 2
- B. 3
- C. 5
- D. 10
- E. 15

Accessibility: Keyboard Navigation

Bloom's Level: 4. Analyze

Difficulty: Medium

Gradable: automatic

Subtopic: Assigning Electrons to Atomic Orbitals (Aufbau Principle)

Subtopic: Periodic Classification of the Elements

Topic: Chemical Periodicity

Topic: Electron Configuration

67. How does atomic radius change as you move across the periodic table?

- A. Atomic radius decreases moving from left to right across a period and increases from top to bottom.
- B. Atomic radius increases moving left to right across a period and decreases from top to bottom.
- C. Smaller nuclear charge lowers energy; more electrons in an orbital lowers energy.
- D. Atomic radius increases diagonally across the periodic table.
- E. None of the answers is correct.

Accessibility: Keyboard Navigation

Bloom's Level: 3. Apply

Difficulty: Easy

Gradable: automatic

Subtopic: Trends in Physical Properties (Atomic Radius, Ionization

Energy, Ionic Radius, Electron Affinity)

Topic: Chemical Periodicity

68. Which of these atoms has the smallest radius?

- A. Al
- B. P
- C. As
- D. Te
- E. Na

Accessibility: Keyboard Navigation

Bloom's Level: 5. Evaluate

Difficulty: Medium

Gradable: automatic

Subtopic: Trends in Physical Properties (Atomic Radius, Ionization

Energy, Ionic Radius, Electron Affinity)

Topic: Chemical Periodicity

69. Which of these atoms has the largest radius?

- A. B
- B. Ga
- C. Br
- D. Si
- E. Cl

Accessibility: Keyboard Navigation
Bloom's Level: 5. Evaluate
Difficulty: Medium
Gradable: automatic
Subtopic: Trends in Physical Properties (Atomic Radius, Ionization Energy, Ionic Radius, Electron Affinity)
Topic: Chemical Periodicity

70. Which of the elements listed below has the greatest atomic radius?

- A. B
- B. Al
- C. S
- D. P
- E. Si

Accessibility: Keyboard Navigation
Bloom's Level: 5. Evaluate
Difficulty: Medium
Gradable: automatic
Subtopic: Trends in Physical Properties (Atomic Radius, Ionization Energy, Ionic Radius, Electron Affinity)
Topic: Chemical Periodicity

71. Which one of these ions has the smallest radius?

- A. Cl^-
- B. K^+
- C. S^{2-}
- D. Na^+
- E. O^{2-}

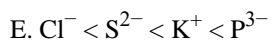
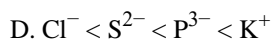
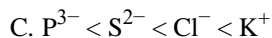
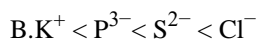
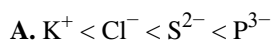
Accessibility: Keyboard Navigation
Bloom's Level: 5. Evaluate
Difficulty: Hard
Gradable: automatic
Subtopic: Trends in Physical Properties (Atomic Radius, Ionization Energy, Ionic Radius, Electron Affinity)
Topic: Chemical Periodicity

72. Arrange P, S, and O in order of increasing atomic radius.

- A. $\text{S} < \text{O} < \text{P}$
- B. $\text{P} < \text{S} < \text{O}$
- C. $\text{O} < \text{S} < \text{P}$
- D. $\text{O} < \text{P} < \text{S}$
- E. The answer cannot be determined from the data given.

Accessibility: Keyboard Navigation
Bloom's Level: 5. Evaluate
Difficulty: Medium
Gradable: automatic
Subtopic: Trends in Physical Properties (Atomic Radius, Ionization Energy, Ionic Radius, Electron Affinity)
Topic: Chemical Periodicity

73. Arrange these ions in order of increasing ionic radius: K^+ , P^{3-} , S^{2-} , Cl^- .



Accessibility: Keyboard Navigation

Bloom's Level: 5. Evaluate

Difficulty: Hard

Gradable: automatic

Subtopic: Trends in Physical Properties (Atomic Radius, Ionization Energy, Ionic Radius, Electron Affinity)

Topic: Chemical Periodicity

74. Which of the following elements has the largest atomic size?

A. S

B. Ca

C. Ba

D. Po

E. Rn

Accessibility: Keyboard Navigation

Bloom's Level: 5. Evaluate

Difficulty: Medium

Gradable: automatic

Subtopic: Trends in Physical Properties (Atomic Radius, Ionization Energy, Ionic Radius, Electron Affinity)

Topic: Chemical Periodicity

75. Which of the following elements has the smallest atomic size?

A. Na

B. Ar

C. K

D. Ca

E. Kr

Accessibility: Keyboard Navigation

Bloom's Level: 5. Evaluate

Difficulty: Medium

Gradable: automatic

Subtopic: Trends in Physical Properties (Atomic Radius, Ionization Energy, Ionic Radius, Electron Affinity)

Topic: Chemical Periodicity

76. Select the element that will lose an electron most easily, based on the periodic trend.

A. Li

B. Na

C. K

D. He

Accessibility: Keyboard Navigation

Bloom's Level: 3. Apply

Difficulty: Medium

Gradable: automatic

Subtopic: Trends in Physical Properties (Atomic Radius, Ionization Energy, Ionic Radius, Electron Affinity)

Topic: Chemical Periodicity

77. Select the element that will lose an electron most easily, based on the periodic trend.

- A. Na
- B. Mg
- C. Ar
- D. P

Accessibility: Keyboard Navigation
Bloom's Level: 3. Apply
Difficulty: Medium
Gradable: automatic
Subtopic: Trends in Physical Properties (Atomic Radius, Ionization Energy, Ionic Radius, Electron Affinity)
Topic: Chemical Periodicity

78. Select the element that will gain an electron most easily, based on the periodic trend.

- A. Ca
- B. Mg
- C. O
- D. P

Accessibility: Keyboard Navigation
Bloom's Level: 3. Apply
Difficulty: Medium
Gradable: automatic
Subtopic: Trends in Physical Properties (Atomic Radius, Ionization Energy, Ionic Radius, Electron Affinity)
Topic: Chemical Periodicity

79. Select the element that will gain an electron most easily, based on the periodic trend.

- A. Rb
- B. Al
- C. S
- D. Na

Accessibility: Keyboard Navigation
Bloom's Level: 3. Apply
Difficulty: Medium
Gradable: automatic
Subtopic: Trends in Physical Properties (Atomic Radius, Ionization Energy, Ionic Radius, Electron Affinity)
Topic: Chemical Periodicity

80. Which of these elements has the greatest metallic character?

- A. Br
- B. F
- C. Ge
- D. Mn
- E. Sc

Accessibility: Keyboard Navigation
Bloom's Level: 5. Evaluate
Difficulty: Medium
Gradable: automatic
Subtopic: Trends in Physical Properties (Atomic Radius, Ionization Energy, Ionic Radius, Electron Affinity)
Topic: Chemical Periodicity

81. Which of these elements has the greatest metallic character?

- A. Br
- B. Se
- C. Ni
- D. As
- E. Si

Accessibility: Keyboard Navigation
Bloom's Level: 5. Evaluate
Difficulty: Medium
Gradable: automatic
Subtopic: Trends in Physical Properties (Atomic Radius, Ionization Energy, Ionic Radius, Electron Affinity)
Topic: Chemical Periodicity

82. Select the element with the greatest metallic character.

- A. Li
- B. Ca
- C. Al
- D. Pb
- E. Cs

Accessibility: Keyboard Navigation
Bloom's Level: 5. Evaluate
Difficulty: Medium
Gradable: automatic
Subtopic: Trends in Physical Properties (Atomic Radius, Ionization Energy, Ionic Radius, Electron Affinity)
Topic: Chemical Periodicity

83. Select the element with the least metallic character.

- A. Sn
- B. Sr
- C. Tl
- D. Ge
- E. Ga

Accessibility: Keyboard Navigation
Bloom's Level: 5. Evaluate
Difficulty: Medium
Gradable: automatic
Subtopic: Trends in Physical Properties (Atomic Radius, Ionization Energy, Ionic Radius, Electron Affinity)
Topic: Chemical Periodicity

84. Using the periodic table, predict the charge on the common ion of calcium.

- A. +1
- B. +2**
- C. -1
- D. -2

Accessibility: Keyboard Navigation
Bloom's Level: 4. Analyze
Difficulty: Medium
Gradable: automatic
Subtopic: Electron Configurations of Cations and Anions
Topic: Electron Configuration

85. Using the periodic table, predict the charge on the common ion of selenium.

- A. +1
- B. +2
- C. -1
- D. -2

Accessibility: Keyboard Navigation
Bloom's Level: 4. Analyze
Difficulty: Medium
Gradable: automatic
Subtopic: Electron Configurations of Cations and Anions
Topic: Electron Configuration

86. Using the periodic table, predict the charge on the common ion of rubidium.

- A. +1
- B. +2
- C. -1
- D. -2

Accessibility: Keyboard Navigation
Bloom's Level: 4. Analyze
Difficulty: Medium
Gradable: automatic
Subtopic: Electron Configurations of Cations and Anions
Topic: Electron Configuration

87. Using the periodic table, predict the charge on the common ion of bromine.

- A. +1
- B. +2
- C. -1
- D. -2

Accessibility: Keyboard Navigation
Bloom's Level: 4. Analyze
Difficulty: Medium
Gradable: automatic
Subtopic: Electron Configurations of Cations and Anions
Topic: Electron Configuration

88. The Lewis dot symbol consists of the symbol for the element surrounded by dot(s). What does the symbol represent?

- A. Electron configuration
- B. Valence electrons
- C. Atomic number
- D. Atomic mass
- E. Nucleus and core electrons

Accessibility: Keyboard Navigation
Bloom's Level: 2. Understand
Difficulty: Medium
Gradable: automatic
Subtopic: Lewis Dot Symbols
Subtopic: Writing Lewis Dot Structures
Topic: Chemical Bonding
Topic: Molecular Shape

89. The Lewis dot symbol consists of the symbol for the element surrounded by dot(s). What does the dot or dots represent?

- A. Electron configuration
- B. Valence electrons
- C. Atomic number
- D. Atomic mass
- E. Core electrons

Accessibility: Keyboard Navigation
Bloom's Level: 2. Understand
Difficulty: Easy
Gradable: automatic
Subtopic: Lewis Dot Symbols
Subtopic: Writing Lewis Dot Structures
Topic: Chemical Bonding
Topic: Molecular Shape

90. How many dots does the Lewis dot symbol for argon have around it?

- A. 1
- B. 2
- C. 4
- D. 6
- E. 8

Accessibility: Keyboard Navigation
Bloom's Level: 3. Apply
Difficulty: Easy
Gradable: automatic
Subtopic: Lewis Dot Symbols
Subtopic: Writing Lewis Dot Structures
Topic: Chemical Bonding
Topic: Molecular Shape

91. How many dots does the Lewis dot symbol for sodium have around it?

- A. 1
- B. 2
- C. 0
- D. 3
- E. 7

Accessibility: Keyboard Navigation
Bloom's Level: 3. Apply
Difficulty: Easy
Gradable: automatic
Subtopic: Lewis Dot Symbols
Subtopic: Writing Lewis Dot Structures
Topic: Chemical Bonding
Topic: Molecular Shape

92. How many dots does the Lewis dot symbol for magnesium have around it?

- A. 1
- B. 2
- C. 0
- D. 3
- E. 7

Accessibility: Keyboard Navigation
Bloom's Level: 3. Apply
Difficulty: Easy
Gradable: automatic
Subtopic: Lewis Dot Symbols
Subtopic: Writing Lewis Dot Structures
Topic: Chemical Bonding

93. How many dots does the Lewis dot symbol for chlorine have around it?

- A. 1
- B. 2
- C. 5
- D. 7
- E. 17

Accessibility: Keyboard Navigation
Bloom's Level: 3. Apply
Difficulty: Easy
Gradable: automatic
Subtopic: Lewis Dot Symbols
Subtopic: Writing Lewis Dot Structures
Topic: Chemical Bonding
Topic: Molecular Shape

94. How many dots does the Lewis dot symbol for carbon have around it?

- A. 4
- B. 2
- C. 6
- D. 3
- E. 7

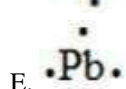
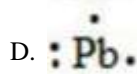
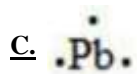
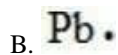
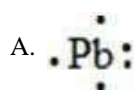
Accessibility: Keyboard Navigation
Bloom's Level: 3. Apply
Difficulty: Easy
Gradable: automatic
Subtopic: Lewis Dot Symbols
Subtopic: Writing Lewis Dot Structures
Topic: Chemical Bonding
Topic: Molecular Shape

95. How many dots does the Lewis dot symbol for oxygen have around it?

- A. 4
- B. 2
- C. 6
- D. 3
- E. 7

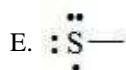
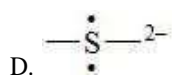
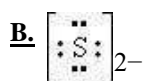
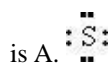
Accessibility: Keyboard Navigation
Bloom's Level: 3. Apply
Difficulty: Easy
Gradable: automatic
Subtopic: Lewis Dot Symbols
Subtopic: Writing Lewis Dot Structures
Topic: Chemical Bonding
Topic: Molecular Shape

96. The Lewis dot symbol for the a lead atom is



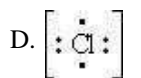
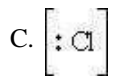
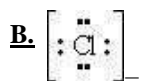
Bloom's Level: 4. Analyze
Difficulty: Easy
Gradable: automatic
Subtopic: Lewis Dot Symbols
Subtopic: Writing Lewis Dot Structures
Topic: Chemical Bonding
Topic: Molecular Shape

97. The Lewis dot symbol for the S^{2-} ion




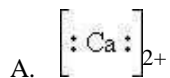
Bloom's Level: 4. Analyze
Difficulty: Medium
Gradable: automatic
Subtopic: Lewis Dot Symbols
Subtopic: Writing Lewis Dot Structures
Topic: Chemical Bonding
Topic: Molecular Shape

98. The Lewis dot symbol for the chloride ion is



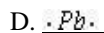
Bloom's Level: 4. Analyze
Difficulty: Medium
Gradable: automatic
Subtopic: Lewis Dot Symbols
Subtopic: Writing Lewis Dot Structures
Topic: Chemical Bonding
Topic: Molecular Shape

99. The Lewis dot symbol for the calcium ion is



Bloom's Level: 4. Analyze
Difficulty: Medium
Gradable: automatic
Subtopic: Lewis Dot Symbols
Subtopic: Writing Lewis Dot Structures
Topic: Chemical Bonding
Topic: Molecular Shape

100. Select the element whose Lewis symbol is correct.



*Bloom's Level: 4. Analyze
Difficulty: Medium
Gradable: automatic
Subtopic: Lewis Dot Symbols
Subtopic: Writing Lewis Dot Structures
Topic: Chemical Bonding
Topic: Molecular Shape*

101. Select the element whose Lewis symbol is

correct. A. $\bullet\text{Ga}\bullet$



*Bloom's Level: 4. Analyze
Difficulty: Medium
Gradable: automatic
Subtopic: Lewis Dot Symbols
Subtopic: Writing Lewis Dot Structures
Topic: Chemical Bonding
Topic: Molecular Shape*

102. A magnesium ion, Mg^{2+} , has

A. 12 protons and 13 electrons.

B. 24 protons and 26 electrons.

C. 12 protons and 10 electrons.

D. 24 protons and 22 electrons.

E. 12 protons and 14 electrons.

*Accessibility: Keyboard Navigation
Bloom's Level: 4. Analyze
Difficulty: Medium
Gradable: automatic
Subtopic: Electron Configurations of Cations and Anions
Subtopic: Structure of the Atom
Topic: Components of Matter
Topic: Electron Configuration*

103. An aluminum ion, Al^{3+} , has

- A. 13 protons and 13 electrons.
- B. 27 protons and 24 electrons.
- C. 16 protons and 13 electrons.
- D. 13 protons and 10 electrons.
- E. 10 protons and 13 electrons.

Accessibility: Keyboard Navigation
Bloom's Level: 4. Analyze
Difficulty: Medium
Gradable: automatic
Subtopic: Electron Configurations of Cations and Anions
Subtopic: Structure of the Atom
Topic: Components of Matter
Topic: Electron Configuration

104. An oxide ion, O^{2-} , has

- A. 8 protons and 10 electrons.
- B. 10 protons and 8 electrons.
- C. 8 protons and 9 electrons.
- D. 8 protons and 7 electrons.
- E. 10 protons and 7 electrons.

Accessibility: Keyboard Navigation
Bloom's Level: 4. Analyze
Difficulty: Medium
Gradable: automatic
Subtopic: Electron Configurations of Cations and Anions
Subtopic: Structure of the Atom
Topic: Components of Matter
Topic: Electron Configuration

105. A sulfide ion, S^{2-} , has

- A. 16 protons and 16 electrons.
- B. 32 protons and 16 electrons.
- C. 16 protons and 14 electrons.
- D. 16 protons and 18 electrons.
- E. 32 protons and 18 electrons.

Accessibility: Keyboard Navigation
Bloom's Level: 4. Analyze
Difficulty: Medium
Gradable: automatic
Subtopic: Electron Configurations of Cations and Anions
Subtopic: Structure of the Atom
Topic: Components of Matter
Topic: Electron Configuration

106. How many protons and electrons are present in one Br^- ion?

- A. 35 protons, 35 electrons
- B. 80 protons, 81 electrons
- C. 35 protons, 34 electrons
- D. 35 protons, 36 electrons
- E. 80 protons, 34 electrons

Accessibility: Keyboard Navigation
Bloom's Level: 4. Analyze
Difficulty: Medium
Gradable: automatic
Subtopic: Electron Configurations of Cations and Anions
Subtopic: Structure of the Atom
Topic: Components of Matter
Topic: Electron Configuration

107. An isoelectronic series is

- A. a series that has two or more species that have identical nuclear charges, but have different electron configurations.
- B. a series that has the same ionization potentials.
- C. a series that can have only up to three species and have similar electron configuration and similar nuclear charges.
- D. a series that has two or more species that have identical electron configurations, but different nuclear charges.
- E. a series that has the same nuclear charge.

Accessibility: Keyboard Navigation

Bloom's Level: 2. Understand

Difficulty: Medium

Gradable: automatic

Subtopic: Assigning Electrons to Atomic Orbitals (Aufbau Principle)

Topic: Electron Configuration

108. Which of these species make an *isoelectronic pair*: Cl^- , O^{2-} , F, Ca^{2+} , Fe^{3+} ?

- A. Ca^{2+} and Fe^{3+}
- B. O^{2-} and F
- C. F and Cl^-
- D. Cl^- and Ca^{2+}
- E. None of the above species are part of an isoelectronic series.

Accessibility: Keyboard Navigation

Bloom's Level: 5. Evaluate

Difficulty: Medium

Gradable: automatic

Subtopic: Assigning Electrons to Atomic Orbitals (Aufbau Principle)

Subtopic: Electron Configurations of Cations and Anions

Topic: Electron Configuration

109. Which of these pairs consists of *isoelectronic* species?

- A. Mn^{2+} and Ar
- B. Zn^{2+} and Cu^{2+}
- C. Na^+ and K^+
- D. Cl^- and S
- E. K^+ and Cl^-

Accessibility: Keyboard Navigation

Bloom's Level: 5. Evaluate

Difficulty: Medium

Gradable: automatic

Subtopic: Assigning Electrons to Atomic Orbitals (Aufbau Principle)

Subtopic: Electron Configurations of Cations and Anions

Topic: Electron Configuration

110. Which ion is *isoelectronic* with Ar?

- A. Fe^{2+}
- B. F^-
- C. Br^-
- D. Ga^{3+}
- E. Ca^{2+}

Accessibility: Keyboard Navigation

Bloom's Level: 5. Evaluate

Difficulty: Medium

Gradable: automatic

Subtopic: Assigning Electrons to Atomic Orbitals (Aufbau Principle)

Subtopic: Electron Configurations of Cations and Anions

Topic: Electron Configuration

111. Which one of these ions is *not* isoelectronic with Kr?

- A. As^{3+}
- B. Se^{2-}
- C. Rb^+
- D. Sr^{2+}
- E. Br^-

Accessibility: Keyboard Navigation

Bloom's Level: 5. Evaluate

Difficulty: Medium

Gradable: automatic

Subtopic: Assigning Electrons to Atomic Orbitals (Aufbau Principle)

Subtopic: Electron Configurations of Cations and Anions

Topic: Electron Configuration

112. Which of these choices is the electron configuration for the aluminum ion?

- A. $1s^2 2s^2 2p^6 3s^2$
- B. $1s^2 2s^2 2p^6 3s^2 3p^2$
- C. $1s^2 2s^2 2p^6 3s^2 3p^1$
- D. $1s^2 2s^2 2p^6$
- E. $1s^2 2s^2 2p^6 3s^2 3p^4$

Accessibility: Keyboard Navigation

Bloom's Level: 5. Evaluate

Difficulty: Hard

Gradable: automatic

Subtopic: Assigning Electrons to Atomic Orbitals (Aufbau Principle)

Subtopic: Electron Configurations of Cations and Anions

Topic: Electron Configuration

113. Which of these choices is the electron configuration for the chloride ion?

- A. $[\text{Ne}]3s^2 3p^4$
- B. $[\text{Ne}]3s^2 3p^7$
- C. $[\text{Ar}]$
- D. $[\text{Ar}]4s^1$
- E. $[\text{Ne}]3s^2 3p^5$

Accessibility: Keyboard Navigation

Bloom's Level: 5. Evaluate

Difficulty: Medium

Gradable: automatic

Subtopic: Assigning Electrons to Atomic Orbitals (Aufbau Principle)

Subtopic: Electron Configurations of Cations and Anions

Topic: Electron Configuration

Category
Chapter 02 Test Bank Summary

	<u># of</u> <u>Questions</u>
Accessibility: Keyboard Navigation	101
Bloom's Level: 2. Understand	18
Bloom's Level: 3. Apply	19
Bloom's Level: 4. Analyze	53
Bloom's Level: 5. Evaluate	22
Difficulty: Easy	42
Difficulty: Hard	7
Difficulty: Medium	63
Gradable: automatic	112
Subtopic: Assigning Electrons to Atomic Orbitals (Aufbau Principle)	50
Subtopic: Atomic Spectra (Bohr Model of the Atom)	5
Subtopic: Atomic Theories	2
Subtopic: Diamagnetism and Paramagnetism	1
Subtopic: Electromagnetic Radiation (Wave Properties)	5
Subtopic: Electron Configurations of Cations and Anions	15
Subtopic: Elements and the Periodic Table	1
Subtopic: Energy-Level Splitting (Z_{eff} and Shielding)	14
Subtopic: Hund's Rule	2
Subtopic: Lewis Dot Symbols	14
Subtopic: Measurement (SI Units)	2
Subtopic: Pauli Exclusion Principle	1
Subtopic: Periodic Classification of the Elements	14
Subtopic: Properties of Transition Metals	1
Subtopic: Quantum Numbers	42
Subtopic: Scientific Notation and Significant Figures	2
Subtopic: Structure of the Atom	5
Subtopic: Trends in Physical Properties (Atomic Radius, Ionization Energy, Ionic Radius, Electron Affinity)	17
Subtopic: Writing Lewis Dot Structures	14
Topic: Chemical Bonding	14
Topic: Chemical Periodicity	31
Topic: Components of Matter	8
Topic: Electron Configuration	59
Topic: Molecular Shape	14
Topic: Quantum Theory and Atomic Structure	51
Topic: Transition Metals and Coordination Compounds	1