

Test Bank for Business Statistics 2nd Edition by Donnelly ISBN  
0321925122 9780321925121

Full link download

Test bank:

<https://testbankpack.com/download/test-bank-for-business-statistics-2nd-edition-by-donnelly-isbn-0321925122-9780321925121/>

1) A frequency distribution is a table that shows the number of data observations that fall into specific intervals.

Answer: TRUE

Diff: 1

Keywords: frequency distribution

Objective: 2.2.1

2) Continuous data are values based on observations that can be counted and are typically represented by whole numbers.

Answer: FALSE

Diff: 1

Keywords: discrete data

Objective: 2.2.1

3) Continuous data is often the result of measuring observations rather than counting them.

Answer: TRUE

Diff: 1

Keywords: continuous data

Objective: 2.2.1

4) Discrete data can have an infinite number of values within a specific interval.

Answer: FALSE

Diff: 2

Keywords: discrete data

Objective: 2.2.1

5) The only limitation in the number of continuous values within an interval is the level of precision of the measuring instrument.

Answer: TRUE

Diff: 1

Keywords: continuous data

Objective: 2.2.1

6) The sum of the relative frequencies for the relative frequency distribution should be equal to or very close to 1.0 due to rounding.

Answer: TRUE

Diff: 1

Keywords: relative frequency distributions

The sum of the cumulative relative frequencies for the cumulative relative frequency distribution should be equal to or very close to 1.0 due to rounding.

Answer: FALSE

Diff: 2

Keywords: cumulative relative frequency distributions

Objective: 2.2.1

7) A symmetrical distribution is one in which the right side of the distribution looks like the mirror image of the left side of the distribution.

Answer: TRUE

Diff: 1

Keywords: symmetrical distributions

Objective: 2.2.1

8) The goal of constructing a frequency distribution is to identify a useful pattern in the data and often there is more than one acceptable way to accomplish this with grouped quantitative data.

Answer: TRUE

Diff: 1

Keywords: frequency distribution, grouped quantitative data

Objective: 2.2.1

9) When creating a frequency distribution with grouped qualitative data and 45 data points, five classes should be set up using the  $2^k \geq n$  rule.

Answer: FALSE

Diff: 1

Keywords: frequency distribution, grouped quantitative data

Objective: 2.2.1

10) When constructing a frequency distribution with grouped qualitative data, occasionally you will end up with  $k + 1$  or  $k - 1$  classes to cover the entire data set.

Answer: TRUE

Diff: 1

Keywords: frequency distribution, grouped quantitative data

Objective: 2.2.1

11) Fifty employees at CSC Corporation responded to a survey asking for the number of minutes they commute to work in the morning. Eighteen employees indicated that their commutes are 15 to less than 20 minutes. The relative frequency for this class in a frequency distribution would be 0.18.

Answer: FALSE

Diff: 1

Keywords: frequency distribution, grouped quantitative data

Objective: 2.2.1

## 2-4 Chapter 2

12) Fifty employees at CSC Corporation responded to a survey asking for the number of minutes they commute to work in the morning. Management would like to know the proportion of employees whose commute is less than 30 minutes. A cumulative relative frequency distribution using grouped data would provide the information to answer this question.

Answer: TRUE

Diff: 1

Keywords: cumulative relative frequency distributions

Objective: 2.2.1

13) A fast food restaurant would like to examine the wait time for customers who use the drive-thru window. The following class boundaries are appropriate to construct a frequency distribution for this data.

Number of Minutes
0-2
2-4
4-6
6-8

Answer: FALSE

Diff: 2

Keywords: frequency distribution, grouped quantitative data

Objective: 2.2.1

14) Equal-size classes refer to classes for a frequency distribution using grouped quantitative data that do not overlap.

Answer: FALSE

Diff: 1

Keywords: frequency distribution, grouped quantitative data

Objective: 2.2.1

15) Empty classes for a frequency distribution using grouped quantitative data result from class widths that are too wide.

Answer: FALSE

Diff: 1

Keywords: frequency distribution, grouped quantitative data

Objective: 2.2.1

16) If the class sizes are not equal for a frequency distribution using grouped quantitative data, patterns in the distribution could be misleading.

Answer: TRUE

Diff: 1

Keywords: frequency distribution, grouped quantitative data

Objective: 2.2.1

17) Under no circumstances should open-ended classes be used for a frequency distribution using grouped quantitative data.

Answer: FALSE

Diff: 1

Keywords: frequency distribution, grouped quantitative data

Objective: 2.2.1

18) The estimated class width for a frequency distribution using grouped quantitative data should be rounded to an integer value to make the class boundaries more readable.

Answer: TRUE

Diff: 1

Keywords: frequency distribution, grouped quantitative data

Objective: 2.2.1

19) Histograms displaying continuous data have gaps between their bars.

Answer: FALSE

Diff: 1

Keywords: histograms, continuous data

Objective: 2.2.2

20) Histograms displaying discrete data usually have gaps between their bars.

Answer: TRUE

Diff: 1

Keywords: histograms, continuous data

Objective: 2.2.2

21) Income and age are examples of data that are technically discrete but are normally displayed in a continuous format.

Answer: TRUE

Diff: 1

Keywords: discrete data, continuous data

Objective: 2.2.2

22) The cumulative percentage polygon is a line graph that plots the cumulative relative frequency distribution.

Answer: TRUE

Diff: 1

Keywords: cumulative percentage polygon

Objective: 2.2.2

23) Quantitative data are values that are categorical, describing a characteristic such as gender or level of education.

Answer: FALSE

Diff: 1

Keywords: cumulative percentage polygon

Objective: 2.2.2

## 2-6 Chapter 2

24) A histogram is the appropriate type of graph to display both quantitative and qualitative data.

Answer: FALSE

Diff: 1

Keywords: qualitative data

Objective: 2.3.1

25) Bar charts can display data either horizontally or vertically.

Answer: TRUE

Diff: 1

Keywords: bar charts

Objective: 2.3.1

26) Clustered bar charts are preferred over stacked bar charts when you are comparing data within categories, such as which team scored more points in 2009 when compared to 2010.

Answer: TRUE

Diff: 1

Keywords: clustered bar charts

Objective: 2.3.1

27) Clustered bar charts are preferred over stacked bar charts when you are displaying totals in each category, such as what team scored the most points over the two-year period.

Answer: FALSE

Diff: 1

Keywords: stacked bar charts

Objective: 2.3.1

28) Pareto charts are a specific type of bar chart used in quality control programs by businesses to graphically display the causes of problems.

Answer: TRUE

Diff: 1

Keywords: Pareto charts

Objective: 2.3.1

29) Pareto charts display the categories in an increasing order with the least problematic categories shown first.

Answer: FALSE

Diff: 2

Keywords: Pareto charts

Objective: 2.3.1

30) Pie charts are an excellent tool for comparing proportions for qualitative (categorical) data.

Answer: TRUE

Diff: 1

Keywords: pie charts

Objective: 2.3.1

31) Each category of a pie chart occupies a segment of the pie that represents the cumulative relative frequency of that category.

Answer: FALSE

Diff: 1

Keywords: pie charts

Objective: 2.3.1

32) When constructing a pie chart, all categories in the data set must be included in the pie.

Answer: TRUE

Diff: 1

Keywords: pie charts

Objective: 2.3.1

33) Choose a pie chart rather than a bar chart if you want to compare the relative sizes of the classes to one another and together they comprise all possible categories.

Answer: TRUE

Diff: 1

Keywords: pie charts

Objective: 2.3.1

34) Choose a pie chart rather than a bar chart if you want to highlight the actual data values and when the classes combined don't form a whole.

Answer: FALSE

Diff: 1

Keywords: pie charts

Objective: 2.3.1

35) Contingency tables help us identify relationships between two or more variables.

Answer: TRUE

Diff: 1

Keywords: contingency tables

Objective: 2.4.1

36) The stem and leaf display is a graphical technique that can be used to display qualitative data.

Answer: FALSE

Diff: 1

Keywords: stem and leaf display

Objective: 2.5.1

37) A stem and leaf display allows you to observe individual data values while a histogram groups data values together.

Answer: TRUE

Diff: 1

Keywords: stem and leaf display

Objective: 2.5.1

## 2-8 Chapter 2

38) The dependent variable on scatter plots is placed on the horizontal axis on the graph.

Answer: FALSE

Diff: 2

Keywords: scatter plot, independent variable

Objective: 2.6.1

39) The independent variable on scatter plots is placed on the vertical axis on the graph.

Answer: FALSE

Diff: 2

Keywords: scatter plot, independent variable

Objective: 2.6.1

40) The dependent variable in a scatter plot is influenced by changes in the independent variable.

Answer: TRUE

Diff: 2

Keywords: scatter plot, independent variable, dependent variable

Objective: 2.6.1

41) A data set is known as a times series when each data point is associated with a specific point in time.

Answer: TRUE

Diff: 1

Keywords: time series

Objective: 2.6.1

42) When graphing a time series, the convention is to place the time data on the vertical axis of the graph.

Answer: FALSE

Diff: 2

Keywords: time series

Objective: 2.6.1

43) A \_\_\_\_\_ is a table that shows the number of data observations that fall into specific intervals.

A) histogram

B) frequency distribution

C) percent polygon

D) Pareto chart

Answer: B

Diff: 1

Keywords: frequency distribution

Objective: 2.2.1

44) \_\_\_\_\_ data are values based on observations that can be counted and are typically represented by whole numbers.

- A) Discrete
- B) Continuous
- C) Nominal
- D) Time series

Answer: A

Diff: 1

Keywords: frequency distribution

Objective: 2.2.1

45) \_\_\_\_\_ are values that can take on any real numbers, including numbers that contain decimal points. This data is often the result of measuring observations rather than counting them.

- A) Discrete
- B) Cross-sectional
- C) Ordinal
- D) Continuous

Answer: D

Diff: 1

Keywords: continuous data

Objective: 2.2.1

46) A(n) \_\_\_\_\_ is a category in a frequency distribution.

- A) polygon
- B) ogive
- C) class
- D) histogram

Answer: C

Diff: 1

Keywords: class

Objective: 2.2.1

47) \_\_\_\_\_ display the proportion of observations of each class relative to the total number of observations.

- A) Frequency distributions
- B) Cumulative relative frequency distributions
- C) Relative frequency distributions
- D) Histograms

Answer: C

Diff: 1

Keywords: relative frequency distributions

Objective: 2.2.1



**2-10** Chapter 2

48) \_\_\_\_\_ totals the proportion of observations that are less than or equal to the class at which you are looking.

- A) Frequency distributions
- B) Cumulative relative frequency distributions
- C) Relative frequency distributions
- D) Histograms

Answer: B

Diff: 1

Keywords: cumulative relative frequency distributions

Objective: 2.2.1

49) A \_\_\_\_\_ is a graph showing the number of observations in each class of a frequency distribution.

- A) frequency distribution
- B) polygon
- C) relative frequency distribution
- D) histogram

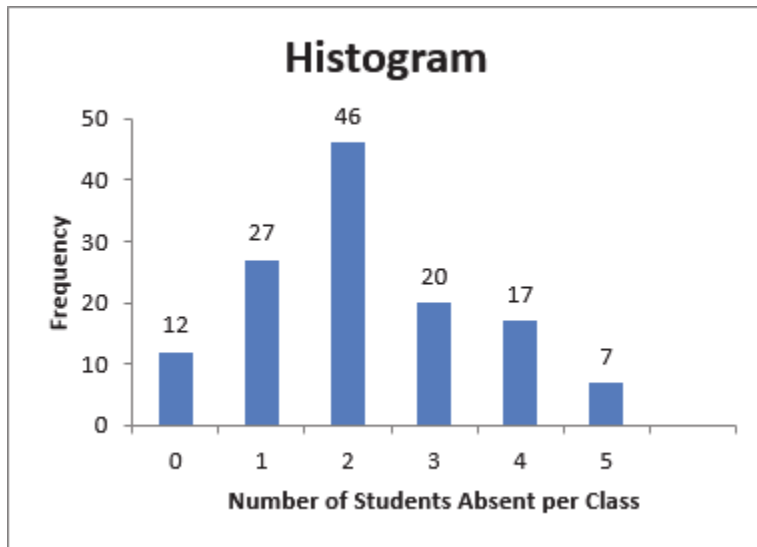
Answer: D

Diff: 1

Keywords: histogram

Objective: 2.2.2

50) A statistics professor kept attendance records and recorded the number of absent students per class. This data is displayed in the following histogram with the frequency of each number of absent students shown above the bars.



How many total classes do these data represent?

- A) 46
- B) 100
- C) 129
- D) 150

Answer: C

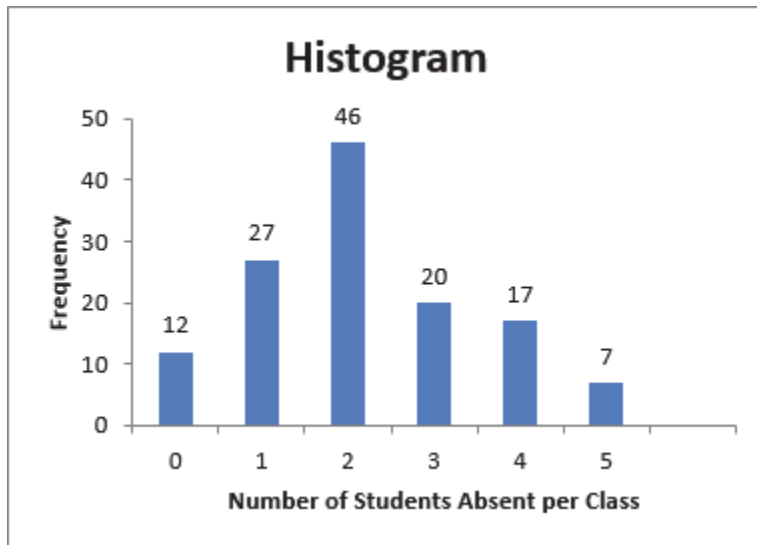
Diff: 2

Keywords: histogram

Objective: 2.2.2

2-12 Chapter 2

51) A statistics professor kept attendance records and recorded the number of absent students per class. This data is displayed in the following histogram with the frequency of each number of absent students shown above the bars.



How many statistics classes had two or fewer students absent?

- A) 9
- B) 40
- C) 42
- D) 85

Answer: D

Diff: 2

Keywords: histogram

Objective: 2.2.2

52) The class \_\_\_\_\_ is the breadth, or range, of numbers we plan to put into each class of a frequency distribution using grouped quantitative data.

- A) boundary
- B) frequency
- C) width
- D) number

Answer: C

Diff: 1

Keywords: class width, frequency distribution, grouped data

Objective: 2.2.1

53) The class \_\_\_\_\_ represent the minimum and maximum values for each class of a frequency distribution using grouped quantitative data.

- A) boundaries
- B) frequencies
- C) widths
- D) numbers

Answer: A

Diff: 1

Keywords: class boundary, frequency distribution, grouped data

Objective: 2.2.1

54) Class \_\_\_\_\_ are the number of observations for each class of a frequency distribution using grouped quantitative data.

- A) boundaries
- B) frequencies
- C) widths
- D) numbers

Answer: B

Diff: 1

Keywords: class frequency, frequency distribution, grouped data

Objective: 2.2.1

55) Which of the following is **not** a rule for constructing a frequency distribution using grouped quantitative data?

- A) Use equal-size classes.
- B) Use mutually exclusive classes.
- C) Avoid empty classes.
- D) Avoid close-ended classes.

Answer: D

Diff: 1

Keywords: frequency distribution, grouped data

Objective: 2.2.1

**2-14** Chapter 2

56) Consider the following frequency distribution.

<b>Number of Minutes</b>	<b>Frequency</b>
0 to less than 5	6
5 to less than 10	9
8 to less than 13	14
13 to less than 18	2

Which rule for constructing a frequency distribution using grouped quantitative data has been violated?

- A) Use equal-size classes.
- B) Use mutually exclusive classes.
- C) Avoid empty classes.
- D) No rule has been violated.

Answer: B

Diff: 1

Keywords: frequency distribution, grouped data

Objective: 2.2.1

57) Consider the following frequency distribution.

<b>Number of Minutes</b>	<b>Frequency</b>
0 to less than 5	3
5 to less than 10	11
10 to less than 15	10
15 to less than 20	7

Which rule for constructing a frequency distribution using grouped quantitative data has been violated?

- A) Use equal-size classes.
- B) Use mutually exclusive classes.
- C) Avoid empty classes.
- D) No rule has been violated.

Answer: D

Diff: 1

Keywords: frequency distribution, grouped data

Objective: 2.2.1

58) Consider the following frequency distribution.

Number of Customers	Frequency
0-2	10
3-5	7
6-10	12
11-15	5

Which rule for constructing a frequency distribution using grouped quantitative data has been violated?

- A) Use equal-size classes.
- B) Use mutually exclusive classes.
- C) Avoid empty classes.
- D) No rule has been violated.

Answer: A

Diff: 1

Keywords: frequency distribution, grouped data

Objective: 2.2.1

59) A data set has 60 observations with a minimum value equal to 30 and a maximum value equal to 72. The number of classes using the  $2^k \geq n$  rule is

- A) 5.
- B) 6.
- C) 7.
- D) 8.

Answer: B

Diff: 1

Keywords: frequency distribution, grouped data

Objective: 2.2.1

60) A data set has 60 observations with a minimum value equal to 30 and a maximum value equal to 72. The estimated class width using the  $2^k \geq n$  rule to determine the number of classes is

- A) 7.
- B) 9.
- C) 10.
- D) 12.

Answer: A

Diff: 1

Keywords: frequency distribution, grouped data

Objective: 2.2.1

**2-16 Chapter 2**

61) \_\_\_\_\_ classes are classes with boundaries that do not overlap.

- A) Equal-size
- B) Open-ended
- C) Mutually exclusive
- D) Close-ended

Answer: C

Diff: 1

Keywords: frequency distribution, grouped data

Objective: 2.2.1

62) The following frequency distribution displays the daily sales of muffins at Avalon Bakery.

<b>Number Sold</b>	<b>Frequency</b>
1-7	5
8-14	8
15-21	13
20-28	21
27-35	3

What is the width of each class in this distribution?

- A) 1
- B) 7
- C) 10
- D) 35

Answer: B

Diff: 1

Keywords: frequency distribution, grouped data

Objective: 2.2.1

63) The following frequency distribution displays the daily sales of muffins at Avalon Bakery.

<b>Number Sold</b>	<b>Frequency</b>
1-7	5
8-14	8
15-21	13
20-28	21
27-35	3

How many days of data are included in this frequency distribution?

- A) 25
- B) 50
- C) 75
- D) 100

Answer: B

Diff: 1

Keywords: frequency distribution, grouped data

Objective: 2.2.1

64) The following frequency distribution displays the daily sales of muffins at Avalon Bakery.

<b>Number Sold</b>	<b>Frequency</b>
1-7	5
8-14	8
15-21	13
20-28	21
27-35	3

What is the probability that between 15 to 21 muffins will be sold tomorrow?

- A) 0.26
- B) 0.36
- C) 0.44
- D) 0.50

Answer: A

Diff: 1

Keywords: frequency distribution, grouped data

Objective: 2.2.1



**2-18** Chapter 2

65) The following frequency distribution displays the daily sales of muffins at Avalon Bakery.

<b>Number Sold</b>	<b>Frequency</b>
1-7	5
8-14	8
15-21	13
20-28	21
27-35	3

What is the probability that 21 or fewer muffins will be sold tomorrow?

- A) 0.52
- B) 0.66
- C) 0.80
- D) 0.92

Answer: A

Diff: 1

Keywords: frequency distribution, grouped data

Objective: 2.2.1

66) The following frequency distribution displays the daily sales of muffins at Avalon Bakery.

<b>Number Sold</b>	<b>Frequency</b>
1-7	5
8-14	8
15-21	13
20-28	21
27-35	3

What is the probability that between 20 and 35 muffins will be sold tomorrow?

- A) 0.14
- B) 0.48
- C) 0.58
- D) 0.66

Answer: B

Diff: 1

Keywords: frequency distribution, grouped data

Objective: 2.2.1

67) The following distribution shows the frequency of daily revenue for an Italian restaurant in Wilmington, Delaware.

<b>Revenue</b>	<b>Frequency</b>
Under \$2,000	18
\$2,000 to under \$4,000	10
\$4,000 to under \$6,000	26
\$6,000 to under \$8,000	14
\$8,000 to under \$10,000	8
Over \$10,000	4

What is the width of each class for this distribution?

- A) \$10,000
- B) \$8,000
- C) \$5,000
- D) \$2,000

Answer: D

Diff: 1

Keywords: frequency distribution, grouped data

Objective: 2.2.1

68) The following distribution shows the frequency of daily revenue for an Italian restaurant in Wilmington, Delaware.

<b>Revenue</b>	<b>Frequency</b>
Under \$2,000	18
\$2,000 to under \$4,000	10
\$4,000 to under \$6,000	26
\$6,000 to under \$8,000	14
\$8,000 to under \$10,000	8
Over \$10,000	4

How many business days does this frequency distribution represent?

- A) 100
- B) 80
- C) 32
- D) 18

Answer: B

Diff: 1

Keywords: frequency distribution, grouped data

Objective: 2.2.1

**2-20** Chapter 2

69) The following distribution shows the frequency of daily revenue for an Italian restaurant in Wilmington, Delaware.

<b>Revenue</b>	<b>Frequency</b>
Under \$2,000	18
\$2,000 to under \$4,000	10
\$4,000 to under \$6,000	26
\$6,000 to under \$8,000	14
\$8,000 to under \$10,000	8
Over \$10,000	4

What is the probability that a randomly selected day will generate between \$2,000 and under \$4,000 in revenue?

A) 0.100

B) 0.125

C) 0.325

D) 0.500

Answer: B

Diff: 1

Keywords: frequency distribution, grouped data

Objective: 2.2.1

70) The following distribution shows the frequency of daily revenue for an Italian restaurant in Wilmington, Delaware.

<b>Revenue</b>	<b>Frequency</b>
Under \$2,000	18
\$2,000 to under \$4,000	10
\$4,000 to under \$6,000	26
\$6,000 to under \$8,000	14
\$8,000 to under \$10,000	8
Over \$10,000	4

What is the probability that a randomly selected day will generate under \$2,000 in revenue?

A) 0.050

B) 0.160

C) 0.225

D) 0.500

Answer: C

Diff: 1

Keywords: frequency distribution, grouped data

Objective: 2.2.1

71) The following distribution shows the frequency of daily revenue for an Italian restaurant in Wilmington, Delaware.

<b>Revenue</b>	<b>Frequency</b>
Under \$2,000	18
\$2,000 to under \$4,000	10
\$4,000 to under \$6,000	26
\$6,000 to under \$8,000	14
\$8,000 to under \$10,000	8
Over \$10,000	4

What is the probability that a randomly selected day will generate more than \$6,000 in revenue?

- A) 0.325
- B) 0.650
- C) 0.775
- D) 0.900

Answer: A

Diff: 1

Keywords: frequency distribution, grouped data

Objective: 2.2.1

72) Bins in Excel represent the \_\_\_\_\_.

- A) lower boundary of each class in a frequency distribution
- B) upper boundary of each class in a frequency distribution
- C) width of each class in a frequency distribution
- D) number of classes in a frequency distribution

Answer: B

Diff: 1

Keywords: frequency distribution, grouped data, bins

Objective: 2.2.2

73) When you want to compare the shape of two or more distributions on one graph, a \_\_\_\_\_ is your best choice

- A) frequency distribution
- B) histogram
- C) percentage polygon
- D) relative frequency distribution

Answer: C

Diff: 1

Keywords: percentage polygon

Objective: 2.2.2

2-22 Chapter 2

74) The \_\_\_\_\_ graphs the midpoint of each class as a line rather than a column.

- A) bar chart
- B) histogram
- C) scatter plot
- D) percentage polygon

Answer: D

Diff: 1

Keywords: percentage polygon

Objective: 2.2.2

75) The \_\_\_\_\_ is a line graph that plots the cumulative relative frequency distribution.

- A) ogive
- B) histogram
- C) scatter plot
- D) percentage polygon

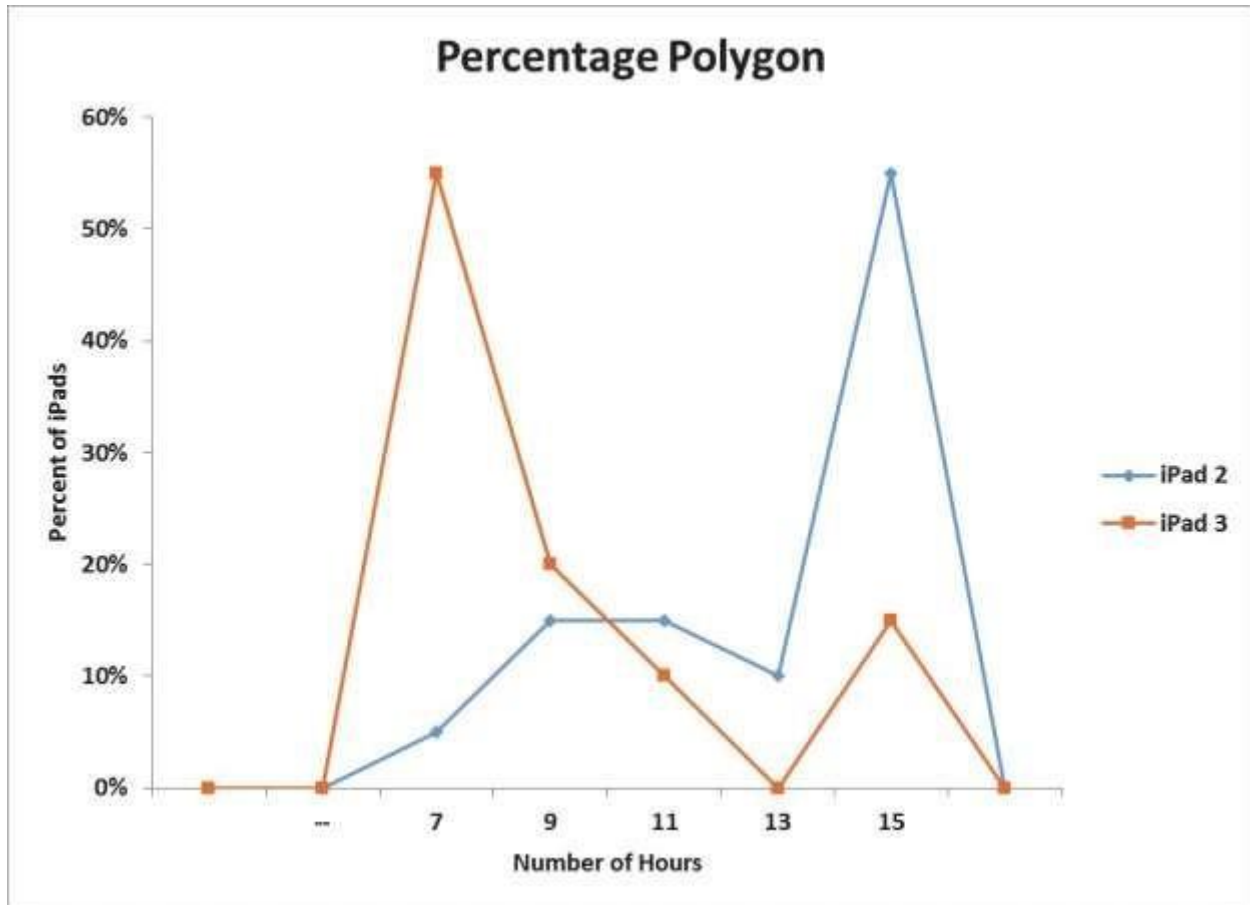
Answer: A

Diff: 1

Keywords: ogive

Objective: 2.2.2

76) The following graph is a percent polygon showing the battery life, in hours, for a sample of iPad 2s and iPad 3s. The diamond markers represent the iPad 2 battery life while the square markers represent the iPad 3 battery life. Based on this graph, which of the following statements is true?



- A) The battery life of the iPad 3 tends to be longer than the battery life of the iPad 2.
- B) The battery life of the iPad 3 tends to be about the same as the battery life of the iPad 2.
- C) The battery life of the iPad 2 tends to be longer than the battery life of the iPad 3.
- D) The difference in battery life between the iPad 2 and iPad 3 cannot be detected with this graph.

Answer: C

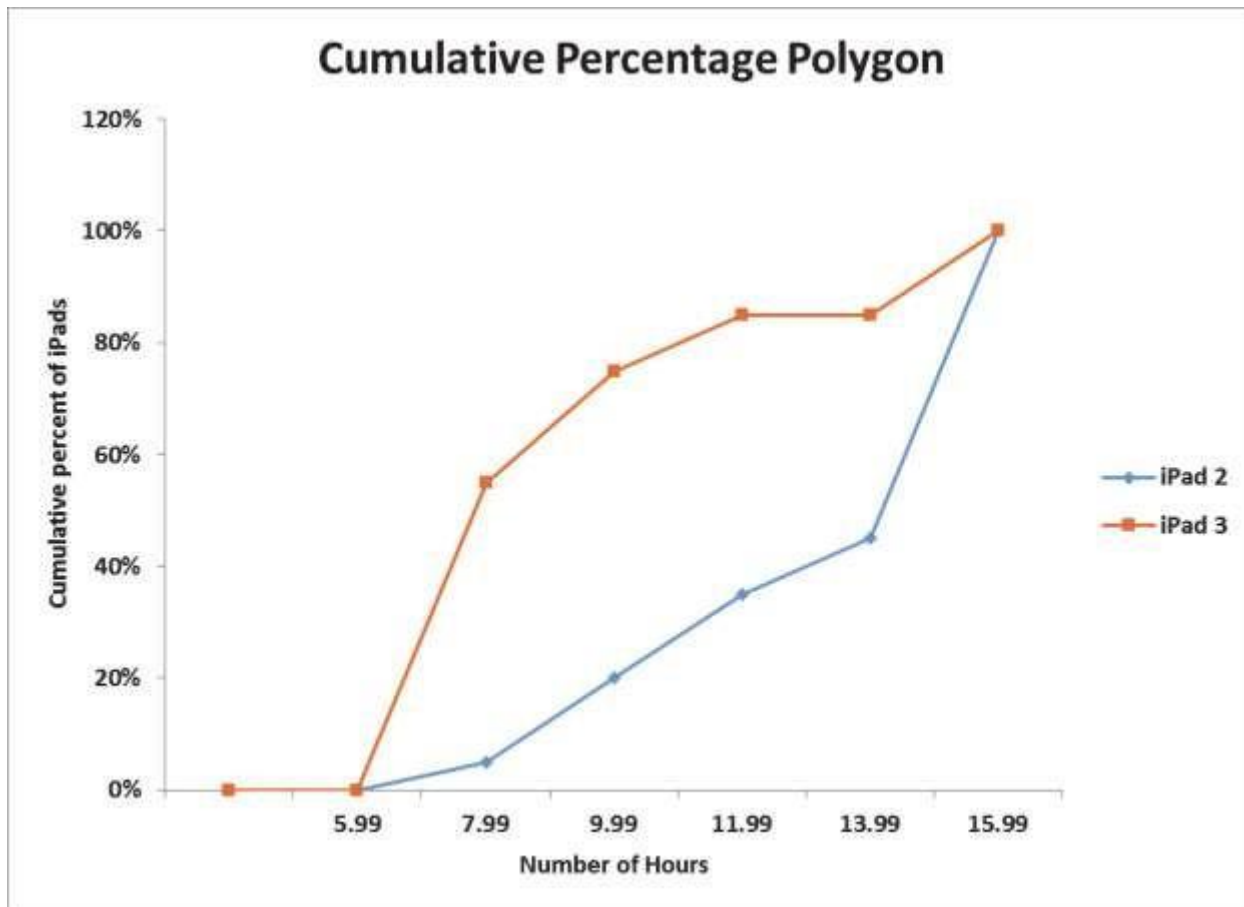
Diff: 2

Keywords: percent polygon

Objective: 2.2.2

2-24 Chapter 2

77) The following graph is a cumulative percent polygon showing the battery life, in hours, for a sample of iPad 2s and iPad 3s. The diamond markers represent the iPad 2 battery life while the square markers represent the iPad 3 battery life. Based on this graph, which of the following statements is true?



- A) Approximately 20% of the iPad 2 batteries lasted more than 10 hours.
- B) Approximately 20% of the iPad 2 batteries lasted less than 10 hours.
- C) Approximately 60% of the iPad 3 batteries lasted more than 8 hours.
- D) Approximately 80% of the iPad 3 batteries lasted less than 8 hours.

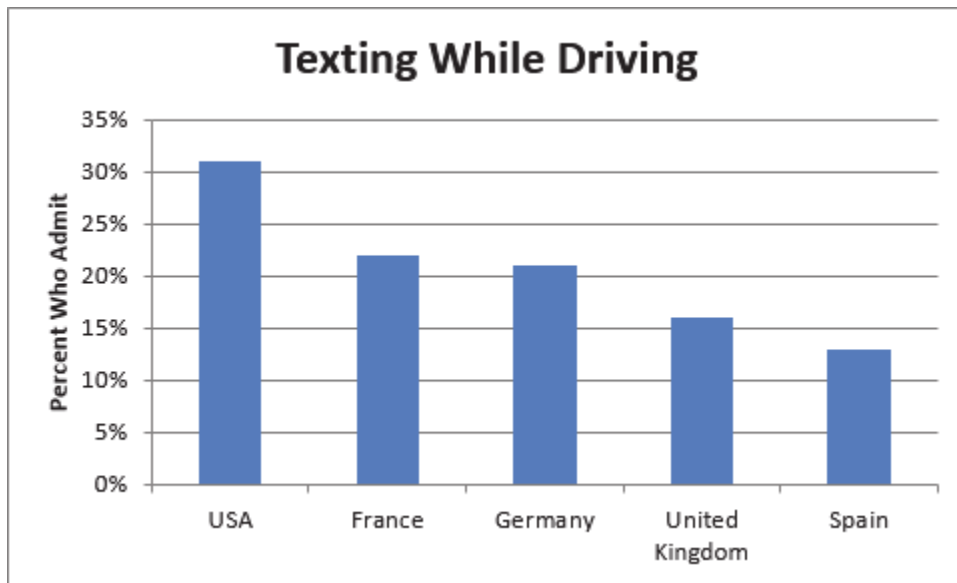
Answer: B

Diff: 2

Keywords: percent polygon

Objective: 2.2.2

78) The following chart shows the percentage of adults from various countries who admitted to texting while driving in a recent survey.



This chart is an example of a \_\_\_\_\_ bar chart.

- A) horizontal
- B) stacked
- C) clustered
- D) vertical

Answer: D

Diff: 1

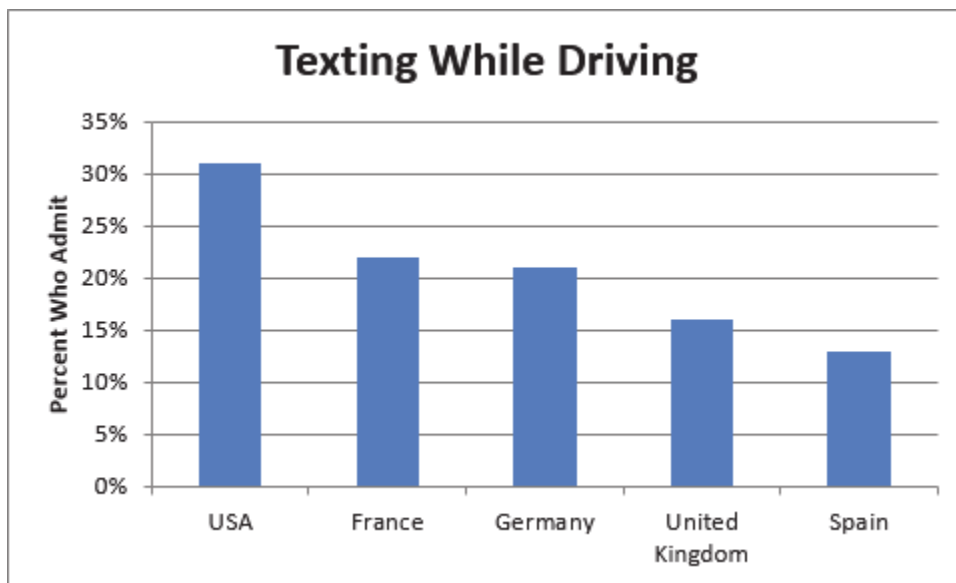
Keywords: vertical bar charts

Objective: 2.2.3



2-26 Chapter 2

79) The following chart shows the percentage of adults from various countries who admitted to texting while driving in a recent survey.



Which of the following statements is **not** correct?

- A) The USA has the highest percentage of adults who admitted to texting while driving.
- B) The United Kingdom has a higher percentage of adults who admit to texting while driving when compared to Germany.
- C) Spain has the lowest percentage of adults who admitted to texting while driving.
- D) The United Kingdom has a lower percentage of adults who admit to texting while driving when compared to France.

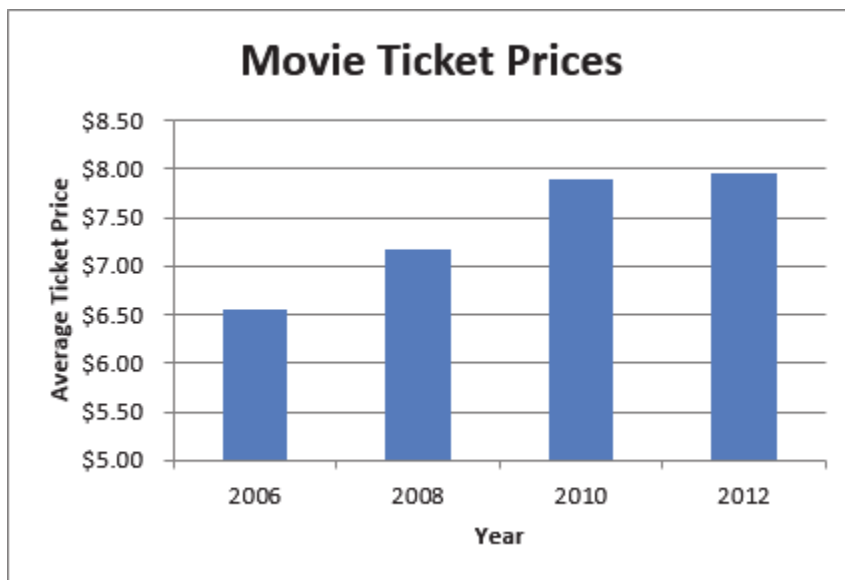
Answer: B

Diff: 1

Keywords: vertical bar charts

Objective: 2.2.3

80) The following chart shows the average movie ticket price according to a survey by the National Association of Theater Owners.



This chart is an example of a \_\_\_\_\_ chart.

- A) horizontal bar
- B) vertical bar
- C) stacked bar
- D) Pareto

Answer: B

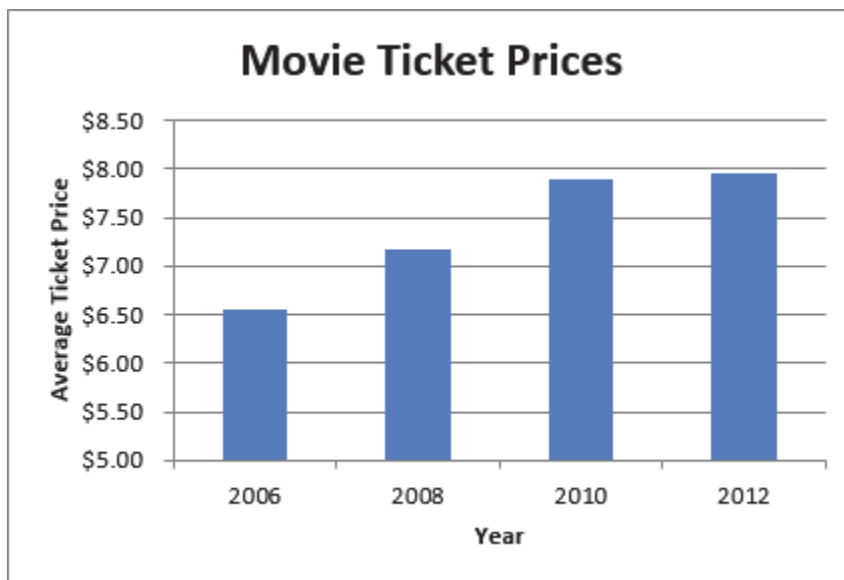
Diff: 1

Keywords: vertical bar charts

Objective: 2.2.3

2-28 Chapter 2

81) The following chart shows the average number of fast food meals consumed per year by 18- to 24-year-olds.



Which of the following statements is **not** correct?

- A) The average ticket price has decreased over time.
- B) The lowest average ticket price occurred in 2006.
- C) The highest average ticket price occurred in 2012.
- D) The average ticket price in 2010 was higher than the average ticket price in 2008.

Answer: A

Diff: 1

Keywords: vertical bar charts

Objective: 2.2.3

82) The following chart shows the average market price for five brands of cars in March 2013.



This chart is an example of a \_\_\_\_\_ bar chart.

- A) horizontal
- B) stacked
- C) clustered
- D) vertical

Answer: A

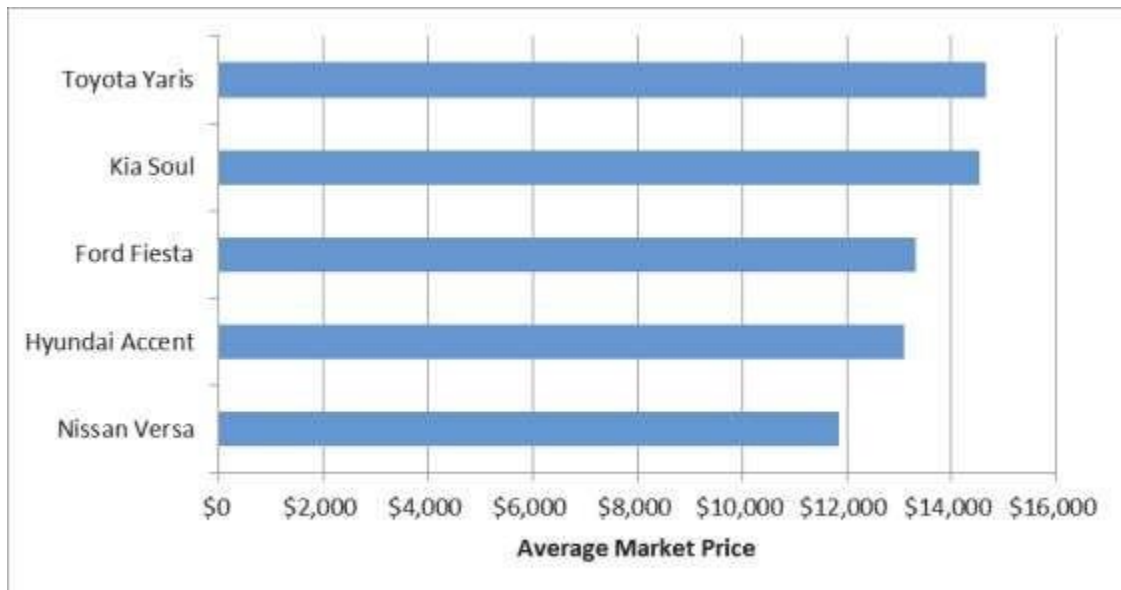
Diff: 1

Keywords: horizontal bar charts

Objective: 2.2.3

2-30 Chapter 2

83) The following chart shows the average market price for five brands of cars in March 2013.



Which of the following statements is **not** correct?

- A) The Nissan Versa has the lowest average market value.
- B) The Kia Soul has a higher average market price than the Ford Fiesta.
- C) The Hyundai Accent has a lower average market price than the Toyota Yaris.
- D) The Hyundai Accent has a lower average market price than the Nissan Versa.

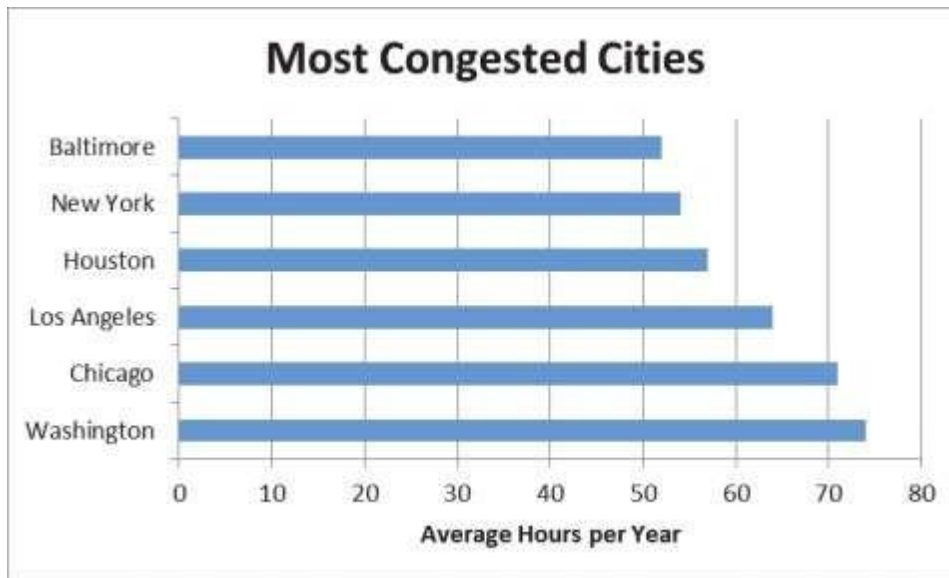
Answer: D

Diff: 1

Keywords: vertical bar charts

Objective: 2.2.3

84) The following chart shows the average number of hours commuters spend in traffic delays per year at the six most congested cities in the U.S.



This chart is an example of a \_\_\_\_\_ chart.

- A) stacked bar
- B) horizontal bar
- C) Pareto
- D) vertical bar

Answer: B

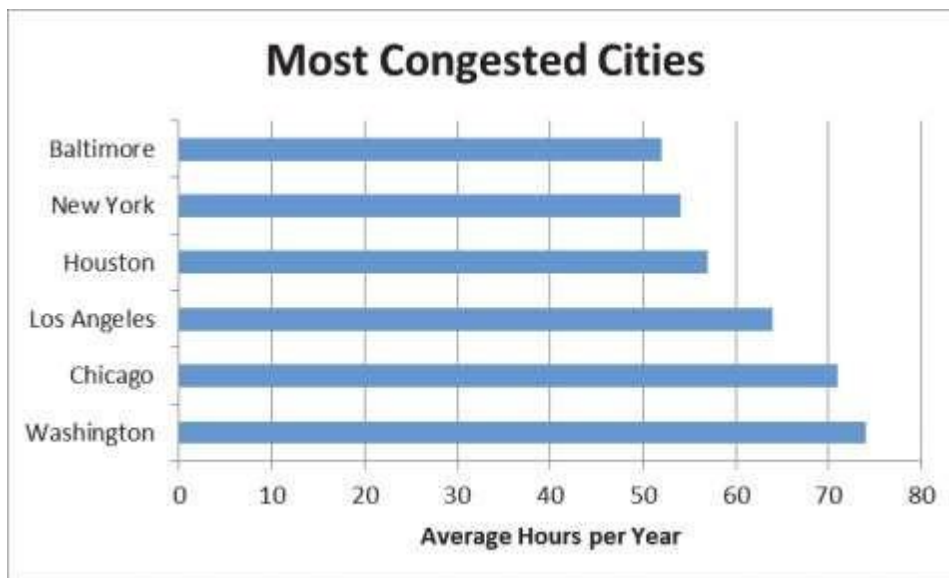
Diff: 1

Keywords: horizontal bar charts

Objective: 2.2.3

2-32 Chapter 2

85) The following chart shows the average number of hours commuters spend in traffic delays per year at the six most congested cities in the U.S.



Which of the following statements is **not** correct?

- A) Chicago commuters have the highest average number of hours spent per year in traffic delays.
- B) Baltimore commuters have the lowest average number of hours spent per year in traffic delays.
- C) Houston commuters have a higher average number of hours spent per year in traffic delays when compared to New York commuters.
- D) Los Angeles commuters have a lower average number of hours spent per year in traffic delays when compared to Washington commuters.

Answer: A

Diff: 1

Keywords: vertical bar charts

Objective: 2.2.3

86) \_\_\_\_\_ group several values side by side within the same category in a vertical direction.

- A) Stacked bar charts
- B) Clustered bar charts
- C) Pie charts
- D) Scatter plots

Answer: B

Diff: 1

Keywords: clustered bar charts

Objective: 2.2.3

87) \_\_\_\_\_group several values in a single column within the same category in a vertical direction.

- A) Stacked bar charts
- B) Clustered bar charts
- C) Pie charts
- D) Scatter plots

Answer: A

Diff: 1

Keywords: stacked bar charts

Objective: 2.2.3

88) \_\_\_\_\_ charts are a specific type of bar chart used in quality control programs by businesses to graphically display the causes of problems.

- A) Stacked bar
- B) Clustered bar
- C) Pie
- D) Pareto

Answer: D

Diff: 1

Keywords: Pareto charts

Objective: 2.2.3

89) Pareto charts also plot the cumulative relative frequency as a line on the chart. This line is known as a(n)\_\_\_\_\_.

- A) scatter plot
- B) ogive
- C) histogram
- D) frequency distribution

Answer: B

Diff: 1

Keywords: Pareto charts, ogive

Objective: 2.2.3

90) Use a \_\_\_\_\_chart if you want to compare the relative sizes of the classes in a frequency distribution and together they comprise all possible categories.

- A) horizontal bar
- B) vertical bar
- C) Pareto
- D) pie

Answer: D

Diff: 1

Keywords: pie charts

Objective: 2.2.3



## 2-34 Chapter 2

91) The following table shows the percentage of e-mails that are sent each day of the business week according to an Intermedia survey.

<b>Day</b>	<b>Percentage</b>
Monday	15%
Tuesday	23%
Wednesday	22%
Thursday	21%
Friday	19%

Which of the following best displays this data?

- A) horizontal bar chart
- B) vertical bar chart
- C) pie chart
- D) histogram

Answer: C

Diff: 1

Keywords: pie charts

Objective: 2.2.3

92) The following table shows the percentage of U.S. energy consumption according to various sources.

<b>Source</b>	<b>Percentage</b>
Petroleum	37%
Natural Gas	25%
Coal	21%
Nuclear	9%
All renewable	8%

Which of the following best displays this data?

- A) horizontal bar chart
- B) vertical bar chart
- C) pie chart
- D) histogram

Answer: C

Diff: 1

Keywords: pie charts

Objective: 2.2.3

93) \_\_\_\_\_ provide a format to display observations that have more than one value associated with them.

- A) Histograms
- B) Contingency tables
- C) Frequency distributions
- D) Pie charts

Answer: B

Diff: 1

Keywords: contingency tables

Objective: 2.2.4

94) In Excel, contingency tables are known as \_\_\_\_\_.

- A) pivot tables
- B) bins
- C) frequency distributions
- D) bar charts

Answer: A

Diff: 1

Keywords: contingency tables

Objective: 2.2.4

95) Porter Automotive is a car dealership that sells Buicks and Hondas. The following data shows the number of buyers this month according to the brand of car they purchased as well as their age group.

<b>Age</b>	<b>Buick</b>	<b>Honda</b>
Under 40 years old	6	17
40 years or older	19	8

This data is an example of a \_\_\_\_\_.

- A) histogram
- B) contingency table
- C) relative frequency distribution
- D) stem and leaf diagram

Answer: B

Diff: 1

Keywords: contingency tables

Objective: 2.2.4

2-36 Chapter 2

96) Porter Automotive is a car dealership that sells Buicks and Hondas. The following data shows the number of buyers this month according to the brand of car they purchased as well as their age group.

Age	Buick	Honda
Under 40 years old	6	17
40 years or older	19	8

The percentage of buyers 40 years or older who purchased a Honda is\_\_\_\_\_.

- A) 12%
- B) 16%
- C) 34%
- D) 38%

Answer: B

Diff: 1

Keywords: contingency tables

Objective: 2.2.4

97) Porter Automotive is a car dealership that sells Buicks and Hondas. The following data shows the number of buyers this month according to the brand of car they purchased as well as their age group.

Age	Buick	Honda
Under 40 years old	6	17
40 years or older	19	8

The percentage of buyers who are under 40 years old in this data is\_\_\_\_\_.

- A) 20%
- B) 46%
- C) 50%
- D) 54%

Answer: B

Diff: 2

Keywords: contingency tables

Objective: 2.2.4

98) Porter Automotive is a car dealership that sells Buicks and Hondas. The following data shows the number of buyers this month according to the brand of car they purchased as well as their age group.

Age	Buick	Honda
Under 40 years old	6	17
40 years or older	19	8

Which one of the following statements is true based on the data?

- A) There are more Buick owners than Honda owners in this data.
- B) Honda owners tend to be older than Buick owners.
- C) There are fewer Buick owners than Honda owners in this data.
- D) Buick owners tend to be older than Honda owners.

Answer: D

Diff: 2

Keywords: contingency tables

Objective: 2.2.4

99) A stem and leaf display most resembles a \_\_\_\_\_.

- A) histogram
- B) contingency table
- C) relative frequency distribution
- D) pie chart

Answer: A

Diff: 1

Keywords: stem and leaf display

Objective: 2.2.5

100) Consider the following stem and leaf display.

```
3 | 1 1 1 4 5
4 | 4 6 7
5 | 0 0 4 5 6 6 8 9
6 | 1 3 3 6
```

Which data value occurs most often?

- A) 1
- B) 5
- C) 31
- D) 59

Answer: C

Diff: 1

Keywords: stem and leaf display

Objective: 2.2.5

**2-38** Chapter 2

101) Consider the following stem and leaf display.

```
3 | 1 1 1 4 5
4 | 4 6 7
5 | 0 0 4 5 6 6 8 9
6 | 1 3 3 6
```

Which of the following statements is correct?

- A) There are a total of 10 data values in this data set.
- B) The data value that occurs most often is 50.
- C) This largest data value is 59.
- D) The class 50-59 contains the most values.

Answer: D

Diff: 1

Keywords: stem and leaf display

Objective: 2.2.5

102) Consider the following stem and leaf display.

```
1(0) | 2 4 4
1(5) | 6 6 7 8
2(0) | 0 0 1 1 1 2 2
2(5) | 5 5 7 8
3(0) | 0 1 3 4
```

Which data value occurs most often?

- A) 1
- B) 21
- C) 22
- D) 200

Answer: B

Diff: 1

Keywords: stem and leaf display

Objective: 2.2.5

103) Consider the following stem and leaf display.

1(0) | 2 4 4  
1(5) | 6 6 7 8  
2(0) | 0 0 1 1 1 2 2  
2(5) | 5 5 7 8  
3(0) | 0 1 3 4

Which of the following statements is correct?

- A) There are a total of 10 data values in this data set.
- B) The data value that occurs most often is 22.
- C) This largest data value is 34.
- D) The class 15-19 contains the most values.

Answer: C

Diff: 1

Keywords: stem and leaf display

Objective: 2.2.5

104) \_\_\_\_\_ provide a picture of the relationship between two data points that are paired together.

- A) Scatter plots
- B) Pareto charts
- C) Histograms
- D) Pie charts

Answer: A

Diff: 1

Keywords: scatter plots

Objective: 2.2.6

105) A \_\_\_\_\_ chart is a special type of scatter plot in which the data points in the scatter plot are connected with a line.

- A) bar
- B) Pareto
- C) line
- D) pie

Answer: C

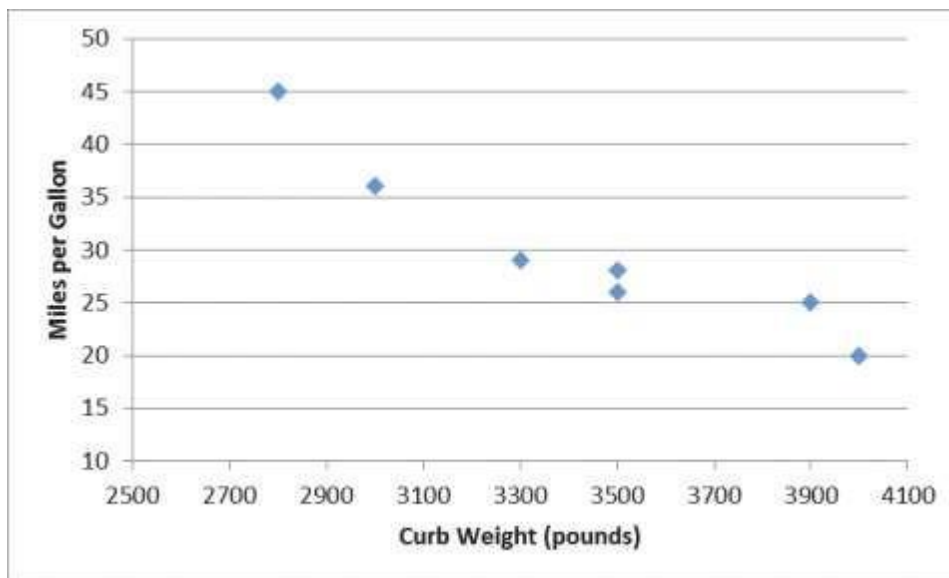
Diff: 1

Keywords: scatter plot, line chart

Objective: 2.2.6

2-40 Chapter 2

106) The following graph shows the curb weight of seven cars, in pounds, along with their corresponding highway miles per gallon.



This graph is an example of a\_\_\_\_\_.

- A) line chart
- B) scatter plot
- C) Pareto chart
- D) histogram

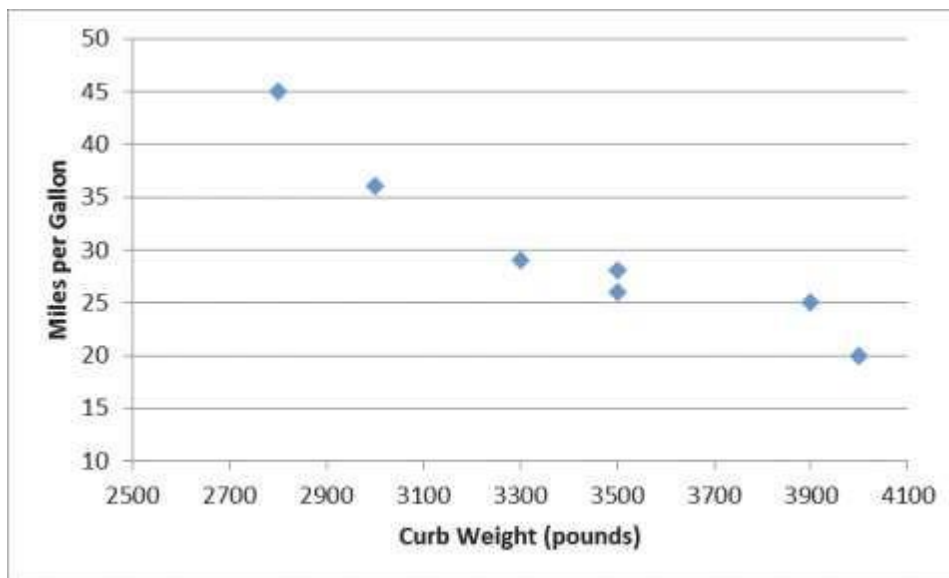
Answer: B

Diff: 1

Keywords: scatter plots

Objective: 2.2.6

107) The following graph shows the curb weight of seven cars, in pounds, along with their corresponding highway miles per gallon.



Which one of the following statements is correct?

- A) Curb weight is the dependent variable in the graph.
- B) Miles per gallon is the independent variable in the graph.
- C) As the curb weight increases, the highway miles per gallon tend to decrease.
- D) As the curb weight increases, the highway miles per gallon tend to increase.

Answer: C

Diff: 1

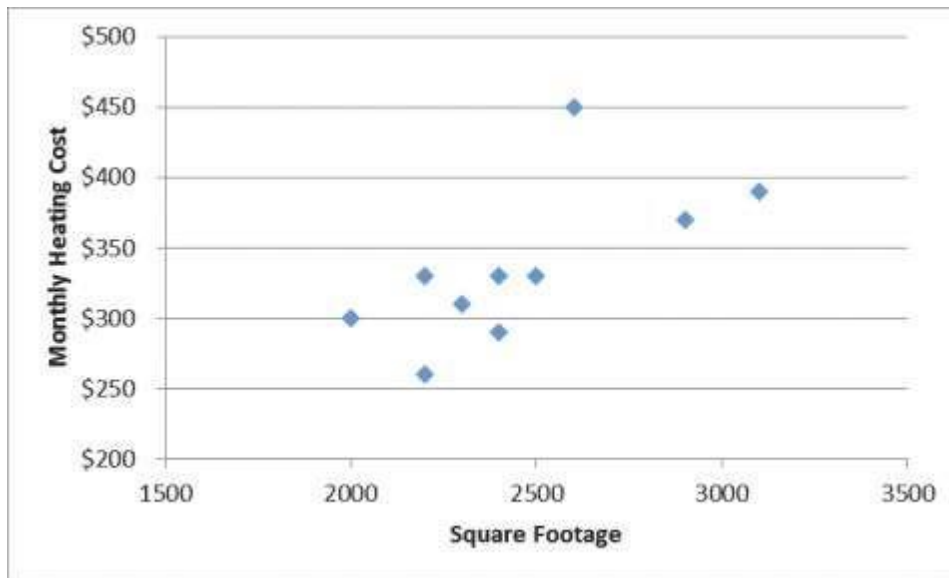
Keywords: scatter plots

Objective: 2.2.6



2-42 Chapter 2

108) The following graph shows the square footage of 10 homes along with their corresponding heating cost for the most recent month.



This graph is an example of a \_\_\_\_\_.

- A) line chart
- B) horizontal bar chart
- C) Pareto chart
- D) scatter plot

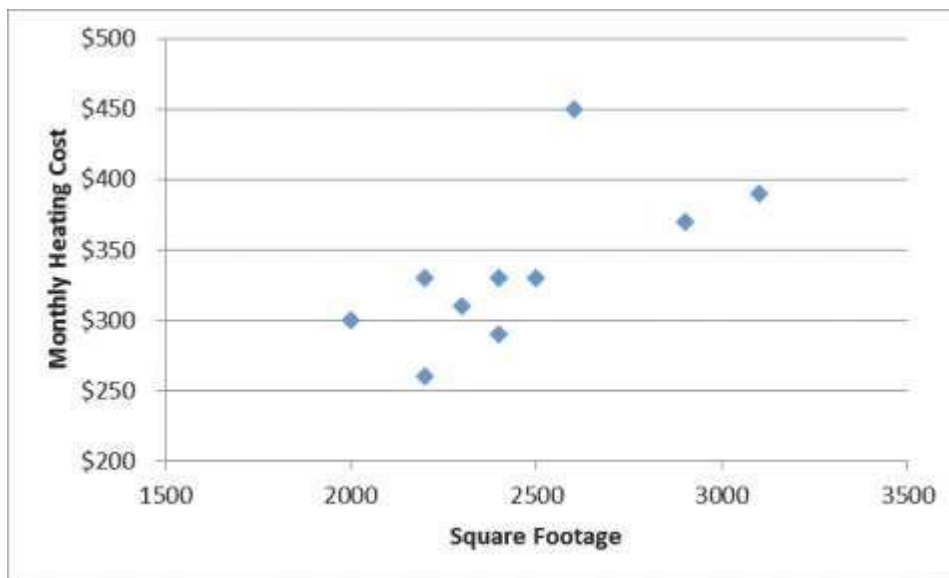
Answer: D

Diff: 1

Keywords: scatter plots

Objective: 2.2.6

109) The following graph shows the square footage of 10 homes along with their corresponding heating cost for the most recent month.



Which one of the following statements is **not** correct?

- A) Monthly heating cost is the dependent variable in the graph.
- B) Square footage is the independent variable in the graph.
- C) As the square footage of the home increases, the monthly heating cost tends to increase.
- D) As the square footage of the home increases, the monthly heating cost tends to decrease.

Answer: D

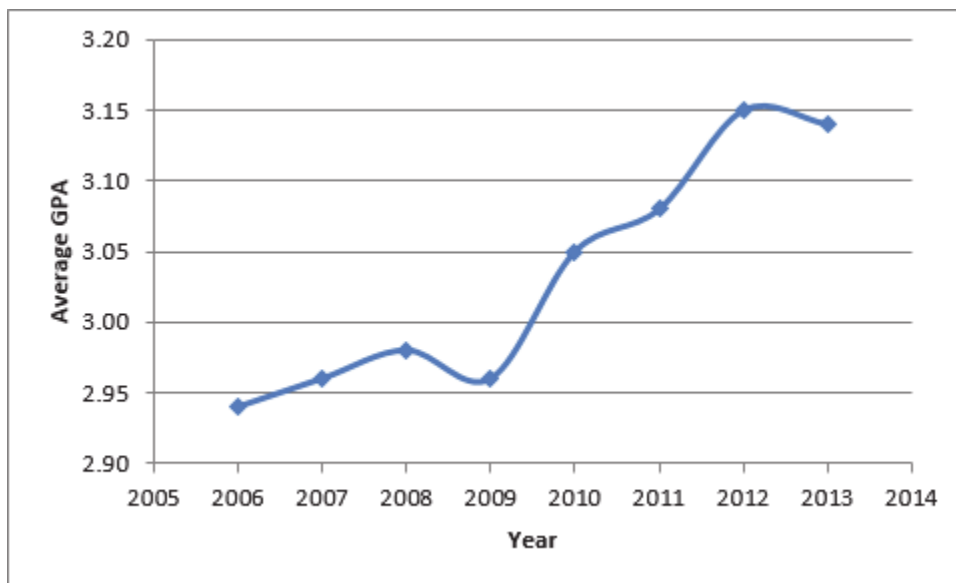
Diff: 1

Keywords: scatter plots

Objective: 2.2.6

2-44 Chapter 2

110) The following graph shows the average grade point average for a particular college from 2006 until 2013.



This graph is an example of a\_\_\_\_\_.

- A) line chart
- B) vertical bar chart
- C) Pareto chart
- D) histogram

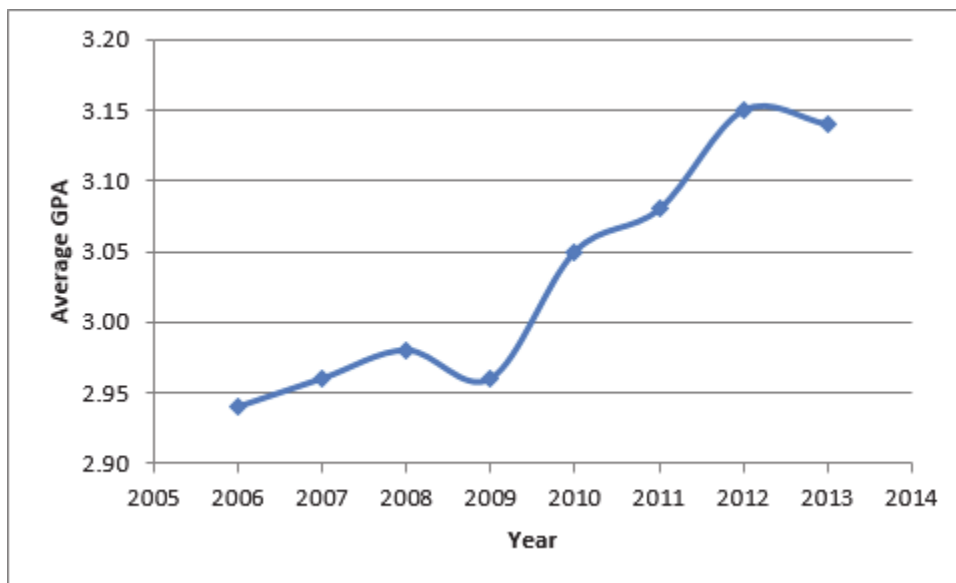
Answer: A

Diff: 1

Keywords: line chart

Objective: 2.2.6

111) The following graph shows the average grade point average for a particular college from 2006 until 2013.



Which one of the following statements is correct?

- A) Average GPA is the dependent variable in the graph.
- B) Year is the dependent variable in the graph.
- C) Historically, the Average GPA of the college tends to decrease.
- D) There appears to be no relationship between Year and Average GPA.

Answer: A

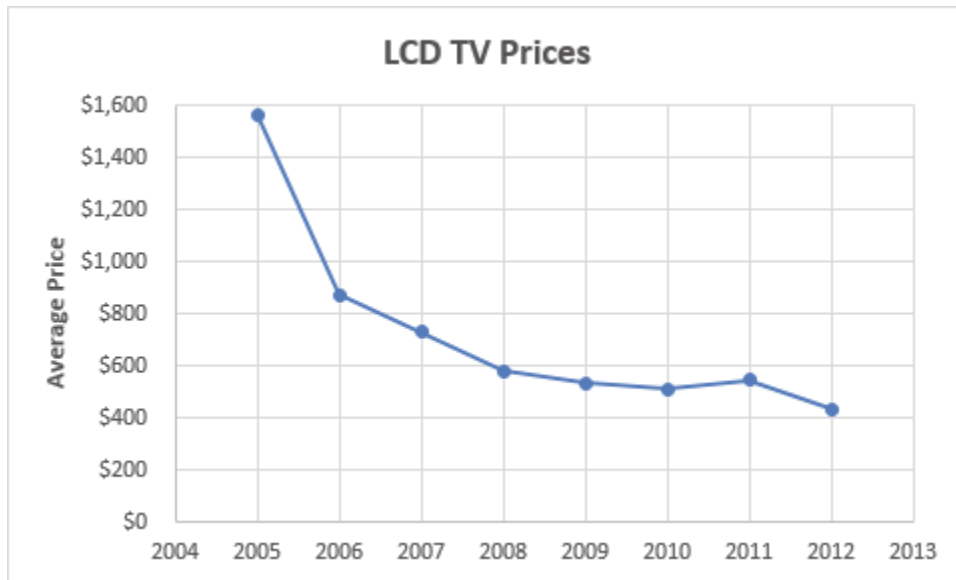
Diff: 1

Keywords: line chart

Objective: 2.2.6

2-46 Chapter 2

112) The following graph shows the average price of LCD TVs from 2005 until 2012.



This graph is an example of a\_\_\_\_\_.

- A) histogram
- B) vertical bar chart
- C) Pareto chart
- D) line chart

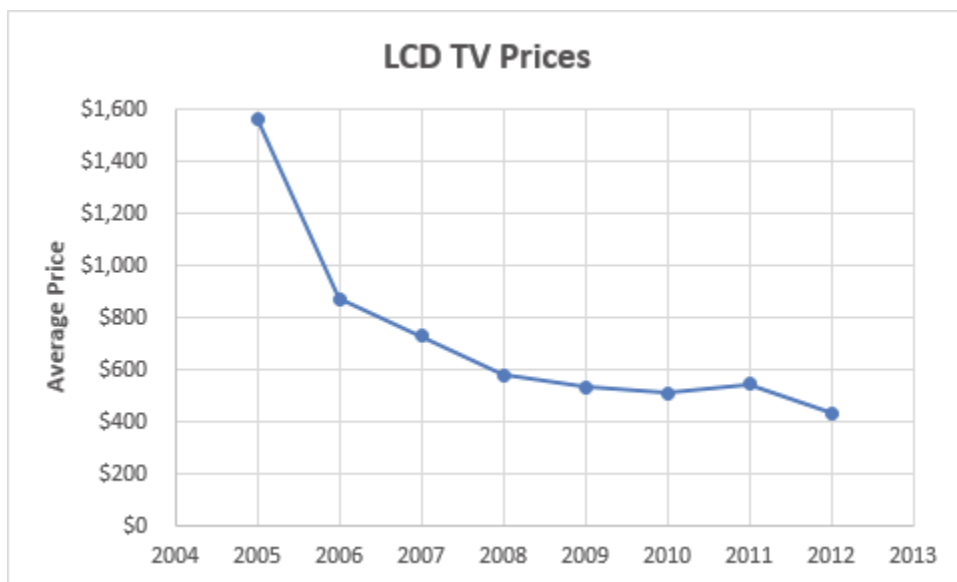
Answer: D

Diff: 1

Keywords: line chart

Objective: 2.2.6

113) The following graph shows the average price of LCD TVs from 2005 until 2012.



Which one of the following statements is correct?

- A) Year is the dependent variable in the graph.
- B) Average Price is the independent variable in the graph.
- C) Historically, the average price of LCD TVs tends to increase.
- D) Historically, the average price of LCD TVs tends to decrease.

Answer: D

Diff: 1

Keywords: scatter plots

Objective: 2.2.6

2-48 Chapter 2

114) The following data shows the number of students that came to office hours per day for a particular faculty member.

0 0 0 0 0 0 0 0 0 0  
 0 0 0 0 0 0 0 0 1 1  
 1 1 1 1 1 1 1 1 2 2  
 2 2 2 2 3 3 3 3 4 4

Construct a frequency distribution for this data.

Answer:

Number of Students	Frequency
0	18
1	10
2	6
3	4
4	2
Total	40

Diff: 1

Keywords: frequency distribution

Objective: 2.2.1

115) The following data shows the number of students that came to office hours per day for a particular faculty member.

0 0 0 0 0 0 0 0 0 0  
 0 0 0 0 0 0 0 0 1 1  
 1 1 1 1 1 1 1 1 2 2  
 2 2 2 2 3 3 3 3 4 4

Construct a relative frequency distribution for this data and determine the probability that one student will come to office hours today.

Answer:

Number of Students	Frequency	Relative Frequency
0	18	0.45
1	10	0.25
2	6	0.15
3	4	0.10
4	2	0.05
Total	40	1.00

$P(x = 1) = 0.25$

Diff: 1

Keywords: relative frequency distributions

Objective: 2.2.1

116) The following data shows the number of students that came to office hours per day for a particular faculty member.

0    0    0    0    0    0    0    0    0    0  
 0    0    0    0    0    0    0    0    1    1  
 1    1    1    1    1    1    1    1    2    2  
 2    2    2    2    3    3    3    3    4    4

Construct a cumulative relative frequency distribution for this data and determine the probability that fewer than three students will come to office hours today.

Answer:

<b>Number of Students</b>	<b>Frequency</b>	<b>Relative Frequency</b>	<b>Cumulative Relative Frequency</b>
0	18	0.45	0.45
1	10	0.25	0.70
2	6	0.15	0.85
3	4	0.10	0.95
4	2	0.05	1.00
<b>Total</b>	<b>40</b>	<b>1.00</b>	

$$P(x < 3) = 0.85$$

Diff: 1

Keywords: cumulative relative frequency distributions

Objective: 2.2.1



**2-50** Chapter 2

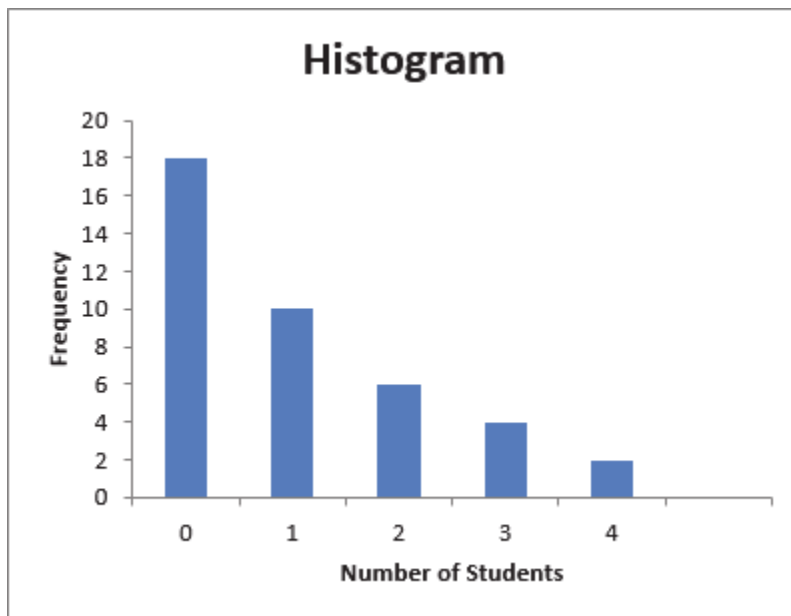
117) The following data shows the number of students that came to office hours per day for a particular faculty member.

0    0    0    0    0    0    0    0    0    0  
0    0    0    0    0    0    0    0    1    1  
1    1    1    1    1    1    1    1    2    2  
2    2    2    2    3    3    3    3    4    4

Construct a histogram for this data.

Answer:

<b>Number of Students</b>	<b>Frequency</b>
0	18
1	10
2	6
3	4
4	2
Total	40



Diff: 1

Keywords: frequency distribution

Objective: 2.2.2

118) The following data show the number of pairs of men's New Balance sneakers that were sold over the last 25 weeks at a discount shoe store.

1      4      6      6      8      8      9      11      11      11      12      12      14  
 14     14     15     17     17     17     19     19     20     21     24     24

Construct a frequency distribution for this data.

Answer: Set  $k = 5$  because  $2^5 = 32 \geq 25$ .

Estimated Class Width =  $\frac{24-1}{5} \approx 4.6$

Number of Pairs	Frequency
1-5	2
6-10	5
11-15	9
16-20	6
21-25	3
Total	25

Diff: 1

Keywords: frequency distribution, grouped data

Objective: 2.2.1

2-52 Chapter 2

119) The following data show the number of pairs of men's New Balance sneakers that were sold over the last 25 weeks at a discount shoe store.

1      4      6      6      8      8      9      11      11      11      12      12      14  
 14    14    15    17    17    17    19    19    20    21    24    24

Construct a relative frequency distribution for this data and determine the probability that between 6 to 10 pairs of New Balance shoes will be sold next week.

Answer: Set  $k = 5$  because  $2^5 = 32 \geq 25$

$$\text{Estimated Class Width} = \frac{24 - 1}{5} \approx 4.6$$

Number of Pairs	Frequency	Relative Frequency
1-5	2	0.08
6-10	5	0.20
11-15	9	0.36
16-20	6	0.24
21-25	3	0.12
Total	25	1.00

$$(6 \leq x < 10) \quad 0.20P$$

Diff: 1

Keywords: relative frequency distribution, grouped data

Objective: 2.2.1

120) The following data show the number of pairs of men's New Balance sneakers that were sold over the last 25 weeks at a discount shoe store.

1     4     6     6     8     8     9     11     11     11     12     12     14  
 14    14    15    17    17    17    19    19    20    21    24    24

Construct a cumulative relative frequency distribution for this data and determine the probability that 15 or fewer pairs of New Balance shoes will be sold next week.

Answer: Set  $k = 5$  because  $2^5 = 32 \geq 25$

Estimated Class Width =  $\frac{24 - 1}{5} \approx 4.6$

Number of Pairs	Frequency	Relative Frequency	Cumulative Relative Frequency
1-5	2	0.08	0.08
6-10	5	0.20	0.28
11-15	9	0.36	0.64
16-20	6	0.24	0.88
21-25	3	0.12	1.00
Total	25	1.00	

$(15) 0.64 P_{x \leq}$

Diff: 1

Keywords: relative frequency distribution, grouped data

Objective: 2.2.1

## 2-54 Chapter 2

121) The following data show the number of pairs of men's New Balance sneakers that were sold over the last 25 weeks at a discount shoe store.

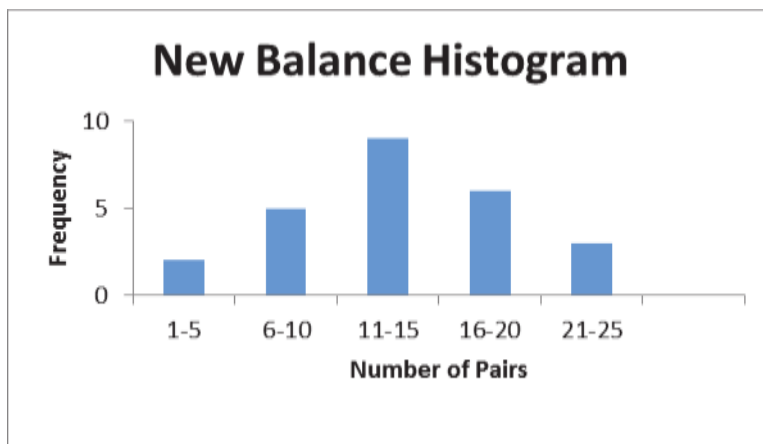
1      4      6      6      8      8      9      11      11      11      12      12      14  
14    14    15    17    17    17    19    19    20    21    24    24

Construct a histogram for this data.

Answer: Set  $k = 5$  because  $2^5 = 32 \geq 25$

Estimated Class Width =  $\frac{24 - 1}{5} \approx 4.6$

Number of Pairs	Frequency
1-5	2
6-10	5
11-15	9
16-20	6
21-25	3
Total	25



Diff: 1

Keywords: relative frequency distribution, grouped data

Objective: 2.2.2

122) The following data show the monthly rental for a random sample of one-bedroom apartments in York, Pennsylvania.

\$600 \$615 \$660 \$660 \$675 \$680 \$690 \$700 \$720 \$725  
 \$755 \$760 \$775 \$775 \$780 \$780 \$780 \$785 \$810 \$840

Construct a frequency distribution for this data.

Answer: Set  $k = 5$  because  $2^5 = 32 \geq 20$ .

Estimated Class Width =  $\frac{\$840 - \$600}{5} \approx \$48$  \$50

Monthly Rent	Frequency
\$600 to under \$650	2
\$650 to under \$700	5
\$700 to under \$750	3
\$750 to under \$800	8
\$800 to under \$850	2
Total	20

Diff: 1

Keywords: frequency distribution, grouped data

Objective: 2.2.1

123) The following data show the monthly rental for a random sample of one-bedroom apartments in York, Pennsylvania.

\$600 \$615 \$660 \$660 \$675 \$680 \$690 \$700 \$720 \$725  
 \$755 \$760 \$775 \$775 \$780 \$780 \$780 \$785 \$810 \$840

Construct a relative frequency distribution for this data and determine the probability a randomly selected one-bedroom apartment will rent between \$700 and less than \$750 per month.

Answer: Set  $k = 5$  because  $2^5 = 32 \geq 20$ .

Estimated Class Width =  $\frac{\$840 - \$600}{5} \approx \$48$  \$50

Monthly Rent	Frequency	Relative Frequency
\$600 to under \$650	2	0.10
\$650 to under \$700	5	0.25
\$700 to under \$750	3	0.15
\$750 to under \$800	8	0.40
\$800 to under \$850	2	0.10
Total	20	1.00

$P(\$700 \leq x < \$750) = 0.15$

Diff: 1

Keywords: relative frequency distribution, grouped data

Objective: 2.2.1

**2-56 Chapter 2**

124) The following data show the monthly rental for a random sample of one-bedroom apartments in York, Pennsylvania.

\$600 \$615 \$660 \$660 \$675 \$680 \$690 \$700 \$720 \$725  
 \$755 \$760 \$775 \$775 \$780 \$780 \$780 \$785 \$810 \$840

Construct a cumulative relative frequency distribution for this data and determine the probability a randomly selected one-bedroom apartment will rent for less than \$700 per month.

Answer: Set  $k = 5$  because  $2^5 = 32 \geq 20$ .

Estimated Class Width =  $\frac{\$840 - \$600}{5} \approx \$48 \approx \$50$

<b>Monthly Rent</b>	<b>Frequency</b>	<b>Relative Frequency</b>	<b>Cumulative Relative Frequency</b>
\$600 to under \$650	2	0.10	0.10
\$650 to under \$700	5	0.25	0.35
\$700 to under \$750	3	0.15	0.50
\$750 to under \$800	8	0.40	0.90
\$800 to under \$850	2	0.10	1.00
<b>Total</b>	<b>20</b>	<b>1.00</b>	

$P(x < \$700) = 0.35$

Diff: 1

Keywords: cumulative relative frequency distributions, grouped data

Objective: 2.2.1

125) The following data show the monthly rental for a random sample of one-bedroom apartments in York, Pennsylvania.

\$600 \$615 \$660 \$660 \$675 \$680 \$690 \$700 \$720 \$725  
 \$755 \$760 \$775 \$775 \$780 \$780 \$780 \$785 \$810 \$840

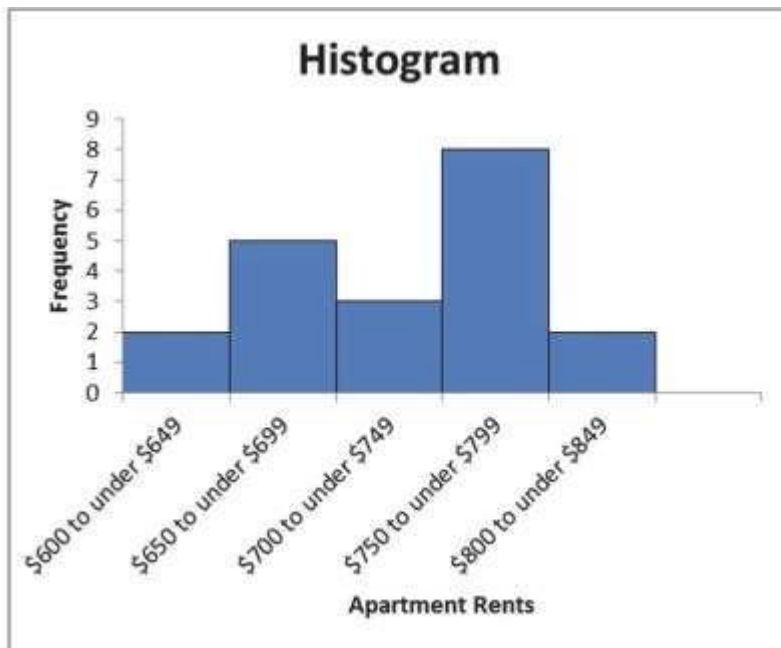
Construct a histogram for this data.

Answer:

Set  $k = 5$  because  $2^5 = 32 \geq 20$

Estimated Class Width =  $\frac{\$840 - \$600}{5} \approx \$48 \approx \$50$

Monthly Rent	Frequency
\$600 to under \$650	2
\$650 to under \$700	5
\$700 to under \$750	3
\$750 to under \$800	8
\$800 to under \$850	2
Total	20



Diff: 1

Keywords: frequency distribution, grouped data

Objective: 2.2.2



2-58 Chapter 2

126) The following table shows the number of points scored by the Green Bay Packers and the Detroit Lions of the National Football League over 15 recent seasons.

Green Bay

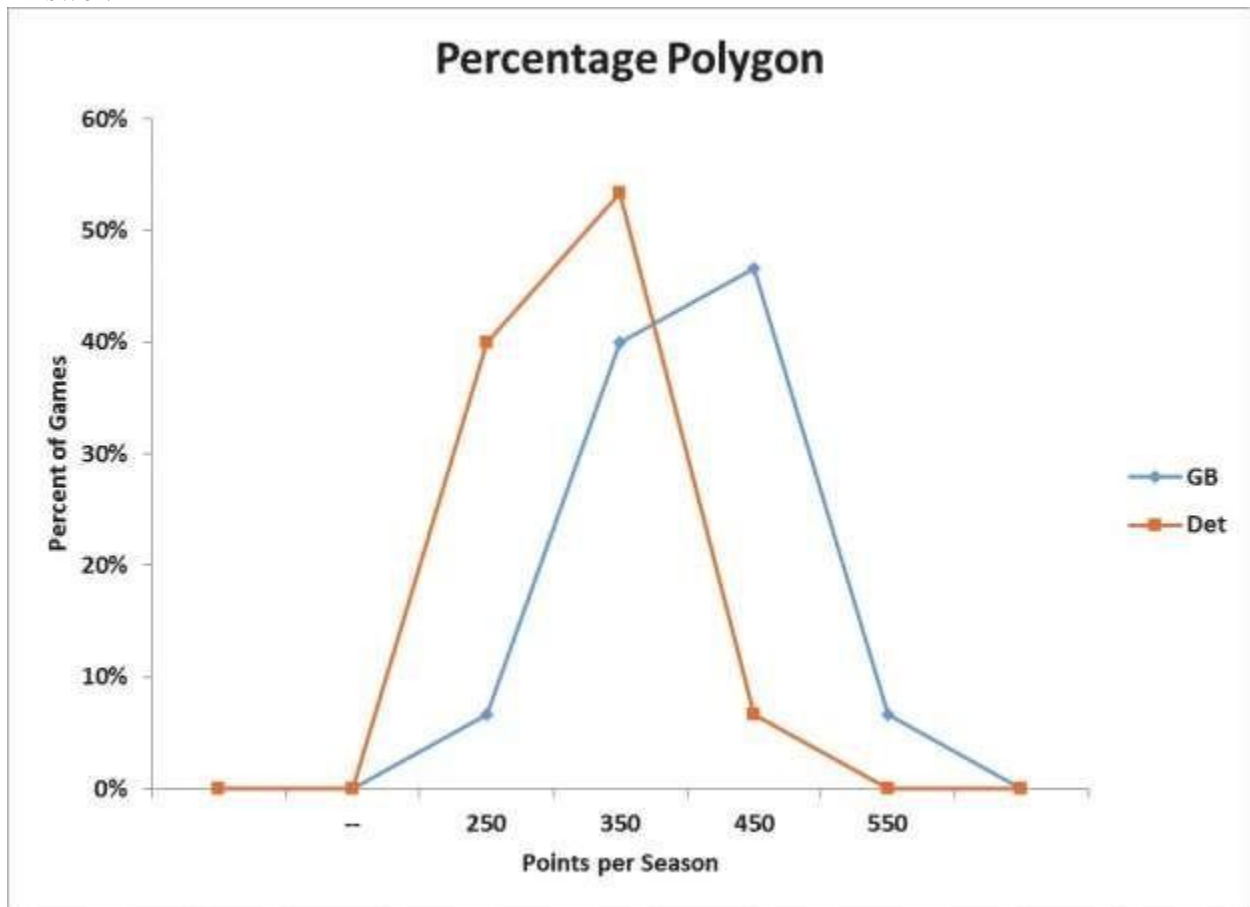
560 388 461 419 435 301 298 424  
442 398 390 353 357 408 422

Detroit

474 362 262 268 346 305 254 296  
270 306 270 307 322 306 379

Use four classes, each with a class width of 100. Start classes with 201-300, 301-400, and so on, and construct a percentage polygon. What conclusions can you draw comparing these two teams?

Answer:



Green Bay tended to score more points per season than Detroit during this time span.

Diff: 2

Keywords: percent polygon

Objective: 2.2.2

127) The following table shows the number of points scored by the Green Bay Packers and the Detroit Lions of the National Football League over 15 recent seasons.

Green Bay

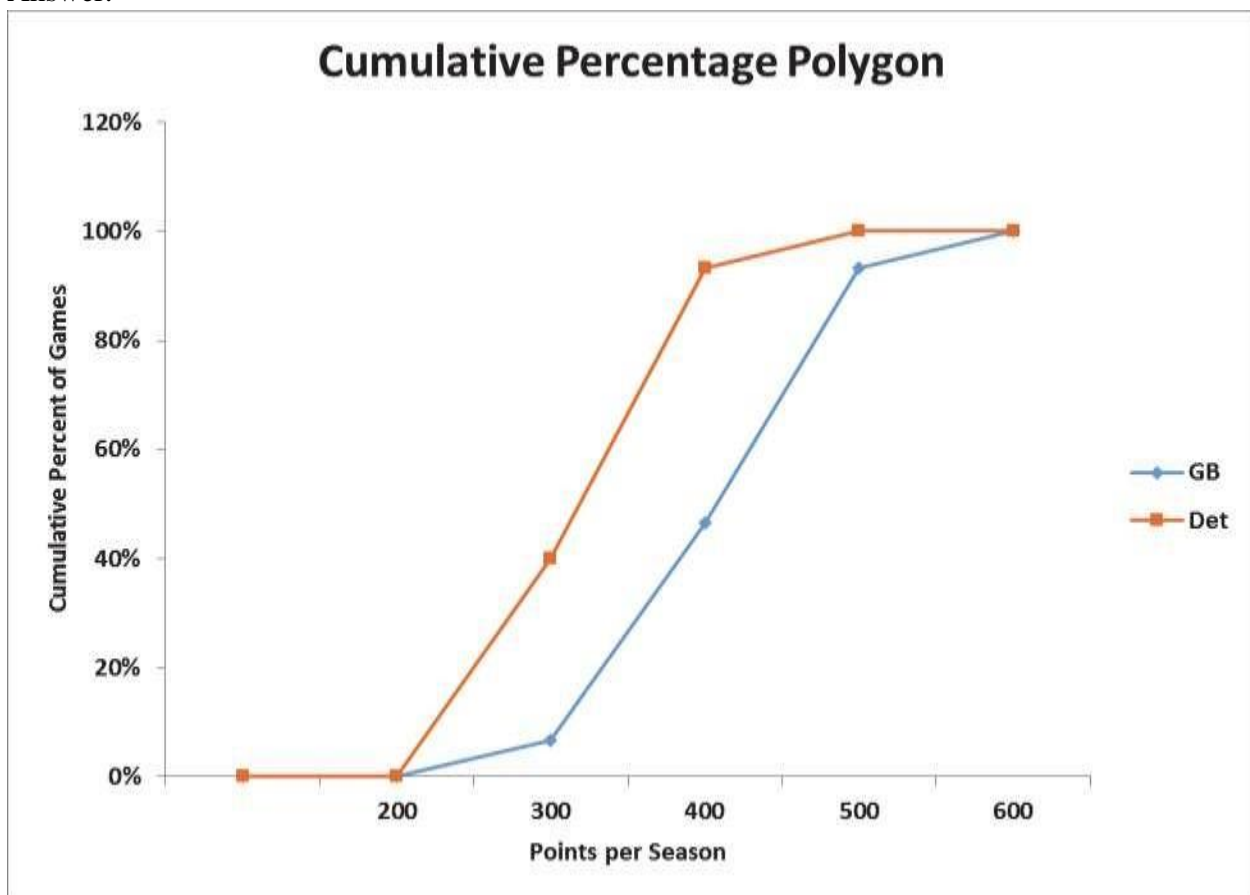
560	388	461	419	435	301	298	424
442	398	390	353	357	408	422	

Detroit

474	362	262	268	346	305	254	296
270	306	270	307	322	306	379	

Use four classes, each with a class width of 100. Start classes with 201-300, 301-400, and so on, and construct a cumulative percentage polygon. What conclusions can you draw comparing these two teams?

Answer:



Green Bay tended to score more points per season than Detroit during this time span.

Diff: 2

Keywords: cumulative percentage polygon

Objective: 2.2.2

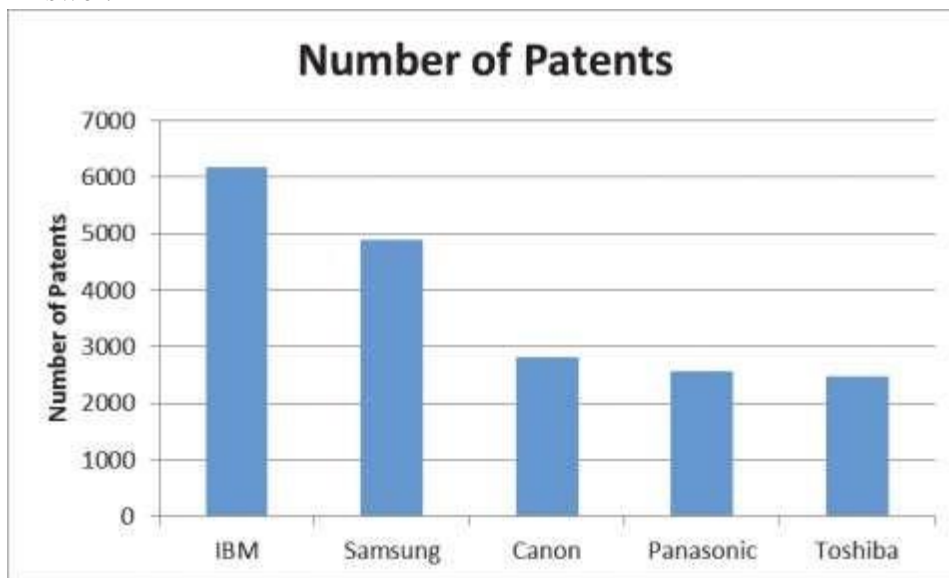
2-60 Chapter 2

128) The following table shows the number of patents that various corporations filed in a recent year.

Company	Number of Patents
IBM	6,180
Samsung	4,894
Canon	2,821
Panasonic	2,559
Toshiba	2,483

Construct the type of chart that would be most appropriate if the goal was to compare the number of patents among companies.

Answer:



Diff: 2

Keywords: bar charts

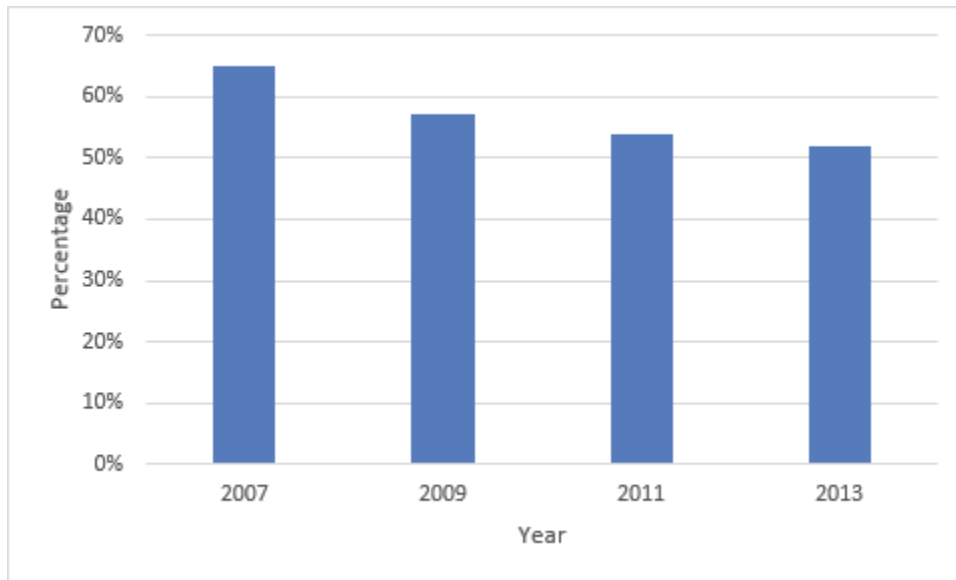
Objective: 2.2.3

129) The following table shows the percentage of adults invested in stocks through 401(k)s or mutual funds from a Gallup survey.

Year	Percentage
2007	65%
2009	57%
2011	54%
2013	52%

Construct the type of chart that would be most appropriate if the goal was to compare the percentages over time.

Answer:



Diff: 2

Keywords: bar charts

Objective: 2.2.3

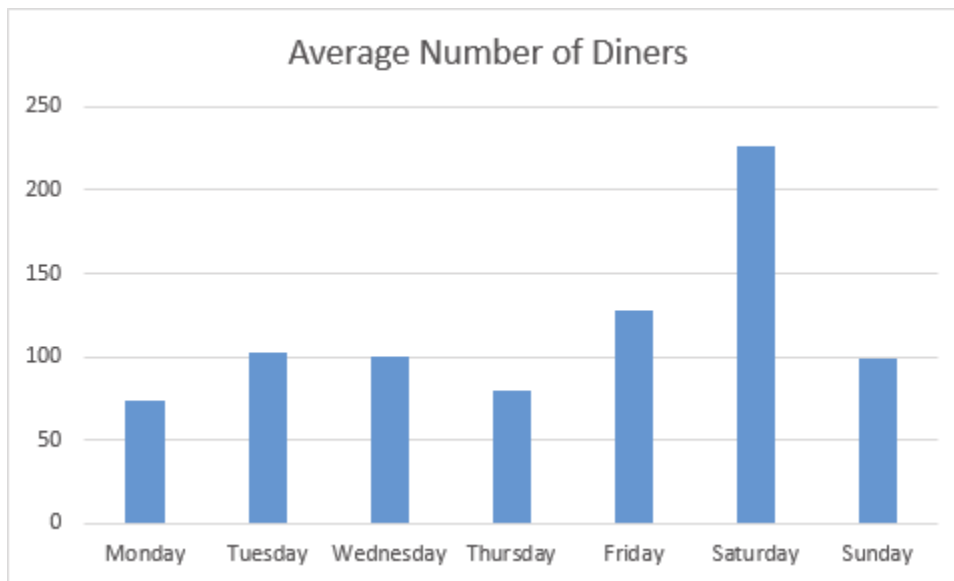
2-62 Chapter 2

130) The following table shows the average number of diners at a restaurant during each day of the week.

Day	Average Number of Diners
Monday	73
Tuesday	102
Wednesday	100
Thursday	79
Friday	128
Saturday	227
Sunday	99

Construct the type of chart that would be most appropriate if the goal was to compare the number of diners during the week.

Answer:



Diff: 2

Keywords: bar charts

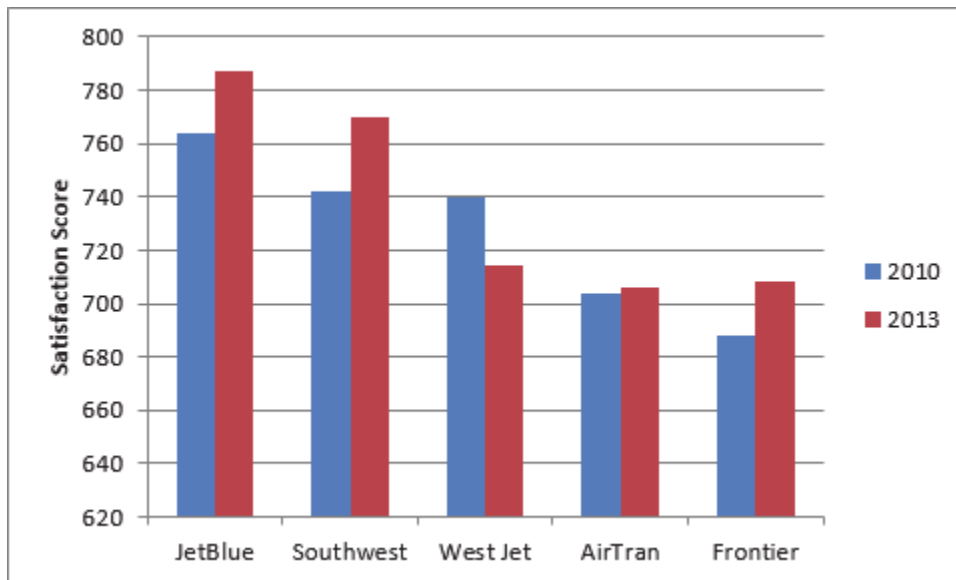
Objective: 2.2.3

131) The following table shows customer satisfaction scores for five airlines in 2010 and 2013.

<b>Airline</b>	<b>2010</b>	<b>2013</b>
JetBlue	764	787
Southwest	742	770
West Jet	740	714
AirTran	704	706
Frontier	688	708

Construct the type of chart that would be most appropriate if the goal was to investigate changes in satisfaction scores for each airline between the two years.

Answer:



Diff: 1

Keywords: clustered bar charts

Objective: 2.2.3

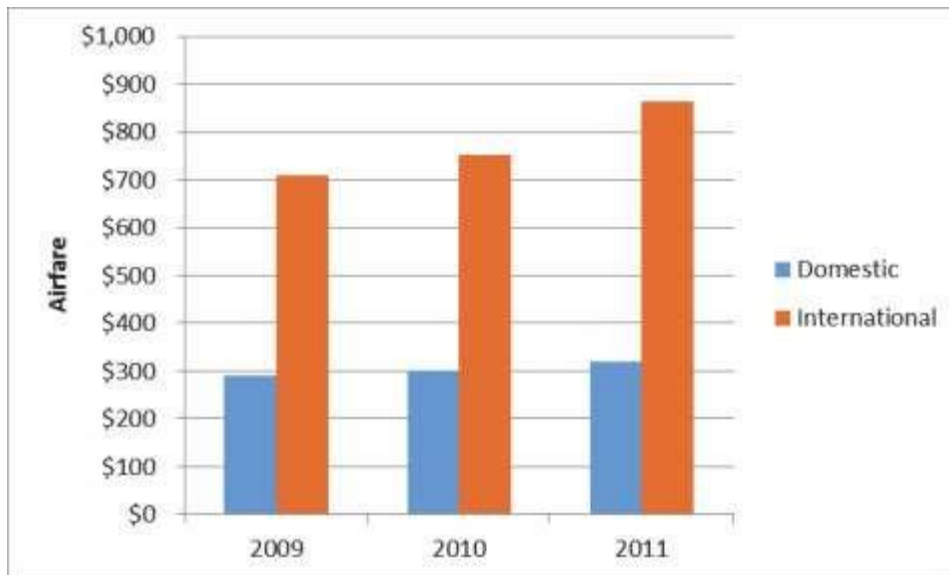
2-64 Chapter 2

132) The following table shows the average roundtrip airfare for domestic and international flights for each of three years.

Year	Domestic	International
2009	\$291	\$710
2010	\$302	\$753
2011	\$320	\$863

Construct the type of chart that would be most appropriate if the goal was to compare the domestic and international airfare.

Answer:



Diff: 2

Keywords: clustered bar charts

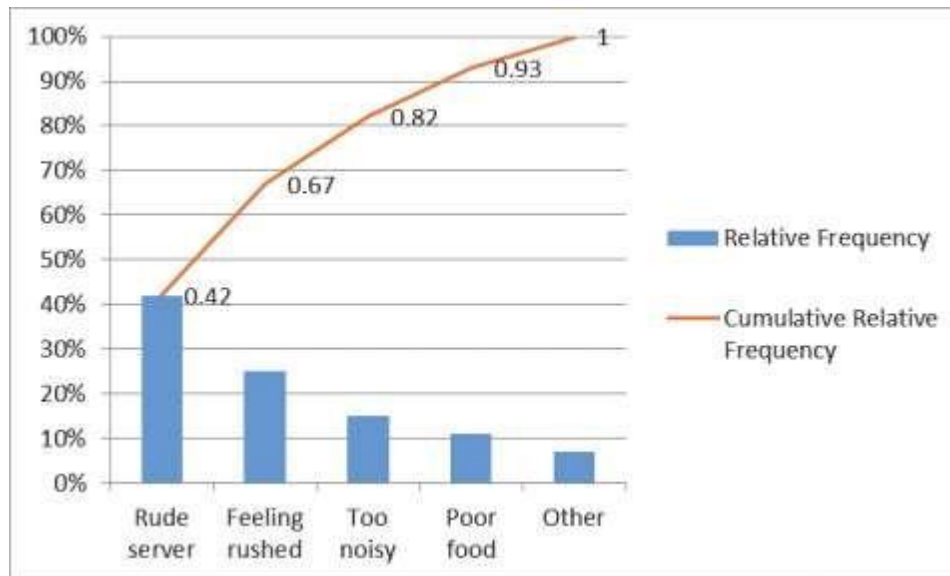
Objective: 2.2.3

133) The following table shows the number of complaints recorded at a restaurant over the past several years.

Complaint	Frequency
Rude server	42
Feeling rushed	25
Too noisy	15
Poor food	11
Other	7

Construct a Pareto chart to display this data.

Answer:



Diff: 2

Keywords: Pareto charts

Objective: 2.2.3



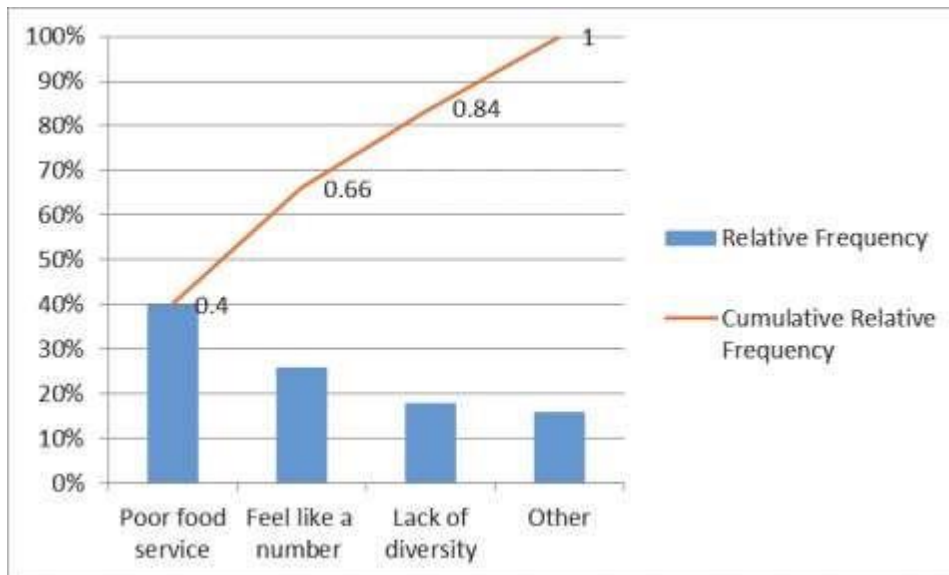
2-66 Chapter 2

134) The following table shows the number of complaints recorded at a college from the student body this past school year.

Complaint	Frequency
Poor food service	20
Feel like a number	13
Lack of diversity	9
Other	8

Construct a Pareto chart to display this data.

Answer:



Diff: 2

Keywords: Pareto charts

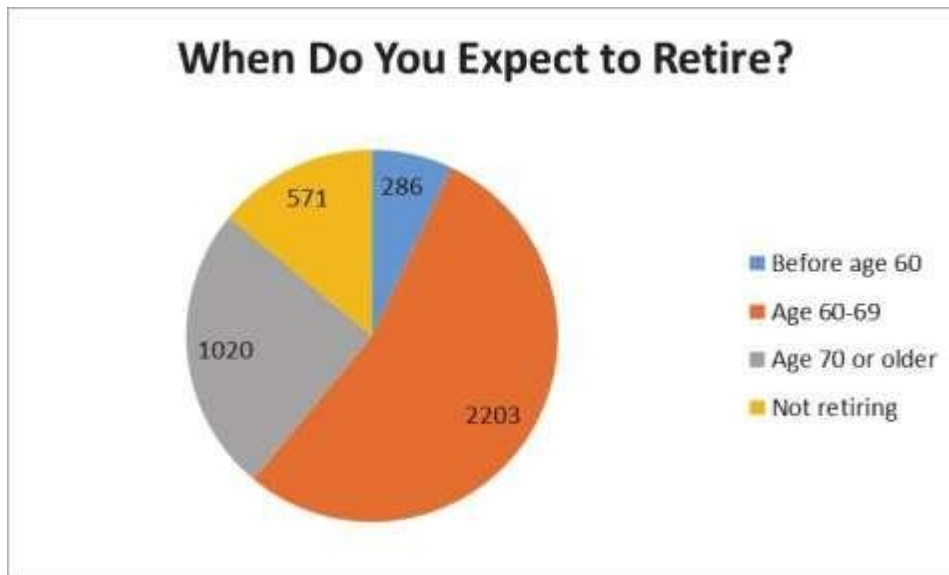
Objective: 2.2.3

135) A survey of 4,080 workers was asked when they expected to retire. The following table shows the frequency distribution of the respondents.

<b>Response</b>	<b>Frequency</b>
Before age 60	286
Age 60-69	2,203
Age 70 or older	1,020
Not retiring	571

Construct a chart that best displays this data.

Answer:



Diff: 2

Keywords: pie charts

Objective: 2.2.3

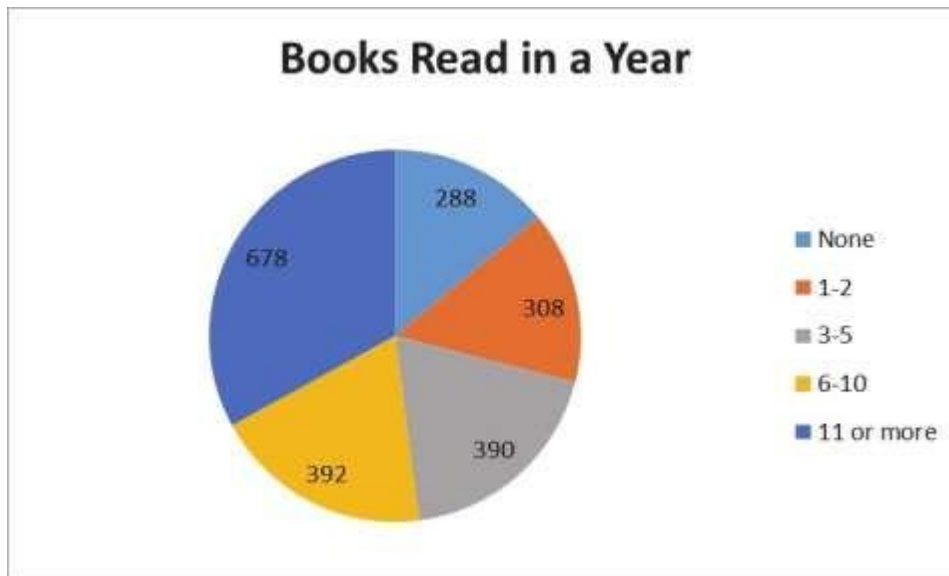
**2-68** Chapter 2

136) A survey of 2,056 adults was asked how many books they typically read in a year. The following table shows the frequency distribution of the respondents.

<b>Response</b>	<b>Frequency</b>
None	288
1-2	308
3-5	390
6-10	392
11 or more	678

Construct a chart that best displays this data.

Answer:



Diff: 2

Keywords: pie charts

Objective: 2.2.3

137) Costco is a warehouse store that has two types of membership —standard and executive. The following table shows the gender and type of membership of the last 20 customers at a particular store.

<b>Membership</b>	<b>Gender</b>	<b>Membership</b>	<b>Gender</b>
standard	male	standard	female
executive	female	standard	male
standard	female	standard	female
executive	male	standard	male
standard	male	standard	female
executive	male	executive	female
standard	male	executive	female
executive	female	executive	male
standard	male	executive	female
executive	female	executive	female

Construct a contingency table for this data.

Answer:

	Standard	Executive
Female	4	7
Male	6	3

Diff: 1

Keywords: contingency tables

Objective: 2.2.4

2-70 Chapter 2

138) Chris is a photographer and sells two types of photography for consignment in an art store — landscapes and flower close-ups. She also sells each in three print sizes — 8x10, 11x14, and 13x19 inches. The following table shows the number of prints of each type and size that have recently sold.

Type	Size	Type	Size
landscape	13x19	flower	11x14
landscape	11x14	landscape	11x14
flower	11x14	landscape	8x10
flower	8x10	flower	8x10
landscape	13x19	landscape	11x14
flower	8x10	landscape	13x19
flower	11x14	flower	11x14
flower	13x19	landscape	11x14
landscape	13x19	landscape	13x19

Construct a contingency table for this data.

Answer:

	Landscape	Flower
8x10	1	3
11x14	4	4
13x19	5	1

Diff: 1

Keywords: contingency tables

Objective: 2.2.4

139) The following data represents the high ambient temperature for a particular city over the past 16 days.

52    56    56    58    59    60    62    65  
69    73    73    74    76    76    77    78

Construct a stem and leaf display for this data.

Answer:

5 | 2 6 6 8 9

6 | 0 2 5 9

7 | 3 3 4 6 6 7 8

Diff: 1

Keywords: stem and leaf display

Objective: 2.2.5

140) The following data represents the satisfaction scores from customers at a hotel on a 1-100 scale.

77	77	81	81	82	83	83	84	84	87
87	89	90	92	92	92	93	93	96	97

Construct a stem and leaf display for this data, splitting the stems in half.

Answer:

7(5) | 7 7

8(0) | 1 1 2 3 3 4 4

8(5) | 7 7 9

9(0) | 0 2 2 2 3 3

9(5) | 6 7

Diff: 1

Keywords: stem and leaf display

Objective: 2.2.5

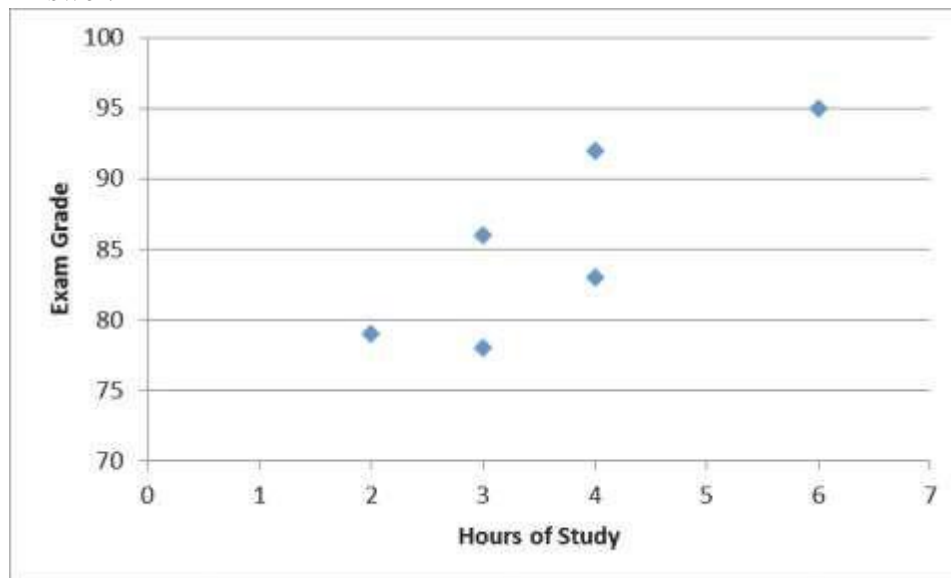
2-72 Chapter 2

141) The following table shows the number of hours that six students studied for their statistics exam and their corresponding exam grades.

Hours of Study	Exam Grade
3	86
6	95
4	92
4	83
3	78
2	79

Construct a scatter plot to display this data. What conclusions can be drawn?

Answer:



It appears that the students who studied longer, in general, did better on the exam.

Diff: 1

Keywords: scatter plots

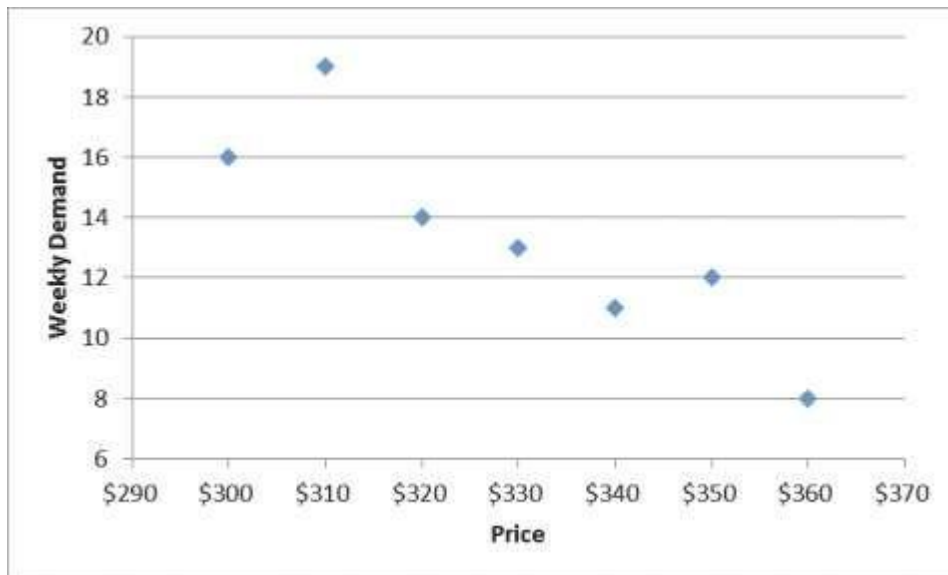
Objective: 2.2.6

142) The following table shows the weekly demand for a particular digital camera and the corresponding price of that camera during the week.

Weekly Demand	Price
16	\$300
19	\$310
14	\$320
13	\$330
11	\$340
12	\$350
8	\$360

Construct a scatter plot to display this data. What conclusions can be drawn?

Answer:



It appears that as the price increases, demand for the camera decreases.

Diff: 1

Keywords: scatter plots

Objective: 2.2.6



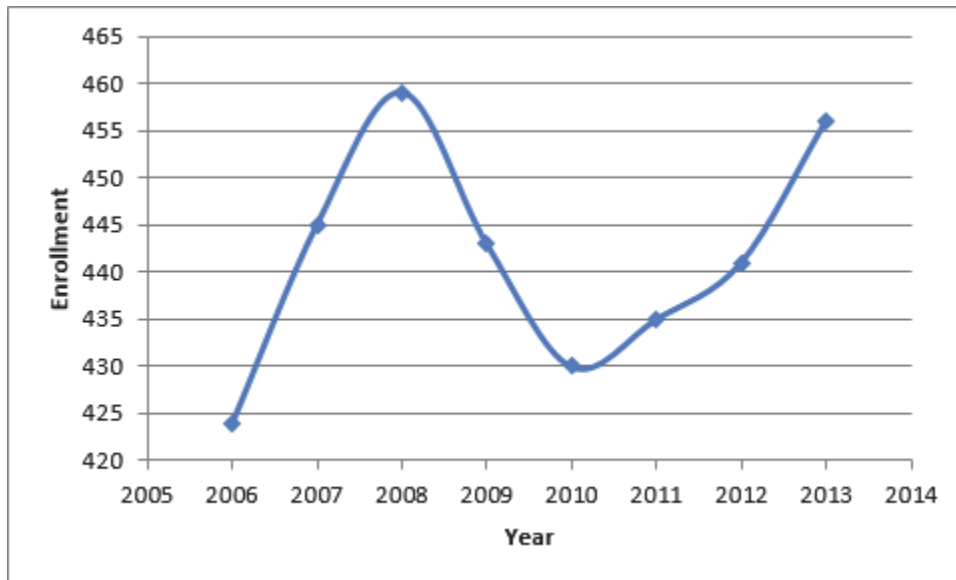
2-74 Chapter 2

143) The following table shows the enrollment at a private grade school from 2006 until 2013.

Year	Enrollment
2006	424
2007	445
2008	459
2009	443
2010	430
2011	435
2012	441
2013	456

Construct a line chart to display this data.

Answer:



Diff: 1

Keywords: line chart

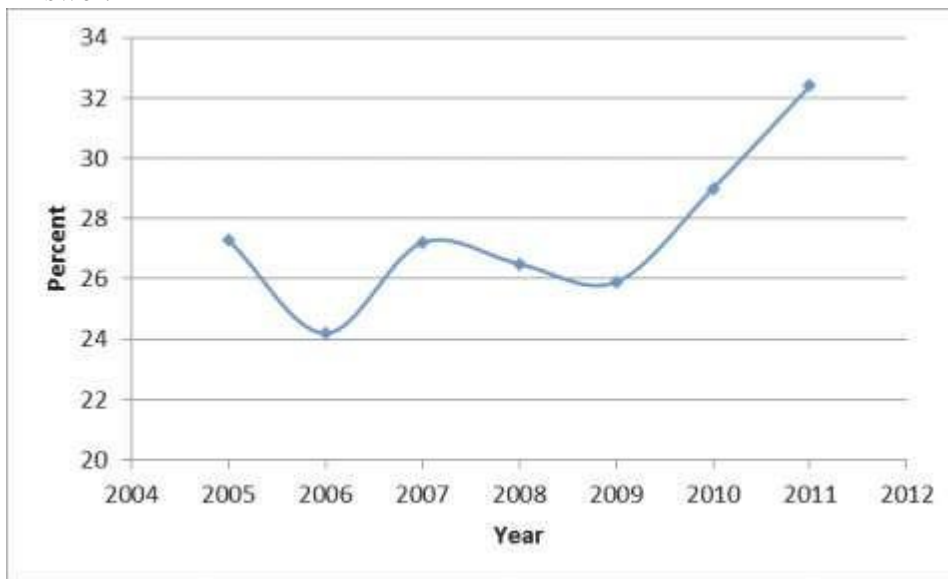
Objective: 2.2.6

144) The following table shows the percent of car sales that were SUVs from 2005 until 2011.

<b>Year</b>	<b>Percent</b>
2005	27.3
2006	24.2
2007	27.2
2008	26.5
2009	25.9
2010	29.0
2011	32.4

Construct a line chart to display this data.

Answer:



Diff: 1

Keywords: line chart

Objective: 2.2.6